



This is a digital copy of a book that was preserved for generations on library shelves before it was carefully scanned by Google as part of a project to make the world's books discoverable online.

It has survived long enough for the copyright to expire and the book to enter the public domain. A public domain book is one that was never subject to copyright or whose legal copyright term has expired. Whether a book is in the public domain may vary country to country. Public domain books are our gateways to the past, representing a wealth of history, culture and knowledge that's often difficult to discover.

Marks, notations and other marginalia present in the original volume will appear in this file - a reminder of this book's long journey from the publisher to a library and finally to you.

### **Usage guidelines**

Google is proud to partner with libraries to digitize public domain materials and make them widely accessible. Public domain books belong to the public and we are merely their custodians. Nevertheless, this work is expensive, so in order to keep providing this resource, we have taken steps to prevent abuse by commercial parties, including placing technical restrictions on automated querying.

We also ask that you:

- + *Make non-commercial use of the files* We designed Google Book Search for use by individuals, and we request that you use these files for personal, non-commercial purposes.
- + *Refrain from automated querying* Do not send automated queries of any sort to Google's system: If you are conducting research on machine translation, optical character recognition or other areas where access to a large amount of text is helpful, please contact us. We encourage the use of public domain materials for these purposes and may be able to help.
- + *Maintain attribution* The Google "watermark" you see on each file is essential for informing people about this project and helping them find additional materials through Google Book Search. Please do not remove it.
- + *Keep it legal* Whatever your use, remember that you are responsible for ensuring that what you are doing is legal. Do not assume that just because we believe a book is in the public domain for users in the United States, that the work is also in the public domain for users in other countries. Whether a book is still in copyright varies from country to country, and we can't offer guidance on whether any specific use of any specific book is allowed. Please do not assume that a book's appearance in Google Book Search means it can be used in any manner anywhere in the world. Copyright infringement liability can be quite severe.

### **About Google Book Search**

Google's mission is to organize the world's information and to make it universally accessible and useful. Google Book Search helps readers discover the world's books while helping authors and publishers reach new audiences. You can search through the full text of this book on the web at <http://books.google.com/>

Educ T 188.90.251



**Harvard College Library**

FROM

**Leslie Lyle Campbell**

.....

.....

0

ELEMENTS

OF THE

DIFFERENTIAL CALCULUS,

WITH

EXAMPLES AND APPLICATIONS.

A TEXT BOOK

BY

W. E. BYERLY, PH.D.,

ASSISTANT PROFESSOR OF MATHEMATICS IN HARVARD UNIVERSITY.



BOSTON, U.S.A.:

PUBLISHED BY GINN & COMPANY.

1890.

EduCT 188.90.251  
✓

APR 8 1936

Leslie Lyte Campbell

Entered according to Act of Congress, in the year 1879, by  
W. E. BYERLY,  
in the office of the Librarian of Congress, at Washington.

TYPOGRAPHY BY J. S. CUSHING & Co., BOSTON.

PRESSWORK BY GINN & Co., BOSTON.

## PREFACE.

---


THE following book, which embodies the results of my own experience in teaching the Calculus at Cornell and Harvard Universities, is intended for a text-book, and not for an exhaustive treatise.

Its peculiarities are the rigorous use of the Doctrine of Limits as a foundation of the subject, and as preliminary to the adoption of the more direct and practically convenient infinitesimal notation and nomenclature; the early introduction of a few simple formulas and methods for integrating; a rather elaborate treatment of the use of infinitesimals in pure geometry; and the attempt to excite and keep up the interest of the student by bringing in throughout the whole book, and not merely at the end, numerous applications to practical problems in geometry and mechanics.

I am greatly indebted to Prof. J. M. Peirce, from whose lectures I have derived many suggestions, and to the works of Benjamin Peirce, Todhunter, Duhamel, and Bertrand, upon which I have drawn freely.

W. E. BYERLY.

CAMBRIDGE, *October, 1879.*



# TABLE OF CONTENTS.

---

## CHAPTER I.

### INTRODUCTION.

Article.	Page.
1. Definition of <i>variable</i> and <i>constant</i> . . . . .	1
2. Definition of <i>function</i> and <i>independent variable</i> . . . . .	1
3. Symbols by which functional dependence is expressed . . . . .	2
4. Definition of <i>increment</i> . Notation for an increment. An increment may be positive or negative . . . . .	2
5. Definition of the <i>limit</i> of a variable . . . . .	3
6. Examples of <i>limits</i> in Algebra . . . . .	3
7. Examples of <i>limits</i> in Geometry . . . . .	4
8. The fundamental proposition in the <i>Theory of Limits</i> . . . . .	5
9. Application to the proof of the theorem that the area of a circle is one-half the product of the circumference by the radius. . . . .	5
10. Importance of the clear conception of a <i>limit</i> . . . . .	6
11. The velocity of a moving body. <i>Mean velocity</i> ; <i>actual velocity at any instant</i> ; <i>uniform velocity</i> ; <i>variable velocity</i> . . . . .	6
12. Actual velocity easily indicated by aid of the <i>increment</i> notation . . . . .	7
13. Velocity of a falling body . . . . .	7
14. The direction of the tangent at any point of a given curve. Definition of <i>tangent</i> as limiting case of <i>secant</i> . . . . .	8
15. The <i>inclination of a curve to the axis of X</i> easily indicated by the aid of the <i>increment</i> notation . . . . .	8
16. The inclination of a parabola to the axis of <i>X</i> . . . . .	9
17. Fundamental object of the Differential Calculus . . . . .	10

## CHAPTER II.

### DIFFERENTIATION OF ALGEBRAIC FUNCTIONS.

18. Definition of <i>derivative</i> . Derivative of a <i>constant</i> . . . . .	11
19. General method of finding the derivative of any given function. General formula for a derivative. Examples . . . . .	11

Article.	Page.
20. Classification of <i>functions</i> . . . . .	12
21. Differentiation of the <i>product of a constant and the variable</i> ; of a <i>power of the variable</i> , where the exponent is a positive integer . . . . .	13
22. Derivative of a <i>sum of functions</i> . . . . .	14
23. Derivative of a <i>product of functions</i> . . . . .	15
24. Derivative of a <i>quotient of functions</i> . Examples . . . . .	17
25. Derivative of a <i>function of a function</i> of the variable . . . . .	18
26. Derivative of a <i>power</i> of the variable where the exponent is <i>negative</i> or <i>fractional</i> . Complete set of formulas for the differentiation of Algebraic functions. Examples . . . . .	19

## CHAPTER III.

## APPLICATIONS.

*Tangents and Normals.*

27. Direction of <i>tangent</i> and <i>normal</i> to a plane curve . . . . .	22
28. Equations of <i>tangent</i> and <i>normal</i> . <i>Subtangent</i> . <i>Subnormal</i> . <i>Length</i> of tangent. <i>Length</i> of normal. Examples . . . . .	23
29. Derivative may sometimes be found by solving an equation. Examples . . . . .	25

*Indeterminate Forms.*

30. Definition of <i>infinite</i> and <i>infinitely great</i> . . . . .	26
31. Value of a function corresponding to an infinite value of the variable . . . . .	26
32. Infinite value of a function corresponding to a particular value of the variable . . . . .	27
33. The expressions $\frac{0}{0}$ , $\frac{\infty}{\infty}$ , and $0 \times \infty$ , called indeterminate forms. When definite values can be attached to them . . . . .	28
34. Treatment of the form $\frac{0}{0}$ . Examples . . . . .	28
35. Reduction of the forms $\frac{\infty}{\infty}$ and $0 \times \infty$ to the form $\frac{0}{0}$ . . . . .	30

*Maxima and Minima of a Continuous Function.*

36. <i>Continuous</i> change. <i>Continuous function</i> . . . . .	31
37. If a function increases with the increase of the variable, its derivative is positive; if it decreases, negative . . . . .	31
38. Value of derivative shows rate of increase of function . . . . .	32
39. Definition of <i>maximum</i> and <i>minimum</i> values of a function . . . . .	32



TABLE OF CONTENTS.

vii

Article.	Page.
40. <i>Derivative zero</i> at a maximum or a minimum . . . . .	33
41. Geometrical illustration . . . . .	33
42. Sign of derivative near a zero value shown by the value of its own derivative . . . . .	34
43. Derivatives of different orders . . . . .	34
44. Numerical example . . . . .	34
45. Investigation of a minimum . . . . .	35
46. Case where the third derivative must be used. Examples . .	35
47. General rule for discovering maxima and minima. Examples .	36
48. Use of auxiliary variables. Examples . . . . .	38
49. Examples . . . . .	39

*Integration.*

50. Statement of the problem of finding the <i>distance</i> traversed by a falling body, given the <i>velocity</i> . . . . .	41
51. Statement of the problem of finding the <i>area</i> bounded by a given curve . . . . .	41
52. Statement of the problem of finding the length of an arc of a given curve . . . . .	42
53. <i>Integration. Integral.</i> . . . . .	44
54. <i>Arbitrary constant</i> in integration . . . . .	44
55. Some formulas for direct integration . . . . .	44
56. Solution of problem stated in Article 50 . . . . .	45
57. Example under problem stated in Article 51. Examples . . .	46
58. Examples under problem stated in Article 52 . . . . .	48

CHAPTER IV.

TRANSCENDENTAL FUNCTIONS.

59. Differentiation of $\log x$ requires the investigation of the limit of $\left(1 + \frac{1}{m}\right)^m$ . . . . .	49
60. Expansion of $\left(1 + \frac{1}{m}\right)^m$ by the Binomial Theorem . . . . .	50
61. Proof that the limit in question is the sum of a well-known series . . . . .	50
62. This series is taken as the base of the natural system of loga- rithms. Computation of its numerical value . . . . .	52
63. Extension of the proof given above to the cases where $m$ is not a positive integer . . . . .	53
64. Differentiation of $\log x$ completed . . . . .	54
65. Differentiation of $a^x$ . Examples . . . . .	55

Article.	<i>Trigonometric Functions.</i>	Page
66.	<i>Circular measure of an angle. Reduction from degree to circular measure. Value of the unit in circular measure . . .</i>	57
67.	Differentiation of $\sin x$ requires the investigation of the limit $\frac{\sin \Delta x}{\Delta x}$ and $\frac{1 - \cos \Delta x}{\Delta x}$ . . . . .	57
68.	Investigation of these limits . . . . .	58
69.	Differentiation of the Trigonometric Functions. Examples .	59
70.	<i>Anti- or inverse</i> Trigonometric Functions . . . . .	60
71.	Differentiation of the Anti-Trigonometric Functions. Examples	60
72.	<i>Anti- or inverse</i> notation. Differentiation of <i>anti-</i> functions in general . . . . .	61
73.	The derivative of $y$ with respect to $x$ , and the derivative of $x$ with respect to $y$ , are reciprocals. Examples . . . . .	62

## CHAPTER V.

## INTEGRATION.

74.	Formulas for <i>direct</i> integration . . . . .	65
75.	Integration by <i>substitution</i> . Examples . . . . .	66
76.	If $fx$ can be integrated, $f(a + bx)$ can always be integrated. Examples . . . . .	67
77.	$\int_x \frac{1}{\sqrt{(a^2 - x^2)}}$ . Examples . . . . .	67
78.	$\int_x \frac{1}{\sqrt{(a^2 + x^2)}}$ . Example . . . . .	68
79.	<i>Integration by parts</i> . Examples . . . . .	69
80.	$\int_x \sin^2 x$ . Examples . . . . .	69
81.	Use of <i>integration by substitution</i> and <i>integration by parts</i> in combination. Examples . . . . .	70
82.	Simplification by an <i>algebraic transformation</i> . Examples . . .	71

*Applications.*

83.	Area of a segment of a circle; of an ellipse; of an hyperbola .	72
84.	Length of an arc of a circle . . . . .	74
85.	Length of an arc of a parabola. Example . . . . .	75

## CHAPTER VI.

## CURVATURE.

86.	<i>Total curvature; mean curvature; actual curvature. Formula for actual curvature . . . . .</i>	77
-----	--	----

TABLE OF CONTENTS.

ix

Article.	Page.
87. To find <i>actual curvature</i> conveniently, an indirect method of differentiation must be used . . . . .	77
88. The derivative of $z$ with respect to $y$ is the quotient of the derivative of $z$ with respect to $x$ by the derivative of $y$ with respect to $x$ . . . . .	78
89. Reduced formula for <i>curvature</i> . Examples . . . . .	78
90. <i>Osculating circle</i> . <i>Radius of curvature</i> . <i>Centre of curvature</i> .	81
91. Definition of <i>evolute</i> . Formulas for <i>evolute</i> . . . . .	82
92. <i>Evolute of a parabola</i> . . . . .	83
93. Reduced formulas for <i>evolute</i> . Example . . . . .	85
94. <i>Evolute of an ellipse</i> . Example . . . . .	85
95. Every normal to a curve is tangent to the <i>evolute</i> . . . . .	87
96. Length of an arc of <i>evolute</i> . . . . .	88
97. Derivation of the name <i>evolute</i> . <i>Involute</i> . . . . .	88

CHAPTER VII.

THE CYCLOID.

98. Definition of the cycloid . . . . .	90
99. Equations of cycloid referred to the base and a tangent at the lowest point as axes. Examples . . . . .	90
100. Equations of the cycloid referred to vertex as origin. Examples . . . . .	92
101. Statement of properties of cycloid to be investigated . . . . .	93
102. Direction of tangent and normal. Examples . . . . .	93
103. Equations of tangent and normal. Example . . . . .	94
104. Subtangent. Subnormal. Tangent. Normal . . . . .	94
105. Curvature. Examples . . . . .	95
106. <i>Evolute of cycloid</i> . . . . .	96
107. Length of an arc of cycloid . . . . .	97
108. Area of cycloid. Examples . . . . .	98
109. Definition and equations of <i>epicycloid</i> and <i>hypocycloid</i> . Examples . . . . .	99

CHAPTER VIII.

PROBLEMS IN MECHANICS.

110. Formula for <i>velocity</i> in terms of distance and time . . . . .	102
111. <i>Acceleration</i> . Example. Differential equations of motion . . . . .	102
112. Two principles of mechanics taken for granted . . . . .	103
113. Problem of a body falling freely near the earth's surface . . . . .	103

Article.	Page.
114. Second method of integrating the equations of motion in the case of a falling body . . . . .	104
115. Motion down an <i>inclined plane</i> . . . . .	106
116. Motion of a body sliding down a chord of a vertical circle. Example . . . . .	107
117. Problem of a body falling from a distance toward the earth. <i>Velocity of fall. Limit of possible velocity. Time of fall.</i> Examples . . . . .	108
118. Motion down a smooth curve. Examples . . . . .	112
119. Time of descent of a particle from any point of the arc of an inverted cycloid to the vertex. <i>Cycloidal pendulum. Tautochrone</i> . . . . .	113
120. A problem for practice . . . . .	116

CHAPTER IX.

DEVELOPMENT IN SERIES.

121. Definition of <i>series</i> . <i>Convergent series. Divergent series.</i> <i>Sum of series</i> . . . . .	117
122. Example of a series . . . . .	117
123. Function obtained by integration from one of its derivatives. <i>Series suggested</i> . . . . .	118
124. Development of $f(x_0 + h)$ into a series. Determination of the coefficients on the assumption that the development is possible. Examples . . . . .	119
125. An error committed in taking a given number of terms as equivalent to the function developed . . . . .	122
126. Lemma . . . . .	122
127. Error determined . . . . .	123
128. Second form for <i>remainder</i> . <i>Taylor's Theorem</i> . . . . .	125
129. Examples of use of expression for <i>remainder</i> . <i>Test for the possibility of developing a function</i> . . . . .	126
130. Development of $\log(1+x)$ . . . . .	127
131. The <i>Binomial Theorem</i> . Investigation of the cases in which the ordinary development holds for a negative or fractional value of the exponent. Example . . . . .	129
132. <i>Maclaurin's Theorem</i> . . . . .	132
133. Development of $a^x$ , $e^x$ , and $e$ . . . . .	133
134. Development of $\sin x$ and $\cos x$ . . . . .	134
135. Development of $\sin^{-1}x$ and $\tan^{-1}x$ . Examples . . . . .	134
136. The investigation of the <i>remainder</i> in Taylor's Theorem often omitted. Examples . . . . .	136

TABLE OF CONTENTS.

Article.	Page.
137. <i>Leibnitz's Theorem for Derivatives of a Product</i> . . . . .	136
138. Development of $\tan x$ . Example . . . . .	137

*Indeterminate Forms.*

139. Treatment of <i>indeterminate forms</i> by the aid of Taylor's Theorem. The form $\frac{0}{0}$ . Example . . . . .	138
140. Special consideration of the case where the form $\frac{0}{0}$ occurs for an infinite value of the variable . . . . .	139
141. The form $\frac{\infty}{\infty}$ ; special consideration of the cases where its <i>true value</i> is zero or infinite . . . . .	141
142. Reduction of the forms $\infty^0$ , $1^\infty$ , $0^\infty$ to forms already discussed. Examples . . . . .	142

*Maxima and Minima.*

143. Treatment of <i>maxima and minima</i> by Taylor's Theorem . . . . .	145
145. Generalization of the investigation in the preceding article. Examples . . . . .	146

CHAPTER X.

INFINITESIMALS.

146. Definition of <i>infinitesimal</i> . . . . .	149
147. <i>Principal infinitesimal</i> . Order of an infinitesimal. Examples . . . . .	149
148. Determination of the order of an infinitesimal. Examples . . . . .	150
149. Infinitesimal increments of a function and of the variable on which it depends are of the same order . . . . .	151
150. Lemma. Expression for the the coördinates of points of a curve by the aid of an auxiliary variable . . . . .	152
151. Lemma . . . . .	153
152. Lemma . . . . .	153
153. Geometrical example of an infinitesimal of the <i>second order</i> . . . . .	154
154. In determining a tangent the secant line can be replaced by a line infinitely near . . . . .	155
155. Tangent at any point of the <i>pedal</i> of a given curve . . . . .	156
156. The locus of the foot of a perpendicular let fall from the focus of an ellipse upon a tangent. Example . . . . .	157
157. Tangent at any point of the locus of a point cutting off a given distance on the normal to a given curve . . . . .	158
158. Tangent to the locus of the vertex of an angle of constant magnitude, circumscribed about a given curve. Example . . . . .	159

Article.	Page.
159. The substitution of one <i>infinitesimal</i> for another . . . . .	160
160. Theorem concerning the <i>limit of the ratio</i> of two infinitesimals . . . . .	160
161. Theorem concerning the <i>limit of the sum</i> of infinitesimals . . . . .	161
162. If two infinitesimals differ from each other by an infinitesimal of higher order, the limit of their ratio is unity . . . . .	162
163. Direction of a tangent to a parabola . . . . .	163
164. Area of a sector of a parabola . . . . .	164
165. The limit of the ratio of an infinitesimal arc to its chord is unity . . . . .	165
166. Rough use of infinitesimals . . . . .	166
167. Tangent to an ellipse. Examples . . . . .	167
168. The area of a segment of a parabola. Examples . . . . .	168
169. New way of regarding the cycloid . . . . .	169
170. <i>Tangent</i> to the cycloid . . . . .	170
171. <i>Area</i> of the cycloid . . . . .	171
172. <i>Length of an arc</i> of the cycloid . . . . .	172
173. <i>Radius of curvature</i> of the cycloid . . . . .	174
174. <i>Evolute</i> of the cycloid . . . . .	176
175. Examples . . . . .	177
176. The <i>brachistochrone</i> , or <i>curve of quickest descent</i> a cycloid . . . . .	177

## CHAPTER XI.

## DIFFERENTIALS.

177. In obtaining a <i>derivative</i> the <i>increment</i> of the function may be replaced by a simpler infinitesimal. Application to the <i>derivative of an area</i> ; to the <i>derivative of an arc</i> . . . . .	183
178. Definition of <i>differential</i> . . . . .	185
179. Differential notation for a <i>derivative</i> . A derivative is the actual ratio of two differentials . . . . .	185
180. Advantage of the differential notation . . . . .	185
181. Formulas for differentials of functions. Examples . . . . .	186
182. The differential notation especially convenient in dealing with problems in <i>integration</i> . Numerical example . . . . .	187
183. Integral regarded as the <i>limit of a sum of differentials</i> . <i>Definite integral</i> . . . . .	188
184. An area regarded as the limit of a sum of infinitesimal rectangles. Example . . . . .	189
185. Definition of <i>centre of gravity</i> . The centre of gravity of a parabola . . . . .	190

TABLE OF CONTENTS.

xiii

*Differentials of Different Orders.*

Article.	Page.
186. Definition of the <i>order</i> of a differential . . . . .	192
187. Relations between differentials and derivatives of different orders. Assumption that the differential of the independent variable is constant . . . . .	193
188. Expression for the second derivative in terms of differentials when no assumption is made concerning the differential of the independent variable . . . . .	194
189. Differential expression for the <i>radius of curvature</i> . . . . .	194
190. <i>Finite differences</i> or <i>increments</i> of different orders . . . . .	194
191. Any infinitesimal increment differs from the differential of the same order by an infinitesimal of higher order . . . . .	196
192. Lemma . . . . .	197
193. Proof of statement in Article 191 . . . . .	197

CHAPTER XII.

FUNCTIONS OF MORE THAN ONE VARIABLE.

*Partial Derivatives.*

194. Illustration of a <i>function of two variables</i> . . . . .	199
195. Definition of <i>partial derivative</i> of a function of several variables. Illustration . . . . .	199
196. <i>Successive partial derivatives</i> . . . . .	200
197. In obtaining successive partial derivatives the order in which the differentiations occur is of no consequence . . . . .	200
198. <i>Complete differential</i> of a function of two variables. Example .	202
199. Use of partial derivatives in obtaining <i>ordinary</i> or <i>complete</i> derivatives. Example . . . . .	203
200. Special case of Article 199. Examples . . . . .	204
201. Use of partial derivatives in finding successive complete derivatives. Example . . . . .	205
202. Derivative of an implicit function. Examples . . . . .	206
203. Second derivative of an implicit function. Examples . . . . .	207

CHAPTER XIII.

CHANGE OF VARIABLE.

204. If the <i>independent variable</i> is changed, differentials of higher orders than the first must be replaced by more general values. . . . .	209
205. Example. . . . .	209

Article.	Page.
206. Example of the change of both dependent and independent variable at the same time. Example . . . . .	211
207. Direction of a tangent to a curve in terms of polar coördinates. Examples . . . . .	213
208. Treatment of the subject of <i>change of variable</i> without the use of differentials. Example . . . . .	214
209. Change of variable when partial derivatives are employed. First Method. Examples . . . . .	215
210. Second Method. Examples . . . . .	217
211. Third Method. Examples . . . . .	218

## CHAPTER XIV.

## TANGENT LINES AND PLANES IN SPACE.

212. A curve in space is represented by a pair of simultaneous equations . . . . .	220
213. Equations of <i>tangent</i> line to a curve in space. Equation of <i>normal plane</i> . . . . .	220
214. Tangent and normal to <i>helix</i> . . . . .	221
215. Expressions for equation of tangent line to curve in space in terms of partial derivatives. Examples . . . . .	224
216. <i>Osculating plane</i> to a curve in space. Example . . . . .	225
217. <i>Tangent plane</i> to a <i>surface</i> . Examples . . . . .	226

## CHAPTER XV.

## DEVELOPMENT OF A FUNCTION OF SEVERAL VARIABLES.

218. <i>Taylor's</i> and <i>Maclaurin's</i> Theorems for <i>functions of two independent variables</i> . Example . . . . .	227
219. <i>Taylor's</i> Theorem for three variables. Example . . . . .	231
220. <i>Euler's Theorem</i> for <i>homogeneous functions</i> . Example . . . . .	232

## CHAPTER XVI.

## MAXIMA AND MINIMA OF FUNCTIONS OF TWO OR MORE VARIABLES.

221. Essential conditions for the existence of a <i>maximum</i> or <i>minimum</i> . . . . .	234
222. Tests for the detection of maxima and minima . . . . .	235
223. Formulas for maxima and minima . . . . .	236
224. Examples . . . . .	236
225. Examples . . . . .	239



## CHAPTER XVII.

## THEORY OF PLANE CURVES.

*Concavity and Convexity.*

Article.	Page.
226. Tests for <i>concavity</i> and <i>convexity</i> of plane curves . . . . .	240
227. <i>Points of inflection</i> . . . . .	240
228. Application of <i>Taylor's Theorem</i> to the treatment of <i>convexity</i> and <i>concavity</i> and <i>points of inflection</i> . . . . .	241
229. Examples . . . . .	243
230. <i>Singular points</i> . . . . .	245
231. Definition of <i>multiple point</i> ; <i>osculating point</i> ; <i>cusps</i> ; <i>conjugate</i> <i>point</i> ; <i>point d'arrêt</i> ; <i>point saillant</i> . . . . .	245
232. Test for a <i>multiple point</i> . . . . .	246
233. Detection of <i>osculating points</i> , <i>cusps</i> , <i>conjugate points</i> , <i>points</i> <i>d'arrêt</i> , and <i>points saillant</i> . . . . .	247
234. Example of a <i>double point</i> . . . . .	247
235. Example of a <i>cusps</i> . . . . .	249
236. Example of a <i>conjugate point</i> . Examples . . . . .	250

*Contact of Curves.*

237. <i>Orders of contact</i> . . . . .	251
238. Order of contact indicates closeness of contact . . . . .	252
239. <i>Osculating circle</i> . Examples . . . . .	253

*Envelops.*

240. An equation may represent a <i>series</i> of curves. <i>Variable</i> <i>parameter</i> . <i>Envelop</i> . . . . .	255
241. Determination of the equation of an <i>envelop</i> . . . . .	255
242. Example . . . . .	257
243. An <i>evolute</i> the <i>envelop</i> of the <i>normal</i> . Examples . . . . .	257



# DIFFERENTIAL CALCULUS.

---

## CHAPTER I.

### INTRODUCTION.

1. A *variable quantity*, or simply a *variable*, is a quantity which, under the conditions of the problem into which it enters, is susceptible of an indefinite number of values.

A *constant quantity*, or simply a *constant*, is a quantity which has a fixed value.

For example; in the equation of a circle

$$x^2 + y^2 = a^2,$$

$x$  and  $y$  are variables, as they stand for the coördinates of any point of the circle, and so may have any values consistent with that fact; that is, they may have an unlimited number of different values;  $a$  is a constant, since it represents the radius of the circle, and has therefore a fixed value. Of course, any given number is a constant.

2. When one quantity depends upon another for its value, so that a change in the second produces a change in the first, the first is called a *function* of the second. If, as is generally the case, the two quantities in question are so related that a change in either produces a change in the other, either may be regarded as a function of the other. The one of which the other is considered a function is called *the independent variable*, or simply *the variable*.

For example ; if  $x$  and  $y$  are two variables connected by the relation

$$y = x^2,$$

we may regard  $x$  as the independent variable, and then  $y$  will be a function of  $x$ , for any change in  $x$  produces a corresponding change in its square ; or we may regard  $y$  as the independent variable, and then  $x$  will be a function of  $y$ , and from that point of view the relation would be more naturally written

$$x = \sqrt{y}.$$

Again, suppose the relation is

$$y = \sin x,$$

we may either regard  $y$  as a function of  $x$ , in which case we should naturally write the relation as above, or we may regard  $x$  as a function of  $y$ , and then we should more naturally express the same relation by

$$x = \sin^{-1} y,$$

i.e.,  $x$  is equal to the angle whose sine is  $y$ .

3. Functional dependence is usually indicated by the letters  $f$ ,  $F$ , and  $\varphi$ . Thus we may indicate that  $y$  is a function of  $x$  by writing

$$y = fx, \text{ or } y = Fx, \text{ or } y = \varphi x ;$$

and in each of these expressions the letter  $f$ ,  $F$ , or  $\varphi$  is not an algebraic quantity, but a mere symbol or abbreviation for the word *function*, and the equation is precisely equivalent to the sentence, *y depends upon x for its value, so that a change in the value of x will necessarily produce a change in the value of y.*

4. The difference between any two values of a variable is called an *increment* of the variable, since it may be regarded as the amount that must be added to the first value to produce the second. An increment is denoted by writing the letter  $\Delta$  before the variable in question. Thus the difference between two values of a variable  $x$  would be written  $\Delta x$ ,  $\Delta$  being merely a sym-

bol for the word *increment*, and the expression  $\Delta x$  representing a single quantity. It is to be noted that as an increment is a difference, it may be either positive or negative.

5. *If a variable which changes its value according to some law can be made to approach some fixed, constant value as nearly as we please, but can never become equal to it, the constant is called the limit of the variable under the circumstances in question.*

6. For example; the limit of  $\frac{1}{n}$ , as  $n$  increases indefinitely, is zero; for by making  $n$  sufficiently great we can evidently decrease  $\frac{1}{n}$  at pleasure, but we can never make it absolutely zero.

The sum of  $n$  terms of the geometrical progression  $1, \frac{1}{2}, \frac{1}{4}, \frac{1}{8}, \&c.$ , is a variable that changes as  $n$  changes, and if  $n$  is increased at pleasure, the sum will have 2 for its limit; for, by the formula for the sum of a geometrical progression,

$$s = \frac{ar^n - a}{r - 1}.$$

In this case,

$$s = \frac{\frac{1}{2^n} - 1}{\frac{1}{2} - 1} = \frac{1 - \frac{1}{2^n}}{\frac{1}{2}}.$$

By increasing  $n$ ,  $\frac{1}{2^n}$  can be made as small as we please, but cannot become absolutely zero; the numerator can then be made to approach the value 1 as nearly as we please, and the limit of the value of the fraction is obviously 2.

We say, then, that the limit of the sum of  $n$  terms of the progression  $1, \frac{1}{2}, \frac{1}{4}, \frac{1}{8}, \&c.$ , as  $n$  increases indefinitely, is 2.

In both of these examples the variable increases towards its limit, but remains always less than its limit. This, however, is not always the case. The variable may decrease towards its limit remaining always greater than the limit, or in approaching its limit, it may be sometimes greater and sometimes less

than the limit. Take, for example, the sum of  $n$  terms of the progression  $1, -\frac{1}{2}, \frac{1}{4}, -\frac{1}{8}, \frac{1}{16}, \&c.$ , where the ratio is  $-\frac{1}{2}$ . Here the limit of the sum as  $n$  increases indefinitely, is  $\frac{2}{3}$ . Let  $n$  start with the value 1 and increase; when

$$n = 1, s = 1,$$

and is greater than the limit  $\frac{2}{3}$ ; when

$$n = 2, s = \frac{1}{2},$$

and is less than  $\frac{2}{3}$ , but is nearer  $\frac{2}{3}$  than 1 was; when

$$n = 3, s = \frac{3}{4},$$

and is greater than  $\frac{2}{3}$ ; when

$$n = 4, s = \frac{5}{8},$$

and is less than  $\frac{2}{3}$ ; and as  $n$  increases, the values of  $s$  are alternately greater and less than the limit  $\frac{2}{3}$ , but each value of  $s$  is nearer  $\frac{2}{3}$  than the value before it.

7. It follows immediately from the definition of a *limit*, that the difference between a variable and its limit is itself a variable which has zero for its limit, and in order to prove that a given constant is the limit of a particular variable, it will always suffice to show that the difference between the two has the limit zero.

For example; it is shown in elementary geometry that the difference between the area of any circle and the area of the inscribed or circumscribed regular polygon can be made as small as we please by increasing the number of sides of the polygon, and this difference evidently can never become absolutely zero. The area of a circle is then the limit of the area of the regular inscribed or circumscribed polygon as the number of sides of the polygon is indefinitely increased.

It is also shown in geometry, that the difference between the length of the circumference of a circle and the length of the perimeter of the regular inscribed or circumscribed polygon can be decreased indefinitely by increasing at pleasure the number of sides of the polygon, and this difference evidently can never

become zero. The length of the circumference of a circle is then the limit of the length of the perimeter of the regular inscribed or circumscribed polygon as the number of sides of the latter is indefinitely increased.

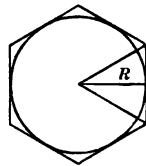
8. The fundamental proposition in the *theory of limits* is the following

**THEOREM.** — *If two variables are so related that as they change they keep always equal to each other, and each approaches a limit, their limits are absolutely equal.*

For two variables so related that they are always equal form but a single varying value, as at any instant of their change they are by hypothesis absolutely the same. A single varying value cannot be made to approach at the same time two different constant values as nearly as we please; for, if it could, it could eventually be made to assume a value between the two constants; and, after that, in approaching one it would recede from the other.

9. As an example of the use of this principle, let us prove that the area of a circle is one-half the product of the length of its radius by the length of its circumference.

Circumscribe about the circle any regular polygon, and join its vertices with the centre of the circle, thus dividing it into a set of triangles, each having for its base a side of the polygon, and for its altitude the radius of the circle. The area of each triangle is one-half the product of its base by the radius. The sum of these areas, or the area of the polygon, is one-half the length of the radius by the sum of the lengths of the sides, that is, by the length of the perimeter of the polygon. If  $A'$  is the area, and  $P$  the perimeter of the polygon, and  $R$  the radius of the circle, we have



$$A' = \frac{1}{2} RP;$$

a relation that holds, no matter what the number of sides of

the polygon.  $A'$  and  $\frac{1}{2}RP$  evidently change as we change the number of sides of the polygon; they are then two variables so related that, as they change, they keep always equal to each other. As the number of sides of the polygon is indefinitely increased,  $A'$  has the area of the circle as its limit;  $P$  has the circumference of the circle as its limit. Let  $A$  be the area and  $C$  the circumference of the circle; then the

$$\text{limit } A' = A,$$

and the

$$\text{limit } \frac{1}{2}RP = \frac{1}{2}RC.$$

By the Theorem of Limits these limits must be absolutely equal;

$$\therefore A = \frac{1}{2}RC.$$

Q. E. D.

10. It is of the utmost importance that the student should have a perfectly clear idea of a *limit*, as it is by the aid of this idea that many of the fundamental conceptions of mechanics and geometry can be most clearly realized in thought.

11. Let us consider briefly the subject of the velocity of a moving body.

The *mean velocity* of a moving body, during any period of time considered, is the quotient obtained by dividing the distance traversed by the body in the given period by the length of the period, the distance being expressed in terms of a unit of length, and the length of the period in terms of some unit of time.

If, for example, a body travels 60 feet in 3 seconds, its mean velocity during that period is said to be  $\frac{60}{3}$ , or 20; and the body is said to move at the mean rate of 20 feet per second.

The velocity of a moving body is *uniform* when its mean velocity is the same whatever the length of the period considered.

The *actual velocity* of a moving body at any instant, is the *limit* which the body's *mean velocity during the period* immediately succeeding the instant in question approaches as the length of the period is indefinitely decreased. In the case of



uniform velocity, the actual velocity at any instant is obviously the same as the actual velocity at any other instant.

If the actual velocity of a moving body is continually changing, the body is said to move with a *variable velocity*.

12. If the law governing the motion of a moving body can be formulated so as to express the distance traversed by the body in any given time as a function of the time, we can indicate the actual velocity at any instant very simply by the aid of the increment notation already explained. Represent the distance by  $s$  and the time by  $t$ . Then we have

$$s = ft.$$

Suppose we want to find the actual velocity at the end of  $t_0$  seconds. Let  $\Delta t$  be any arbitrary period immediately succeeding the end of  $t_0$  seconds (it can fairly be considered an increment as we really increase the time during which the body is supposed to have moved by  $\Delta t$  seconds), and let  $\Delta s$  be the distance traversed in that period. Then, by definition, the mean velocity during the period  $\Delta t$  is  $\frac{\Delta s}{\Delta t}$ , and the actual velocity desired is the limit approached by this ratio as  $\Delta t$  approaches zero. We shall indicate this by

$$\lim_{\Delta t \doteq 0} \left[ \frac{\Delta s}{\Delta t} \right],$$

which is to be read "the limit of  $\Delta s$  divided by  $\Delta t$ , as  $\Delta t$  approaches zero"; the sign  $\doteq$  standing for the word *approaches*.

13. Take a numerical example. In the case of a body falling freely in a vacuum near the surface of the earth, the relation connecting the distance fallen with the time is nearly

$$s = 16t^2,$$

$s$  being expressed in feet and  $t$  in seconds; required, *the actual velocity of a falling body* at the end of  $t_0$  seconds. Let  $\Delta t$  seconds be an arbitrary period immediately after the end of  $t_0$  seconds,

then in  $t_0 + \Delta t$  seconds  
 the body would fall  $16 (t_0 + \Delta t)^2$  feet,  
 or  $16 t_0^2 + 32 t_0 \Delta t + 16 (\Delta t)^2$  feet.

In  $t_0$  seconds it falls  $16 t_0^2$  feet, so that in the period  $\Delta t$  in question,  
 it would fall  $16 t_0^2 + 32 t_0 \Delta t + 16 (\Delta t)^2 - 16 t_0^2$  feet,  
 or  $32 t_0 \Delta t + 16 (\Delta t)^2$  feet,

which must therefore be  $\Delta s$ . If  $v_0$  be the required actual velocity,

$$v_0 = \lim_{\Delta t \rightarrow 0} \left[ \frac{\Delta s}{\Delta t} \right], \quad \text{by Art. 12.}$$

$$\frac{\Delta s}{\Delta t} = \frac{32 t_0 \Delta t + 16 (\Delta t)^2}{\Delta t} = 32 t_0 + 16 \Delta t,$$

and obviously 
$$\lim_{\Delta t \rightarrow 0} \left[ \frac{\Delta s}{\Delta t} \right] = 32 t_0.$$

Hence 
$$v_0 = 32 t_0,$$

the result required; and in general, the velocity  $v$  at the end of  $t$  seconds is

$$v = 32 t.$$

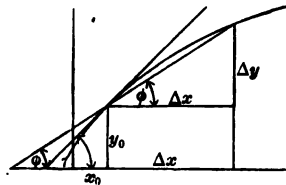
14. Let us now consider a geometrical problem: *To find the direction of the tangent at any point of a given curve.*

The *tangent* to a curve, at any given point, is the line with which the secant through the given point and any second point of the curve, tends to coincide as the second point is brought indefinitely near the first. In other words, its position is the *limiting position* of the secant line as the second point of intersection approaches the first, i.e., a position that the secant line can be made to approach as nearly as we please, but cannot actually assume.

15. Suppose we have the equation of a curve in rectangular coördinates, and wish to find the angle  $\tau$  that the tangent at a given point  $(x_0, y_0)$  of the curve makes with the axis of  $X$ ; that is, what is called *the inclination of the curve to the axis of X*.

The equation of the curve enables us to express  $y$  in terms of  $x$ , that is, as a function of  $x$ . We have then

$$y = fx.$$



Let

$$x_0 + \Delta x$$

be the abscissa of any second point  $P$  of the curve, and

$$y_0 + \Delta y$$

the corresponding ordinate. If  $\varphi$  is the angle which the secant through  $P_0$  and  $P$  makes with the axis of  $X$ , it is clear from the

figure that  $\tan \varphi = \frac{\Delta y}{\Delta x}$ .

As  $P$  approaches  $P_0$ , that is, as  $\Delta x$  decreases toward zero,  $\varphi$  evidently approaches  $\tau$  as its limit, and  $\tan \varphi$  of course approaches indefinitely  $\tan \tau$ . Hence, by the fundamental theorem of limits (Art. 8),

$$\tan \tau = \lim_{\Delta x \rightarrow 0} \left[ \frac{\Delta y}{\Delta x} \right].$$

16. Take a particular example. To find the inclination  $\tau_0$  to the axis of  $X$ , of the parabola

$$y^2 = 2mx$$

at the point  $(x_0, y_0)$  of the curve.

If the abscissa of  $P$  is  $x_0 + \Delta x$ , its ordinate  $y_0 + \Delta y$  must be

$$\sqrt{[2m(x_0 + \Delta x)]},$$

as is clear from the equation of the curve, which may be written

$$y = \sqrt{(2mx)}.$$

$$y_0 = \sqrt{(2mx_0)},$$

$\Delta y$  must be  $\sqrt{[2m(x_0 + \Delta x)]} - \sqrt{(2mx_0)}$ .

$$\frac{\Delta y}{\Delta x} = \frac{\sqrt{[2m(x_0 + \Delta x)]} - \sqrt{(2mx_0)}}{\Delta x};$$

or, multiplying numerator and denominator by

$$\sqrt{[2m(x_0 + \Delta x)]} + \sqrt{(2mx_0)}$$

to rationalize the numerator,

$$\frac{\Delta y}{\Delta x} = \frac{2m(x_0 + \Delta x) - 2mx_0}{\Delta x \{ \sqrt{[2m(x_0 + \Delta x)]} + \sqrt{(2mx_0)} \}},$$

$$\text{and } \tan \tau_0 = \lim_{\Delta x \rightarrow 0} \left[ \frac{\Delta y}{\Delta x} \right] = \frac{2m}{2\sqrt{(2mx_0)}} = \frac{m}{\sqrt{(2mx_0)}} = \frac{m}{y_0}.$$

At any point  $(x, y)$  of the parabola we should have

$$\tan \tau = \frac{m}{y}.$$

At the extremity of the latus rectum, i.e., at the point  $\left(\frac{m}{2}, m\right)$ ,

$$\tan \tau = \frac{m}{m} = 1,$$

and  $\tau = 45^\circ$ ,

a familiar property of the parabola.

17. Each of the problems we have just considered has required for its solution the investigation of the limit approached by the ratio of corresponding increments of a function and of the variable on which it depends, *as the increment of the independent variable approaches zero*. Such a limit is called a *derivative*, or a *differential coefficient*, and the study of its form and properties is the fundamental object of the *Differential Calculus*.

## CHAPTER II.

## DIFFERENTIATION OF ALGEBRAIC FUNCTIONS.

18. If  $y$  is a function of  $x$ , the *limit of the ratio of an increment of  $y$  to the corresponding increment of  $x$ , as the increment of  $x$  approaches zero*, is called the *derivative of  $y$  with respect to  $x$* , and is indicated by  $D_x y$ ,  $D_x$  being merely an abbreviation for *derivative with respect to  $x$* .\* For any particular value of  $x$ , this limit, as we shall see, will, in general, have a perfectly definite value; but it will change in value as  $x$  changes; that is, the derivative will, in general, be a new function of  $x$ .

Since our definition of derivative requires that  $y$  should be a function of  $x$ , that is, should change when  $x$  changes, it follows that a constant can have no derivative; and if we attempt to find the derivative of a constant by the method which we should use if it were a function of  $x$ , we shall be led to this same conclusion. Let  $a$  be any constant; then the increment produced in  $a$ , by giving  $x$  any increment, is absolutely 0; the ratio of this increment to the increment of  $x$  must then be 0; and as this ratio is always 0, its limit, when we suppose the increment of  $x$  to decrease, must be 0. Therefore

$$D_x a = 0. \quad [1]$$

19. The *general method of finding the derivative of any given function of  $x$* , is immediately suggested by the definition of a derivative. Take two values of  $x$ ,  $x_0$  and  $x_0 + \Delta x$ , and find the corresponding values of the given function; the difference between them is obviously the increment of the function, corresponding to the increment  $\Delta x$  of  $x$ . The limit of the ratio of the

---

\* The names *differential coefficient* and *derived function*, and the notation  $\frac{dy}{dx}$  in place of  $D_x y$ , are also in common use

two increments, as  $\Delta x$  approaches zero, will be the value of the derivative for the particular value  $x_0$  of  $x$ , and we may indicate it by  $[D_x y]_{x=x_0}$ . As  $x_0$  was taken at the start as any value of  $x$ , the subscripts may be dropped in the result, and the derivative will then be expressed as an ordinary function of  $x$ . The method may be formulated as follows:—

$$[D_x f x]_{x=x_0} = \lim_{\Delta x \doteq 0} \left[ \frac{f(x_0 + \Delta x) - f x_0}{\Delta x} \right]. \quad [1]$$

The student will observe that, in the problems in Arts. 13 and 16, we have really found  $D_t(16t^2)$  and  $D_x(\sqrt{2mx})$  by the method just described.

#### EXAMPLES.

Find

$$(1) D_x(20x); \quad (2) D_x(x^3); \quad (3) D_x\left(\frac{1}{x}\right); \quad (4) D_x(\sqrt{x});$$

by the general method.

$$Ans. (1) 20; \quad (2) 3x^2; \quad (3) -\frac{1}{x^2}; \quad (4) \frac{1}{2\sqrt{x}}.$$

20. In order to deal readily with problems into which derivatives enter, it is desirable to work out a complete set of formulas, or rules for finding the derivatives of ordinary functions; and it will be well to begin by roughly classifying functions.

The functions ordinarily considered are:—

(1) *Algebraic Functions*: those in which the only operations performed upon the variable, are the ordinary algebraic operations, namely: Addition, Subtraction, Multiplication, Division, Involution, and Evolution.

*Example.*  $\frac{1}{2}x^2 + 3\sqrt[3]{(x-1)}.$

(2) *Logarithmic Functions*: those involving a logarithm of the variable, or of a function of the variable.

*Examples.*  $x \log x;$

$$\log(x^2 - ax + b).$$

(3) *Exponential Functions*: those in which the variable, or a function of the variable, appears as an exponent.

*Example.*  $a \sqrt{(x^2 - x)}$ .

(4) *Trigonometric Functions*:

*Example.*  $\cos x - \sin^2 x$ .

21. We shall consider first, the *differentiation*\* of *Algebraic Functions* of  $x$ .

*Required*  $D_x(ax)$  where  $a$  is a constant.

By the general method (Art. 19),

$$\begin{aligned} [D_x ax]_{x=x_0} &= \lim_{\Delta x \neq 0} \left[ \frac{a(x_0 + \Delta x) - ax_0}{\Delta x} \right] = \lim_{\Delta x \neq 0} \left[ \frac{a \Delta x}{\Delta x} \right] \\ &= \lim_{\Delta x \neq 0} [a] = a; \\ \therefore D_x(ax) &= a. \end{aligned} \quad [1]$$

If  $a = 1$ , this becomes  $D_x x = 1$ . [2]

*Required*  $D_x x^n$  where  $n$  is a positive integer.

$$[D_x x^n]_{x=x_0} = \lim_{\Delta x \neq 0} \left[ \frac{(x_0 + \Delta x)^n - x_0^n}{\Delta x} \right].$$

By the Binomial Theorem,

$$(x_0 + \Delta x)^n = x_0^n + nx_0^{n-1}\Delta x + \frac{n(n-1)}{2}x_0^{n-2}(\Delta x)^2 + \dots + (\Delta x)^n$$

$$\frac{(x_0 + \Delta x)^n - x_0^n}{\Delta x} = nx_0^{n-1} + \frac{n(n-1)}{2}x_0^{n-2}\Delta x + \dots + (\Delta x)^{n-1}.$$

Each term after the first contains  $\Delta x$  as a factor, and therefore has zero for its limit as  $\Delta x$  approaches zero, so that

$$\lim_{\Delta x \neq 0} \left[ \frac{(x_0 + \Delta x)^n - x_0^n}{\Delta x} \right] = nx_0^{n-1};$$

$$\therefore [D_x x^n]_{x=x_0} = nx_0^{n-1}.$$

---

\* To *differentiate* is to find the derivative.

As  $x_0$  is any value of  $x$ , we may drop the subscript, and we have

$$D_x x^n = nx^{n-1}. \quad [3]$$

22. We shall next consider complex functions composed of two or more functions connected by algebraic operations; the *sum* of several functions, the *product* of functions, the *quotient* of functions.

*Required the derivative of  $u + v + w$ ,*

where each of the quantities  $u$ ,  $v$ , and  $w$  is a function of  $x$ .

Let  $\Delta x$  be any increment given to  $x$ , and  $\Delta u$ ,  $\Delta v$ , and  $\Delta w$  the corresponding increments of  $u$ ,  $v$ , and  $w$ . Then, obviously, the increment of the sum  $u + v + w$

is equal to  $\Delta u + \Delta v + \Delta w$ , and we have

$$\begin{aligned} D_x(u + v + w) &= \lim_{\Delta x \rightarrow 0} \left[ \frac{\Delta u + \Delta v + \Delta w}{\Delta x} \right] = \lim_{\Delta x \rightarrow 0} \left[ \frac{\Delta u}{\Delta x} + \frac{\Delta v}{\Delta x} + \frac{\Delta w}{\Delta x} \right] \\ &= \lim_{\Delta x \rightarrow 0} \left[ \frac{\Delta u}{\Delta x} \right] + \lim_{\Delta x \rightarrow 0} \left[ \frac{\Delta v}{\Delta x} \right] + \lim_{\Delta x \rightarrow 0} \left[ \frac{\Delta w}{\Delta x} \right]; \end{aligned}$$

but, since  $\Delta u$  and  $\Delta x$  are corresponding increments of the function  $u$  and the independent variable  $x$ ,

$$\lim_{\Delta x \rightarrow 0} \left[ \frac{\Delta u}{\Delta x} \right] = D_x u;$$

in like manner 
$$\lim_{\Delta x \rightarrow 0} \left[ \frac{\Delta v}{\Delta x} \right] = D_x v,$$

and 
$$\lim_{\Delta x \rightarrow 0} \left[ \frac{\Delta w}{\Delta x} \right] = D_x w;$$

hence 
$$D_x(u + v + w) = D_x u + D_x v + D_x w. \quad [1]$$

It is easily seen that the same proof in effect may be given, whatever the number of terms in the sum, and whether the connecting signs are plus or minus. So, using sum in the sense of algebraic sum, we can say. *the derivative with respect to  $x$*



of the sum of a set of functions of  $x$  is equal to the sum of the derivatives of the separate functions.

23. Required, the derivative of the product  $uv$ , where  $u$  and  $v$  are functions of  $x$ .

Let  $x_0$ ,  $u_0$ , and  $v_0$  be corresponding values of  $x$ ,  $u$ , and  $v$ ; let  $\Delta x$  be an increment given to  $x$ , and  $\Delta u$  and  $\Delta v$  the corresponding increments of  $u$  and  $v$ . Then,

$$[D_x(uv)]_{x=x_0} = \lim_{\Delta x \rightarrow 0} \left[ \frac{(u_0 + \Delta u)(v_0 + \Delta v) - u_0 v_0}{\Delta x} \right].$$

$$(u_0 + \Delta u)(v_0 + \Delta v) - u_0 v_0 = u_0 \Delta v + v_0 \Delta u + \Delta u \Delta v$$

$$\begin{aligned} \text{and } [D_x(uv)]_{x=x_0} &= \lim_{\Delta x \rightarrow 0} \left[ \frac{u_0 \Delta v + v_0 \Delta u + \Delta u \Delta v}{\Delta x} \right] \\ &= \lim_{\Delta x \rightarrow 0} \left[ u_0 \frac{\Delta v}{\Delta x} \right] + \lim_{\Delta x \rightarrow 0} \left[ v_0 \frac{\Delta u}{\Delta x} \right] + \lim_{\Delta x \rightarrow 0} \left[ \frac{\Delta u \Delta v}{\Delta x} \right]. \end{aligned}$$

$u_0$  does not change as  $\Delta x$  changes, and

$$\lim_{\Delta x \rightarrow 0} \left[ \frac{\Delta v}{\Delta x} \right] = [D_x v]_{x=x_0};$$

$$\text{so that } \lim_{\Delta x \rightarrow 0} \left[ u_0 \frac{\Delta v}{\Delta x} \right] = u_0 [D_x v]_{x=x_0};$$

and in like manner

$$\lim_{\Delta x \rightarrow 0} \left[ v_0 \frac{\Delta u}{\Delta x} \right] = v_0 [D_x u]_{x=x_0}.$$

$\frac{\Delta u \Delta v}{\Delta x}$  may be written  $\Delta u \frac{\Delta v}{\Delta x}$  or  $\Delta v \frac{\Delta u}{\Delta x}$ . Let us consider

$$\lim_{\Delta x \rightarrow 0} \left[ \Delta u \frac{\Delta v}{\Delta x} \right].$$

As  $\Delta x$  approaches 0,  $\Delta u$ , being the corresponding increment of the function  $u$ , will also approach 0; and the product  $\Delta u \frac{\Delta v}{\Delta x}$  will approach 0 as its limit, if  $\frac{\Delta v}{\Delta x}$  approaches any definite value;

that is, if  $D_x v$  has a definite value. It is, however, perfectly conceivable that  $\frac{\Delta v}{\Delta x}$  may increase indefinitely as  $\Delta x$  approaches zero, instead of having a definite limit; and, in that case, if  $\frac{\Delta v}{\Delta x}$  should increase rapidly enough to make up for the simultaneous decrease in  $\Delta u$ , the product  $\Delta u \frac{\Delta v}{\Delta x}$  would not approach zero.

We shall see, however, as we investigate all ordinary functions, that their derivatives have in general fixed definite values for any given value of the independent variable; but, until this is established, we can only say, that

$$\lim_{\Delta x \rightarrow 0} \left[ \Delta u \frac{\Delta v}{\Delta x} \right] = 0$$

when  $\frac{\Delta v}{\Delta x}$  or  $\frac{\Delta u}{\Delta x}$  has a definite limit, as  $\Delta x \rightarrow 0$ ; that is, when

$$[D_x v]_{x=x_0} \text{ or } [D_x u]_{x=x_0}$$

has a definite value. With this proviso, we can say,

$$[D_x (uv)]_{x=x_0} = v_0 [D_x u]_{x=x_0} + u_0 [D_x v]_{x=x_0};$$

or, dropping subscripts,

$$D_x (uv) = u D_x v + v D_x u. \quad [1]$$

Divide through by  $uv$ , and we have the equivalent form,

$$\frac{D_x (uv)}{uv} = \frac{D_x u}{u} + \frac{D_x v}{v}. \quad [2]$$

If we have a product of three factors, as  $uvw$ , we can represent the product of two of them, say  $vw$ , by  $z$ , and we have

$$\frac{D_x (uvw)}{uvw} = \frac{D_x (uz)}{uz} = \frac{D_x u}{u} + \frac{D_x z}{z}.$$

But

$$\frac{D_x z}{z} = \frac{D_x (vw)}{vw} = \frac{D_x v}{v} + \frac{D_x w}{w};$$

$$\therefore \frac{D_x(uvw)}{uvw} = \frac{D_x u}{u} + \frac{D_x v}{v} + \frac{D_x w}{w}. \quad [3]$$

This process may be extended to any number of factors, and we shall have the *derivative of a product of functions divided by the product equal to the sum of the terms obtained by dividing the derivative of each function by the function itself.*

24. Required the derivative of the quotient  $\frac{u}{v}$ , where  $u$  and  $v$  are functions of  $x$ . Employing our usual notation, we have

$$\left[ D_x \left( \frac{u}{v} \right) \right]_{x=x_0} = \lim_{\Delta x \doteq 0} \left[ \frac{u_0 + \Delta u - \frac{u_0}{v_0}}{\frac{v_0 + \Delta v}{v_0}} \right];$$

but 
$$\frac{u_0 + \Delta u}{v_0 + \Delta v} - \frac{u_0}{v_0} = \frac{v_0 \Delta u - u_0 \Delta v}{v_0^2 + v_0 \Delta v},$$

and dividing by  $\Delta x$ , we have

$$\begin{aligned} \left[ D_x \left( \frac{u}{v} \right) \right]_{x=x_0} &= \lim_{\Delta x \doteq 0} \left[ \frac{v_0 \frac{\Delta u}{\Delta x} - u_0 \frac{\Delta v}{\Delta x}}{v_0^2 + v_0 \Delta v} \right] \\ &= \frac{v_0 [D_x u]_{x=x_0} - u_0 [D_x v]_{x=x_0}}{v_0^2}, \end{aligned}$$

and dropping subscripts,

$$D_x \left( \frac{u}{v} \right) = \frac{v D_x u - u D_x v}{v^2}. \quad [1]$$

EXAMPLES.

Find

(1)  $D_x [x^3 + x - \sqrt{x}]$ ; (2)  $D_x [x^3 \sqrt{x}]$ ; (3)  $D_x \frac{\sqrt{x}}{x^4}$ .

Ans.

(1)  $3x^2 + 1 - \frac{1}{2\sqrt{x}}$ ; (2)  $\frac{x^2}{2\sqrt{x}} + 2x\sqrt{x}$ ; (3)  $-\frac{7}{2x^4\sqrt{x}}$

(4) Find, by Art. 24, [1],  $D_x \left( \frac{1}{x} \right)$ .

(5) Deduce  $D_x x^n$  from last part of Art. 23.

25. If the quantity to be differentiated is a function of a function of  $x$ , it is always theoretically possible, by performing the indicated operations, to express it directly as a function of  $x$ , and then to find its derivative by the ordinary rules; but it can usually be more easily treated by the aid of a formula which we shall proceed to establish.

*Required*,  $D_x fy$ ,  $y$  being itself a function of  $x$ . Let  $x_0$  and  $y_0$  be corresponding values of  $x$  and  $y$ ; let  $\Delta x$  be any increment given to  $x$ , and  $\Delta y$  the corresponding increment of  $y$ ; then

$$[D_x fy]_{x=x_0} = \lim_{\Delta x \rightarrow 0} \left[ \frac{f(y_0 + \Delta y) - fy_0}{\Delta x} \right],$$

and this can be written

$$\lim_{\Delta x \rightarrow 0} \left[ \frac{f(y_0 + \Delta y) - fy_0}{\Delta y} \cdot \frac{\Delta y}{\Delta x} \right].$$

As  $\Delta x$  and  $\Delta y$  are corresponding increments, they approach zero together; hence

$$\lim_{\Delta x \rightarrow 0} \left[ \frac{f(y_0 + \Delta y) - fy_0}{\Delta y} \right]$$

is the same as  $\lim_{\Delta y \rightarrow 0} \left[ \frac{f(y_0 + \Delta y) - fy_0}{\Delta y} \right]$ ,

which is equal to  $[D_y fy]_{y=y_0}$ .

$$\therefore [D_x fy]_{x=x_0} = [D_y fy]_{y=y_0} \cdot [D_x y]_{x=x_0};$$

or, dropping subscripts,

$$D_x fy = D_y fy \cdot D_x y. \quad [1]$$

This gives immediately, as extensions of Art. 21, [1] and [3],

$$D_x (ay) = aD_x y, \quad D_x y^n = ny^{n-1} D_x y.$$

26. Art. 21, [3] can now be readily extended to the case where  $n$  is any number positive or negative, whole or fractional.

Let  $n$  be a negative whole number  $-m$ ,  $m$  of course being a positive whole number. Let

$$y = x^n = x^{-m},$$

then we want  $D_x y$ . Multiplying both members of

$$y = x^{-m}$$

by  $x^m$ , we have  $x^m y = 1$ .

Since  $x^m y$  is a constant, its derivative with respect to  $x$  must be zero; but by Art. 23, [1] and Art. 21, [3],

$$D_x [x^m y] = x^m D_x y + y D_x x^m = x^m D_x y + m x^{m-1} y$$

$m$  being a positive integer;

$$\therefore x^m D_x y + m x^{m-1} y = 0,$$

and  $D_x y = -m x^{-1} y = -m x^{-m-1} = n x^{n-1}$ . Q.E.D.

Let  $n$  be any fraction  $\frac{p}{q}$  where  $p$  and  $q$  are integers either positive or negative. As before, let

$$y = x^n = x^{\frac{p}{q}}; \quad \text{required } D_x y.$$

Clearing  $y = x^{\frac{p}{q}}$  of radicals,

we have  $y^q = x^p$ ;

and since the two members are equal functions of  $x$ , their derivatives must be equal;

$$D_x y^q = D_x x^p,$$

or  $q y^{q-1} D_x y = p x^{p-1}$ ,

and  $D_x y = \frac{p}{q} \cdot \frac{x^{p-1}}{y^{q-1}} = \frac{p}{q} \cdot \frac{x^{p-1}}{(x^{\frac{p}{q}})^{q-1}} = \frac{p}{q} \cdot x^{\frac{p}{q}-1} = n x^{n-1}$ . Q.E.D.

The formula,  $D_x x^n = nx^{n-1}$ ,

Art. 21, [3], holds, then, whatever the value of  $n$ .

EXAMPLE.

Prove Art. 24, [1] by the aid of Art. 21, [3] and Art. 23, [1], regarding  $\frac{u}{v}$  as a product, namely  $uv^{-1}$ .

By the aid of these formulas,

$$D_x a = 0; \quad [1]$$

$$D_x ax = a; \quad [2]$$

$$D_x x = 1; \quad [3]$$

$$D_x x^n = nx^{n-1}; \quad [4]$$

$$D_x (u + v + w) = D_x u + D_x v + D_x w; \quad [5]$$

$$D_x (uv) = uD_x v + vD_x u; \quad [6]$$

$$D_x \left( \frac{u}{v} \right) = \frac{vD_x u - uD_x v}{v^2}; \quad [7]$$

$$D_x (fy) = D_y (fy) \cdot D_x y; \quad [8]$$

any algebraic function, no matter how complicated, may be differentiated.

EXAMPLES.

Find  $D_x u$  in each of the following cases:—

(1)  $u = m + nx$ . *Ans.*  $D_x u = n$ .

(2)  $u = (a + bx)x^3$ . *Ans.*  $D_x u = (4bx + 3a)x^2$ .

(3)  $u = \sqrt{(x^2 + a^2)}.$

*Solution:*  $u = \sqrt{(x^2 + a^2)} = (x^2 + a^2)^{\frac{1}{2}}.$

Let  $y = x^2 + a^2,$

then  $u = y^{\frac{1}{2}}.$

$D_x u = D_x y^{\frac{1}{2}} = D_y y^{\frac{1}{2}} \cdot D_x y$  by Art. 26, [8],

$D_y y^{\frac{1}{2}} = \frac{1}{2} y^{-\frac{1}{2}}$  by Art. 26, [4],

$D_x y = 2x;$

$\therefore D_x u = xy^{-\frac{1}{2}} = x(x^2 + a^2)^{-\frac{1}{2}} = \frac{x}{\sqrt{(x^2 + a^2)}}.$

(4)  $u = \left(\frac{x}{1+x}\right)^n.$  *Ans.*  $D_x u = \frac{nx^{n-1}}{(1+x)^{n+1}}.$

(5)  $u = \frac{x^2}{(a+x^3)^2}.$  *Ans.*  $D_x u = \frac{2x(a-2x^3)}{(a+x^3)^3}.$

(6)  $u = (1+x)\sqrt{(1-x)}.$  *Ans.*  $D_x u = \frac{1-3x}{2\sqrt{(1-x)}}.$

(7)  $u = \frac{x}{x + \sqrt{(x^2 + 1)}}.$  *Ans.*  $D_x u = \frac{2x^2 + 1}{\sqrt{(x^2 + 1)}} - 2x.$

(8)  $u = \sqrt{\left(\frac{1 - \sqrt{(x)}}{1 + \sqrt{(x)}}\right)}.$  *Ans.*  $D_x u = -\frac{1}{2(1 + \sqrt{x})\sqrt{(x-x^2)}}.$

(9)  $u = \sqrt{\left(\frac{1+x}{1-x}\right)}.$  *Ans.*  $D_x u = \frac{1}{(1-x)\sqrt{(1-x^2)}}.$

(10)  $u = \frac{\sqrt{(1+x^2)} + \sqrt{(1-x^2)}}{\sqrt{(1+x^2)} - \sqrt{(1-x^2)}}.$   
*Ans.*  $D_x u = -\frac{2}{x^2} \left[ 1 + \frac{1}{\sqrt{(1-x^4)}} \right].$

## CHAPTER III.

## APPLICATIONS.

*Tangents and Normals.*

27. We have shown, in Art. 15, that the angle  $\tau$ , made with the axis of  $x$  by the tangent at any given point of a plane curve,

when the equation  $y = fx$

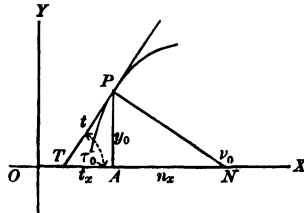
of the curve, referred to rectangular axes, is known, may be found by the relation

$$\tan \tau = \lim_{\Delta x \rightarrow 0} \left[ \frac{\Delta y}{\Delta x} \right],$$

where  $\Delta y$  and  $\Delta x$  are corresponding increments of  $y$  and  $x$ , the coördinates of a point of the curve. If the point be  $(x_0, y_0)$ , we have, then,

$$\tan \tau_0 = [D_x y]_{x=x_0}.$$

At any point  $(x, y)$   $\tan \tau = D_x y.$  [1]



A line perpendicular to any tangent, and passing through the point of contact of the tangent with the curve, is called the *normal* to the curve at that point. If  $\nu_0$  be the angle which the



normal at the point  $(x_0, y_0)$  makes with the axis of  $X$ , then it is evident from the figure, that

$$\nu_0 = 90^\circ + \tau_0,$$

and from trigonometry,

$$\tan \nu_0 = -\cot \tau_0 = -\frac{1}{[D_x y]_{x=x_0}}.$$

Of course, for any point  $(x, y)$

$$\tan \nu = -\frac{1}{D_x y}. \quad [2]$$

28. Since the tangent at  $(x_0, y_0)$  passes through  $(x_0, y_0)$ , and makes an angle  $\tau_0$  with the axis of  $x$ , its equation will be, by analytic geometry,

$$y - y_0 = \tan \tau_0 (x - x_0);$$

or, since

$$\tan \tau_0 = [D_x y]_{x=x_0},$$

$$y - y_0 = [D_x y]_{x=x_0} (x - x_0). \quad [1]$$

In like manner, the equation of the normal at  $(x_0, y_0)$  is found to

$$\text{be} \quad y - y_0 = -\frac{1}{[D_x y]_{x=x_0}} (x - x_0). \quad [2]$$

The distance *from* the point of intersection of the tangent with the axis of  $X$  to the foot of the ordinate of the point of contact, is called the *subtangent*, and is denoted by  $t_x$ .

The distance *from* the foot of the ordinate of the point to the intersection of the normal with the axis of  $X$ , is called the *subnormal*, and is denoted by  $n_x$ .

In the figure,  $TA$  and  $AN$  are respectively the *subtangent* and *subnormal*, corresponding to the point  $(x_0, y_0)$  of the curve.

$$\text{Obviously} \quad \frac{y_0}{t_x} = \tan \tau_0 = [D_x y]_{x=x_0}, \quad .$$

and  $\frac{y_0}{n_x} = \tan(180^\circ - \nu_0) = -\tan \nu_0 = \frac{1}{[D_x y]_{x=x_0}}$ ;

hence for the point  $(x_0, y_0)$ ,

$$t_x = \frac{y_0}{[D_x y]_{x=x_0}}, \quad n_x = y_0 [D_x y]_{x=x_0}.$$

The distance from the intersection of the tangent with the axis of  $X$  to the point of contact is sometimes called *the length of the tangent*, and may be denoted by  $t$ .

The distance from the point at which the normal is drawn to the point where the normal crosses the axis of  $X$  is sometimes called *the length of the normal*, and may be denoted by  $n$ .

It is easily seen from the figure, that

$$t = \sqrt{(y_0^2 + t_x^2)},$$

and  $n = \sqrt{(y_0^2 + n_x^2)}$ ;

hence  $t = y_0 [D_x y]_{x=x_0}^{-1} \sqrt{(1 + [D_x y]_{x=x_0}^2)}$ ,

and  $n = y_0 \sqrt{(1 + [D_x y]_{x=x_0}^2)}$ .

For any point  $(x, y)$ , our formulas become

$$t_x = \frac{y}{D_x y}; \quad [3]$$

$$n_x = y D_x y; \quad [4]$$

$$t = y [D_x y]^{-1} \sqrt{(1 + [D_x y]^2)}; \quad [5]$$

$$n = y \sqrt{(1 + [D_x y]^2)}. \quad [6]$$

#### EXAMPLES.

(1) Show that the inclination of a straight line to the axis of  $X$  is the same at every point of the line; i.e., prove  $\tan \tau$  constant.

(2) Show that the subnormal in a parabola

$$y^2 = 2mx$$

is constant, and that the subtangent is always twice the abscissa of the point of contact of the tangent.

(3) Find what point of the parabola must be taken in order that the inclination of the tangent to the axis of  $X$  may be  $45^\circ$ .

29. If the equation of the curve cannot be readily thrown into the form

$$y = fx,$$

$D_x y$  may be found by differentiating both members with respect to  $x$  and solving the resulting equation algebraically, regarding  $D_x y$  as the unknown quantity.

For example; required the equation of the tangent to a circle at the point  $(x_0, y_0)$  of the curve. The equation of a circle is

$$x^2 + y^2 = r^2,$$

$r$  being constant. Differentiating with respect to  $x$ , we have, by Art. 26, [8],

$$2x + 2yD_x y = 0.$$

Solving,

$$D_x y = -\frac{2x}{2y} = -\frac{x}{y}.$$

$$[D_x y]_{x=x_0} = -\frac{x_0}{y_0},$$

and by Art. 28, [1], the required equation is

$$y - y_0 = -\frac{x_0}{y_0} (x - x_0);$$

or, clearing of fractions,

$$y_0 y - y_0^2 = -x_0 x + x_0^2,$$

$$x_0 x + y_0 y = x_0^2 + y_0^2;$$

but  $(x_0, y_0)$  is on the curve, hence

$$x_0^2 + y_0^2 = r^2,$$

and we have

$$x_0 x + y_0 y = r^2,$$

the familiar form of the equation.

#### EXAMPLES.

(1) Find the equation of the normal at  $(x_0, y_0)$  in the circle; of the tangent and the normal at  $(x_0, y_0)$  in the ellipse and the hyperbola referred to their axes and centre.

(2) Find at what angle the curve  $y^2 = 2ax$

cuts the curve  $x^3 - 3axy + y^3 = 0$ .

Ans.  $\text{Cot}^{-1} \sqrt[3]{4}$ .

(3) Show that in the curve  $x^{\frac{2}{3}} + y^{\frac{2}{3}} = a^{\frac{2}{3}}$

the length of that part of the tangent intercepted between the axes is constant and equal to  $a$ .



#### Indeterminate Forms.

30. When, under the conditions of the problem, *the value of a variable quantity is supposed to increase indefinitely, that is, to increase without limit, so that the variable can be made greater than any assigned value, the variable is called an infinitely great quantity or simply an infinite quantity, and is usually represented by the symbol  $\infty$ . Since infinite quantities are variables, they will usually present themselves to us either as values of the independent variable or as values of a function.*

31. *By a value of a function corresponding to an infinite value of the variable, we shall mean the limit approached by the value of the function as the value of the variable increases indefinitely.*

Thus, if

$$y = fx,$$

and  $y$  approaches the value  $a$  as its limit as  $x$  increases indefinitely, the value of  $y$  corresponding to the value  $\infty$  of  $x$  is  $a$ , or as we shall say, for the sake of brevity,

$$y = a \text{ when } x = \infty.$$

Since  $\frac{1}{x}$  approaches 0 as its limit as  $x$  increases indefinitely, we say

$$\frac{1}{x} = 0 \text{ when } x = \infty,$$

or, more briefly,

$$\frac{1}{\infty} = 0.$$

*If, as the variable increases indefinitely the function instead of approaching a limit, itself increases indefinitely, we shall say*

$$y = \infty \text{ when } x = \infty,$$

meaning, of course,  $y$  increases indefinitely when  $x$  increases indefinitely.

32. *If, as the variable approaches indefinitely a particular value, the function increases without limit, we say that the function is infinite for that particular value of the variable.* For example; as the angle  $\varphi$  approaches the value  $90^\circ$ , its tangent increases indefinitely, and by taking  $\varphi$  sufficiently near  $90^\circ$ ,  $\tan \varphi$  can be made greater than any assigned value. So we

say  $\tan \varphi = \infty$  when  $\varphi = 90^\circ$ ,

or, more briefly still,  $\tan 90^\circ = \infty$ .

Again,  $\frac{1}{x}$  increases indefinitely as  $x$  approaches zero; so we

say  $\frac{1}{x} = \infty$  when  $x = 0$ ,

or simply  $\frac{1}{0} = \infty$ .

The student can easily convince himself, by a little consideration,

that our definition of *infinite* is entirely consistent with the ordinary use of the term in algebra, trigonometry, and analytic geometry.

33. The expressions,  $\frac{0}{0}$ ,  $\frac{\infty}{\infty}$ , and  $0 \times \infty$ , are called indeterminate forms; and as they stand, each of them may have any value whatever; for consider them in turn:—By the ordinary definition of a quotient as “a quantity that, multiplied by the divisor, will produce the dividend,”  $\frac{0}{0}$  may be anything, as any quantity multiplied by 0 will produce 0.

So, too,  $\frac{\infty}{\infty}$  may have any value, as obviously any given quantity multiplied by a quantity that increases without limit will give a quantity increasing without limit.

That  $0 \times \infty$  is indeterminate is not quite so obvious; for, since zero multiplied by any quantity gives 0, it would seem that zero multiplied by a quantity which increases indefinitely must still give zero, as is indeed the case; and it is only when  $0 \times \infty$  presents itself as the limiting value of a product of two variable factors, one of which decreases as the other increases, that we can regard it as indeterminate. In this case the value of the product will depend upon the relative decrease and increase of the two factors, and not merely upon the fact that one approaches zero as the other increases indefinitely.

It is only when  $\frac{0}{0}$ ,  $\frac{\infty}{\infty}$ , and  $0 \times \infty$  occur in *particular problems* as *limiting forms*, that we are able to attach definite values to them.

34. Each of the forms  $\frac{\infty}{\infty}$  and  $0 \times \infty$ , as we shall soon see, can be easily reduced to the form  $\frac{0}{0}$ , and this form we shall now proceed to study.

If  $fx = 0$  and  $Fx = 0$  when  $x = a$ ,

the fraction  $\frac{fx}{Fx}$ , which is, of course, a new function of  $x$ , assumes

the indeterminate form  $\frac{0}{0}$  when  $x = a$ , and the limit approached by the fraction as  $x$  approaches  $a$  is called the *true value* of the fraction when  $x = a$ , and can generally be readily determined.

By hypothesis  $fa = 0$  and  $Fa = 0$ ,

hence we can throw  $\frac{fx}{Fx}$  into the form  $\frac{fx - fa}{Fx - Fa}$ , for in so doing we are subtracting 0 from the numerator and 0 from the denominator of the fraction. Again, we can divide numerator and denominator by  $x - a$  without changing the value of the fraction ;

therefore 
$$\frac{fx}{Fx} = \frac{\frac{fx - fa}{x - a}}{\frac{Fx - Fa}{x - a}},$$

and the *true value* of

$$\left[ \frac{fx}{Fx} \right]_{x=a} = \lim_{x \rightarrow a} \left[ \frac{fx}{Fx} \right] = \lim_{x \rightarrow a} \left[ \frac{\frac{fx - fa}{x - a}}{\frac{Fx - Fa}{x - a}} \right].$$

But  $x - a$ , being the difference between two values of the variable, is an increment of  $x$ ;  $fx - fa$ , being the difference between the values of  $fx$  which correspond to  $x$  and  $a$ , is the corresponding increment of the function, hence

$$\lim_{x \rightarrow a} \left[ \frac{fx - fa}{x - a} \right] = [D_x fx]_{x=a};$$

and in the same way it can be shown that

$$\lim_{x \rightarrow a} \left[ \frac{Fx - Fa}{x - a} \right] = [D_x Fx]_{x=a};$$

wherefore the true value of  $\frac{fx}{Fx}$  when  $x = a$  is  $\frac{[D_x fx]_{x=a}}{[D_x Fx]_{x=a}}$ . We have then only to *differentiate numerator and denominator, and*

substitute in the new fraction  $a$  for  $x$ , in order to get the true value required. It may happen that the new fraction is also indeterminate when  $x = a$ ; if so, we must apply to it the same process that we applied to the original fraction.

The student will observe that this method is based upon the supposition that  $fa = 0$  and  $Fa = 0$ ,

so that it is only in this case that we have established the relation

$$\left[ \frac{fx}{Fx} \right]_{x=a} = \frac{[D_x fx]_{x=a}}{[D_x Fx]_{x=a}}.$$

#### EXAMPLES.

Find the true values of the following expressions:—

$$(1) \left[ \frac{x-1}{x^2-1} \right]_{x=1}. \quad \text{Ans. } \frac{1}{2}.$$

$$(2) \left[ \frac{x^4 + 3x^3 - 7x^2 - 27x - 18}{x^4 - 3x^3 - 7x^2 + 27x - 18} \right]_{x=3}. \quad \text{Ans. } 10.$$

$$(3) \left[ \frac{x^{\frac{3}{2}} - 1 + (x-1)^{\frac{3}{2}}}{(x^2-1)^{\frac{3}{2}} - x + 1} \right]_{x=1}. \quad \text{Ans. } -\frac{3}{2}.$$

$$(4) \left[ \frac{x^{\frac{3}{2}} - 1 + (x-1)^{\frac{3}{2}}}{\sqrt{(x^2-1)}} \right]_{x=1}. \quad \text{Ans. } 0.$$

$$(5) \left[ \frac{1 - \sqrt{(1-x)}}{\sqrt{(1+x)} - \sqrt{(1+x^2)}} \right]_{x=0}. \quad \text{Ans. } 1.$$

$$(6) \left[ \frac{\sqrt{(x)} - \sqrt{(a)} + \sqrt{(x-a)}}{\sqrt{(x^2-a^2)}} \right]_{x=a}. \quad \text{Ans. } \frac{1}{\sqrt{(2a)}}.$$

$$(7) \left[ \frac{x^3 - 3x + 2}{x^4 - 6x^2 + 8x - 3} \right]_{x=1}. \quad \text{Ans. } \infty.$$

35. If  $fx$  and  $Fx$  both increase indefinitely as  $x$  approaches the value  $a$ , or, as we say for the sake of brevity, if



$$fa = \infty \text{ and } Fa = \infty,$$

we can determine the true value of  $\left[ \frac{fx}{Fx} \right]_{x=a}$  by first throwing the

fraction  $\frac{fx}{Fx}$  into the equivalent form  $\frac{\frac{1}{Fx}}{\frac{1}{fx}}$ , which assumes the form

$\frac{0}{0}$  when  $x = a$ , and may be treated by the method just described.

If  $fx = 0$  and  $Fx = \infty$  when  $x = a$ ,

the true value of  $[fx.Fx]_{x=a}$  can be determined by throwing

$fx.Fx$  into the equivalent form  $\frac{fx}{\frac{1}{Fx}}$ , which assumes the form  $\frac{0}{0}$

when  $x = a$ .

*here*

✓ *Maxima and Minima of a Continuous Function.*

36. A variable is said to *change continuously* from one value to another when it changes *gradually* from the first value to the second, *passing through all the intermediate values.*

A function is said to be *continuous* between two given values of the variable, when it has a *single finite value* for every value of the variable between the given values, and *changes gradually* as the variable passes from the first value to the second.

37. If the function is *increasing* as the variable *increases*, the increment  $\Delta y$ , produced by adding to  $x$  a positive increment  $\Delta x$ , will be positive;  $\frac{\Delta y}{\Delta x}$  will therefore be positive, and  $\lim_{\Delta x \rightarrow 0} \left[ \frac{\Delta y}{\Delta x} \right]$  will also be positive; that is,  $D_x y$  will be positive.

If a function *decreases* as the variable *increases*, the increment  $\Delta y$ , produced by giving  $x$  a positive increment  $\Delta x$ , will be negative;  $\frac{\Delta y}{\Delta x}$  will therefore be negative, and  $\lim_{\Delta x \rightarrow 0} \left[ \frac{\Delta y}{\Delta x} \right]$  will also be negative; that is,  $D_x y$  will be negative.

Since  $D_x y$ , being, as we have seen, itself a function of  $x$ , may happen to be positive for some values of  $x$  and negative for others, it would seem that the same function may be sometimes increasing and sometimes decreasing as the variable increases, and this is often obviously the case. For example;  $\sin \varphi$  increases as  $\varphi$  increases, while  $\varphi$  is passing through the values between  $0^\circ$  and  $90^\circ$ ; but it decreases as  $\varphi$  increases, while  $\varphi$  is passing through the values between  $90^\circ$  and  $180^\circ$ .

38. Not only does any particular value of the derivative of a function show by its *sign* whether the function is *increasing* or *decreasing* with the increase of the variable, but it shows by its *numerical magnitude* the *rate* at which the function is changing in comparison with the change in the variable as the latter is passing through the corresponding value.

For example; when  $x = 2$ ,

$D_x x^2$  or  $2x$  equals 4, and this shows that when  $x$  increasing is passing through the value 2, its square is increasing four times as fast.

For if  $\Delta x$  and  $\Delta y$  are corresponding increments of the variable and the function, starting from a particular value  $x_0$  of  $x$ ,  $\frac{\Delta y}{\Delta x}$  may be regarded as the mean rate of change in  $y$  compared with the change in  $x$ , and  $\lim_{\Delta x \rightarrow 0} \left[ \frac{\Delta y}{\Delta x} \right]$  will then show the actual rate of change at the instant  $x$  passes through the value  $x_0$ .

39. If, as the variable increases, the function *increases up to a certain value and then decreases*, that value is called a *maximum* value of the function.

If, as the variable increases, the function *decreases to a certain value and then increases*, that value is called a *minimum* value of the function.

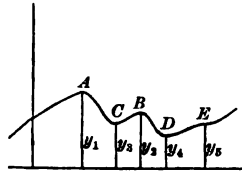
In these definitions of maximum and minimum values, the variable is supposed to *increase continuously*.

As a maximum value is merely a value greater than the values

immediately before and immediately after it, a function may have several different maximum values; and, for a like reason, it may have several different minimum values. If

$$y = fx$$

be the equation of the curve in the figure, the ordinates  $y_1$  and  $y_2$  are maximum values of  $y$ ,  $y_3$  and  $y_4$  are minimum values of  $y$ .



40. In the following discussion we shall suppose throughout that the variable continually increases. Then, as at a maximum value, the function by definition changes from increasing to decreasing, its derivative must, by Art. 37, be changing from a positive to a negative value; and if the derivative is a continuous function of the variable in the neighborhood of the value in question, it can change from a positive to a negative value only by passing through the value zero.

Since, at a minimum value, the function by definition changes from decreasing to increasing, its derivative must be changing from a negative to a positive value, and must therefore be passing through the value zero, provided that it is a continuous function of the variable in the neighborhood of the value in question.

41. Confining ourselves for the present to the case where the derivative is a continuous function, we can say then, that if  $y$  is a function of  $x$ , any value  $x_0$  of  $x$  corresponding to a maximum or a minimum value of  $y$  must make  $D_x y$  zero. This can also be seen from the figure of Art. 39. For, at the points  $A$ ,  $B$ ,  $C$ , and  $D$ , the tangent to the curve is parallel to the axis of  $X$ , and therefore at each of these points  $D_x y$ , which is, by Art. 27, the

tangent of the inclination of the curve to the axis, must equal zero.

Of course it does not follow from the argument just presented, that every value of  $x$  that makes  $D_x y = 0$  must correspond either to a maximum or a minimum value of  $y$ ; and it is evident, from the figure just referred to, that, at the point  $E$ , the tangent is parallel to the axis of  $X$ , and  $D_x y$  is zero, although  $y$ , is neither a maximum nor a minimum.

42. In order to ascertain the precise nature of the value of  $y$  corresponding to a given value of  $x$  which makes  $D_x y$  zero, we need to know the *sign of  $D_x y$  for values of  $x$  just before and just after the value in question*, and this can generally be determined by noting the value of the derivative of  $D_x y$ , which we can always find, as  $D_x y$  itself is a function of  $x$ , and can be differentiated.

43.  $D_x (D_x y)$  is called the *second derivative of  $y$  with respect to  $x$* , and is denoted by  $D_x^2 y$ .  $D_x (D_x^2 y)$  is called the third derivative of  $y$  with respect to  $x$ , and is denoted by  $D_x^3 y$ ; and in general, if  $n$  is any positive whole number,  $D_x (D_x^{n-1} y)$  is called the  *$n$ th derivative of  $y$  with respect to  $x$* , and is denoted by  $D_x^n y$ .

44. *Example.* Required the nature of the value of  $x^3 - x^2$  corresponding to the value 0 of  $x$ .

$$\begin{aligned} \text{Let } & y = x^3 - x^2 : \\ & D_x y = 3x^2 - 2x, \\ & D_x^2 y = 6x - 2; \\ & [D_x y]_{x=0} = 0, \\ & [D_x^2 y]_{x=0} = -2. \end{aligned}$$

Since  $D_x^2 y$  is negative when  $x = 0$ ,  $D_x y$  must have been decreasing as  $x$  passed through the value zero, and as

$$[D_x y]_{x=0} = 0$$

$D_x y$  must have been positive before  $x = 0$ , and negative after  $x = 0$ ; therefore,  $y$  must have been increasing before  $x = 0$ , and decreasing after  $x = 0$ , and must consequently have a maximum value when  $x = 0$ . To confirm our conclusion, let us find the values of  $x^3 - x^2$  when  $x = -.1$ , when  $x = 0$ , and when  $x = .1$ :

$$[x^3 - x^2]_{x=-.1} = -.011,$$

$$[x^3 - x^2]_{x=0} = 0,$$

$$[x^3 - x^2]_{x=.1} = -.009;$$

and the value corresponding to  $x = 0$  is the greatest of the three.

45. If  $[D_x y]_{x=x_0} = 0$

and  $[D_x^2 y]_{x=x_0} > 0,$

$D_x y$  must have been increasing as  $x$  passed through the value  $x_0$ ; and, therefore, since  $D_x y = 0$  when  $x = x_0$ , it must have been negative before  $x = x_0$  and positive after  $x = x_0$ :  $y$  then must have been decreasing before  $x = x_0$  and increasing after  $x = x_0$ , and so must be a minimum when  $x = x_0$ .

46. If  $[D_x y]_{x=x_0} = 0$

and  $[D_x^2 y]_{x=x_0} = 0,$

we must find the value of  $D_x^3 y$  before we can decide on the nature

of  $y_0$ . Suppose  $[D_x y]_{x=x_0} = \bar{0},$

$$[D_x^2 y]_{x=x_0} = \bar{0},$$

and  $[D_x^3 y]_{x=x_0} < 0.$

As  $[D_x^3 y]_{x=x_0}$  is negative,  $D_x^2 y$  must have been decreasing as  $x$  passed through the value  $x_0$ , and being 0 when  $x = x_0$ , must

have been positive before and negative after.  $D_x y$  therefore must have been increasing before  $x = x_0$  and decreasing after ;

and as

$$[D_x y]_{x=x_0} = 0,$$

it must have been negative both before and after  $x = x_0$ . The function  $y$ , then, must have been decreasing both before and after  $x = x_0$ , and  $y_0$  is neither a maximum nor a minimum.

#### EXAMPLES.

(1) Show that if  $[D_x y]_{x=x_0} = \dot{0}$ ,

$$[D_x^2 y]_{x=x_0} = \dot{0},$$

and

$$[D_x^3 y]_{x=x_0} > 0,$$

$y_0$  is neither a maximum nor a minimum.

(2) If  $[D_x y]_{x=x_0} = \dot{0}$ ,

$$[D_x^2 y]_{x=x_0} = \dot{0},$$

$$[D_x^3 y]_{x=x_0} = \dot{0},$$

and

$$[D_x^4 y]_{x=x_0} < 0,$$

$y_0$  is a maximum.

(3) If  $[D_x y]_{x=x_0} = \dot{0}$ ,

$$[D_x^2 y]_{x=x_0} = \dot{0},$$

$$[D_x^3 y]_{x=x_0} = \dot{0},$$

and

$$[D_x^4 y]_{x=x_0} > 0,$$

$y_0$  is a minimum.

47. The preceding investigation suggests the following method of finding the values of the variable corresponding to maximum or minimum values of the function. *Differentiate the function and find what values of  $x$  will make the first derivative zero.* This may, of course, be done by writing the derivative equal to zero, and solving the equation thus formed. *Substitute for  $x$ , in turn, in the second derivative, the values of  $x$  thus obtained, and note the signs of the results.* Those values of  $x$  which make the second derivative positive correspond to minimum values of

the function, and those that *make the second derivative negative*, to *maximum* values of the function. If any *make the second derivative zero*, they must be substituted for  $x$  in the *third derivative*, and the result interpreted by the method of Art. 46.

## EXAMPLES.

Find what values of  $x$  give maximum and minimum values of the following functions :—

(1)  $u = 2x^3 - 21x^2 + 36x - 20$ .

*Ans.*  $x = 1$ , max. ;  $x = 6$ , min.

(2)  $u = x^3 - 9x^2 + 15x - 3$ .

*Ans.*  $x = 1$ , max. ;  $x = 5$ , min.

(3)  $u = 3x^5 - 125x^3 + 2160x$ .

*Ans.* Max. when  $x = -4$  or  $3$  ;  
min. when  $x = -3$  or  $4$ .

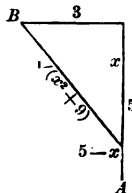
(4) Show that  $u = x^5 - 3x^2 + 6x + 7$

has neither a maximum or a minimum value ; and that

$$u = x^5 - 5x^4 + 5x^3 - 1$$

is neither a maximum nor a minimum when  $x = 0$ .

(5) A person in a boat, three miles from the nearest point of the beach, wishes to reach, in the shortest possible time, a place



five miles from that point, along the shore. Supposing he can walk five miles an hour, but can row only four miles an hour, required the point of the beach he must pull for.

With the notation in the figure, the distance rowed is  $\sqrt{(x^2 + 9)}$  miles, the distance walked is  $5 - x$  miles, and  $u$ , the whole time taken, is evidently

$$u = \frac{\sqrt{(x^2 + 9)}}{4} + \frac{5 - x}{5} \quad \text{hours,}$$

and  $x$  must have a value that will make  $u$  a minimum.

$$D_x u = \frac{x}{4\sqrt{(x^2 + 9)}} - \frac{1}{5},$$

$$D_x^2 u = \frac{9}{4(x^2 + 9)^{\frac{3}{2}}}.$$

Solving 
$$\frac{x}{4\sqrt{(x^2 + 9)}} - \frac{1}{5} = 0,$$

we get

$$x = \pm 4;$$

but, on substituting these values of  $x$  in turn in the expression for  $D_x u$ , we see that  $x = 4$  is the only value which will make  $D_x u = 0$ , since we must take the positive value of  $\sqrt{(x^2 + 9)}$ , from the nature of the case, as it represents a distance traversed. Remembering this fact, we find

$$[D_x^2 u]_{x=4} = \frac{9}{500};$$

and  $u$  then is a minimum when  $x = 4$ , and the landing-place must be one mile above the point of destination.

48. In problems concerning maxima and minima, the function  $u$  can often be most conveniently expressed in terms of two variables,  $x$  and  $y$ , which are themselves connected by some equation, so that either may be regarded as a function of the other. In this case, of course,  $u$  can, by elimination, be expressed in terms of either variable, and treated by the usual process. It is generally simpler, however, to differentiate  $u$ , regarding one of the variables,  $x$ , as the independent variable, and the other as a function of it, and then to substitute for  $D_x y$



its value obtained from the given equation between  $x$  and  $y$  by the process suggested in Art. 29.

### EXAMPLES.

(1) Required the maximum rectangle of given perimeter.

If  $a$  be the given perimeter, we have

$$\begin{array}{|c|} \hline y \\ \hline \end{array} \quad 2x + 2y = a; \quad (1)$$

$$\begin{array}{|c|} \hline x \\ \hline \end{array} \quad \text{and the area} \quad u = xy. \quad (2)$$

Differentiate (1) with respect to  $x$ , and we have

$$2 + 2D_x y = 0,$$

whence  $D_x y = -1;$  (3)

$$D_x u = xD_x y + y = -x + y, \quad \text{by (3),}$$

$$D_x^2 u = -1 + D_x y = -1 - 1 = -2, \quad \text{by (3).}$$

$$D_x u = 0 \text{ if } x = y,$$

and  $D_x^2 u$  is negative; therefore the required maximum rectangle is a square.

(2) Prove that of all circular sectors of given perimeter the greatest is that in which the arc is double the radius.

(3) A Norman window consists of a rectangle surmounted by a semicircle. Given the perimeter, required the height and breadth of the window when the quantity of light admitted is a maximum. *Ans.* Height and breadth must be equal.

49. After finding the values of  $x$  which make

$$D_x u = 0,$$

it is often possible to discriminate between those corresponding to maximum values of  $u$  and those corresponding to minimum values of  $u$  by outside considerations depending upon the nature

of the problem, and so to avoid the labor of investigating the second derivative.

EXAMPLES.

(1) Prove that when the portion of a tangent to a circle intercepted between a pair of rectangular axes is a minimum it is equal to a diameter.

(2) Determine the greatest cylinder of revolution that can be inscribed in a given cone of revolution.

*Ans.* If  $b$  be the altitude of the cone and  $a$  the radius of its base, the volume of the required cylinder =  $\frac{4}{27} \pi a^2 b$ .

(3) Determine the cylinder of greatest convex surface that can be inscribed in the same cone. *Ans.* Surface =  $\frac{\pi ba}{2}$ .

(4) Determine the cylinder of greatest convex surface that can be inscribed in a given sphere. *Ans.* Altitude =  $r \sqrt{2}$ .

(5) Determine the greatest cone of revolution that can be inscribed in a given sphere. *Ans.* Altitude =  $\frac{4}{3} r$ .

(6) Determine the cone of revolution of greatest convex surface that can be inscribed in a given sphere.

*Ans.* Altitude =  $\frac{4}{3} r$ .

✓

*Integration.*

50. We have seen (Art. 12) that when a body moves according to any law, if  $v$ ,  $t$ , and  $s$  are the velocity, time, and distance of the motion respectively,  $v = Ds$ .

Suppose we have an expression for the velocity of a body in terms of the time during which it has been moving, and want to find the distance it has traversed. For example; the velocity of a falling body that has been falling  $t$  seconds is always  $gt$ , where  $g$  is constant at any given point of the earth's surface: required the distance fallen in  $t$  seconds.

This distance is evidently a function of  $t$ , for a change in the number of seconds a body falls changes the distance fallen.

Represent this function by  $s$ ; then, as

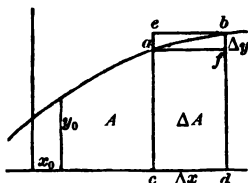
$$v = D_t s,$$

we have

$$D_t s = gt;$$

that is, *the distance is that function of  $t$  which has  $gt$  for its derivative*; and to solve the problem we have to *find the function when its derivative is given*.

51. Having given the equation  $y = fx$  of a curve (rectangular coordinates), required the area bounded by the curve, the axis of  $X$ , a fixed ordinate  $y_0$ , and any second ordinate  $y$ .



This area,  $A$ , is obviously a function of  $x$ , the abscissa corresponding to the second bounding ordinate  $y$ , for a change in  $x$  changes  $A$ . Let us see if we cannot find the value of  $D_x A$ . Increase  $x$  by  $\Delta x$ , and represent the corresponding increments of  $A$  and  $y$  by  $\Delta A$  and  $\Delta y$ . From the figure, the area

$$acdf < acdb < ecdb;$$

but the area of the rectangle

$$acdf = y \Delta x,$$

the area of the rectangle

$$ecdb = (y + \Delta y) \Delta x,$$

and

$$acdb = \Delta A;$$

hence

$$y \Delta x < \Delta A < (y + \Delta y) \Delta x;$$

and we want  $\lim_{\Delta x \rightarrow 0} \left[ \frac{\Delta A}{\Delta x} \right]$ . Divide by  $\Delta x$ ,

and 
$$y < \frac{\Delta A}{\Delta x} < y + \Delta y.$$

That is,  $\frac{\Delta A}{\Delta x}$  always lies between  $y$  and  $y + \Delta y$ ; and as they approach the same limit,  $y$ , as  $\Delta x \rightarrow 0$ ,  $\lim_{\Delta x \rightarrow 0} \left[ \frac{\Delta A}{\Delta x} \right]$  must be  $y$ , and

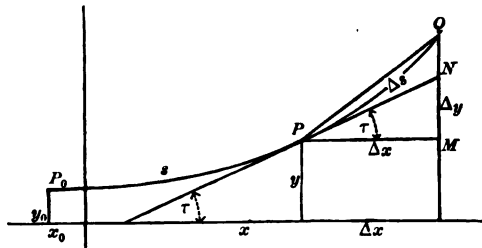
we have 
$$D_x A = y = fx;$$

and to solve the problem completely, we have to find a function from its derivative.

Y

52. Having given the equation  $y = fx$  of a curve (rectangular coördinates), required the length of the arc between a fixed point  $(x_0, y_0)$  of the curve and any second point  $(x, y)$ .

This length is obviously a function of the position, and therefore



of the coördinates of the second point; and as the equation of the curve enables us to express  $y$  in terms of  $x$ , we can consider the length  $s$  a function of  $x$ . Let us see if we can find its derivative. Increase  $x$  by  $\Delta x$  and represent the corresponding increments of  $s$  and  $y$  by  $\Delta s$  and  $\Delta y$  respectively. We see from the

figure that 
$$PQ < \Delta s < PN + NQ,$$

$PN$  being the tangent at  $P$ .

$$PQ = \sqrt{(\Delta x)^2 + (\Delta y)^2},$$

$$PN = \Delta x \cdot \sec \tau.$$

$$NQ = \Delta y - MN.$$

$$MN = \Delta x \cdot \tan \tau.$$

hence

$$NQ = \Delta y - \Delta x \tan \tau,$$

and we have

$$\sqrt{(\Delta x)^2 + (\Delta y)^2} < \Delta s < \Delta x \sec \tau + \Delta y - \Delta x \tan \tau.$$

Divide by  $\Delta x$ , —

$$\sqrt{1 + \left(\frac{\Delta y}{\Delta x}\right)^2} < \frac{\Delta s}{\Delta x} < \sec \tau + \frac{\Delta y}{\Delta x} - \tan \tau.$$

$$\lim_{\Delta x \doteq 0} \left[ \sqrt{1 + \left(\frac{\Delta y}{\Delta x}\right)^2} \right] = \sqrt{1 + (D_x y)^2}$$

and  $\lim_{\Delta x \doteq 0} \left[ \sec \tau + \frac{\Delta y}{\Delta x} - \tan \tau \right] = \sec \tau + D_x y - \tan \tau.$

But we know, Art. 27, [1], that

$$\tan \tau = D_x y;$$

and by trigonometry,

$$\sec^2 \tau = 1 + \tan^2 \tau = 1 + (D_x y)^2,$$

$$\sec \tau = \sqrt{1 + (D_x y)^2};$$

hence

$$\lim_{\Delta x \doteq 0} \left[ \sec \tau + \frac{\Delta y}{\Delta x} - \tan \tau \right] = \sqrt{1 + (D_x y)^2} + D_x y - D_x y,$$

or

$$= \sqrt{1 + (D_x y)^2}.$$

As  $\frac{\Delta s}{\Delta x}$  lies always between two quantities which have the same limit,  $\sqrt{1 + (D_x y)^2}$ , its limit must be  $\sqrt{1 + (D_x y)^2}$ , and we have

$$D_x s = \sqrt{1 + (D_x y)^2}.$$

$D_x y$  can be found from the given equation, and therefore

$\sqrt{1 + (D_x y)^2}$  can be determined. We can then regard  $D_x s$  as given, and again we are required to obtain a function from its derivative.

53. To find a function from its derivative is *to integrate*, and the function is called the *integral* of the given derivative. Thus the integral of  $2x$  is  $x^2 + C$ , where  $C$  is any constant, for  $D_x(x^2 + C)$  is  $2x$ . In other words, if  $y$  is a function of  $x$ , that function of  $x$  which has  $y$  for its derivative is called the *integral of  $y$  with respect to  $x$* , and is indicated by  $\int_x y$ , the symbol  $\int_x$  standing for the words *integral with respect to  $x$* .

54. Since the derivative of a constant is zero, we may add any constant to a function without affecting the derivative of the function; so that if we know merely the value of the derivative, the function is not wholly determined, but may contain any *arbitrary*, i.e., undetermined, *constant* term. In special problems, there are usually sufficient additional data to enable us to determine this constant after effecting the integration.

55. Since *integration* is defined as *the inverse of differentiation*, we ought to be able to obtain a partial set of formulas for integrating by reversing the formulas we have already obtained for differentiating. Take the formulas —

$$D_x x = 1;$$

$$D_x ax = a;$$

$$D_x ay = aD_x y;$$

$$D_x x^n = nx^{n-1};$$

$$D_x(u + v + w + \&c.) = D_x u + D_x v + D_x w + \&c.;$$

and we get immediately —

$$\int_x 1 = x + C; \tag{1}$$

$$\int_x a = ax + C; \tag{2}$$

$$\int_x a D_x y = ay + C; \quad (3)$$

$$\int_x n x^{n-1} = x^n + C; \quad (4)$$

$$\int_x (D_x u + D_x v + D_x w + \&c.) = u + v + w + \&c. + C; \quad (5)$$

where  $C$  in each case is an arbitrary constant.

The forms of the last three can be modified with advantage.

In (3), call  $D_x y = u;$

then  $y = \int_x u,$

and (3) becomes  $\int_x au = a \int_x u + C. \quad (6)$

By the aid of (6), (4) can be written,

$$n \int_x x^{n-1} = x^n + C.$$

Change  $n$  into  $n + 1$ , and we get

$$(n + 1) \int_x x^n = x^{n+1} + C,$$

or  $\int_x x^n = \frac{x^{n+1}}{n + 1} + C, \quad (7)$

where  $C$  is any arbitrary constant, although, strictly speaking, different from the  $C$  just above.

In (5), let  $D_x u = y, D_x v = z, \&c.,$

then  $u = \int_x y, v = \int_x z, \&c.$

and  $\int_x (y + z + \&c.) = \int_x y + \int_x z + \&c. + C;$

or, *the integral of a sum of terms is the sum of the integrals of the terms.*

56. We can now solve the problem stated in Art. 50. The velocity of a falling body at the end of  $t$  seconds is  $gt$  feet,  $g$

being a constant number; required the distance fallen in  $t$  seconds. We have seen that, if  $v$ ,  $t$ , and  $s$  are the velocity, time, and distance respectively,  $v = D_t s$ ;

hence  $s = \int v$ .

Here  $s = \int g t + C$ ;

but by Art. 55, (6) and (7),

$$\int g t = g \int t = g \frac{t^2}{2} + C = \frac{1}{2} g t^2 + C;$$

and in this case we can readily determine  $C$ , for when the body has been falling no time, it has fallen no distance, so  $s$  must equal zero when  $t = 0$ , and we have

$$0 = \frac{1}{2} g (0)^2 + C = 0 + C, \text{ and } C = 0;$$

and our required result is  $s = \frac{1}{2} g t^2$ .

57. Required the area intercepted by the curve  $y^2 = 4x$ , the axis of  $X$ , and the ordinate through the focus.

From the form of the equation we know that the curve is a parabola with its vertex at the origin and its focus at the point  $(1, 0)$ . The initial ordinate in this case is evidently the tangent at the vertex.

If  $A$  is the required area,  $D_x A = y$ , (Art. 51),

then  $A = \int_x y$ .

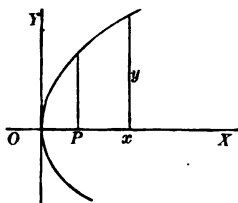
$$y = 2\sqrt{x} = 2x^{\frac{1}{2}};$$

hence  $A = \int_x 2x^{\frac{1}{2}} = 2 \int_x x^{\frac{1}{2}} = \frac{2x^{\frac{3}{2}}}{\frac{3}{2}} + C = \frac{4}{3} x^{\frac{3}{2}} + C$ .

$A$  stands for the area terminated by the ordinate corresponding to any abscissa  $x$ .

It is obvious from the figure that if we make  $x = 0$ , the terminating ordinate  $y$  will coincide with the initial ordinate through the origin, and  $A$  will equal zero. So we can readily determine  $C$ ,





for we have

$$A = 0 \text{ if } x = 0;$$

so that

$$0 = \frac{4}{3} 0^3 + C = C,$$

and

$$A = \frac{4}{3} x^3.$$

If  $x = 1$ , as it must in order that  $y$  may pass through the focus,

$$A = \frac{4}{3}, \quad \text{the required area.}$$

EXAMPLES.

(1) Find the area bounded by the curve  $x^2 = 4y$ , the axis of  $X$ , and the ordinates corresponding to the abscissas 2 and 8.

*Ans.* 42.

(2) Prove that the area cut off from a parabola by a double ordinate is two-thirds of the circumscribing rectangle.

(3) Required the area intercepted between the curves  $y^2 = 4ax$  and  $x^2 = 4ay$ .

*Ans.*  $\frac{16a^2}{3}$ .

(4) Find a formula for the area bounded by a curve  $x = fy$ , the axis of  $Y$ , and two lines parallel to the axis of abscissas.

*Ans.*  $A = f_1 x + C$ .

(5) Find a formula for the area intercepted by a curve  $y = fx$ , the axis of  $X$ , and two ordinates (oblique coördinates).

*Ans.*  $A = \sin \omega f_x y + C$ ,  $\omega$  being the inclination of the axes.

(6) Prove that the segment of a parabola cut off by any chord is two-thirds of the circumscribing parallelogram.

58. Required the length of the portion of the line

$$4x - 3y + 2 = 0 \quad (1)$$

between the points having the abscissas 1 and 4.

We have seen that  $D_x s = \sqrt{1 + (D_x y)^2}$  Art. 52,

where  $s$  is the length of an arc;

hence  $s = \int_x \sqrt{1 + (D_x y)^2}$ .

From (1) we get  $4 - 3 D_x y = 0$ ,

$$D_x y = \frac{4}{3},$$

$$\sqrt{1 + (D_x y)^2} = \frac{5}{3};$$

and therefore  $s = \int_x \frac{5}{3} = \frac{5}{3}x + C$ , where  $s$  stands for the length of the arc from the first point to any second point whose abscissa is  $x$ . If we make  $x = 1$ , the two points will coincide and  $s$  must equal 0; then  $0 = \frac{5}{3} + C$ ,

$$C = -\frac{5}{3},$$

and  $s = \frac{5}{3}(x - 1)$ .

To get the required distance,  $x$  must equal 4 and we get  $s = 5$ .

#### EXAMPLE.

(1). Find the length of the portion of the line  $Ax + By + C = 0$  between the points whose abscissas are  $x_0$  and  $x_1$ .

$$\text{Ans. } \frac{\sqrt{(A^2 + B^2)}}{B} (x_1 - x_0).$$

CHAPTER IV.

TRANSCENDENTAL FUNCTIONS.

59. In order to complete our list of formulas for differentiating, we must consider the *transcendental* forms,  $\log x$ ,  $a^x$ ,  $\sin x$ , &c.

*Let us differentiate  $\log x$ .*

By our fundamental method, we have

$$D_x \log x = \lim_{\Delta x \doteq 0} \left[ \frac{\log(x + \Delta x) - \log x}{\Delta x} \right],$$

$$\frac{\log(x + \Delta x) - \log x}{\Delta x} = \frac{1}{\Delta x} \log \left[ \frac{x + \Delta x}{x} \right] = \frac{1}{\Delta x} \log \left[ 1 + \frac{\Delta x}{x} \right],$$

and 
$$D_x \log x = \lim_{\Delta x \doteq 0} \left[ \frac{1}{\Delta x} \log \left( 1 + \frac{\Delta x}{x} \right) \right].$$

But as  $\Delta x$  approaches zero,  $\log \left( 1 + \frac{\Delta x}{x} \right)$  approaches  $\log 1$ , i.e., zero, and  $\frac{1}{\Delta x}$  increases indefinitely; so that it is by no means easy to discover the limit of the product  $\frac{1}{\Delta x} \log \left( 1 + \frac{\Delta x}{x} \right)$ .

This product can be thrown into a simpler form by introducing

$$m = \frac{x}{\Delta x} \quad \text{in place of } \Delta x.$$

$\frac{1}{\Delta x} \log \left( 1 + \frac{\Delta x}{x} \right)$  then becomes  $\frac{m}{x} \log \left( 1 + \frac{1}{m} \right)$ , or  $\frac{1}{x} \log \left( 1 + \frac{1}{m} \right)^m$ .

As  $\Delta x$  approaches zero,  $\frac{x}{\Delta x}$  or  $m$  increases indefinitely, and

$$D_x \log x = \lim_{m = \infty} \left[ \frac{1}{x} \log \left( 1 + \frac{1}{m} \right)^m \right],$$

and the value we have to investigate is the value approached by  $\left(1 + \frac{1}{m}\right)^m$  as its limit as  $m$  increases indefinitely, which we indicate by  $\lim_{m=\infty} \left[1 + \frac{1}{m}\right]^m$ .

60. Let us first suppose that  $m$  in its increase continues always a positive integer. Then we can expand  $\left(1 + \frac{1}{m}\right)^m$  by the Binomial Theorem.

$$\begin{aligned} \left(1 + \frac{1}{m}\right)^m &= 1 + \frac{m}{1} \left(\frac{1}{m}\right) + \frac{m(m-1)}{1.2} \left(\frac{1}{m}\right)^2 + \frac{m(m-1)(m-2)}{1.2.3} \left(\frac{1}{m}\right)^3 \\ &\quad + \&c. \text{ to } m+1 \text{ terms} \\ &= 1 + \frac{1}{1} + \frac{1 - \frac{1}{m}}{1.2} + \frac{\left(1 - \frac{1}{m}\right)\left(1 - \frac{2}{m}\right)}{1.2.3} \\ &\quad + \frac{\left(1 - \frac{1}{m}\right)\left(1 - \frac{2}{m}\right)\left(1 - \frac{3}{m}\right)}{1.2.3.4} + \dots \text{ to } m+1 \text{ terms.} \end{aligned}$$

Now, as  $m$  increases indefinitely, each of the first  $n$  terms of the series,  $n$  being any fixed number, approaches as its limit the corresponding term of the series

$$1 + \frac{1}{1} + \frac{1}{1.2} + \frac{1}{1.2.3} + \frac{1}{1.2.3.4} + \dots;$$

so that we have reason to suppose that there is some simple relation between this latter series and our required limit.

61. To investigate this question we shall divide the first series into two parts. The first part, consisting of the first  $n+1$  terms, where  $n$  is any fixed whole number less than  $m$ , we shall represent by  $S$ ; the second part, consisting of the remaining  $m-n$  terms, we shall call  $R$ .

Then 
$$\left(1 + \frac{1}{m}\right)^m = S + R.$$

$$S = 1 + \frac{1}{1} + \frac{1 - \frac{1}{m}}{1.2} + \frac{\left(1 - \frac{1}{m}\right)\left(1 - \frac{2}{m}\right)}{1.2.3} + \dots$$

$$+ \frac{\left(1 - \frac{1}{m}\right)\left(1 - \frac{2}{m}\right) \dots \left(1 - \frac{n-1}{m}\right)}{1.2.3 \dots n}.$$

As  $n$  is a fixed number, we have

$$\lim_{m=\infty} [S] = 1 + \frac{1}{1} + \frac{1}{1.2} + \frac{1}{1.2.3} + \dots + \frac{1}{1.2.3 \dots n}.$$

$$R = \frac{\left(1 - \frac{1}{m}\right)\left(1 - \frac{2}{m}\right) \dots \left(1 - \frac{n-1}{m}\right)}{1.2.3 \dots n} \left[ \frac{1 - \frac{n}{m}}{n+1} + \frac{\left(1 - \frac{n}{m}\right)\left(1 - \frac{n+1}{m}\right)}{(n+1)(n+2)} \right.$$

$$\left. + \dots + \frac{\left(1 - \frac{n}{m}\right)\left(1 - \frac{n+1}{m}\right)\left(1 - \frac{n+2}{m}\right) \dots \left(1 - \frac{m-1}{m}\right)}{(n+1)(n+2)(n+3) \dots m} \right].$$

Since  $n$  is less than  $m$ , each numerator in the value of  $R$  is positive and less than 1, and

$$R < \frac{1}{1.2.3 \dots n} \left[ \frac{1}{n+1} + \frac{1}{(n+1)^2} + \frac{1}{(n+1)^3} + \dots + \frac{1}{(n+1)^{m-n}} \right].$$

The sum of the decreasing geometrical series,

$$\frac{1}{n+1} + \frac{1}{(n+1)^2} + \frac{1}{(n+1)^3} + \dots,$$

is by algebra less than  $\frac{1}{n}$ ;

therefore 
$$R < \frac{1}{n(1.2.3 \dots n)},$$

and  $\lim_{m=\infty} [R] < \frac{1}{n(1.2.3\dots n)}$ ;

and we have at last,

$$\begin{aligned} \lim_{m=\infty} \left(1 + \frac{1}{m}\right)^m &= \lim_{m=\infty} [S] + \lim_{m=\infty} [R] \\ &= 1 + \frac{1}{1} + \frac{1}{1.2} + \frac{1}{1.2.3} + \frac{1}{1.2.3.4} + \dots + \frac{1}{1.2.3\dots n} \\ &\quad + \text{something less than } \frac{1}{n(1.2.3\dots n)}, \end{aligned}$$

$n$  being any positive whole number.

Thus we obtain the relation that the difference between our required value and the sum of the first  $n + 1$  terms of the series

$$1 + \frac{1}{1} + \frac{1}{1.2} + \frac{1}{1.2.3} + \dots$$

is less than  $\frac{1}{n(1.2.3\dots n)}$ .

The greater the value of  $n$  the less the value of  $\frac{1}{n.1.2.3\dots n}$ ; and by taking a value of  $n$  sufficiently great, we may make this difference as small as we please.

Consequently, by Art. 7, our required value is the limit approached by the sum of the first  $n$  terms of the series

$$1 + \frac{1}{1} + \frac{1}{1.2} + \frac{1}{1.2.3} + \dots$$

as  $n$  is indefinitely increased, or what is ordinarily called the sum of this series.

62. The series  $1 + \frac{1}{1} + \frac{1}{1.2} + \frac{1}{1.2.3} + \dots$  plays a very important part in the theory of logarithms. It is generally represented by the letter  $e$ , and is taken as the base of the natural system of logarithms. Its numerical value can be readily computed to any required number of decimal places, since each term of the

series may be obtained by dividing the preceding one by the number of the term minus one. Carrying the approximation to six decimal places, we have

1.  
 1.  
 0.5  
 0.166666  
 0.041666  
 0.008333  
 0.001388  
 0.000198  
 0.000024  
 0.000002  
 0.000000  
 0.000000

The error in the approximation is less than one-eleventh of the last term we have used, and therefore cannot affect our sixth decimal place.

$e = 2.718281+$ , correct to six decimal places.

✓ 63. Let us now remove from  $m$  the restriction we placed upon it when we supposed it to have none but positive integral values, and suppose it to increase passing through all positive values. Let  $\mu$  represent at any instant the integer next below  $m$ , then  $\mu + 1$  will be the integer next above  $m$ , and as  $m$  increases it will always be between  $\mu$  and  $\mu + 1$ , unless it happens to coincide with  $\mu + 1$ , as it sometimes will. We have, then, in general,

$$\mu < m < \mu + 1.$$

Then  $\left(1 + \frac{1}{\mu+1}\right)^\mu < \left(1 + \frac{1}{m}\right)^m < \left(1 + \frac{1}{\mu}\right)^{\mu+1}$ ;

$\therefore$  limit  $\left(1 + \frac{1}{m}\right)^m$  must lie between limit  $\left(1 + \frac{1}{\mu+1}\right)^\mu$  and limit  $\left(1 + \frac{1}{\mu}\right)^{\mu+1}$ ,

$$\left(1 + \frac{1}{\mu+1}\right)^\mu = \frac{\left(1 + \frac{1}{\mu+1}\right)^{\mu+1}}{1 + \frac{1}{\mu+1}}, \text{ and } \lim_{\mu=\infty} \frac{\left(1 + \frac{1}{\mu+1}\right)^{\mu+1}}{1 + \frac{1}{\mu+1}} = \frac{e}{1} = e.$$

$$\left(1 + \frac{1}{\mu}\right)^{\mu+1} = \left(1 + \frac{1}{\mu}\right)^{\mu} \left(1 + \frac{1}{\mu}\right),$$

and  $\lim_{\mu=\infty} \left(1 + \frac{1}{\mu}\right)^{\mu} \left(1 + \frac{1}{\mu}\right) = e \times 1 = e;$

hence  $\lim_{m=\infty} \left(1 + \frac{1}{m}\right)^m = e.$

Again: let  $m$  be negative, and represent it by  $-r$ ,

$$\begin{aligned} \text{then } \left(1 + \frac{1}{m}\right)^m &= \left(1 - \frac{1}{r}\right)^{-r} = \left(\frac{r-1}{r}\right)^{-r} = \left(\frac{r}{r-1}\right)^r = \left(1 + \frac{1}{r-1}\right)^r \\ &= \left(1 + \frac{1}{r-1}\right)^{r-1} \left(1 + \frac{1}{r-1}\right), \end{aligned}$$

and  $\lim_{m=\infty} \left(1 + \frac{1}{m}\right)^m$

$$= \lim_{(r-1)=\infty} \left(1 + \frac{1}{r-1}\right)^{r-1} \left(1 + \frac{1}{r-1}\right) = e \times 1 = e.$$

We see, then, that always

$$\lim_{m=\infty} \left(1 + \frac{1}{m}\right)^m = e = 2.718281 + .$$

64. In Art. 59 we found that

$$D_x \log x = \lim_{m=\infty} \left[ \frac{1}{x} \log \left(1 + \frac{1}{m}\right)^m \right].$$

We have, then,  $D_x \log x = \frac{1}{x} \log e.$

If by  $\log x$  we mean, as we shall always mean hereafter, *natural logarithm* of  $x$ ,  $\log e$  will equal 1, and



$$D_x \log x = \frac{1}{x}. \quad [1]$$

If  $y = fx$ , 
$$D_x \log y = \frac{D_x y}{y}.$$

*Exponential Functions.*

65. Required  $D_x a^x$ ,  $a$  being any constant.

Let 
$$u = a^x$$

and take the log of each member,

$$\log u = x \log a.$$

Take  $D_x$  of both members,

$$\frac{D_x u}{u} = \log a;$$

$$D_x u = u \log a,$$

$$D_x a^x = a^x \log a. \quad [1]$$

If  $a = e$ ; since  $\log e = 1$ ,

we have 
$$D_x e^x = e^x. \quad [2]$$

Of course, 
$$D_x a^y = a^y \log a D_x y,$$

and 
$$D_x e^y = e^y D_x y.$$

**EXAMPLES.**

Find  $D_x u$  in each of the following cases :—

(1)  $u = e^x(1 - x^3).$  *Ans.*  $D_x u = e^x(1 - 3x^2 - x^3).$

(2)  $u = \frac{e^x - e^{-x}}{e^x + e^{-x}}.$  *Ans.*  $D_x u = \frac{4}{(e^x + e^{-x})^2}$

$$(3) u = \log(e^x + e^{-x}). \quad \text{Ans. } D_x u = \frac{e^x - e^{-x}}{e^x + e^{-x}}.$$

$$(4) u = \frac{x}{e^x - 1}. \quad \text{Ans. } D_x u = \frac{e^x(1-x) - 1}{(e^x - 1)^2}.$$

$$(5) u = \log \frac{\sqrt{(1+x)} + \sqrt{(1-x)}}{\sqrt{(1+x)} - \sqrt{(1-x)}}. \quad \text{Ans. } D_x u = -\frac{1}{x\sqrt{(1-x^2)}}.$$

$$(6) u = \log(\log x). \quad \text{Ans. } D_x u = \frac{1}{x \log x}.$$

$$(7) u = \log \frac{x}{x + \sqrt{(1+x^2)}}. \quad \text{Ans. } D_x u = \frac{1}{x} - \frac{1}{\sqrt{(1+x^2)}}.$$

$$(8) u = x^x. \quad \text{Ans. } D_x u = x^x(\log x + 1).$$

*Suggestion.* Take the log of each member before differentiating.

$$(9) u = x^{\frac{1}{x}}. \quad \text{Ans. } D_x u = \frac{x^{\frac{1}{x}}(1 - \log x)}{x^2}.$$

$$(10) u = e^{e^x}. \quad \text{Ans. } D_x u = e^{e^x} e^x.$$

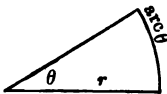
$$(11) u = e^{x^x}. \quad \text{Ans. } D_x u = e^{x^x} x^x(1 + \log x).$$

$$(12) u = x^{e^x}. \quad \text{Ans. } D_x u = x^{e^x} e^x \frac{1 + x \log x}{x}.$$

### Trigonometric Functions. ✓

66. In higher mathematics an angle is represented numerically, not by the number of degrees it contains but by the ratio of the length of its arc to the length of the radius with which the arc is described.

Thus the angle  $\theta$  is said to be equal to  $\frac{\text{arc } \theta}{r}$ . If the arc is



described with a radius equal to the linear unit, this ratio reduces to the length of the arc. This method of measuring an angle is called the *circular* or *analytic* system, as distinguished from the ordinary *degree* or *gradual* system.

The value of  $360^\circ$  in circular measure is obviously  $\frac{2\pi r}{r}$  or  $2\pi$ , and of  $1^\circ$  is  $\frac{2\pi}{360}$  or  $\frac{\pi}{180}$ . Hence, to reduce from gradual to circular measure, it is only necessary to multiply the given number of degrees by  $\frac{\pi}{180}$ .

The circular unit is evidently the angle which has its arc equal to the radius, and its value in degrees is easily found. Let  $x$  represent the required value in degrees; then

$$\frac{x^\circ}{360^\circ} = \frac{r}{2\pi r} \text{ and } x = \frac{180^\circ}{\pi}.$$

Hence, to reduce from circular to gradual measure, we have only to multiply the circular value by  $\frac{180}{\pi}$ .

67. Required  $D_x \sin x$ .

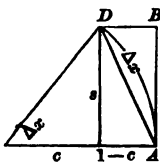
By our usual method, we have

$$\begin{aligned} D_x \sin x &= \lim_{\Delta x \rightarrow 0} \left[ \frac{\sin(x + \Delta x) - \sin x}{\Delta x} \right], \\ \frac{\sin(x + \Delta x) - \sin x}{\Delta x} &= \frac{\sin x \cos \Delta x + \cos x \sin \Delta x - \sin x}{\Delta x} \\ &= \frac{\cos x \sin \Delta x - \sin x(1 - \cos \Delta x)}{\Delta x}. \end{aligned}$$

$$\begin{aligned} D_x \sin x &= \lim_{\Delta x \rightarrow 0} \left[ \cos x \frac{\sin \Delta x}{\Delta x} - \sin x \frac{1 - \cos \Delta x}{\Delta x} \right] \\ &= \cos x \lim_{\Delta x \rightarrow 0} \left[ \frac{\sin \Delta x}{\Delta x} \right] - \sin x \lim_{\Delta x \rightarrow 0} \left[ \frac{1 - \cos \Delta x}{\Delta x} \right]. \end{aligned}$$

But as  $\Delta x \rightarrow 0$ ,  $\sin \Delta x \rightarrow 0$  and  $\cos \Delta x \rightarrow 1$ , so both of our limits, in their present form, are indeterminate, and require special investigation.

68. Suppose an arc described from the vertex of the angle  $\Delta x$ , with a radius equal to unity, then this arc measures the angle, and is equal to  $\Delta x$ , and the lengths of the lines, marked  $s$  and  $c$  in the figure, are the  $\sin \Delta x$  and  $\cos \Delta x$ , respectively.



We wish to find  $\lim_{\Delta x \doteq 0} \left[ \frac{s}{\Delta x} \right]$  and  $\lim_{\Delta x \doteq 0} \left[ \frac{1-c}{\Delta x} \right]$ .

$$\text{arc } \Delta x < AB + BD$$

by geometry (*vide* "Chauvenet's Geometry," Book V. Prop. xii.).

We have then  $AD < \Delta x < AB + BD$ ;

or, since  $s < AD$ , and  $AB + BD = s + 1 - c$ ,

$$s < \Delta x < s + 1 - c.$$

But

$$s^2 + c^2 = 1,$$

$$1 - c^2 = s^2,$$

$$1 - c = \frac{s^2}{1 + c},$$

and

$$s + 1 - c = \frac{s(1+c) + s^2}{1+c};$$

hence

$$s < \Delta x < \frac{s(1+c) + s^2}{1+c};$$

$$\therefore \frac{s}{s} > \frac{s}{\Delta x} > \frac{s(1+c)}{s(1+c) + s^2},$$

or

$$1 > \frac{s}{\Delta x} > \frac{1+c}{1+c+s},$$

and  $\lim_{\Delta x \doteq 0} \left[ \frac{s}{\Delta x} \right]$  must be between 1 and  $\lim_{\Delta x \doteq 0} \left[ \frac{1+c}{1+c+s} \right]$ ; but since, as  $\Delta x \doteq 0$ ,  $s \doteq 0$ , and  $c \doteq 1$ ,

$$\lim_{\Delta x \rightarrow 0} \left[ \frac{1+c}{1+c+s} \right] = \frac{2}{2} = 1;$$

therefore 
$$\lim_{\Delta x \rightarrow 0} \left[ \frac{\sin \Delta x}{\Delta x} \right] = 1.$$

In like manner, 
$$\frac{1-c}{s} > \frac{1-c}{\Delta x} > \frac{(1-c)(1+c)}{s(1+c)+s^2}$$

or 
$$\frac{s^2}{s(1+c)} > \frac{1-c}{\Delta x} > \frac{s^2}{s(1+c)+s^2},$$

$$\frac{s}{1+c} > \frac{1-c}{\Delta x} > \frac{s}{1+c+s};$$

$\lim_{\Delta x \rightarrow 0} \left[ \frac{1-c}{\Delta x} \right]$  lies between  $\lim_{\Delta x \rightarrow 0} \left[ \frac{s}{1+c} \right]$ , or 0, and

$\lim_{\Delta x \rightarrow 0} \left[ \frac{s}{1+c+s} \right]$ , or 0;

therefore 
$$\lim_{\Delta x \rightarrow 0} \left[ \frac{1-\cos \Delta x}{\Delta x} \right] = 0.$$

69. Substituting these values in Art. 67, we have

$$D_x \sin x = \cos x.$$

EXAMPLES.

(1) Prove  $D_x \cos x = -\sin x.$

(2) Prove  $D_x \tan x = \sec^2 x,$

$$D_x \cot x = -\csc^2 x,$$

$$D_x \sec x = \tan x \sec x,$$

$$D_x \csc x = -\cot x \csc x,$$

from the relations 
$$\tan x = \frac{\sin x}{\cos x},$$

$$\operatorname{ctn} x = \frac{1}{\tan x},$$

$$\operatorname{sec} x = \frac{1}{\cos x},$$

$$\operatorname{csc} x = \frac{1}{\sin x}.$$

(3) Given  $\operatorname{vers} x = 1 - \cos x$ ,  
 prove  $D_x \operatorname{vers} x = \sin x$ .

4) Prove  $D_x \log \sin x = \operatorname{ctn} x$ ;  
 $D_x \log \cos x = -\tan x$ ;  
 $D_x \log \tan x = \operatorname{sec} x \operatorname{csc} x$ ;  
 $D_x \log \operatorname{ctn} x = -\operatorname{sec} x \operatorname{csc} x$ ;  
 $D_x \log \operatorname{sec} x = \tan x$ ;  
 $D_x \log \operatorname{csc} x = -\operatorname{ctn} x$ .

### *Anti-Trigonometric Functions.*

70. In trigonometry, the *angle which has a sine equal to x* is called *the inverse sine or the anti-sine of x*, and is denoted by the symbol  $\sin^{-1}$ . Hence  $\sin^{-1} x$  means the angle which has  $x$  for its sine, and is to be read *anti-sine of x*.

In the same way we speak of *anti-cosine, anti-tangent, &c.*

71. *To differentiate  $\sin^{-1} x$ .*

Let  $y = \sin^{-1} x$ ; then  $x = \sin y$ .

Differentiate both members with respect to  $x$ .

$$1 = \cos y D_x y;$$

$$D_x y = \frac{1}{\cos y}.$$

It remains to express  $\cos y$  in terms of  $x$ .

$$\sin y = x,$$

$$\cos^2 y = 1 - x^2,$$

$$\cos y = \sqrt{1 - x^2};$$

hence 
$$D_x \sin^{-1} x = \frac{1}{\sqrt{1 - x^2}}.$$

EXAMPLES.

(1) Prove 
$$D_x \cos^{-1} x = -\frac{1}{\sqrt{1 - x^2}}.$$

(2) 
$$D_x \tan^{-1} x = \frac{1}{1 + x^2}.$$

(3) 
$$D_x \operatorname{ctn}^{-1} x = -\frac{1}{1 + x^2}.$$

(4) 
$$D_x \sec^{-1} x = \frac{1}{x \sqrt{x^2 - 1}}.$$

(5) 
$$D_x \operatorname{csc}^{-1} x = -\frac{1}{x \sqrt{x^2 - 1}}.$$

(6) 
$$D_x \operatorname{vers}^{-1} x = \frac{1}{\sqrt{2x - x^2}}.$$

72. The *anti-*, or *inverse*, notation is not confined to trigonometric functions. The number which has  $x$  for its logarithm is called the *anti-logarithm* of  $x$ , and is denoted by  $\log^{-1} x$ ; and, in general, if  $x$  is any function of  $y$ ,  $y$  may be called the *corresponding anti-function* of  $x$ , and the relation of  $y$  to  $x$  will be indicated by the same functional symbol as that which expresses

the dependence of  $x$  upon  $y$ , except that it will be affected with a negative exponent, which, however, must not be confounded with a negative exponent in the algebraic sense. Thus, if  $x = fy$ , we may write  $y = f^{-1}x$ .

Any anti-function can be readily differentiated, if the direct function can be differentiated, and by the method we have employed in the case of the anti-trigonometric functions above.

Let  $y = f^{-1}x$ ,

then  $x = fy$ ;

differentiate, and  $1 = D_x fy \cdot D_x y$ .

$$D_x y = \frac{1}{D_x fy}$$

or  $D_x f^{-1}x = \frac{1}{D_x fy}$ ,

and it is only necessary to replace  $y$  in this result by its value in terms of  $x$ .

73. Since, in the formula above,

$$fy = x,$$

we have  $D_x y = \frac{1}{D_x x}$ ;

a result so important that it is worth while to establish it by more elementary considerations.

Suppose  $x$  and  $y$  connected by any relation, so that either may be regarded as a function of the other. Let  $\Delta x$  and  $\Delta y$  be corresponding increments of  $x$  and  $y$ . Then  $\Delta x$  may be regarded as having produced  $\Delta y$ , or as having been produced by  $\Delta y$ , according as we regard  $x$  or  $y$  as the independent variable; and on either hypothesis they will approach zero together.

By definition,  $D_x y = \lim_{\Delta x \rightarrow 0} \left[ \frac{\Delta y}{\Delta x} \right]$ ,



and 
$$D_y x = \lim_{\Delta x \doteq 0} \left[ \frac{\Delta x}{\Delta y} \right].$$

$$\frac{\Delta y}{\Delta x} = \frac{1}{\frac{\Delta x}{\Delta y}};$$

and 
$$\lim_{\Delta x \doteq 0} \left[ \frac{\Delta y}{\Delta x} \right] = \frac{1}{\lim_{\Delta x \doteq 0} \left[ \frac{\Delta x}{\Delta y} \right]} = \frac{1}{\lim_{\Delta y \doteq 0} \left[ \frac{\Delta x}{\Delta y} \right]},$$

since  $\Delta x$  and  $\Delta y$  approach 0 together.

Therefore 
$$D_x y = \frac{1}{D_y x}.$$

EXAMPLES.

Find  $D_x u$  in the following cases:—

(1)  $u = \sin^2 x.$  *Ans.*  $D_x u = 2 \sin x \cos x.$

(2)  $u = \cos mx.$  *Ans.*  $D_x u = -m \sin mx.$

(3)  $u = xe^{\cos x}.$  *Ans.*  $D_x u = e^{\cos x}(1 - x \sin x).$

(4)  $u = \cos(\sin x).$  *Ans.*  $D_x u = -\cos x \sin(\sin x).$

(5)  $u = \sin(\log x).$  *Ans.*  $D_x u = \frac{1}{x} \cos(\log x).$

(6)  $u = \frac{\tan^3 x}{3} - \tan x + x.$  *Ans.*  $D_x u = \tan^4 x.$

(7)  $u = (a^2 + x^2) \tan^{-1} \frac{x}{a}.$  *Ans.*  $D_x u = 2x \tan^{-1} \frac{x}{a} + a.$

(8)  $u = x \sin^{-1} x.$  *Ans.*  $D_x u = \sin^{-1} x + \frac{x}{\sqrt{(1-x^2)}}.$

(9)  $u = \sin^{-1} \frac{x+1}{\sqrt{2}}.$  *Ans.*  $D_x u = \frac{1}{\sqrt{(1-2x-x^2)}}.$

$$(10) \quad u = \tan^{-1} \frac{x}{\sqrt{1-x^2}}. \quad \text{Ans. } D_x u = \frac{1}{\sqrt{1-x^2}}.$$

$$(11) \quad u = \sec^{-1} \frac{a}{\sqrt{a^2-x^2}}. \quad \text{Ans. } D_x u = \frac{1}{\sqrt{a^2-x^2}}.$$

$$(12) \quad u = \sin^{-1} \sqrt{\sin x}. \quad \text{Ans. } D_x u = \frac{1}{2} \sqrt{1 + \csc x}.$$

$$(13) \quad u = \tan^{-1} \frac{2x}{1-x^2}. \quad \text{Ans. } D_x u = \frac{2}{1+x^2}.$$

$$(14) \quad u = \tan^{-1} \sqrt{\frac{1-\cos x}{1+\cos x}}. \quad \text{Ans. } D_x u = \frac{1}{2}.$$

## CHAPTER V.

## INTEGRATION.

74. We are now able to extend materially our list of *formulas for direct integration* (Art. 55), one of which may be obtained from each of the derivative formulas in our last chapter. The following set contains the most important of these :—

$$D_x \log x = \frac{1}{x} \quad \text{gives } \int_x \frac{1}{x} = \log x.$$

$$- D_x a^x = a^x \log a \quad \text{“ } \int_x a^x \log a = a^x.$$

$$D_x e^x = e^x \quad \text{“ } \int_x e^x = e^x.$$

$$D_x \sin x = \cos x \quad \text{“ } \int_x \cos x = \sin x.$$

$$D_x \cos x = -\sin x \quad \text{“ } \int_x (-\sin x) = \cos x.$$

$$D_x \log \sin x = \operatorname{ctn} x \quad \text{“ } \int_x \operatorname{ctn} x = \log \sin x.$$

$$D_x \log \cos x = -\tan x \quad \text{“ } \int_x (-\tan x) = \log \cos x.$$

$$D_x \sin^{-1} x = \frac{1}{\sqrt{(1-x^2)}} \quad \text{“ } \int_x \frac{1}{\sqrt{(1-x^2)}} = \sin^{-1} x.$$

$$D_x \tan^{-1} x = \frac{1}{1+x^2} \quad \text{“ } \int_x \frac{1}{1+x^2} = \tan^{-1} x.$$

$$D_x \operatorname{vers}^{-1} x = \frac{1}{\sqrt{(2x-x^2)}} \quad \text{“ } \int_x \frac{1}{\sqrt{(2x-x^2)}} = \operatorname{vers}^{-1} x.$$

The second, fifth, and seventh in the second group can be written in the more convenient forms,

$$\int_x a^x = \frac{a^x}{\log a};$$

$$\int_x \sin x = -\cos x;$$

$$\int_x \tan x = -\log \cos x.$$

75. When the expression to be integrated does not come under any of the forms in the preceding list, *it can often be prepared for integration by a suitable change of variable*, the new variable, of course, being a function of the old. This method is called *integration by substitution*, and is based upon a formula easily

deduced from  $D_x(Fy) = D_y Fy \cdot D_x y$ ;

which gives immediately

$$Fy = \int_x (D_y Fy \cdot D_x y).$$

Let  $u = D_y Fy$ ,

then  $Fy = \int_y u$ ,

and we have  $\int_y u = \int_x (uD_x y)$ ;

or, interchanging  $x$  and  $y$ ,

$$\int_x u = \int_y (uD_y x). \quad [1]$$

For example, required  $\int_x (a + bx)^n$ .

Let  $z = a + bx$ ,

and then  $\int_x (a + bx)^n = \int_z z^n = \int_x (z^n \cdot D_x z)$ , by [1];

but  $x = \frac{z}{b} - \frac{a}{b}$ ,

$$D_x z = \frac{1}{b};$$

hence  $\int_x (a + bx)^n = \frac{1}{b} \int_x z^n = \frac{1}{b} \frac{z^{n+1}}{n+1}$ .

Substituting for  $z$  its value, we have

$$\int_x (a + bx)^n = \frac{1}{b} \frac{(a + bx)^{n+1}}{n + 1}.$$

(1)

Find  $\int_x \frac{1}{a + bx}$ .

EXAMPLE.

Ans.  $\frac{1}{b} \log(a + bx)$ .

76. If  $fx$  represents a function that can be integrated,  $f(a + bx)$  can always be integrated; for, if

$$z = a + bx,$$

then

$$D_x x = \frac{1}{b}$$

and

$$\int_x f(a + bx) = \int_x fz = \int_x fz D_x x = \frac{1}{b} \int_x fz.$$

EXAMPLES.

Find

(1)  $\int_x \sin ax$ .

Ans.  $-\frac{1}{a} \cos ax$ .

(2)  $\int_x \cos ax$ .

Ans.  $\frac{1}{a} \sin ax$ .

(3)  $\int_x \tan ax$ .

(4)  $\int_x \text{ctn } ax$ .

77. Required  $\int_x \frac{1}{\sqrt{a^2 - x^2}}$ .

$$\int_x \frac{1}{\sqrt{a^2 - x^2}} = \frac{1}{a} \int_x \frac{1}{\sqrt{\left[1 - \left(\frac{x}{a}\right)^2\right]}}$$

Let

$$z = \frac{x}{a},$$

then

$$x = az,$$

$$D_x x = a,$$

$$\begin{aligned} \frac{1}{a} \int_x \frac{1}{\sqrt{\left[1 - \left(\frac{x}{a}\right)^2\right]}} &= \frac{1}{a} \int_x \frac{1}{\sqrt{(1-z^2)}} = \frac{1}{a} \int_x \frac{1}{\sqrt{(1-z^2)}} D_x x \\ &= \int_x \frac{1}{\sqrt{(1-z^2)}} = \sin^{-1} z = \sin^{-1} \frac{x}{a}. \end{aligned}$$

## EXAMPLES.

Find

$$(1) \int_x \frac{1}{a^2 + x^2}. \quad \text{Ans. } \frac{1}{a} \tan^{-1} \frac{x}{a}.$$

$$(2) \int_x \frac{1}{\sqrt{(2ax - x^2)}}. \quad \text{Ans. } \text{vers}^{-1} \frac{x}{a}.$$

$$78. \text{ Required } \int_x \frac{1}{\sqrt{(x^2 + a^2)}}.$$

$$\text{Let} \quad z = x + \sqrt{(x^2 + a^2)};$$

$$\text{then} \quad z - x = \sqrt{(x^2 + a^2)},$$

$$z^2 - 2zx + x^2 = x^2 + a^2,$$

$$2zx = z^2 - a^2,$$

$$x = \frac{z^2 - a^2}{2z},$$

$$\sqrt{(x^2 + a^2)} = z - x = z - \frac{z^2 - a^2}{2z} = \frac{z^2 + a^2}{2z},$$

$$D_x x = \frac{z^2 + a^2}{2z^2}.$$

$$\int_x \frac{1}{\sqrt{(x^2 + a^2)}} = \int_x \frac{2z}{z^2 + a^2} = \int_x \frac{2z}{z^2 + a^2} D_x x$$

$$= \int_x \frac{2z}{z^2 + a^2} \cdot \frac{z^2 + a^2}{2z^2} = \int_x \frac{1}{z} = \log z = \log(x + \sqrt{x^2 + a^2}).$$

(1)

## EXAMPLE.

$$\text{Find } \int_x \frac{1}{\sqrt{(x^2 - a^2)}}.$$

$$\text{Ans. } \log(x + \sqrt{x^2 - a^2}).$$

79. When the expression to be integrated can be factored, the required integral can often be obtained by the use of a formula

deduced from  $D_x(uv) = uD_xv + vD_xu$ ,

which gives  $uv = \int_x uD_xv + \int_x vD_xu$

or  $\int_x uD_xv = uv - \int_x vD_xu$ . [1]

This method is called *integrating by parts*.

(a) For example, required  $\int_x \log x$ .

$\log x$  can be regarded as the product of  $\log x$  by 1.

Call  $\log x = u$  and  $1 = D_xv$ ,

then  $D_xu = \frac{1}{x}$ ,

$$v = x;$$

and we have

$$\begin{aligned} \int_x \log x &= \int_x 1 \log x = \int_x uD_xv = uv - \int_x vD_xu \\ &= x \log x - \int_x \frac{x}{x} = x \log x - x. \end{aligned}$$

EXAMPLE..

(1) Find  $\int_x x \log x$ .

*Suggestion:* Let  $\log x = u$  and  $x = D_xv$ .

$$\text{Ans. } \frac{1}{2} x^2 \left( \log x - \frac{1}{2} \right).$$

80. Required  $\int_x \sin^2 x$ .

Let  $u = \sin x$  and  $D_xv = \sin x$ ,

then  $D_xu = \cos x$ ,

$$v = -\cos x,$$

$$\int_x \sin^2 x = -\sin x \cos x + \int_x \cos^2 x;$$

but

$$\cos^2 x = 1 - \sin^2 x,$$

so

$$\int_x \cos^2 x = \int_x 1 - \int_x \sin^2 x = x - \int_x \sin^2 x$$

and

$$\int_x \sin^2 x = x - \sin x \cos x - \int_x \sin^2 x.$$

$$2 \int_x \sin^2 x = x - \sin x \cos x.$$

$$\int_x \sin^2 x = \frac{1}{2} (x - \sin x \cos x).$$

## EXAMPLES.

(1) Find  $\int_x \cos^2 x$ . *Ans.*  $\frac{1}{2} (x + \sin x \cos x)$ .

(2)  $\int_x \sin x \cos x$ . *Ans.*  $\frac{\sin^2 x}{2}$ .

81. *Very often both methods described above are required in the same integration.*

(a) *Required*  $\int_x \sin^{-1} x$ .

Let  $\sin^{-1} x = y,$

then

$$x = \sin y;$$

$$D_y x = \cos y,$$

$$\int_x \sin^{-1} x = \int_y y = \int_y y \cos y.$$

Let  $u = y$  and  $D_y v = \cos y;$

then

$$D_y u = 1,$$

$$v = \sin y,$$

and

$$\int_y y \cos y = y \sin y - \int_y \sin y = y \sin y + \cos y = x \sin^{-1} x + \sqrt{(1-x^2)}.$$

Any inverse or anti-function can be integrated by this method if the direct function is integrable.

(b) Thus,  $\int_x f^{-1} x = \int_y y = \int_y y D_y f y = y f y - \int_y f y$

where

$$y = f^{-1} x.$$



EXAMPLES.

(1) Find  $\int_x \cos^{-1}x$ . *Ans.*  $x \cos^{-1}x - \sqrt{1-x^2}$ .

(2)  $\int_x \tan^{-1}x$ . *Ans.*  $x \tan^{-1}x - \frac{1}{2} \log(1+x^2)$ .

(3)  $\int_x \text{vers}^{-1}x$ . *Ans.*  $(x-1) \text{vers}^{-1}x + \sqrt{2x-x^2}$ .

82. Sometimes an algebraic transformation, either alone or in combination with the preceding methods, is useful.

(a) Required  $\int_x \frac{1}{x^2-a^2}$ .

$$\frac{1}{x^2-a^2} = \frac{1}{2a} \left( \frac{1}{x-a} - \frac{1}{x+a} \right),$$

and, by Art. 75 (Ex.),

$$\int_x \frac{1}{x^2-a^2} = \frac{1}{2a} [\log(x-a) - \log(x+a)] = \frac{1}{2a} \log \frac{x-a}{x+a}.$$

(b) Required  $\int_x \sqrt{\left(\frac{1+x}{1-x}\right)}$ .

$$\sqrt{\left(\frac{1+x}{1-x}\right)} = \frac{1+x}{\sqrt{1-x^2}} = \frac{1}{\sqrt{1-x^2}} + \frac{x}{\sqrt{1-x^2}},$$

$$\int_x \frac{1}{\sqrt{1-x^2}} = \sin^{-1}x.$$

$\int_x \frac{x}{\sqrt{1-x^2}}$  can be readily obtained by substituting  $y = (1-x^2)$ ,  $y^{\frac{1}{2}} = \sqrt{1-x^2}$   
and is  $-\sqrt{1-x^2}$ ;

hence  $\int_x \sqrt{\left(\frac{1+x}{1-x}\right)} = \sin^{-1}x - \sqrt{1-x^2}$ .

(c) Required  $\int_x \sqrt{(a^2-x^2)}$ .

$$\sqrt{(a^2-x^2)} = \frac{a^2-x^2}{\sqrt{(a^2-x^2)}} = \frac{a^2}{\sqrt{(a^2-x^2)}} - \frac{x}{\sqrt{(a^2-x^2)}}$$

$$\begin{aligned} \int \frac{x}{\sqrt{1-x^2}} &= -\int \frac{1}{2\sqrt{y}} \\ &= -\frac{1}{2} \int y^{-\frac{1}{2}} = -y^{\frac{1}{2}} \\ &= -\sqrt{1-x^2} \end{aligned}$$

*Handwritten notes:*  
 $x = \sqrt{1-y}$   
 $\frac{dx}{dy} = -\frac{1}{2\sqrt{1-y}}$   
 $\int \frac{x}{\sqrt{1-x^2}} = \int \frac{\sqrt{1-y}}{\sqrt{y}} \cdot \frac{dy}{2\sqrt{1-y}}$   
 $= \frac{1}{2} \int \frac{1}{\sqrt{y}} = \frac{1}{2} \cdot 2\sqrt{y} = \sqrt{y} = \sqrt{1-x^2}$

and 
$$\int_x \sqrt{(a^2 - x^2)} = a^2 \int_x \frac{1}{\sqrt{(a^2 - x^2)}} - \int_x \frac{x^2}{\sqrt{(a^2 - x^2)}},$$

whence 
$$\int_x \sqrt{(a^2 - x^2)} = a^2 \sin^{-1} \frac{x}{a} - \int_x \frac{x^2}{\sqrt{(a^2 - x^2)}},$$
 by Art. 77;

but 
$$\int_x \sqrt{(a^2 - x^2)} = x\sqrt{(a^2 - x^2)} + \int_x \frac{x^2}{\sqrt{(a^2 - x^2)}},$$

by *integration by parts*, if we let

$$u = \sqrt{(a^2 - x^2)} \text{ and } D_x v = 1.$$

Adding our two equations, we have

$$2 \int_x \sqrt{(a^2 - x^2)} = x\sqrt{(a^2 - x^2)} + a^2 \sin^{-1} \frac{x}{a};$$

and 
$$\therefore \int_x \sqrt{(a^2 - x^2)} = \frac{1}{2} \left( x\sqrt{a^2 - x^2} + a^2 \sin^{-1} \frac{x}{a} \right).$$

#### EXAMPLES.

Find

(1)  $\int_x \sqrt{(x^2 + a^2)}.$

*Ans.*  $\frac{1}{2} [x\sqrt{(x^2 + a^2)} + a^2 \log(x + \sqrt{x^2 + a^2})].$

(2)  $\int_x \sqrt{(x^2 - a^2)}.$

*Ans.*  $\frac{1}{2} [x\sqrt{(x^2 - a^2)} - a^2 \log(x + \sqrt{x^2 - a^2})].$

#### Applications.

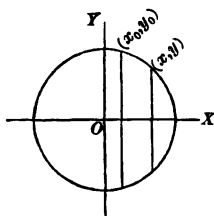
83. *To find the area of a segment of a circle.*

Let the equation of the circle be

$$x^2 + y^2 = a^2,$$

and let the required segment be cut off by the double ordinates through  $(x_0, y_0)$  and  $(x, y)$ . Then the required area

$$A = 2 \int_x y + C.$$



From the equation of the circle,

$$y = \sqrt{(a^2 - x^2)},$$

hence  $A = 2 \int_x \sqrt{(a^2 - x^2)} + C;$

and therefore, by Art. 82 (c),

$$A = x\sqrt{(a^2 - x^2)} + a^2 \sin^{-1} \frac{x}{a} + C.$$

As the area is measured from the ordinate  $y_0$  to the ordinate  $y$ ,

$$A = 0 \text{ when } x = x_0;$$

therefore  $0 = x_0\sqrt{(a^2 - x_0^2)} + a^2 \sin^{-1} \frac{x_0}{a} + C,$

$$C = -x_0\sqrt{(a^2 - x_0^2)} - a^2 \sin^{-1} \frac{x_0}{a},$$

and we have

$$A = x\sqrt{(a^2 - x^2)} + a^2 \sin^{-1} \frac{x}{a} - x_0\sqrt{(a^2 - x_0^2)} - a^2 \sin^{-1} \frac{x_0}{a}$$

If  $x_0 = 0$ , and the segment begins with the axis of Y,

$$A = x\sqrt{(a^2 - x^2)} + a^2 \sin^{-1} \frac{x}{a}.$$

If, at the same time,  $x = a$ , the segment becomes a semicircle, and

$$A = a\sqrt{(a^2 - a^2)} + a^2 \sin^{-1} \frac{a}{a} = \frac{\pi a^2}{2}.$$

The area of the whole circle is  $\pi a^2$ .

**EXAMPLES.**

(1) Show that, in the case of an ellipse,

$$\frac{x^2}{a^2} + \frac{y^2}{b^2} = 1,$$

the area of a segment beginning with any ordinate  $y_0$  is

$$A = \frac{b}{a} \left[ x \sqrt{(a^2 - x^2)} + a^2 \sin^{-1} \frac{x}{a} - x_0 \sqrt{(a^2 - x_0^2)} - a^2 \sin^{-1} \frac{x_0}{a} \right].$$

That if the segment begins with the minor axis,

$$A = \frac{b}{a} \left[ x \sqrt{(a^2 - x^2)} + a^2 \sin^{-1} \frac{x}{a} \right].$$

That the area of the whole ellipse is  $\pi ab$ .

(2) The area of a segment of the hyperbola

$$\frac{x^2}{a^2} - \frac{y^2}{b^2} = 1$$

is

$$A = \frac{b}{a} \left[ x \sqrt{(x^2 - a^2)} - a^2 \log(x + \sqrt{x^2 - a^2}) - x_0 \sqrt{(x_0^2 - a^2)} + a^2 \log(x_0 + \sqrt{x_0^2 - a^2}) \right].$$

If  $x_0 = a$ , and the segment begins at the vertex,

$$A = \frac{b}{a} \left[ x \sqrt{(x^2 - a^2)} - a^2 \log(x + \sqrt{x^2 - a^2}) + a^2 \log a \right].$$

84. To find the length of any arc of a circle, the coördinates of its extremities being  $(x_0, y_0)$  and  $(x, y)$ .

By Art. 52,  $s = \int_x \sqrt{1 + (D_x y)^2}.$

From the equation of the circle,

$$x^2 + y^2 = a^2,$$

we have

$$2x + 2yD_x y = 0,$$

$$D_x y = -\frac{x}{y},$$

$$1 + (D_x y)^2 = \frac{x^2 + y^2}{y^2} = \frac{a^2}{y^2},$$

$$s = \int \frac{a}{y} = a \int \frac{1}{\sqrt{(a^2 - x^2)}} = a \sin^{-1} \frac{x}{a} + C. \quad (\text{Art. 77.})$$

When  $x = x_0, \quad s = 0;$

hence  $0 = a \sin^{-1} \frac{x_0}{a} + C,$

$$C = -a \sin^{-1} \frac{x_0}{a},$$

and  $s = a \left( \sin^{-1} \frac{x}{a} - \sin^{-1} \frac{x_0}{a} \right).$

If  $x_0 = 0$ , and the arc is measured from the highest point of the circle,

$$s = a \sin^{-1} \frac{x}{a}.$$

If the arc is a quadrant,  $x = a$ ,

$$s = a \sin^{-1}(1) = \frac{\pi a}{2},$$

and the whole circumference =  $2\pi a$ .

85. To find the length of an arc of the parabola  $y^2 = 2mx$ .

We have  $2yD_x y = 2m;$

$$D_x y = \frac{m}{y};$$

$$\sqrt{[1 + (D_x y)^2]} = \sqrt{\left(\frac{m^2 + y^2}{y^2}\right)} = \frac{1}{y} \sqrt{(m^2 + y^2)};$$

$$s = \int_x \left[ \frac{1}{y} \sqrt{(m^2 + y^2)} \right] = \int_y \left[ \frac{1}{y} \sqrt{(m^2 + y^2)} D_y x \right];$$

$$D_y x = \frac{1}{D_x y} = \frac{y}{m}, \quad \text{by Art. 73;}$$

$$s = \frac{1}{m} \int_y \sqrt{m^2 + y^2} = \frac{1}{2m} [y\sqrt{m^2 + y^2} + m^2 \log(y + \sqrt{m^2 + y^2})] + C,$$

by Art. 82, Ex. 1.

If the arc is measured from the vertex,

$$s = 0 \text{ when } y = 0;$$

$$0 = \frac{1}{2m} (m^2 \log m) + C,$$

$$C = -\frac{1}{2} m \log m,$$

$$\text{and } s = \frac{1}{2} \left[ \frac{y\sqrt{(m^2 + y^2)}}{m} + m \log \frac{y + \sqrt{(m^2 + y^2)}}{m} \right].$$

#### EXAMPLE.

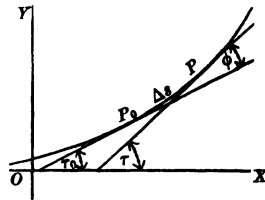
- (1). Find the length of the arc of the curve  $x^3 = 27y^2$  included between the origin and the point whose abscissa is 15.

*Ans.* 19.

CHAPTER VI.

CURVATURE.

86. *The total curvature* of an arc of a continuous curve is its total change of direction, and is measured by the angle formed by the tangents at its extremities. The *mean curvature* of an arc is its total curvature divided by its length. The *actual curvature* of a curve at a given point is the limit approached by the mean curvature of the arc beginning at the point, as the length of the arc is indefinitely decreased.



Thus, in the figure, the *total curvature* of the arc  $P_0 P$ , or  $\Delta s$ , is the angle  $\varphi$ , which is equal to  $\tau - \tau_0$  or  $\Delta\tau$ . The *mean curvature* is  $\frac{\Delta\tau}{\Delta s}$ , and the *actual curvature* at  $P_0$  is

$$\lim_{\Delta s \rightarrow 0} \left[ \frac{\Delta\tau}{\Delta s} \right] = D_s \tau.$$

87. To find  $D_s \tau$  in any particular example, we must, in theory, begin by expressing  $\tau$  in terms of  $s$  by the aid of our old relations

$$\tan \tau = D_x y,$$

$$D_x s = \sqrt{[1 + (D_x y)^2]},$$

together with the equation of the given curve; but, in practice, this part of the work may be avoided. By the aid of the relations just referred to,  $\tau$  and  $s$  may be expressed in terms of  $x$ ; and, consequently, we may regard them as functions of  $x$ , and can obtain their derivatives with respect to  $x$ ; and then the derivative of either with respect to the other may be found by the following principle.

88. If  $y$  is a function of  $x$ , and  $z$  is a function of  $x$ ,

$$D_y z = \frac{D_x z}{D_x y}. \quad [1]$$

$$\begin{aligned} \text{For } \frac{D_x z}{D_x y} &= \frac{\lim_{\Delta x \rightarrow 0} \left[ \frac{\Delta z}{\Delta x} \right]}{\lim_{\Delta x \rightarrow 0} \left[ \frac{\Delta y}{\Delta x} \right]} = \lim_{\Delta x \rightarrow 0} \left[ \frac{\frac{\Delta z}{\Delta x}}{\frac{\Delta y}{\Delta x}} \right] \\ &= \lim_{\Delta x \rightarrow 0} \left[ \frac{\Delta z}{\Delta y} \right] = \lim_{\Delta y \rightarrow 0} \left[ \frac{\Delta z}{\Delta y} \right] = D_y z; \end{aligned}$$

for  $\Delta x$ ,  $\Delta y$ , and  $\Delta z$  approach zero simultaneously.

89. We have thus, if  $x$  represents the curvature at any point of the curve,

$$x = D_s \tau = \frac{D_x \tau}{D_x s}.$$

Since

$$\begin{aligned} \tan \tau &= D_x y, \\ \sec^2 \tau D_x \tau &= D_x^2 y, \end{aligned}$$

$$D_x \tau = \frac{D_x^2 y}{\sec^2 \tau};$$

but

$$\sec^2 \tau = 1 + \tan^2 \tau = 1 + (D_x y)^2,$$

and

$$D_x \tau = \frac{D_x^2 y}{1 + (D_x y)^2};$$



and, as

$$D_x s = \sqrt{[1 + (D_x y)^2]},$$

we have

$$x = \frac{D_x^2 y}{\pm [1 + (D_x y)^2]^{\frac{3}{2}}}.$$

Either the positive or the negative value might be chosen as the normal one. For reasons that will be evident hereafter, it is customary to use the negative one; and we have

$$x = \frac{-D_x^2 y}{[1 + (D_x y)^2]^{\frac{3}{2}}}.$$

(a) For example, let it be required to find *the curvature of a straight line*  $Ax + By + C = 0$  at any point.

Differentiating with respect to  $x$ , we have

$$A + BD_x y = 0;$$

$$D_x y = -\frac{A}{B};$$

$$D_x^2 y = 0;$$

$$1 + (D_x y)^2 = \frac{A^2 + B^2}{B^2};$$

$$x = \frac{-D_x^2 y}{[1 + (D_x y)^2]^{\frac{3}{2}}} = \frac{0}{\left(\frac{A^2 + B^2}{B^2}\right)^{\frac{3}{2}}} = 0;$$

a result which might have been anticipated.

(b) *The curvature of a circle,*

$$x^2 + y^2 = a^2.$$

$$2x + 2yD_x y = 0;$$

$$D_x y = -\frac{x}{y};$$

$$D_x^2 y = -\frac{y - x D_x y}{y^2} = -\frac{y + \frac{x^2}{y}}{y^2} = -\frac{x^2 + y^2}{y^3} = -\frac{a^2}{y^3};$$

$$1 + (D_x y)^2 = \frac{x^2 + y^2}{y^2} = \frac{a^2}{y^2};$$

$$x = \frac{a^2}{y^3} \div \left(\frac{a^2}{y^2}\right)^{\frac{1}{2}} = \frac{a^2}{y^3} \div \frac{a}{y} = \frac{1}{a}.$$

Hence the curvature of a circle is the same at every point, and is equal to the reciprocal of the radius.

If  $a = 1$ ,

$$x = 1;$$

and the unit of curvature is the curvature of the circle whose radius is unity.

(c) *The curvature of a parabola,*

$$y^2 = 2mx.$$

$$2y D_x y = 2m;$$

$$D_x y = \frac{m}{y};$$

$$D_x^2 y = -\frac{m}{y^2} D_x y = -\frac{m^2}{y^3};$$

$$1 + (D_x y)^2 = \frac{m^2 + y^2}{y^2};$$

$$x = \frac{m^2}{y^3} \div \frac{(m^2 + y^2)^{\frac{1}{2}}}{y^2} = \frac{m^2}{(m^2 + y^2)^{\frac{3}{2}}};$$

and is a function of  $y$ , one of the coördinates of the point con-

sidered. From the form of  $x$ , it is obvious that the curvature

is greatest when  $y = 0$ ;

that is, at the vertex of the curve; that it decreases as  $y$  increases or decreases, and that it has equal values for values of  $y$  which are equal with opposite signs.

EXAMPLES.

- (1) Required the curvature of the ellipse

$$\frac{x^2}{a^2} + \frac{y^2}{b^2} = 1 \quad \text{at any point.}$$

$$\text{Ans. } x = \frac{a^4 b^4}{(b^4 x^2 + a^4 y^2)^{\frac{3}{2}}}$$

- (2) Of the hyperbola  $\frac{x^2}{a^2} - \frac{y^2}{b^2} = 1$ .

$$\text{Ans. } x = \frac{a^4 b^4}{(b^4 x^2 + a^4 y^2)^{\frac{3}{2}}}$$

- (3) Of the equilateral hyperbola

$$xy = \frac{a^2}{2}$$

$$\text{Ans. } x = -\frac{a^2}{(x^2 + y^2)^{\frac{3}{2}}}$$

*Osculating Circle.*

90. As the curvature of a circle has been found to be the reciprocal of its radius, a circle may be drawn which shall have any curvature required. *A circle tangent to a curve at any point, and having the same curvature as the curve at that point, is called the osculating circle of the curve at the point in question. Its radius is called the radius of curvature of the curve at the point, and its centre is called the centre of curvature.*

From the definition of the radius of curvature, it is obviously

normal to the curve, and its length is the reciprocal of the curvature at the point. If  $\rho$  represents the radius of curvature, we

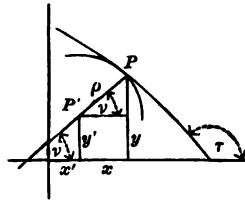
have 
$$\rho = \frac{1}{\kappa}$$

Of course,  $\rho$  is generally a function of the coördinates of the point of the curve, and changes its length as the position of the point in question is changed.

### *Evolutes.*

91. *The locus of the centre of curvature of a given curve is the evolute of the curve.*

#### PROBLEM.



*To find the equation of the evolute of a given curve*

$$y = fx.$$

Let  $P$ , coördinates  $(x, y)$ , be any point of the curve, and  $P'$ ,  $(x', y')$  the corresponding point of the evolute;  $\nu$  the angle made by the normal with the axis of  $x$ , and  $\rho$  the radius of curvature at  $P$ .  $\rho$  and  $\tau$  can be found from the equation of the curve, and

$$\nu = \tau - 90^\circ.$$

We see from the figure, that

$$x' = x - \rho \cos \nu,$$

$$y' = y - \rho \sin \nu :$$

$\rho$  and  $\nu$  can be expressed in terms of  $x$  and  $y$ ; and then, with the given equation,

$$y = fx,$$

we shall have three equations connecting the four variables,  $x$ ,  $y$ ,  $x'$ , and  $y'$ . We can eliminate  $x$  and  $y$ , and so obtain a single equation connecting  $x'$  and  $y'$ , the variable coördinates of any point on the evolute; and this will be the equation required.

92. For example: Let us find the *evolute of the parabola*

$$y^2 = 2mx.$$

$$\tan \tau = D_x y = \frac{m}{y};$$

$$\tan \nu = \tan(\tau - 90^\circ) = -\cot \tau = -\frac{y}{m};$$

$$\sec^2 \nu = 1 + \tan^2 \nu = \frac{m^2 + y^2}{m^2};$$

$$\cos \nu = \pm \frac{m}{\sqrt{(m^2 + y^2)}};$$

$$\sin \nu = \pm \frac{y}{\sqrt{(m^2 + y^2)}}.$$

Since  $\nu$  is given by its tangent, it may always be taken less than  $180^\circ$ ; therefore we may take the positive value of  $\sin \nu$ , and in that case, as  $\tan \nu$  is negative, we must take  $\cos \nu$  with the negative sign: we have then

$$\sin \nu = \frac{y}{\sqrt{(m^2 + y^2)}};$$

$$\cos \nu = \frac{-m}{\sqrt{(m^2 + y^2)}}.$$

We have seen, Art. 89 (c), that

$$x = \frac{m^2}{(m^2 + y^2)^{\frac{3}{2}}};$$

hence

$$\rho = \frac{(m^2 + y^2)^{\frac{3}{2}}}{m^2};$$

$$x' = x + \frac{m^2 + y^2}{m};$$

$$y' = y - \frac{(m^2 + y^2)y}{m^2};$$

and these equations, together with

$$y^2 = 2mx,$$

are the equations of the evolute.

Reducing, we have

$$x' = m + 3x;$$

whence

$$x = \frac{x' - m}{3};$$

and

$$y' = -\frac{y^3}{m^2};$$

whence

$$y = -(m^2 y')^{\frac{1}{3}}.$$

Substituting in the equation of the parabola, we have

$$(m^2 y')^{\frac{2}{3}} = \frac{2m}{3} (x' - m).$$

Reducing,

$$m^4 y'^2 = \frac{8}{27} m^3 (x' - m)^3,$$

$$y'^2 = \frac{8}{27m} (x' - m)^3;$$

or, dropping accents,

$$y^2 = \frac{8}{27m} (x - m)^3,$$

the required evolute; a semi-cubical parabola.

93. By expressing  $\rho$  and  $\nu$  in terms of  $x$  and  $y$  in the general equations of the evolute of  $y = fx$ ,

we can throw these equations into a rather more convenient form.

We have the values  $\rho = -\frac{[1 + (D_x y)^2]^{\frac{3}{2}}}{D_x^2 y}$ ,

$$\tan \tau = D_x y,$$

$$\tan \nu = -\frac{1}{D_x y},$$

and

$$\cot \nu = -D_x y.$$

$$\sin \nu = \frac{1}{[1 + (D_x y)^2]^{\frac{1}{2}}},$$

$$\cos \nu = -\frac{D_x y}{[1 + (D_x y)^2]^{\frac{1}{2}}},$$

$$x' = x - \frac{[1 + (D_x y)^2]^{\frac{3}{2}}}{D_x^2 y} \cdot \frac{D_x y}{[1 + (D_x y)^2]^{\frac{1}{2}}},$$

$$y' = y + \frac{[1 + (D_x y)^2]^{\frac{3}{2}}}{D_x^2 y} \cdot \frac{1}{[1 + (D_x y)^2]^{\frac{1}{2}}}.$$

Reducing

$$\left. \begin{aligned} x' &= x - D_x y \frac{1 + (D_x y)^2}{D_x^2 y} \\ y' &= y + \frac{1 + (D_x y)^2}{D_x^2 y} \end{aligned} \right\} [1]$$

EXAMPLE.

(1)

Required the evolute of a circle.

Ans.  $x' = 0, y' = 0.$

94. To find the evolute of an ellipse,

$$\frac{x^2}{a^2} + \frac{y^2}{b^2} = 1.$$

$$D_x y = \frac{-b^2 x}{a^2 y};$$

$$D_x^2 y = -\frac{b^4}{a^2 y^3};$$

$$1 + (D_x y)^2 = \frac{b^4 x^2 + a^4 y^2}{a^4 y^2};$$

$$x' = x + \frac{b^2 x}{a^2 y} \cdot \frac{b^4 x^2 + a^4 y^2}{a^4 y^2} \left( -\frac{a^2 y^3}{b^4} \right) = x - \frac{x(b^4 x^2 + a^4 y^2)}{a^4 b^2};$$

$$y' = y + \frac{b^4 x^2 + a^4 y^2}{a^4 y^2} \left( -\frac{a^2 y^3}{b^4} \right) = y - \frac{y(b^4 x^2 + a^4 y^2)}{a^2 b^4}.$$

Since 
$$\frac{x^2}{a^2} + \frac{y^2}{b^2} = 1,$$

$$b^2 x^2 + a^2 y^2 = a^2 b^2;$$

$$a^4 y^2 = a^2 b^2 (a^2 - x^2);$$

and

$$b^4 x^2 = a^2 b^2 (b^2 - y^2).$$

$$b^4 x^2 + a^4 y^2 = b^2 (a^4 - a^2 x^2 + b^2 x^2),$$

or

$$a^2 (b^4 - b^2 y^2 + a^2 y^2).$$

$$x' = x - \frac{x(a^4 - a^2 x^2 + b^2 x^2)}{a^4} = \frac{a^2 - b^2}{a^4} x^3;$$

$$y' = y - \frac{y(b^4 - b^2 y^2 + a^2 y^2)}{b^4} = -\frac{a^2 - b^2}{b^4} y^3;$$

$$x = \left( \frac{a^4 x'}{a^2 - b^2} \right)^{\frac{1}{3}};$$

$$y = -\left( \frac{b^4 y'}{a^2 - b^2} \right)^{\frac{1}{3}}.$$

Substituting in

$$\frac{x^2}{a^2} + \frac{y^2}{b^2} = 1,$$



we have 
$$\left(\frac{ax'}{a^2 - b^2}\right)^{\frac{2}{3}} + \left(\frac{by'}{a^2 - b^2}\right)^{\frac{2}{3}} = 1;$$

or, dropping accents,

$$(ax)^{\frac{2}{3}} + (by)^{\frac{2}{3}} = (a^2 - b^2)^{\frac{2}{3}}.$$

EXAMPLE.

(1) Find the evolute of the hyperbola  $\frac{x^2}{a^2} - \frac{y^2}{b^2} = 1$ .

Ans.  $(ax)^{\frac{2}{3}} - (by)^{\frac{2}{3}} = (a^2 + b^2)^{\frac{2}{3}}.$

*Properties of the Evolute.*

95. We have defined the evolute as the *locus of the centre of curvature* of the curve. It is also the *envelop of the normals* of the given curve, as may be readily shown; that is, *every normal to the curve is tangent to the evolute*. Let  $\nu$  be the inclination of the normal at the point  $(x, y)$  of the given curve to the axis of X, and  $\tau'$  the inclination of the tangent at the corresponding point  $(x', y')$  of the evolute. We have seen already that the normal at  $(x, y)$  passes through  $(x', y')$ , so it is only necessary to prove that  $\tau' = \nu$ .

But 
$$\tan \tau' = D_x y'$$

and 
$$\tan \nu = -\frac{1}{D_x y}.$$

Hence we must show that 
$$D_x y' = -\frac{1}{D_x y}.$$

By Art. 88, 
$$D_x y' = \frac{D_x y'}{D_x x'},$$

since  $x'$  and  $y'$  may both be regarded as functions of  $x$ .

$$x' = x - \frac{D_x y [1 + (D_x y)^2]}{D_x^2 y};$$

$$y' = y + \frac{1 + (D_x y)^2}{D_x^2 y};$$

$$D_x x' = 1 - \frac{(D_x^2 y)^2 + 3(D_x y)^2 (D_x^2 y)^2 - D_x y [1 + (D_x y)^2] D_x^2 y}{(D_x^2 y)^2}$$

$$= - \frac{D_x y \{3 D_x y (D_x^2 y)^2 - [1 + (D_x y)^2] D_x^2 y\}}{(D_x^2 y)^2};$$

$$D_x y' = D_x y + \frac{2 D_x y (D_x^2 y)^2 - [1 + (D_x y)^2] D_x^2 y}{(D_x^2 y)^2}$$

$$= \frac{3 D_x y (D_x^2 y)^2 - [1 + (D_x y)^2] D_x^2 y}{(D_x^2 y)^2};$$

$$D_x x' = \frac{D_x y'}{D_x y} = - \frac{1}{D_x y}.$$

Q.E.D.

96. A second important property of the evolute is that *the length of any arc of the evolute is the difference between the lengths of the radii of curvature of the given curve which pass through the extremities of the arc in question.*

Let  $(x_1', y_1')$  and  $(x_2', y_2')$  be the extremities of any arc of the evolute;  $\rho_1$  and  $\rho_2$  the radii of curvature drawn from these points to the curve;  $s_1'$  the length of the arc of the evolute measured from some fixed point on the evolute to  $(x_1', y_1')$ ; and  $s_2'$  the length of an arc measured from the same fixed point to  $(x_2', y_2')$ . Then we wish to prove that

$$s_2' - s_1' = \rho_2 - \rho_1,$$

or 
$$\Delta s' = \Delta \rho,$$

or 
$$\frac{\Delta s'}{\Delta \rho} = 1,$$

or 
$$\lim_{\Delta \rho \rightarrow 0} \left[ \frac{\Delta s'}{\Delta \rho} \right] = 1,$$

or 
$$D_\rho s' = 1,$$

where  $s'$  must be regarded as a function of  $\rho$ .

But 
$$D_\rho s' = \frac{D_x s'}{D_x \rho}$$

and 
$$D_x s' = \frac{D_x^2 s'}{D_x x} = D_x s' \cdot D_x x'$$

$$D_x s' = [1 + (D_x y')^2]^{\frac{1}{2}},$$

$$D_x y' = -\frac{1}{D_x y}, \quad \text{by Art. 95;}$$

hence 
$$D_x s' = \frac{1}{D_x y} [1 + (D_x y)^2]^{\frac{1}{2}}.$$

$$D_x s' = -\frac{[1 + (D_x y)^2]^{\frac{1}{2}} \{3 D_x y (D_x^2 y)^2 - [1 + (D_x y)^2] D_x^3 y\}}{(D_x^2 y)^3},$$

by Art. 95.

$$\rho = -\frac{[1 + (D_x y)^2]^{\frac{1}{2}}}{D_x^2 y};$$

$$D_x \rho = \frac{-[1 + (D_x y)^2]^{\frac{1}{2}} \{3 D_x y (D_x^2 y)^2 - [1 + (D_x y)^2] D_x^3 y\}}{(D_x^2 y)^3};$$

$$D_\rho s' = \frac{D_x s'}{D_x \rho} = 1. \quad \text{Q. E. D.}$$

97. These two properties enable us to regard any curve as traced by the extremity of a stretched string unwound from the evolute, the string being always tangent to the evolute, and its free portion at any instant being the radius of curvature of the curve at the point traced at that instant. From this point of view, the curve itself is called the involute.

## CHAPTER VII.

## SPECIAL EXAMPLES AND APPLICATIONS.

*The Cycloid.*

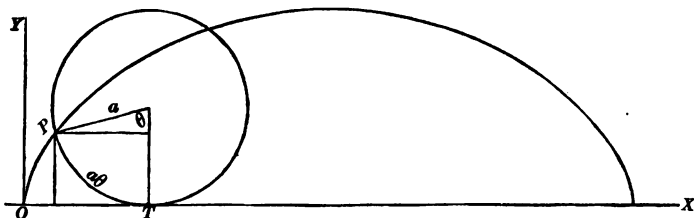
98. The *cycloid*, a plane curve possessing very remarkable geometrical and mechanical properties, was first studied just before the invention of the Calculus, and has always been a favorite with mathematicians.

It is the curve described in space by a fixed point in the rim of a wheel as the wheel rolls along in a straight line; or, more strictly, it is the curve described by any fixed point in the circumference of a circle, as the circle, keeping always in the same plane, rolls without sliding along a fixed straight line. The rolling circle is called the *generating circle*, and the fixed point the *generating point*, of the cycloid.

The curve will evidently consist of an indefinite number of equal arches, and can be cut by a straight line in an unlimited number of points. Its equation, then, cannot be of a finite degree, and so cannot be an algebraic equation. The curve is a *transcendental*, as distinguished from an *algebraic*, curve.

99. As the arches are all alike, it will do to consider a single one. Its base is obviously equal to the circumference, and its height to the diameter, of the generating circle, and its right and left hand halves are symmetrical.

We can get its equation most easily with the aid of an auxiliary angle. Take as axes the base of the cycloid, and a perpendicular to the base through the lowest position of the generating point, and represent by  $\theta$  the angle made by the radius drawn to the generating point at any instant, with the radius drawn to the lowest point of the generating circle. The arc



joining the two points just mentioned is  $a\theta$ , by Art. 66, if  $a$  is the radius of the circle; and this is therefore the length  $OT$ . If  $x$  and  $y$  are the coördinates of  $P$ , any point on the cycloid,

$$\left. \begin{aligned} x &= a\theta - a \sin \theta \\ y &= a - a \cos \theta \end{aligned} \right\}; \quad (A)$$

and these may be taken as the equations of the cycloid. Of course,  $\theta$  may be eliminated between these equations, and a single equation obtained, containing  $x$  and  $y$  as the only varia-

bles. We get  $\cos \theta = \frac{a-y}{a}$ ,

$$1 - \cos \theta = \frac{y}{a} = \text{vers } \theta,$$

hence  $\theta = \text{vers}^{-1} \frac{y}{a}$ ;

$$\sin \theta = \sqrt{(1 - \cos^2 \theta)} = \pm \frac{1}{a} \sqrt{(2ay - y^2)},$$

and  $x = a \text{vers}^{-1} \frac{y}{a} \mp \sqrt{(2ay - y^2)}$ , (B)

where the upper sign before the radical is to be used for points corresponding to values of  $\theta < \pi$ , that is, for points on the first half of the arch, and the lower sign for points on the second half of the curve.

## EXAMPLES.

(1) Discuss completely the form of the cycloid from equations (A), supposing  $\theta$  to increase from 0 to  $2\pi$ .

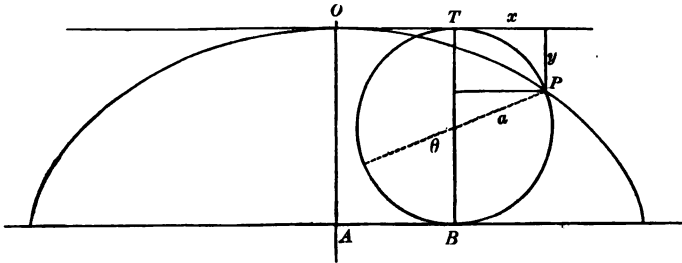
(2) Discuss the form of the cycloid from equation (B), supposing  $y$  to increase from 0 to  $2a$ .

100. If our axes are lines parallel and perpendicular to the base through the highest point of the curve, the equations have a slightly different form. Let  $\theta$  be measured from the highest point of the generating circle.

$$OT = AB = a\theta$$

and

$$\left. \begin{aligned} x &= a\theta + a \sin \theta \\ y &= -a + a \cos \theta \end{aligned} \right\} \quad (C)$$



## EXAMPLES.

(1) Obtain equations (C) from equations (A) by transformation of coördinates, noting that the formulas required are

$$x = a\pi + x',$$

$$y = 2a + y',$$

$$\theta = \pi + \theta'.$$

(2) Eliminate  $\theta$  and obtain a single equation for the cycloid referred to its vertex as origin.

101. The properties of the curve can be investigated from the equations involving  $\theta$  or from the single equation. In the text we shall employ the former. We ought to be able to determine (1) the direction of the tangent and normal at any point of the curve; (2) the equations of tangent and normal; (3) the lengths of tangent, normal, subtangent, and subnormal; (4) the curvature of the cycloid at any point; (5) the evolute; (6) the length of an arc of the curve; (7) the area of a segment of the curve.

$$(1) \quad 102. \quad x = a\theta - a \sin \theta,$$

$$y = a - a \cos \theta,$$

$$\tan \tau = D_x y = \frac{D_\theta y}{D_\theta x} = \frac{a \sin \theta}{a - a \cos \theta} = \frac{\sin \theta}{1 - \cos \theta} = \frac{2 \sin \frac{\theta}{2} \cos \frac{\theta}{2}}{2 \sin^2 \frac{\theta}{2}} = \cot \frac{\theta}{2};$$

$$\tan \nu = -\cot \tau = -\tan \frac{\theta}{2}.$$

Since, as we have seen in Art. 99,

$$\sin \theta = \frac{1}{a} \sqrt{(2ay - y^2)}$$

and  $1 - \cos \theta = \frac{y}{a},$

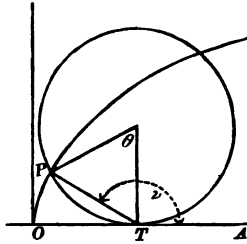
$\tan \tau$  can be written  $= \sqrt{\left(\frac{2a}{y} - 1\right)},$

and  $\tan \nu = -\frac{y}{\sqrt{(2ay - y^2)}}.$

Since  $\tan \nu = -\tan \frac{\theta}{2},$

$$\nu = \pi - \frac{\theta}{2} \quad \text{by trigonometry.}$$

In the figure (see next page),  $PTO$  being formed by a tangent and a chord, is measured by half the arc  $PT$ , and therefore is equal to  $\frac{\theta}{2}$ .  $PTA$ , then, is equal to  $\nu$ , and the line  $PT$  is a normal. Hence the normal at any point on the cycloid passes through the lowest point of the generating circle. The tangent must, therefore, pass through the highest point of the generating circle.



## EXAMPLES.

(1) At what point of the curve is the tangent parallel to the base of the cycloid? Perpendicular to the base? Where does it make an angle of  $45^\circ$  with the base?

(2) Obtain the values of  $\tan \tau$  and  $\tan \nu$  from equation (B).

(2) 103. The equation of the tangent at the point  $(x_0, y_0)$  is

by Art. 28, 
$$y - y_0 = \cot \frac{\theta_0}{2} (x - x_0),$$

or 
$$y - y_0 = \sqrt{\left(\frac{2a}{y_0} - 1\right)} (x - x_0);$$

of the normal, is 
$$y - y_0 = -\tan \frac{\theta_0}{2} (x - x_0),$$

or 
$$y - y_0 = -\frac{y_0}{\sqrt{(2ay_0 - y_0^2)}} (x - x_0).$$

## EXAMPLE.

(1) Show, from the equation of the normal, that it passes through the point  $(a\theta, 0)$ , the lowest point of the generating circle.

(3) 104. We have the formulas,

$$t_x = \frac{y}{D_x y},$$

$$n_x = y D_x y,$$



$$t = \frac{y}{D_x y} \sqrt{[1 + (D_x y)^2]},$$

$$n = y \sqrt{[1 + (D_x y)^2]}; \quad (\text{Art. 28});$$

hence 
$$t_x = \frac{a(1 - \cos \theta)}{\cot \frac{\theta}{2}} = \frac{2a \sin^2 \frac{\theta}{2}}{\cot \frac{\theta}{2}} = 2a \sin^2 \frac{\theta}{2} \tan \frac{\theta}{2}.$$

$$n_x = a(1 - \cos \theta) \cot \frac{\theta}{2} = 2a \sin^2 \frac{\theta}{2} \cot \frac{\theta}{2} = 2a \sin \frac{\theta}{2} \cos \frac{\theta}{2} = a \sin \theta,$$

$$t = 2a \sin^2 \frac{\theta}{2} \tan \frac{\theta}{2} \csc \frac{\theta}{2} = 2a \sin \frac{\theta}{2} \tan \frac{\theta}{2}.$$

$$n = 2a \sin^2 \frac{\theta}{2} \csc \frac{\theta}{2} = 2a \sin \frac{\theta}{2}.$$

Since 
$$D_x y = \sqrt{\left(\frac{2a}{y} - 1\right)},$$

the value of  $n$  may be expressed,

$$n = \sqrt{(2ay)}.$$

(4) 105. 
$$x = \frac{-D_x^2 y}{[1 + (D_x y)^2]^{\frac{3}{2}}}; \quad (\text{Art. 89}).$$

$$D_x^2 y = \frac{D_\theta (D_x y)}{D_\theta x} = \frac{-\frac{1}{2} \csc^2 \frac{\theta}{2}}{2a \sin^2 \frac{\theta}{2}} = -\frac{1}{4a} \csc^4 \frac{\theta}{2},$$

$$[1 + (D_x y)^2]^{\frac{3}{2}} = \csc^3 \frac{\theta}{2},$$

hence 
$$x = \frac{1}{4a} \csc \frac{\theta}{2},$$

and 
$$\rho = \frac{1}{x} = 4a \sin \frac{\theta}{2} = 2n = 2\sqrt{(2ay)};$$

and the radius of curvature at any point is equal to twice the normal drawn at the point.

## EXAMPLES.

(1) Find at what points of the curve the curvature is greatest; at what least.

(2) Obtain the expression for the curvature from the equation (B).

(5) 106. The equations of the evolute of a curve are

$$\left. \begin{aligned} x' &= x - D_x y \frac{1 + (D_x y)^2}{D_x^2 y} \\ y' &= y + \frac{1 + (D_x y)^2}{D_x^2 y} \end{aligned} \right\} \quad (\text{Art. 93 [1]}).$$

Here

$$\begin{aligned} x' &= a\theta - a \sin \theta - \frac{\cot \frac{\theta}{2} \csc^2 \frac{\theta}{2}}{-\frac{1}{4a} \csc^4 \frac{\theta}{2}} = a\theta - a \sin \theta + 4a \sin \frac{\theta}{2} \cos \frac{\theta}{2} \\ &= a\theta - a \sin \theta + 2a \sin \theta, \\ &= a\theta + a \sin \theta. \end{aligned}$$

$$\begin{aligned} y' &= a - a \cos \theta + \frac{\csc^2 \frac{\theta}{2}}{-\frac{1}{4a} \csc^4 \frac{\theta}{2}} = a - a \cos \theta - 4a \sin^2 \frac{\theta}{2} \\ &= a(1 - \cos \theta) - 2a(1 - \cos \theta) = -a + a \cos \theta; \end{aligned}$$

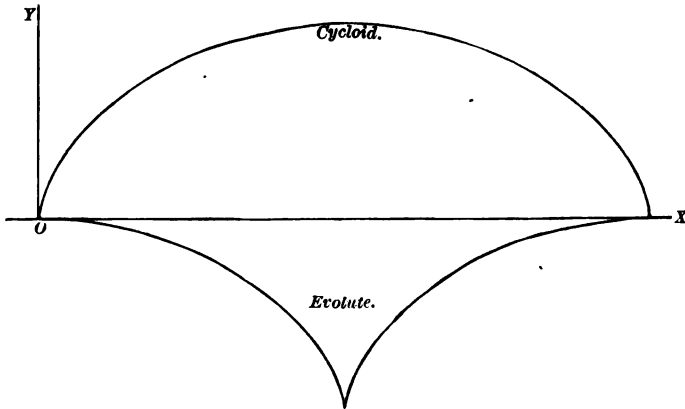
and we have, as the equations of the evolute,

$$\left. \begin{aligned} x' &= a\theta + a \sin \theta \\ y' &= -a + a \cos \theta \end{aligned} \right\};$$

but these (Art. 100) are the equations of an equal cycloid referred to the tangent and normal at the vertex as axes. The

cycloid and its evolute would be situated as indicated by the figure.

The property of the evolute established in Art. 96 enables us to obtain easily the length of the arc of an arch of the cycloid



The length of the half-arch of the evolute is the difference between the radii of curvature at the highest and the lowest points of the given curve ; that is,

$$[\rho]_{\theta=\pi} - [\rho]_{\theta=0} = 4a \sin \frac{\pi}{2} - 4a \sin 0 = 4a,$$

and  $S$ , the whole arc, =  $8a$ .

(6) 107. The length of an arc of the cycloid can be found from the formula  $s = \int_x [1 + (D_x y)^2]^{\frac{1}{2}}$  without using the evolute.

We have  $D_x y = \cot \frac{\theta}{2}$ ,

$$[1 + (D_x y)^2]^{\frac{1}{2}} = \csc \frac{\theta}{2};$$

hence  $s = \int_x \csc \frac{\theta}{2} = \int_{\theta} \csc \frac{\theta}{2} D_{\theta} x :$

but  $D_{\theta} x = 2a \sin^2 \frac{\theta}{2}$ ,

and  $s = 2a \int_{\theta} \sin \frac{\theta}{2}.$

Let  $z = \frac{\theta}{2}$ ;

then  $D_x \theta = 2$ ,

$$s = 2a f_\theta \sin z = 2a f_x \sin z D_x \theta = -4a \cos z + C,$$

$$s = -4a \cos \frac{\theta}{2} + C.$$

If we measure the arc from the origin,  $s$  must equal 0 when

$$\theta = 0.$$

$$0 = -4a \cos 0 + C,$$

$$C = 4a,$$

and we have  $s = 4a(1 - \cos \frac{\theta}{2})$ .

To get the whole arch, let  $\theta = 2\pi$ ,

$$s = 4a(1 - \cos \pi) = 8a.$$

(7) 108. For the area of a segment of the arch, we have the formula

$$A = f_x y + C.$$

$$f_x y = a f_x (1 - \cos \theta) = a f_\theta (1 - \cos \theta) D_\theta x = a^2 f_\theta (1 - \cos \theta)^2$$

$$= a^2 f_\theta (1 - 2 \cos \theta + \cos^2 \theta) = a^2 (f_\theta 1 - 2 f_\theta \cos \theta + f_\theta \cos^2 \theta),$$

$$f_\theta 1 = \theta,$$

$$f_\theta \cos \theta = \sin \theta,$$

$$f_\theta \cos^2 \theta = \frac{1}{2}(\theta + \sin \theta \cos \theta)$$

[see Art. 80, Ex. (1)];

hence  $A = a^2 [\theta - 2 \sin \theta + \frac{1}{2}(\theta + \sin \theta \cos \theta)] + C.$

If the segment is measured from the origin,

$$A = 0 \text{ when } \theta = 0;$$

$$0 = a^2 [0 - 0 + \frac{1}{2}(0 + 0)] + C$$

and

$$C = 0.$$

The area of the whole arch is obtained by making

$$\theta = 2\pi.$$

$$A = a^2 [2\pi - 2 \sin 2\pi + \frac{1}{2}(2\pi + \sin 2\pi \cos 2\pi)] = 3\pi a^2,$$

so that the area of the arch is three times the area of the generating circle.

EXAMPLE.

Find the length of an arc and the area of a segment from the equation (B).

109. If the generating circle rolls on the circumference of a fixed circle, instead of on a fixed line, the curve generated is called an *epicycloid*, if the rolling circle and the fixed circle are tangent *externally*, a *hypocycloid*, if they are tangent *internally*. The equations of these curves may be readily obtained. Let the

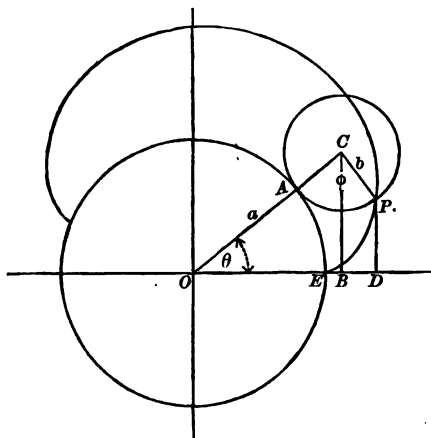


figure represent the generation of an epicycloid,  $P$  being the generating point and  $E$  the starting point. Call  $AOB$ ,  $\theta$ ; and  $PCA$ ,  $\varphi$ ;  $OD$  is  $x$  and  $DP$  is  $y$ . Let  $a$  and  $b$  be the radii of fixed and rolling circles. Then

$$x = (a + b) \cos \theta + b \sin \left[ \varphi - \left( \frac{\pi}{2} - \theta \right) \right],$$

$$y = (a + b) \sin \theta - b \cos \left[ \varphi - \left( \frac{\pi}{2} - \theta \right) \right];$$

but the arcs  $AP$  and  $AE$  are equal, and

$$AP = b\varphi,$$

$$AE = a\theta,$$

hence

$$a\theta = b\varphi$$

and

$$\varphi = \frac{a}{b} \theta;$$

$$\varphi + \theta = \frac{a + b}{b} \theta;$$

and the equations become

$$\left. \begin{aligned} x &= (a + b) \cos \theta - b \cos \frac{a + b}{b} \theta \\ y &= (a + b) \sin \theta - b \sin \frac{a + b}{b} \theta \end{aligned} \right\} \quad [1]$$

The equations of the hypocycloid are, in like manner, found to

$$\left. \begin{aligned} x &= (a - b) \cos \theta + b \cos \frac{a - b}{b} \theta \\ y &= (a - b) \sin \theta - b \sin \frac{a - b}{b} \theta \end{aligned} \right\} \quad [2]$$

#### EXAMPLES.

(1) If  $b = a$  in the epicycloid, the curve is called a cardioid. Show that its polar equation is

$$r = 2a(1 - \cos \varphi)$$

when the starting point is taken as pole.

(2) If  $a = 4b$  in the hypocycloid, obtain the cartesian equation of the curve by eliminating  $\theta$ . *Ans.*  $x^2 + y^2 = a^2$ .

(3) If  $a = 2b$  in the hypocycloid, show that the curve reduces to a diameter of the fixed circle.

(4) Prove by differentiation that the normal at any point of either epicycloid or hypocycloid passes through the point of contact of fixed and generating circles.

## CHAPTER VIII.

## PROBLEMS IN MECHANICS.

110. We have seen (Art. 12) that, if  $s$  represents the distance traversed by a moving body in  $t$  seconds, and can be expressed as a function of  $t$ , the velocity of the body at any instant

$$v = D_t s.$$

111. The *acceleration* of a moving body at any instant is the rate at which its velocity is changing at that instant. If the velocity is increasing, the acceleration is positive; if diminishing, the acceleration is negative. We shall represent it by  $a$ , and it is evidently a function of  $t$ . Since the derivative of a function measures the rate at which its value is changing (Art.

38), we shall have  $a = D_t v = D_t^2 s$ ,

since  $v = D_t s$ .

For example: in the case of a body falling freely near the surface of the earth, we have approximately the law

$$s = 16 t^2.$$

Here  $v = D_t s = 32 t$ ,

and  $a = D_t v = D_t^2 s = 32$ ,

and the acceleration is constant and is equal to 32 feet a second; that is, the velocity of the fall at any instant is 32 feet a second greater than it was a second before. The relations

$$v = D_t s$$

and  $a = D_t v = D_t^2 s$ ,



and the corresponding formulas,

$$v = \int_i a + C,$$

$$s = \int_i v + C,$$

obtained by integrating them, are of great importance in problems concerning motion.

112. We shall assume the following principles of mechanics :

- (1) *A force acting on a body in the line of its motion produces an acceleration proportional to the intensity of the force; and this acceleration is taken as the measure of the force. We speak of a force as a force producing an acceleration of so many feet a second; or, more briefly, as a force of so many feet a second.*
- (2) *The effect of a force in producing acceleration in any direction not its own, is the product of the magnitude of the force by the cosine of the angle between the two directions; or, in other words, it is the projection of the line representing the force in direction and intensity upon the line of the direction in question.*

#### PROBLEM.

113. The force exerted by the earth's attraction upon any particle of matter is constant at any given part of the earth's surface, and is nearly equal to 32 feet a second. Let  $g$  represent the exact value of this force at any given point of the earth's surface, required the velocity of a falling body at the end of  $t$  seconds, and the distance fallen in  $t$  seconds. Here  $a$  is constant and equal to  $g$ .

$$v = \int_i a = \int_i g = gt + C.$$

If the body falls from rest, its velocity is 0 when  $t$  is 0;

$$0 = g \times 0 + C,$$

$$C = 0;$$

and

$$v = gt.$$

$$s = f_t v = f_t g t = g f_t t = \frac{1}{2} g t^2 + C.$$

When  $t$  is 0, the distance fallen must be 0 ;

$$0 = \frac{1}{2} g \times 0 + C,$$

$$C = 0,$$

and

$$s = \frac{1}{2} g t^2.$$

If the body, instead of being dropped, had started with an initial velocity  $v_0$ ,—for example, if it had been fired from a gun directly down or directly up,—we should have found a different value for  $C$  in the expression for the velocity,

$$v = g t + C ;$$

for now, when

$$t = 0,$$

$$v = v_0 ;$$

hence

$$v_0 = g \times 0 + C,$$

$$C = v_0,$$

and

$$v = g t + v_0.$$

$$s = f_t v = f_t (g t + v_0) = \frac{1}{2} g t^2 + v_0 t + C ;$$

but as

$$s = 0 \text{ when } t = 0,$$

$$C = 0,$$

and

$$s = \frac{1}{2} g t^2 + v_0 t.$$

114. The equation  $a = g$

or

$$D_t^2 s = g$$

can be integrated by a second method of considerable interest and generality. Multiply both members by  $2 D_t s$ .

$$2 D_t s D_t^2 s = 2 g D_t s ;$$

but

$$2 D_t s D_t^2 s = D_t (D_t s)^2;$$

hence

$$\int 2 D_t s D_t^2 s = (D_t s)^2,$$

and we have

$$(D_t s)^2 = 2 g \int D_t s = 2 g s + C$$

or

$$v^2 = 2 g s + C.$$

In the case of a falling body, when

$$t = 0, v = 0, \text{ and } s = 0;$$

hence

$$C = 0$$

and

$$v^2 = 2 g s,$$

$$v = \sqrt{(2 g s)},$$

[1]

or

$$D_t s = \sqrt{(2 g s)}.$$

We cannot integrate directly here, for the first member is a function of  $t$  and the second member a function of  $s$ ; but since

$$D_t s = \frac{1}{D_t t}, \quad \text{by Art. 73,}$$

$$D_t t = \frac{1}{\sqrt{(2 g s)}} = \frac{1}{\sqrt{(2 g)}} s^{-\frac{1}{2}}.$$

$$t = \int \frac{1}{\sqrt{(2 g)}} s^{-\frac{1}{2}} = \frac{2}{\sqrt{(2 g)}} s^{\frac{1}{2}} + C = \sqrt{\left(\frac{2 s}{g}\right)} + C.$$

Since

$$s = 0 \text{ when } t = 0,$$

$$C = 0$$

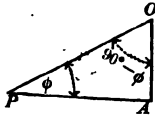
and

$$t = \sqrt{\left(\frac{2 s}{g}\right)}.$$

[2]

It is easily seen that these new values for  $v$  and  $t$  are entirely consistent with those obtained in the last article.

115. If the force is any constant force  $f$ , instead of  $g$ , we have merely to substitute  $f$  for  $g$  in the preceding results. For example, take the case of a body sliding without friction down an inclined plane. Here, by Art. 112, (2), the accelerating force in the direction of the motion is  $g \cos(90^\circ - \varphi)$ , therefore



$$a = g \sin \varphi,$$

$$v = \sqrt{(2g \sin \varphi \cdot s)},$$

and

$$t = \sqrt{\left(\frac{2s}{g \sin \varphi}\right)}$$

when there is no initial velocity. In this case, the velocity and time are easily expressed in terms of the vertical distance through which the body has descended. Let  $OP$  be  $s$ , and  $OA$ , the vertical distance, be  $y$ . Then

$$y = s \sin \varphi,$$

$$v = \sqrt{(2gy)},$$

and

$$t = \sqrt{\left(\frac{2s^2}{gs \sin \varphi}\right)} = s \sqrt{\left(\frac{2}{gy}\right)}.$$

Substitute  $y$  for  $s$  in Art. 114, [1] and [2], and we get, as the velocity the body would acquire falling freely through the vertical distance  $y$ , and the time required for the fall,

$$v = \sqrt{(2gy)},$$

$$t = \sqrt{\left(\frac{2y}{g}\right)}.$$

We see the two velocities are identical; that is, *the velocity acquired by a body descending an inclined plane is precisely what it would have acquired falling through the vertical distance it has actually descended.*

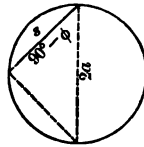
$\frac{s}{t}$  is the mean velocity of the body during its descent, and

$$\frac{s}{t} = \sqrt{\left(\frac{gy}{2}\right)} \quad \text{for the inclined plane,}$$

$$\frac{y}{t} = \sqrt{\left(\frac{gy}{2}\right)} \quad \text{for the falling body.}$$

Hence the *mean velocity of a body descending an inclined plane is equal to the mean velocity of a body which has fallen freely the same vertical distance.*

116. Let the figure represent a vertical circle. The time of descent of a body sliding down any chord is



$$t = \sqrt{\left(\frac{2s}{g \sin \varphi}\right)} = \sqrt{\left(\frac{2s \csc \varphi}{g}\right)} = \sqrt{\left[\frac{2s \sec(90^\circ - \varphi)}{g}\right]}$$

by Art. 115. If  $a$  is the radius,

$$s \cdot \sec(90^\circ - \varphi) = 2a$$

and 
$$t = 2\sqrt{\left(\frac{a}{g}\right)},$$

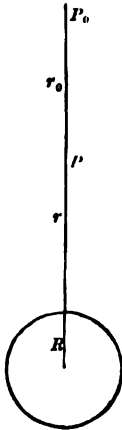
which is also the time a body would require to fall vertically the distance  $2a$ . Therefore, the time of descent down a chord of a vertical circle from the highest point of the circle to any point of the circumference is constant, and is equal to the time it would take the body to fall from the highest to the lowest point of the same circle.

## EXAMPLE.

Show that the time of descent down a chord from any point of a vertical circle to the lowest point of the circle is constant.

## PROBLEM.

117. To find the velocity acquired by a body falling from a distance toward the earth under the influence of the earth's attraction.



Here we cannot regard the attracting force as constant, as we do in dealing with small distances near the surface of the earth, but must take it as inversely proportional to the square of the distance of the body from the centre of the earth. Let  $R$  be the radius of the earth;  $r_0$  the distance from the centre of the earth to the point at which the body started;  $r$  the distance from the centre to the position of the falling body when the time  $t$  has elapsed. Let  $g$  be the force of the attraction of the earth at the earth's surface, and  $f$  the force exerted at  $P$ .

Then we have

$$\frac{f}{g} = \frac{R^2}{r^2}$$

or

$$f = \frac{gR^2}{r^2} = a;$$

$s$ , the distance fallen in the time  $t$ , equals  $r_0 - r$ .

$$D_t s = -D_t r = v,$$

$$D_t^2 s = -D_t^2 r = a;$$

hence

$$-D_t^2 r = \frac{gR^2}{r^2},$$

$$D_t^2 r = -\frac{gR^2}{r^2}.$$

Multiply by  $2D_t r$ ;  $2D_t r D_t^2 r = \frac{-2gR^2 D_t r}{r^2}$ .

Integrate :

$$(D_t r)^2 = -2gR^2 \int \frac{D_t r}{r^2} = -2gR^2 \int r^{-2} = \frac{2gR^2}{r} + C;$$

and 
$$v^2 = \frac{2gR^2}{r} + C.$$

When the body was on the point of starting, its velocity was zero; hence, when  $r = r_0, v = 0$ ;

and 
$$0 = \frac{2gR^2}{r_0} + C,$$

$$C = -\frac{2gR^2}{r_0},$$

and 
$$v^2 = 2gR^2 \left( \frac{1}{r} - \frac{1}{r_0} \right).$$

When the body reaches the surface of the earth,

$$r = R$$

and 
$$v^2 = 2gR^2 \left( \frac{1}{R} - \frac{1}{r_0} \right).$$

The greater the value of  $r_0$  in this result — that is, the greater the distance of the starting point from the centre of the earth — the nearer  $\frac{1}{r_0}$  comes to the value 0, and the nearer  $v^2$  approaches to  $\frac{2gR^2}{R}$  or to  $2gR$ . In other words, the limiting value of the velocity acquired by a body falling from a distance to the surface of the earth under the influence of the earth's attraction, as the distance of the starting point is indefinitely increased, is  $\sqrt{(2gR)}$ .

Let us compute roughly the numerical value of this expression.  $g$  is about 32 feet per second; and as we use the foot as a unit in one of our values, we must in all: therefore  $R$  must be ex-

pressed in feet.  $R$  is about 4,000 miles, or 21,120,000 feet.  $\sqrt{(R)} = 4,600$ , nearly.

$$\sqrt{(2g)} = \sqrt{(64)} = 8.$$

$\sqrt{(2gR)} = 36,800$  feet, or nearly seven miles; and our required velocity is nearly seven miles a second; and neglecting the resistance of the air, this is the velocity with which a projectile would have to be thrown from the surface of the earth to prevent its returning.

We can easily go on and get an expression for the time of the fall by a second integration.

$$\text{We have } (D_t r)^2 = 2gR^2 \left( \frac{1}{r} - \frac{1}{r_0} \right) = 2gR^2 \frac{r_0 - r}{r_0 r};$$

$$-D_t r = \sqrt{\left( \frac{2gR^2}{r_0} \right)} \sqrt{\left( \frac{r_0 - r}{r} \right)};$$

$$-D_t t = \sqrt{\left( \frac{r_0}{2gR^2} \right)} \sqrt{\left( \frac{r}{r_0 - r} \right)} \quad \text{by Art. 73,}$$

$$-t = \sqrt{\left( \frac{r_0}{2gR^2} \right)} \int_r \sqrt{\left( \frac{r}{r_0 - r} \right)} + C,$$

$$\sqrt{\left( \frac{r}{r_0 - r} \right)} = \frac{r}{\sqrt{(r_0 r - r^2)}},$$

an expression to which we can apply the method of *integration by parts*.

$$\text{Let } u = r,$$

$$\text{then } D_r u = 1;$$

$$\text{and let } D_r v = \frac{1}{\sqrt{(r_0 r - r^2)}},$$

$$\text{then } v = \text{vers}^{-1} \frac{2r}{r_0} \quad \text{by Art. 77, Ex. (2).}$$

$$f_r \frac{r}{\sqrt{(r_0 r - r^2)}} = r \text{vers}^{-1} \frac{2r}{r_0} - \int_r \text{vers}^{-1} \frac{2r}{r_0}$$

by Art. 79, [1].



Let 
$$z = \frac{2r}{r_0},$$

then 
$$D_r r = \frac{r_0}{2}.$$

$$\int_r \text{vers}^{-1} \frac{2r}{r_0} = \frac{r_0}{2} \int_z \text{vers}^{-1} z = \frac{r_0}{2} [(z-1) \text{vers}^{-1} z + \sqrt{(2z-z^2)}]$$

by Art. 75, [1], and Art. 81, Ex. (3). Replacing  $z$  by its

value, 
$$\int_r \text{vers}^{-1} \frac{2r}{r_0} = \left(r - \frac{r_0}{2}\right) \text{vers}^{-1} \frac{2r}{r_0} + \sqrt{(r_0 r - r^2)}.$$

Whence  $-t = \sqrt{\left(\frac{r_0}{2gR^2}\right)} \left[\frac{r_0}{2} \text{vers}^{-1} \frac{2r}{r_0} - \sqrt{(r_0 r - r^2)}\right] + C.$

When  $r = r_0, t = 0;$

hence 
$$0 = \sqrt{\left(\frac{r_0}{2gR^2}\right)} \left(\frac{\pi r_0}{2}\right) + C,$$

$$C = -\sqrt{\left(\frac{r_0}{2gR^2}\right)} \left(\frac{\pi r_0}{2}\right),$$

and  $-t = \sqrt{\left(\frac{r_0}{8gR^2}\right)} \left[r_0 \left(\text{vers}^{-1} \frac{2r}{r_0} - \pi\right) - 2\sqrt{(r_0 r - r^2)}\right].$

EXAMPLES.

(1) The mean distance of the moon from the earth being 237,000 miles, find the velocity a body would acquire, and the time it would occupy, in falling from the moon to the earth's surface, neglecting the retarding effect of the moon's attraction.

(2) The force of the sun's attraction at its own surface is 905.5 feet; find the velocity a body would acquire, and the time it would occupy, in falling from the earth to the sun. Earth's mean distance = 92,000,000 miles; sun's diameter = 860,000 miles.

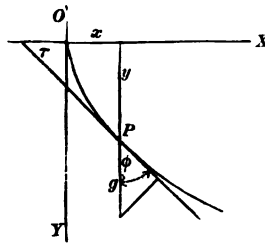
(3) Find the limit of the velocity a body could acquire falling from a distance to the sun.

(4) How long would it take Saturn to fall to the sun, Saturn's mean distance being about 880,000,000 miles?

PROBLEM.

118. To find the velocity acquired under the influence of gravity by a body sliding without friction down a given curve, or in any way constrained to move in a fixed curve.

Here the *effective* accelerating force is always tangent to the curve at the point the moving particle has reached. Suppose



the origin of coördinates at the starting point, and let the direction downward be the positive direction of the ordinates. Of course, this will amount to changing the sign of  $D_x y$ ; that is, will make  $\tau$  the supplement of its usual value. The acceleration

$$a = g \cos \phi = g \cos (90^\circ - \tau) = g \sin \tau.$$

$$D_x y = \tan \tau,$$

$$1 + (D_x y)^2 = \sec^2 \tau,$$

$$\frac{1}{1 + (D_x y)^2} = \cos^2 \tau,$$

$$\frac{D_x y}{[1 + (D_x y)^2]^{\frac{1}{2}}} = \sin \tau,$$

hence 
$$a = D_t^2 s = \frac{g D_x y}{[1 + (D_x y)^2]^{\frac{3}{2}}};$$

but 
$$[1 + (D_x y)^2]^{\frac{1}{2}} = D_x s;$$

$$D_t^2 s = g \frac{D_x y}{D_x s} = g D_x y.$$

Multiply by  $2 D_t s$ :

$$2 D_t s D_t^2 s = 2 g D_x y D_t s = 2 g D_x y.$$

Integrate with respect to  $t$ , and

$$v^2 = (D_t s)^2 = 2 g y + C.$$

If the particle started from rest at  $O$ ,

$$v = 0 \text{ when } y = 0,$$

and

$$C = 0,$$

$$v = \sqrt{(2gy)};$$

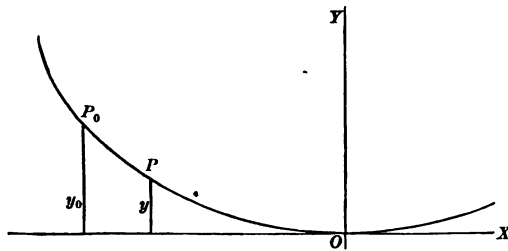
but this is precisely the velocity it would have acquired in falling freely through the vertical distance  $y$  (Art. 114, [1]). So we are led to the remarkable result, that the velocity of a material particle, sliding without friction down a curve, under the influence of gravity, is the same at any instant as if it had fallen freely to the same vertical distance below the starting point. A special case of this has already been noticed in Art. 115.

#### EXAMPLE.

Prove, from the equation of a circle, and the equation of a chord through its highest point, that the time of descent is independent of the length of the chord.

#### PROBLEM.

119. To find the time of descent of a particle from any point of the arc of an inverted cycloid to the vertex of the curve. Taking the origin at the vertex of the curve, its equations are



$$\left. \begin{aligned} x &= a\theta + a \sin \theta \\ y &= a - a \cos \theta \end{aligned} \right\} \quad (\text{Art. 100}).$$

Let  $y_0$  be the ordinate of the starting point, and  $y$  the ordinate of the point reached after  $t$  seconds. Then the vertical distance

fallen is  $y_0 - y$ , and  $v = \sqrt{2g(y_0 - y)}$ , by Art. 118.

$$D_t(s_0 - s) = -D_t s = \sqrt{2g(y_0 - y)};$$

$$-D_t t = \frac{1}{\sqrt{2g(y_0 - y)}};$$

$$-t = \int \frac{1}{\sqrt{2g(y_0 - y)}} = \int \frac{1}{\sqrt{2g(y_0 - y)}} D_y s;$$

$$D_x s = \sqrt{1 + (D_x y)^2};$$

$$D_y s = \frac{D_x s}{D_x y} = \sqrt{\left(\frac{1}{D_x y}\right)^2 + 1} = \sqrt{1 + (D_y x)^2};$$

$$D_\theta x = a + a \cos \theta;$$

$$D_\theta y = a \sin \theta;$$

$$D_y x = \frac{D_\theta x}{D_\theta y} = \frac{1 + \cos \theta}{\sin \theta};$$

$$\cos \theta = \frac{a - y}{a};$$

$$1 + \cos \theta = \frac{2a - y}{a};$$

$$\sin^2 \theta = 1 - \cos^2 \theta = \frac{a^2 - a^2 + 2ay - y^2}{a^2} = \frac{2ay - y^2}{a^2};$$

$$\sin \theta = \frac{1}{a} \sqrt{(2ay - y^2)};$$

$$D_s x = \frac{2a - y}{\sqrt{(2ay - y^2)}} = \sqrt{\frac{(2a - y)^2}{(2a - y)y}} = \sqrt{\left(\frac{2a - y}{y}\right)};$$

$$1 + (D_s x)^2 = \frac{2a}{y};$$

$$D_s s = \sqrt{\left(\frac{2a}{y}\right)};$$

$$-t = \int_s \frac{\sqrt{\left(\frac{2a}{y}\right)}}{\sqrt{2g(y_0 - y)}} = \sqrt{\left(\frac{a}{g}\right)} \int_s \frac{1}{\sqrt{(y_0 y - y^2)}} = \sqrt{\left(\frac{a}{g}\right)} \text{vers}^{-1} \frac{2y}{y_0} + C,$$

by Art. 77 (2). When  $y = y_0, t = 0$ ;

hence 
$$0 = \sqrt{\left(\frac{a}{g}\right)} \text{vers}^{-1}(2) + C.$$

$\text{vers}^{-1}(2)$  is the angle which has the cosine  $-1$ , that is, the angle  $\pi$ . Hence, 
$$C = -\sqrt{\left(\frac{a}{g}\right)} \pi,$$

and 
$$-t = \sqrt{\left(\frac{a}{g}\right)} \left( \text{vers}^{-1} \frac{2y}{y_0} - \pi \right).$$

When the particle reaches the vertex,

$$y = 0,$$

$$\text{vers}^{-1} \frac{2y}{y_0} = 0,$$

and 
$$t = \pi \sqrt{\left(\frac{a}{g}\right)}.$$

As this expression is independent of  $y_0$ , the ordinate of the starting point, the time of descent to the vertex will be the same for all points of the curve. If a pendulum were made to swing in a cycloid, this time  $\pi\sqrt{\left(\frac{a}{g}\right)}$  would be one-half the time of a complete vibration, which would therefore be independent of the length of the arc. On account of this property, the cycloid is called the *tautochrone curve*.

#### EXAMPLE.

120. It is shown in mechanics, that, if the earth were a perfect and homogeneous sphere, and a cylindrical hole having its axis coincident with a diameter were bored through it, the attraction exerted on any body within this opening would be proportional to its distance from the centre. Find the expression for the velocity of a body at any instant, supposing it to have been dropped into this hole, and the time it would take to reach any given point of its course. Compute (1) its velocity when half-way to the centre; (2) when at the centre; (3) the time it would take it to reach the centre, if dropped from the surface; (4) if dropped from any point below the surface. Given  $g = 32$ ;  $R$ , the radius of the earth, = 4,000 miles.

## CHAPTER IX.

X

## DEVELOPMENT IN SERIES.

121. A *series* is a sum composed of an unlimited number of terms which follow one another according to some law. If the terms of a series are real and finite, the sum of the first  $n$  terms is a definite value, no matter how great the value of  $n$ . If this sum *approaches a definite limit as  $n$  is indefinitely increased*, the series is *convergent*; if not, it is *divergent*. The limit approached by the sum of the first  $n$  terms of a convergent series as  $n$  increases indefinitely, is called the *sum of the series*, or simply the *series*. Thus, we may express the result arrived at in Art. 6 by saying the *sum of the series*  $1 + \frac{1}{2} + \frac{1}{4} + \frac{1}{8} + \dots$  is 2; or, more briefly, the *series*  $1 + \frac{1}{2} + \frac{1}{4} + \frac{1}{8} + \dots = 2$ .

## EXAMPLE.

122. Take the series  $1 + x + x^2 + x^3 + \dots$ , *ad infinitum*. The series is a *geometrical progression*, and the sum of  $n$  terms can

be found by the formula  $s = \frac{ar^n - a}{r - 1}$ .

Here  $s = \frac{x^n - 1}{x - 1} = \frac{1 - x^n}{1 - x}$ .

If  $x < 1$ ,  $\lim_{n \rightarrow \infty} [x^n] = 0$ ,

and the sum of the series  $= \frac{1}{1 - x}$ , a definite value, and the series is, therefore, convergent.

If  $x > 1$ ,  $x^n = \infty$  when  $n = \infty$ ,

and the sum increases without limit as the number of terms increases indefinitely, and the series is divergent. The series  $1 + x + x^2 + x^3 + \dots$  can be obtained from  $\frac{1}{1-x}$  by actual division, *but the fraction and the series are equal only when  $x < 1$* ; for  $\frac{1}{1-x}$  has a definite value when  $x > 1$ ; but, as we have seen, the series in that case has not a definite sum. *It is very unsafe to make use of divergent series, or to base any reasoning upon them, for, from their nature, they are wholly indefinite.* Convergent series, on the other hand, are perfectly definite values.

It is easily seen that the sum of the first  $n$  terms of a series *cannot approach indefinitely a fixed value* as  $n$  is increased, *unless, as we advance in the series, the terms eventually decrease*; or, in other words, *unless the ratio of the  $n$ th term to the one before it eventually becomes and remains less than unity* as  $n$  is increased. This, however, affords only a negative test for the convergency of series, as a series may not be convergent even when each term is less than the term before it.

123. The series we have just considered is an example of a series arranged according to the ascending powers of a variable, and such series play an important part in the theory of functions. We are naturally led to the consideration of terms of such a series whenever we attempt to obtain a function from one of its

derivatives. Suppose  $D_h^n f(x_0 + h) = z$

where  $h$  is a variable,  $x_0$  a given value, and  $z$ , of course, a function of  $h$ . Let  $f^2$  stand for  $f'$ , &c., so that  $f^n = f^{n-1}$ .

Then  $D_h^{n-1} f(x_0 + h) = A_1 + f_h z$ ,

where  $A_1$  is a constant;

$$D_h^{n-2} f(x_0 + h) = A_2 + A_1 h + f_h^2 z,$$



$$D_h^{n-3} f(x_0 + h) = A_3 + A_2 h + \frac{1}{2} A_1 h^2 + f_h^3 z,$$

$$D_h^{n-4} f(x_0 + h) = A_4 + A_3 h + \frac{1}{2} A_2 h^2 + \frac{1}{2 \cdot 3} A_1 h^3 + f_h^4 z,$$

. . . . .

$$f(x_0 + h) = A_n + A_{n-1} h + \frac{1}{2} A_{n-2} h^2 + \frac{1}{2 \cdot 3} A_{n-3} h^3 + \dots$$

$$+ \frac{1}{2 \cdot 3 \dots (n-1)} A_1 h^{n-1} + f_h^n z,$$

and we have a set of terms arranged according to the ascending powers of  $h$ . Although, by increasing  $n$  indefinitely, we can make the second member above a true series, it does not by any means follow that every function can be developed into such a series. In the first place, it may not be possible to increase  $n$  indefinitely in the expression above, as the  $n$ th derivative of the function may become at last infinite or discontinuous, so that  $f_h^n z$  cannot be dealt with. Next, the series may be a divergent series, and then it could not be equal to the definite value  $f(x_0 + h)$ . But the result is a remarkable one, and suggests the careful investigation of the development of functions in series.

✓ 124. Assuming, for the moment, that  $f(x_0 + h)$  can be developed into a convergent series arranged according to the ascending powers of  $h$ , let us see what the coefficients of the series must be. Let

$$f(x_0 + h) = A_0 + A_1 h + A_2 h^2 + A_3 h^3 + \dots + A_n h^n + \dots$$

The function and the series are both functions of  $h$ , and may be differentiated relatively to  $h$ .

$$D_h f(x_0 + h) = A_1 + 2 A_2 h + 3 A_3 h^2 + 4 A_4 h^3 + \dots + n A_n h^{n-1} + \dots$$

We shall find it convenient to adopt the following notation: Let  $f'x$  stand for  $D_x f x$ ,  $f''x$  for  $D_x^2 f x$ ,  $f^{(n)}x$  for  $D_x^n f x$ . Let

$f'x_0, f^{(n)}x_0$  stand for the results obtained by substituting  $x_0$  for  $x$  in  $f'x, f^{(n)}x$ , where  $x_0$  may be a single term or any complicated function. Let  $n!$  (which is to be read *n admiration*) stand for  $1 \times 2 \times 3 \times 4 \times \dots \times n$ .

$$\text{Call} \quad (x_0 + h) = x,$$

$$\begin{aligned} \text{then} \quad D_h f(x_0 + h) &= D_h f x = D_x f x D_h x \\ &= f'(x_0 + h) D_h(x_0 + h) = f'(x_0 + h). \end{aligned}$$

In like manner, we could show that

$$D_h^2 f(x_0 + h) = f''(x_0 + h),$$

$$D_h^n(x_0 + h) = f^{(n)}(x_0 + h), \text{ \&c.}$$

$$\begin{aligned} f(x_0 + h) &= A_0 + A_1 h + A_2 h^2 + \dots + A_n h^n \dots; \quad A_{n+1} h^{n+1} \\ f'(x_0 + h) &= A_1 + 2A_2 h + \dots + nA_n h^{n-1} + \dots; \quad n+1, \quad n+1 h^n \\ f''(x_0 + h) &= 2A_2 + \dots + n(n-1)A_n h^{n-2} + \dots; \quad (n+1)n A_{n+1} h^{n-1} \\ f^{(n)}(x_0 + h) &= n! A_n + (n+1)n \dots 2A_{n+1} h + \dots \end{aligned}$$

Let  $h = 0$  in these equations, and we have

$$f x_0 = A_0, \quad f''' x_0 = 3! A_3,$$

$$f' x_0 = A_1, \quad f^{IV} x_0 = 4! A_4,$$

$$f'' x_0 = 2 A_2, \quad f^{(n)} x_0 = n! A_n,$$

$$\text{hence} \quad A_0 = f x_0, \quad A_3 = \frac{1}{3!} f''' x_0,$$

$$A_1 = f' x_0, \quad A_4 = \frac{1}{4!} f^{IV} x_0,$$

$$A_2 = \frac{1}{2} f'' x_0, \quad A_n = \frac{1}{n!} f^{(n)} x_0,$$

$$\begin{aligned} \text{and } f(x_0 + h) = & f x_0 + h f' x_0 + \frac{h^2}{2!} f'' x_0 + \frac{h^3}{3!} f''' x_0 + \frac{h^4}{4!} f^{IV} x_0 \\ & + \dots + \frac{h^n}{n!} f^{(n)} x_0 + \dots, \end{aligned} \quad [1]$$

if  $f(x_0 + h)$  can be developed.

EXAMPLES.

(1) To develop  $(a + h)^n$ .

Call  $(a + h) = x,$

then  $f x = x^n,$

$$f' x = n x^{n-1},$$

$$f'' x = n(n-1) x^{n-2},$$

$$f''' x = n(n-1)(n-2) x^{n-3}, \text{ \&c.}$$

$$f a = a^n,$$

$$f' a = n a^{n-1},$$

$$f'' a = n(n-1) a^{n-2},$$

$$f''' a = n(n-1)(n-2) a^{n-3}, \text{ \&c.}$$

$$\begin{aligned} (a + h)^n = & a^n + n a^{n-1} h + \frac{n(n-1)}{2} a^{n-2} h^2 \\ & + \frac{n(n-1)(n-2)}{3!} a^{n-3} h^3 + \dots, \end{aligned}$$

if  $(a + h)^n$  can be developed.

(2) To develop  $\sin h$ .

$$\sin h = \sin(0 + h).$$

Let  $x = 0 + h.$

$$fx = \sin x, \quad f0 = \sin 0 = 0,$$

$$f'x = \cos x, \quad f'0 = \cos 0 = 1,$$

$$f''x = -\sin x, \quad f''0 = -\sin 0 = 0,$$

$$f'''x = -\cos x, \quad f'''0 = -\cos 0 = -1,$$

$$f^{iv}x = \sin x, \text{ \&c.} \quad f^{iv}0 = \sin 0 = 0, \text{ \&c.}$$

$$\sin(0 + h) = 0 + h + 0 \cdot \frac{h^2}{2!} - \frac{h^3}{3!} + 0 \cdot \frac{h^4}{4!} + \frac{h^5}{5!} + \dots,$$

$$\sin h = h - \frac{h^3}{3!} + \frac{h^5}{5!} - \frac{h^7}{7!} + \frac{h^9}{9!} + \dots,$$

if  $\sinh$  can be developed.

(3) Assuming that  $\cosh$  can be developed, determine the series.

• 125. Let us find what error we are liable to commit if we take  $f(x_0 + h)$  equal to  $n + 1$  terms of the series (Art. 124, [1]). Let  $R$  be the difference between  $f(x_0 + h)$  and the sum of the first  $n + 1$  terms; then

$$f(x_0 + h) = fx_0 + hf'x_0 + \frac{h^2}{2!}f''x_0 + \dots + \frac{h^n}{n!}f^{(n)}x_0 + R,$$

and we want to find the value of  $R$ .

#### LEMMA.

126. If a continuous function becomes equal to zero for two different values of the variable, there must be some value of the variable between the two for which the derivative of the function will equal zero.

For, in passing from the first zero value to the second, the function must first increase and then decrease as the variable

increases, or first decrease and then increase. If it does the first, the derivative must at some point change from a positive to a negative value; if the second, the derivative must change from a negative to a positive value, and in so doing it must, in either case, pass through the value zero.

. 127. To determine  $R$ .

Let 
$$P = R + \frac{h^{n+1}}{(n+1)!},$$

then 
$$R = \frac{h^{n+1}}{(n+1)!} P,$$

and

$$f(x_0 + h) = f x_0 + h f' x_0 + \frac{h^2}{2!} f'' x_0 + \dots + \frac{h^n}{n!} f^{(n)} x_0 + \frac{h^{n+1}}{(n+1)!} P$$

or

$$f(x_0 + h) - f x_0 - h f' x_0 - \frac{h^2}{2!} f'' x_0 - \dots - \frac{h^n}{n!} f^{(n)} x_0 - \frac{h^{n+1}}{(n+1)!} P = 0.$$

Call 
$$(x_0 + h) = X;$$

then 
$$h = X - x_0,$$
 and we have

$$\begin{aligned} fX - f x_0 - \frac{(X - x_0)}{1!} f' x_0 - \dots - \frac{(X - x_0)^n}{n!} f^{(n)} x_0 \\ - \frac{(X - x_0)^{n+1}}{(n+1)!} P = 0. \end{aligned} \quad [1]$$

Form arbitrarily the same function of a variable  $z$  that the first member of [1] is of  $x_0$ , and call it  $Fz$ .

$$\begin{aligned} Fz = fX - fz - \frac{(X - z)}{1!} f' z - \frac{(X - z)^2}{2!} f'' z - \dots \\ - \frac{(X - z)^n}{n!} f^{(n)} z - \frac{(X - z)^{n+1}}{(n+1)!} P. \end{aligned}$$

If  $z = x_0$ ,  $Fz$  becomes identical with the first member of [1], and therefore = 0.

$$\text{If } z = X, Fz = 0,$$

since each term disappears from containing a zero factor; and we have succeeded in forming a function of  $z$ , which becomes equal to zero for two values,  $x_0$  and  $X$  of  $z$ . If  $Fz$  is continuous, there must be some value of  $z$  between  $x_0$  and  $X$  for which  $F^n z = 0$ . Differentiating  $Fz$ , and remembering that  $P$  is constant, we have

$$\begin{aligned} F^n z = & 0 - f'z + f'z - \frac{(X-z)}{1!} f''z + \frac{(X-z)}{1!} f''z - \frac{(X-z)^2}{2!} f'''z \\ & + \frac{(X-z)^2}{2!} f'''z - \dots + \frac{(X-z)^{n-1}}{(n-1)!} f^{(n)}z \\ & - \frac{(X-z)^n}{n!} f^{(n+1)}z + \frac{(X-z)^n}{n!} P. \end{aligned}$$

All the terms but the last two destroy one another, and

$$F^n z = -\frac{(X-z)^n}{n!} f^{(n+1)}z + \frac{(X-z)^n}{n!} P.$$

But this must be equal to zero for some value of  $z$  between  $x_0$  and  $X$ . [Such a value can be represented by  $x_0 + \theta(X - x_0)$  where  $\theta$  is some positive fraction less than 1, i.e.,  $0 < \theta < 1$ . Substituting this value, we have

$$\begin{aligned} 0 = & -\frac{[X - x_0 - \theta(X - x_0)]^n}{n!} f^{(n+1)}[x_0 + \theta(X - x_0)] \\ & + \frac{[X - x_0 - \theta(X - x_0)]^n}{n!} P. \end{aligned}$$

$$\text{Whence } P = f^{(n+1)}[x_0 + \theta(X - x_0)].$$

$$X - x_0 = h,$$

$$P = f^{(n+1)}(x_0 + \theta h),$$

whence 
$$f(x_0 + h) = fx_0 + \frac{h}{1!} f'x_0 + \frac{h^2}{2!} f''x_0 + \dots$$

$$+ \frac{h^n}{n!} f^{(n)}x_0 + \frac{h^{n+1}}{(n+1)!} f^{(n+1)}(x_0 + \theta h),$$

where all that we know about  $\theta$  is that it lies between 0 and 1.

✓ 128. The expression for the last term may be obtained in a different form by assuming at the start

$$R = hP$$

instead of 
$$R = \frac{h^{n+1}}{(n+1)!} P.$$

Making this assumption, show that

$$f(x_0 + h) = fx_0 + hf'x_0 + \frac{h^2}{2!} f''x_0 + \dots$$

$$+ \frac{h^n}{n!} f^{(n)}x_0 + \frac{h^{n+1}(1-\theta)^n}{n!} f^{(n+1)}(x_0 + \theta h).$$

Since in each of these formulas  $x_0$  was any given value, we can represent it in the result just as well by  $x$ , and the formulas may be written

$$f(x + h) = fx + hf'x + \frac{h^2}{2!} f''x + \dots$$

$$+ \frac{h^n}{n!} f^{(n)}x + \frac{h^{n+1}}{(n+1)!} f^{(n+1)}(x + \theta h); \quad [1]$$

$$f(x + h) = fx + hf'x + \frac{h^2}{2!} f''x + \dots$$

$$+ \frac{h^n}{n!} f^{(n)}x + \frac{h^{n+1}(1-\theta)^n}{n!} f^{(n+1)}(x + \theta h). \quad [2]$$

and these formulas are known as *Taylor's Theorem*.

## EXAMPLE.

129. To develop  $(2 + 1)^4$ .

Let us see what error we are liable to if we stop at the second term.

$$\begin{aligned} fx &= x^4, & f'''x &= 24x, \\ f'x &= 4x^3, & f''x &= 24, \\ f''x &= 12x^2, & f''x &= 0. \end{aligned}$$

$$(2 + 1)^4 = 2^4 + 1.4.2^3 + \frac{1^2}{2!} 12(2 + \theta)^2.$$

If  $\theta = 0$ , the last term is 24. If  $\theta = 1$ , the last term is 54. Hence, if we stop at the second term, our error lies between 24 and 54. In point of fact, it is 33. Suppose we stop with the third term.

$$(2 + 1)^4 = 2^4 + 1.4.2^3 + \frac{1^2}{2!} 12.2^2 + \frac{1^3}{3!} 24(2 + \theta).$$

If  $\theta = 0$ , the last term is 8. If  $\theta = 1$ , the last term is 12, and the error must be between 8 and 12. It is actually 9. Suppose we stop with the fourth term.

$$(2 + 1)^4 = 2^4 + 1.4.2^3 + \frac{1^2}{2!} 12.2^2 + \frac{1^3}{3!} 24.2 + \frac{1^4}{4!} 24.$$

Here the error is precisely  $\frac{1^4}{24} 24 = 1$ .

## EXAMPLE.

To find  $\sin(0 + 1)$ .

Let

$$n = 7.$$

$$\begin{aligned} fx &= \sin x, & f''x &= \sin x, \\ f'x &= \cos x, & f''x &= \cos x, \\ f''x &= -\sin x, & f''x &= -\sin x, \text{ \&c.} \\ f''x &= -\cos x, \end{aligned}$$



$$\sin(0+1) = 1 - \frac{1}{3!} + \frac{1}{5!} - \frac{1}{7!} + \frac{1}{8!} \sin \theta.$$

If  $\theta = 0$ ,

$$\frac{\sin \theta}{8!} = 0.$$

If  $\theta = 1$ ,

$$\frac{\sin \theta}{8!} = \frac{\sin 1}{40320}.$$

$\frac{1}{40320}$  is within  $\frac{1}{40320}$  of the true value of  $\sin 1$ .

If in any development the general expression for the error decreases indefinitely as we increase  $n$ , it follows that, as the number of terms of the series is indefinitely increased, the sum will approach as its limit the value of the function, which is therefore equal to a series of the form obtained, and is said to be developable.

130. Let us consider some examples.

To develop  $\log(1+x)$ .

Let  $z = (1+x)$ .

$$fz = \log z,$$

$$f'z = z^{-1},$$

$$f''z = -z^{-2},$$

$$f'''z = 2z^{-3},$$

$$f^{IV}z = -3!z^{-4},$$

$$f^{(n)}z = (-1)^{n-1}(n-1)!z^{-n},$$

$$f^{(n+1)}z = (-1)^n n!z^{-n-1},$$

$$f(1) = 0,$$

$$f'(1) = 1,$$

$$f''(1) = -1,$$

$$f'''(1) = 2,$$

$$f^{(1)}(1) = -3!,$$

$$f^{(n)}(1) = (-1)^{n-1}(n-1)!,$$

$$f^{(n+1)}(1+\theta x) = (-1)^n n! (1+\theta x)^{-n-1}.$$

By Taylor's Theorem,

$$\begin{aligned} \log(1+x) &= x - \frac{x^2}{2} + \frac{x^3}{3} - \frac{x^4}{4} + \dots + (-1)^{n-1} \frac{x^n}{n} \\ &\quad + \frac{(-1)^n x^{n+1}}{n+1} (1+\theta x)^{-n-1}. \end{aligned}$$

The ratio of the  $n$ th term to the term before it is  $\frac{(-1)(n-1)x}{n}$ , or  $-\left(1-\frac{1}{n}\right)x$ . If  $x$  is greater than 1 in absolute value,  $\left(1-\frac{1}{n}\right)x$  will eventually become and remain greater than unity as  $n$  increases, and the series

$$x - \frac{x^2}{2} + \frac{x^3}{3} - \frac{x^4}{4} + \dots$$

is divergent and cannot be equal to  $\log(1+x)$ . So we need only investigate the expression for the error for the values of  $x$  between  $+1$  and  $-1$ . Suppose  $x$  is positive, and less than 1.

Then  $\frac{x^{n+1}}{n+1} (1+\theta x)^{-n-1}$  approaches zero as its limit as  $n$  increases indefinitely, for it may be thrown into the form  $\frac{1}{n+1} \left(\frac{x}{1+\theta x}\right)^{n+1}$ . Since  $x < 1$ ,  $\frac{x}{1+\theta x} < 1$ .  $\left(\frac{x}{1+\theta x}\right)^{n+1}$  has zero for its limit as  $n$  increases indefinitely; as has also the factor  $\frac{1}{n+1}$ . Hence, for values of  $x$  between 0 and 1,  $\log(1+x)$  is developable, and is equal to the series

$$x - \frac{x^2}{2} + \frac{x^3}{3} - \frac{x^4}{4} + \dots$$

This is true even where  $x=1$ , for it is easily seen that, in that case also,  $\frac{1}{n+1} \left(\frac{x}{1+\theta x}\right)^{n+1}$  approaches the limit zero as  $n$  in-

creases. If  $x$  is between 0 and  $-1$ , the second form of the error, Art. 128, [2], is most convenient for our purpose. Let  $x = -x'$ , so that  $x'$  is positive and less than 1. Then our function is  $\log(1-x')$ , and the series becomes

$$-x' - \frac{x'^2}{2} - \frac{x'^3}{3} - \dots - \frac{x'^n}{n} - \frac{x'^{n+1}(1-\theta)^n}{(1-\theta x')^{n+1}}.$$

$$\frac{x'^{n+1}(1-\theta)^n}{(1-\theta x')^{n+1}} = \frac{x'}{1-\theta x'} \left( \frac{x'-\theta x^n}{1-\theta x'} \right)^n;$$

where  $\frac{x'-\theta x^n}{1-\theta x'}$  is less than 1;

hence  $\lim_{n \rightarrow \infty} \left( \frac{x'-\theta x^n}{1-\theta x'} \right)^n = 0,$

and as  $\frac{x'}{1-\theta x'}$  is a finite value, the expression for the error decreases indefinitely as  $n$  increases, and the function is equal to the series. Our expansion

$$\log(1+x) = x - \frac{x^2}{2} + \frac{x^3}{3} - \frac{x^4}{4} + \dots$$

holds, then, for values of  $x$  between 1 and  $-1$ .

*The Binomial Theorem.*

131. To develop  $(1+x)^m$ .

Let

$$z = 1 + x,$$

$$fz = z^m,$$

$$f'z = mz^{m-1},$$

$$f''z = m(m-1)z^{m-2},$$

$$f'''z = m(m-1)(m-2)z^{m-3},$$

$$f^{(n)}z = m(m-1)\dots(m-n+1)z^{m-n},$$

$$f^{(n+1)}z = m(m-1)\dots(m-n)z^{m-n-1},$$

$$f(1) = 1,$$

$$f'(1) = m.$$

$$f''(1) = m(m-1),$$

$$f'''(1) = m(m-1)(m-2),$$

$$f^{(n)}(1) = m(m-1)\dots(m-n+1),$$

$$f^{(n+1)}(1+\theta x) = m(m-1)\dots(m-n)(1+\theta x)^{m-n-1}.$$

By Taylor's Theorem,

$$(1+x)^m = 1 + mx + \frac{m(m-1)x^2}{2!} + \frac{m(m-1)(m-2)x^3}{3!} + \dots$$

If  $m$  is a positive whole number,

$$f^{(m)}z = m!,$$

$$f^{(m+1)}z = 0,$$

and all succeeding derivatives are 0, so in that case  $(1+x)^m$  is equal to the sum of a finite number of terms, namely  $(m+1)$  terms. If  $m$  is negative or fractional, however, this is not the case. Let us see whether  $(1+x)^m$  is then developable. The ratio of the general term of the series to the one before it is  $\frac{m-n+1}{n}x$  or  $\left(\frac{m+1}{n}-1\right)x$ . If  $x$  is numerically greater than 1, this ratio will eventually become and remain greater than 1 in absolute value as  $n$  increases, and the series is divergent and cannot be equal to the function. Hence we need examine the value of the error only for values of  $x$  between 1 and  $-1$ . The expression for the remainder after  $n+1$  terms is

$$\frac{m(m-1)\dots(m-n)}{(n+1)!} x^{n+1} (1+\theta x)^{m-n-1},$$

which may be thrown into the form

$$\left[ \frac{m(m-1)\dots(m-n)}{(n+1)!} x^{n+1} \right] \frac{1}{(1+\theta x)^{n+1-m}}.$$

As  $n$  increases, the limit approached by  $\frac{1}{(1+\theta x)^{n+1-m}}$  is not greater than 1. Increasing  $n$  by unity multiplies the quantity in parenthesis by  $\frac{m-n-1}{n+2}x$ , which may be written

$$\left(\frac{m-1}{n+2} - \frac{n}{n+2}\right)x;$$

and by taking  $n$  sufficiently large, this multiplier may be brought as near as we please to the value  $-x$ . If  $x$  lies between 0 and 1,  $-x$  is numerically less than 1; and as  $n$  increases indefinitely, we multiply our parenthesis by an indefinite number of factors, each less than 1, and so decrease the product indefinitely. Therefore, for values of  $x$  between 0 and 1, the expression for the error approaches zero as its limit as  $n$  increases indefinitely, and  $(1+x)^m$  is equal to the series

$$1 + mx + \frac{m(m-1)}{2!}x^2 + \frac{m(m-1)(m-2)}{3!}x^3 + \dots \quad [1]$$

EXAMPLE.

Show, by considering the second form for the error, Art. 128, [2], that for values of  $x$  between 0 and  $-1$ ,  $(1+x)^m$  is developable.

The *Binomial Theorem* follows easily from the development of  $(1+x)^m$ .

$$(x+h)^m = x^m \left(1 + \frac{h}{x}\right)^m;$$

and if  $h$  is less than  $x$  in absolute value, we have

$$\begin{aligned} (x+h)^m &= x^m + mx^{m-1}h + \frac{m(m-1)}{2!}x^{m-2}h^2 \\ &+ \frac{m(m-1)(m-2)}{3!}x^{m-3}h^3 + \dots, \end{aligned} \quad [2]$$

no matter what the value of  $m$ .

Of course, if  $h$  is greater than  $x$ , we can write  $(x+h)^m$  in the form  $h^m \left(1 + \frac{x}{h}\right)^m$ , and shall then get as a true development,

$$(h+x)^m = h^m + mh^{m-1}x + \dots$$



*Maclaurin's Theorem.*

132. If, in Art. 128, [1] and [2], we let  $x=0$ , we get

$$\begin{aligned} fh &= f(0) + hf'(0) + \frac{h^2}{2!} f''(0) + \frac{h^3}{3!} f'''(0) + \dots \\ &+ \frac{h^n}{n!} f^{(n)}(0) + \frac{h^{n+1}}{(n+1)!} f^{(n+1)} \theta h, \end{aligned}$$

$$\begin{aligned} fh &= f(0) + hf'(0) + \frac{h^2}{2!} f''(0) + \frac{h^3}{3!} f'''(0) + \dots \\ &+ \frac{h^n}{n!} f^{(n)}(0) + \frac{h^{n+1}(1-\theta)^n}{n!} f^{(n+1)} \theta h. \end{aligned}$$

It does not matter what letter we use for the variable in these formulas. Change  $h$  to  $x$ , and

$$\begin{aligned} fx &= f(0) + xf'(0) + \frac{x^2}{2!} f''(0) + \dots + \frac{x^n}{n!} f^{(n)}(0) \\ &+ \frac{x^{n+1}}{(n+1)!} f^{(n+1)} \theta x. \end{aligned} \quad [1]$$

$$\begin{aligned} fx &= f(0) + xf'(0) + \frac{x^2}{2!} f''(0) + \dots + \frac{x^n}{n!} f^{(n)}(0) \\ &+ \frac{x^{n+1}(1-\theta)^n}{n!} f^{(n+1)} \theta x. \end{aligned} \quad [2]$$

These results are called *Maclaurin's Theorem*, and they enable us to develop a function in a series arranged according to the ascending powers of the variable.

133. To develop  $a^x$ .

$$\begin{aligned} fx &= a^x, & f(0) &= a^0 = 1. \\ f'x &= a^x \log a, & f'(0) &= \log a, \\ f''x &= a^x (\log a)^2, & f''(0) &= (\log a)^2, \\ f^{(n)}x &= a^x (\log a)^n, & f^{(n)}(0) &= (\log a)^n, \\ f^{(n+1)}x &= a^x (\log a)^{n+1}, & f^{(n+1)}0 &= a^{0x} (\log a)^{n+1}. \end{aligned}$$

By Art. 132, [1],

$$\begin{aligned} a^x &= 1 + x \log a + \frac{x^2}{2!} (\log a)^2 + \frac{x^3}{3!} (\log a)^3 + \dots + \frac{x^n}{n!} (\log a)^n \\ &\quad + \frac{x^{n+1}}{(n+1)!} (\log a)^{n+1} a^{0x}. \end{aligned}$$

$$\frac{x^{n+1} (\log a)^{n+1}}{(n+1)!} a^{0x} = a^{0x} \cdot \frac{x \log a}{1} \cdot \frac{x \log a}{2} \cdot \frac{x \log a}{3} \dots \frac{x \log a}{n} \cdot \frac{x \log a}{n+1}.$$

No matter what value  $x$  may have, after  $n$  has attained a certain value in its increase, some of the factors of this product will approach the limit zero, and the whole product will therefore have zero for its limit as  $n$  increases indefinitely, and

$$a^x = 1 + x \log a + \frac{x^2}{2!} (\log a)^2 + \frac{x^3}{3!} (\log a)^3 + \dots \quad [1]$$

for all values of  $x$ . If  $a = e$ ,  $\log a = 1$ ,

$$\text{and} \quad e^x = 1 + \frac{x}{1} + \frac{x^2}{2!} + \frac{x^3}{3!} + \frac{x^4}{4!} + \dots \quad [2]$$

Let  $x = 1$ , and [2] becomes

$$e = 1 + \frac{1}{1} + \frac{1}{2!} + \frac{1}{3!} + \frac{1}{4!} + \dots; \quad [3]$$

a result already established in Arts. 61 and 62.

134. We can now test the accuracy of the provisional developments of sine and cosine given in Art. 124, (2) and (3). By Art. 132, [1],

$$\sin x = x - \frac{x^3}{3!} + \frac{x^5}{5!} - \frac{x^7}{7!} + \dots + R,$$

where 
$$R = \frac{x^{n+1}}{(n+1)!} f^{(n+1)} \theta x = \pm \frac{x^{n+1}}{(n+1)!} \sin \theta x$$

or 
$$\pm \frac{x^{n+1}}{(n+1)!} \cos \theta x.$$

In either case, one factor  $\sin \theta x$  or  $\cos \theta x$  is between 1 and  $-1$ , and the other approaches zero as  $n$  increases indefinitely; therefore,

$$\sin x = x - \frac{x^3}{3!} + \frac{x^5}{5!} - \frac{x^7}{7!} + \frac{x^9}{9!} - \dots$$

#### EXAMPLE.

Prove that 
$$\cos x = 1 - \frac{x^2}{2!} + \frac{x^4}{4!} - \frac{x^6}{6!} + \frac{x^8}{8!} - \dots$$

135. By the aid of the Binomial Theorem,  $\tan^{-1}x$  and  $\sin^{-1}x$  can be very easily developed.

$$D_x \tan^{-1} x = \frac{1}{1+x^2} = (1+x^2)^{-1}. \quad (\text{Art. 71, Ex.})$$

For values of  $x$  less than 1,  $(1+x^2)^{-1}$  can be developed by Art.

131, [2], 
$$(1+x^2)^{-1} = 1 - x^2 + x^4 - x^6 + x^8 - \dots$$

Integrate both members.

$$\tan^{-1} x = C + x - \frac{x^3}{3} + \frac{x^5}{5} - \frac{x^7}{7} + \frac{x^9}{9} - \dots$$

To determine our arbitrary constant  $C$ , let

$$x = 0;$$



then  $\tan^{-1}0 = C + 0 - \frac{0}{3} \dots,$

and  $C = 0.$

$$\tan^{-1}x = x - \frac{x^3}{3} + \frac{x^5}{5} - \frac{x^7}{7} + \frac{x^9}{9} - \dots \quad [1]$$

when  $x$  is less than 1 ; that is, when  $\tan^{-1}x$  is less than  $\frac{\pi}{4}.$

$$D_x \sin^{-1}x = \frac{1}{\sqrt{(1-x^2)}} = (1-x^2)^{-\frac{1}{2}}, \quad \text{by Art. 71.}$$

For values of  $x$  less than 1,  $(1-x^2)^{-\frac{1}{2}}$  can be developed by Art. 131, [2].

$$(1-x^2)^{-\frac{1}{2}} = 1 + \frac{1}{2}x^2 + \frac{1.3}{2.4}x^4 + \frac{1.3.5}{2.4.6}x^6 + \frac{1.3.5.7}{2.4.6.8}x^8 + \dots$$

Integrating

$$\sin^{-1}x = C + x + \frac{1}{2} \frac{x^3}{3} + \frac{1.3}{2.4} \frac{x^5}{5} + \frac{1.3.5}{2.4.6} \frac{x^7}{7} + \dots$$

When  $x = 0,$

$$\sin^{-1}x = 0 \text{ and } C = 0.$$

$$\sin^{-1}x = x + \frac{1}{2} \frac{x^3}{3} + \frac{1.3}{2.4} \frac{x^5}{5} + \frac{1.3.5}{2.4.6} \frac{x^7}{7} + \dots \quad [2]$$

**EXAMPLES.**

(1) Show that  $\sin(x+h)$  is equal to the series

$$\sin x + \frac{h}{1!} \cos x - \frac{h^2}{2!} \sin x - \frac{h^3}{3!} \cos x + \frac{h^4}{4!} \sin x + \dots$$

(2) Show that

$$e^{mx} = 1 + \frac{mx}{1!} + \frac{m^2x^2}{2!} + \frac{m^3x^3}{3!} + \dots$$

136. Although the strict proof that any given function is equal to the series obtained by Taylor's Theorem requires the investigation of the *remainder after  $n + 1$  terms*, it is often convenient to obtain terms of the series in cases where the expression for the remainder is too complicated to admit of the usual examination. When such a series is employed, it is to be remembered that it is equal to the function in question only provided that the function is developable. Sometimes the possibility of development can be established by other considerations, and sometimes in rough work no attempt is made to fill out the proof of the assumed equality.

#### EXAMPLES.

(1) Develop  $\frac{x}{1+x} + \log(1+x)$ .

$$\text{Ans. } 2x - \frac{3}{2}x^2 + \frac{4}{3}x^3 - \frac{5}{4}x^4 + \frac{6}{5}x^5 + \dots$$

(2) Obtain 4 terms of the development of  $\log(1+e^x)$ .

$$\text{Ans. } \log 2 + \frac{x}{2} + \frac{x^2}{2^3} - \frac{x^4}{2^3 \cdot 4!}$$

137. In the work of successive differentiation required in applying Taylor's Theorem, a good deal of labor can often be saved by making use of *Leibnitz's Theorem for the Derivatives of a Product*. Let  $y$  and  $z$  be functions of  $x$ . Represent  $D_x y, D_x^2 y, \dots, D_x^n y$  by  $y', y'', \dots, y^{(n)}$  and  $D_x z, D_x^2 z, \dots, D_x^n z$  by  $z', z'', \dots, z^{(n)}$ .

$$D_x(yz) = y'z + yz'$$

$$D_x^2(yz) = y''z + 2y'z' + yz''$$

$$D_x^3(yz) = y'''z + 3y''z' + 3y'z'' + yz'''$$

$$D_x^4(yz) = y^{(4)}z + 4y'''z' + 6y''z'' + 4y'z''' + yz^{(4)}$$

Examining these results, we see that the coefficients of the terms in the successive derivatives are the same as in the corresponding powers of a binomial, and that the accents follow the same

law as the exponents in the powers of a binomial. Following the same analogy, we should have

$$D_z^n(yz) = y^{(n)}z + ny^{(n-1)}z' + \frac{n(n-1)}{2!}y^{(n-2)}z'' + \frac{n(n-1)(n-2)}{3!}y^{(n-3)}z''' + \dots$$

Assuming for the moment the truth of this equation, let us differentiate both members. We obtain

$$D_z^{n+1}(yz) = y^{(n+1)}z + (n+1)y^{(n)}z' + \frac{(n+1)n}{2!}y^{(n-1)}z'' + \frac{(n+1)n(n-1)}{3!}y^{(n-2)}z''' + \dots;$$

but this is precisely what we should expect for the  $(n+1)$ st derivative from the observed analogy. Hence, if our rule holds for the  $n$ th derivative, it holds for the  $(n+1)$ st; but we have seen that it holds for the 4th, therefore it holds for the 5th, and therefore for the 6th, and so on; and it is in consequence universally true. This rule is called *Leibnitz's Theorem*, and is formulated as follows:

$$D_z^n(yz) = y^{(n)}z + ny^{(n-1)}z' + \frac{n(n-1)}{2!}y^{(n-2)}z'' + \frac{n(n-1)(n-2)}{3!}y^{(n-3)}z''' \dots \quad [1]$$

138. Assuming that  $\tan x$  can be developed, let us obtain a few terms of the series. Here

$$fx = \tan x = y,$$

$$f'x = y' = \sec^2 x,$$

$$f''x = y'' = 2 \sec^2 x \tan x = 2y'y,$$

$$f'''x = y''' = 2(y''y + y'y'),$$

$$f^{IV}x = y^{IV} = 2(y'''y + 2y''y' + y'y''),$$

$$f^v x = y^v = 2(y^{iv}y + 3y''y' + 3y''y'' + y'y'''),$$

$$f^{vi} x = y^{vi} = 2(y^v y + 4y^{iv}y' + 6y''y'' + 4y''y'' + y'y^{iv}),$$

$$f^{vii} x = y^{vii} = 2(y^{vi}y + 5y^{iv}y' + 10y^{iv}y'' + 10y''y'' + 5y''y^{iv} + y'y^{vi}),$$

&c., by Leibnitz's Theorem.

When

$$x = 0,$$

$$y = 0,$$

$$y^{iv} = 0,$$

$$y' = 1,$$

$$y^v = 16,$$

$$y'' = 0,$$

$$y^{vi} = 0,$$

$$y''' = 2,$$

$$y^{vii} = 272.$$

By Maclaurin's Theorem

$$\tan x = x + \frac{2}{3!} x^3 + \frac{16}{5!} x^5 + \frac{272}{7!} x^7 + \dots$$

#### EXAMPLE.

Assuming that  $\sec x$  can be developed, show that

$$\sec x = 1 + \frac{x^2}{2!} + \frac{5x^4}{4!} + \frac{61x^6}{6!} + \dots$$

#### *Indeterminate Forms.*

139. The subject of indeterminate forms is readily dealt with by the aid of Taylor's Theorem. Take the form  $\frac{0}{0}$ . Suppose  $f x$  and  $F x$  are functions of  $x$ , continuous for values of  $x$  near the particular value  $a$ , and  $f a$  and  $F a$  are both equal to zero, to find the true value (vide Art. 34) of  $\frac{f x}{F x}$  when  $x = a$ .

Call

$$x - a = h, \text{ then } x = a + h,$$

and we can develop  $f x$  and  $F x$  by Taylor's Theorem.

$$fx = f(a + h) = fa + hf'(a + \theta h)$$

where  $\theta$  is some number between zero and 1.

$$Fx = F(a + h) = Fa + hF'(a + \theta'h)$$

where  $0 < \theta' < 1$ .

$$\frac{fx}{Fx} = \frac{hf'(a + \theta h)}{hF'(a + \theta'h)} = \frac{f'(a + \theta h)}{F'(a + \theta'h)},$$

since

$$fa = 0 \text{ and } Fa = 0.$$

As  $x$  approaches  $a$ ,  $h$  approaches zero; hence  $\theta h$  and  $\theta' h$  approach zero as their limit; consequently the limit approached by  $\frac{fx}{Fx}$  as  $x$  approaches  $a$ , is  $\frac{f'a}{F'a}$ , which, by Art. 34, is the *true value* of

$$\frac{fa}{Fa}. \text{ If } fa = 0, Fa = 0, f'a = 0, \text{ and } F'a = 0,$$

it will be necessary to carry the development one step farther.

$$fx = f(a + h) = fa + hf'a + \frac{h^2}{2!} f''(a + \theta h) = \frac{h^2}{2!} f''(a + \theta h),$$

$$Fx = F(a + h) = Fa + hF'a + \frac{h^2}{2!} F''(a + \theta'h) = \frac{h^2}{2!} F''(a + \theta'h),$$

and

$$\frac{fx}{Fx} = \frac{f''(a + \theta h)}{F''(a + \theta'h)},$$

which approaches  $\frac{f''a}{F''a}$  as its limit as  $x$  approaches  $a$ .

**EXAMPLE.**

Show that, if  $fa, Fa, f'a, F'a, f''a, F''a, \&c., f^{(n-1)}a$ , and  $F^{(n-1)}a$  all equal zero, the true value of  $\frac{fx}{Fx}$  when  $x = a$  is  $\frac{f^{(n)}a}{F^{(n)}a}$ .

140. The reasoning of the last section does not apply when

$a = x$ , as then  $f(a + h)$  cannot be developed by Taylor's Theorem.

To find the true value of  $\frac{fx}{Fx}$  when  $x = x$ , supposing that

$$fx = 0 \text{ and } Fx = 0 \text{ when } x = x.$$

Let  $y = \frac{1}{x}$ ,

then  $fx = f\frac{1}{y}$  and  $Fx = F\frac{1}{y}$ , and

$\frac{f\frac{1}{y}}{F\frac{1}{y}}$  assumes the form  $\frac{0}{0}$  when  $y = 0$ ,

and its true value for  $y = 0$  will be  $\frac{\left[D_y f\frac{1}{y}\right]_{y=0}}{\left[D_y F\frac{1}{y}\right]_{y=0}}$

$$D_y f\frac{1}{y} = f'\frac{1}{y} D_y \frac{1}{y} = -\frac{1}{y^2} f'\frac{1}{y},$$

$$D_y F\frac{1}{y} = -\frac{1}{y^2} F'\frac{1}{y}.$$

But the value of  $\frac{D_y f\frac{1}{y}}{D_y F\frac{1}{y}}$  when  $y = 0$

is the value it approaches as  $y$  approaches 0.

$$\frac{D_y f\frac{1}{y}}{D_y F\frac{1}{y}} = \frac{-\frac{1}{y^2} f'\frac{1}{y}}{-\frac{1}{y^2} F'\frac{1}{y}} = \frac{f'\frac{1}{y}}{F'\frac{1}{y}} = \frac{f'x}{F'x};$$

but when  $y = 0$ ,  $x = \infty$ ;

hence the true value of  $\frac{fx}{Fx}$  when  $x = \infty$

is the value of  $\frac{f'x}{F'x}$  when  $x = \infty$ ;

and the method of the last section holds, no matter what the value of  $a$ .

141. It was shown in Art. 35, that the form  $\frac{\infty}{\infty}$  could always be reduced to  $\frac{0}{0}$  and treated as above. Let us consider a general example. Suppose  $fa = \infty$  and  $Fa = \infty$ , required the true value of  $\frac{fx}{Fx}$  when  $x = a$ .

$$\frac{fx}{Fx} = \frac{\frac{1}{fx}}{\frac{1}{Fx}} = \frac{0}{0} \text{ when } x = a.$$

Differentiate numerator and denominator.

$$D_x \frac{1}{fx} = -\frac{1}{(fx)^2} f'x.$$

$$D_x \frac{1}{Fx} = -\frac{1}{(Fx)^2} F'x.$$

Hence we have, when  $x = a$ ,

$$\frac{fx}{Fx} = \frac{-\frac{1}{(Fx)^2} F'x}{-\frac{1}{(fx)^2} f'x} = \left(\frac{fx}{Fx}\right)^2 \frac{F'x}{f'x}.$$

$$1 = \frac{fx}{Fx} \cdot \frac{F'x}{f'x}$$

and

$$\frac{fx}{Fx} = \frac{f'x}{F'x},$$

the value required. Therefore the form  $\frac{\infty}{\infty}$  can be treated directly by the same method as the form  $\frac{0}{0}$ . In dividing both members

of the equation  $\frac{fx}{Fx} = \left(\frac{fx}{Fx}\right)^2 \frac{F'x}{f'x}$  by  $\frac{fx}{Fx}$ ,

we have assumed that the true value of  $\frac{fx}{Fx}$ , when

$$x = a$$

is neither 0 nor  $\infty$ . Suppose the limit approached by  $\frac{fx}{Fx}$  as  $x$  approaches  $a$  is 0, and that  $fx$  and  $Fx$  increase indefinitely.

Form the function  $\frac{fx + Fx}{Fx}$ .

Its true value when  $x = a$ , is, of course, 1 ;

but when  $x = a$ , it assumes the form  $\frac{\infty}{\infty}$  ;

hence its true value when  $x = a$ ,

must be the limit approached by  $\frac{f'x + F'x}{F'x}$  as  $x$  approaches  $a$ ,

which is  $1 + \lim_{x \rightarrow a} \left[ \frac{f'x}{F'x} \right]$ .

Therefore,  $\lim_{x \rightarrow a} \left[ \frac{f'x}{F'x} \right] = 0 = \lim_{x \rightarrow a} \left[ \frac{fx}{Fx} \right]$  by hypothesis.

If the true value of  $\frac{fx}{Fx}$  when  $x = a$

is infinite, of course the true value of its reciprocal  $\frac{Fx}{fx}$  will be

zero, and will equal  $\left[ \frac{F'x}{f'x} \right]_{x=a}$  ;

hence  $\left[ \frac{f'x}{F'x} \right]_{x=a} = \infty = \left[ \frac{fx}{Fx} \right]_{x=a}$ ,

and the method of determining the form  $\frac{\infty}{\infty}$ , established at the beginning of this section, is of universal application.



142. The forms  $\infty^0$ ,  $1^\infty$ ,  $0^0$ , can all be reduced to one of the forms already discussed, if we make use of logarithms. *It is to be observed, that these forms to be indeterminate must all occur as limiting forms of a function of two functions; and, in order that the forms may admit of being determined, the two functions must depend upon the same variable.*

Let  $u = (Fx)^{fx}$ .

Suppose, when  $x = a$ ,

$$Fx = \infty \text{ and } fx = 0;$$

to find the true value of  $u$  when  $x = a$ .

$$\log u = fx \cdot \log Fx = 0 \times \infty \text{ when } x = a,$$

and may be determined by the method of Art. 35.

### EXAMPLES.

(1) Show that  $1^\infty$ ,  $0^0$ , can be made to depend upon the forms  $\infty \times 0$  and  $0(-\infty)$ .

(2) Obtain a method for dealing with the form  $\infty - \infty$ .

Find the true value of the following functions:—

(3)  $\frac{\log x}{x-1}$  when  $x=1$ . Ans. 1.

(4)  $\frac{e^x - e^{-x}}{\sin x}$  “  $x=0$ . Ans. 2.

(5)  $\frac{x - \sin^{-1}x}{\sin^3 x}$  “  $x=0$ . Ans.  $-\frac{1}{6}$ .

(6)  $\frac{1}{\log x} - \frac{x}{\log x}$  “  $x=1$ . Ans.  $-1$ .

(7)  $\frac{e^x - 2 \cos x + e^{-x}}{x \sin x}$  “  $x=0$ . Ans. 2.

- (8)  $x \tan x - \frac{\pi}{2} \sec x$  when  $x = \frac{\pi}{2}$ . *Ans.*  $-1$ .
- (9)  $2^x \sin \frac{a}{2^x}$       “       $x = \infty$ . *Ans.*  $a$ .
- (10)  $(a^x - 1)x$       “       $x = \infty$ . *Ans.*  $\log a$ .
- (11)  $\left(\frac{a}{x} + 1\right)^x$       “       $x = \infty$ . *Ans.*  $e^a$ .
- (12)  $\left(1 + \frac{1}{x^2}\right)^x$       “       $x = \infty$ . *Ans.*  $1$ .
- (13)  $\left(\frac{\tan x}{x}\right)^{\frac{1}{x}}$       “       $x = 0$ . *Ans.*  $1$ .
- (14)  $\left(\frac{\tan x}{x}\right)^{\frac{1}{x^2}}$       “       $x = 0$ . *Ans.*  $e^{\frac{1}{2}}$ .
- (15)  $\left(\frac{\tan x}{x}\right)^{\frac{1}{x^3}}$       “       $x = 0$ . *Ans.*  $\infty$ .
- (16)  $\sin x^{\tan x}$       “       $x = \frac{\pi}{2}$ . *Ans.*  $1$ .

*Maxima and Minima.*

143. Taylor's Theorem enables us to give a very simple and complete treatment of the subject of maxima and minima of a single variable.

Let  $f_x$  be a function of  $x$ , finite and continuous for values of  $x$  near the particular value  $a$ .

Call  $x = a + h$ .

$$f(a+h) = fa + hf'a + \frac{h^2}{2!} f''(a + \theta h).$$

$$f(a+h) - fa = hf'a + \frac{h^2}{2!} f''(a + \theta h).$$

In order that  $fa$  should be either a maximum or a minimum,

$$f(a+h) - fa$$

must have the same sign for small values of  $h$  whether  $h$  is positive or negative. If this sign is minus,  $fa$  is a maximum value of  $fx$ ; if plus, a minimum value (*vide* Art. 39).

If  $f'a$  does not equal zero, we can take a value of  $h$  so small, that, for it and all smaller values,

$$\frac{h}{2!} f''(a + \theta h)$$

shall be less than  $f'a$ . The sign of

$$hf'a + \frac{h^2}{2!} f''(a + \theta h)$$

will then, as  $h$  approaches zero, ultimately become and remain the same as the sign of  $hf'a$ ; but the sign of  $hf'a$  changes with the sign of  $h$ , so that  $fa$  can be neither a maximum nor a minimum.

144. Suppose  $f'a = 0$ ,

then  $f(a+h) - fa = \frac{h^2}{2!} f''a + \frac{h^3}{3!} f'''(a + \theta h)$

$$= h^2 \left[ \frac{f''a}{2!} + \frac{h}{3!} f'''(a + \theta h) \right];$$

as  $h$  approaches zero  $\frac{h}{3!} f'''(a + \theta h)$

will, in the end, become and remain less than  $\frac{f''a}{2!}$  and the quantity in parenthesis will have the same sign as  $f''a$ . As  $h^2$  is necessarily positive for all values of  $h$

$$f(a+h) - fa$$

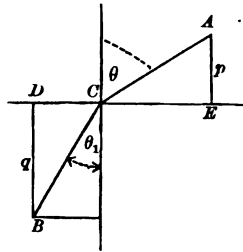
will then be negative for small positive and negative values of  $h$ ,

if  $f''a$  is negative, and will be a *maximum*; if  $f''a$  is positive,  $fa$  will be a *minimum*.

145. It can be easily established by an extension of the reasoning of the last section, that, *if the first derivative that does not vanish when  $x = a$  is of odd order,  $fa$  is neither a maximum nor a minimum; that, if it is of even order and negative,  $fa$  is a maximum; if of even order and positive,  $fa$  is a minimum.*

#### EXAMPLES.

(1) A body moves with different uniform velocities in two different media separated by a plane, required the path of quickest passage from a given point in the first medium to a given point of the second. It is easily seen that the required path will lie in a plane passing through the two given points and perpendicular to the plane separating the two media.



Let  $ACB$  represent any such path from  $A$  to  $B$ . Draw a normal to the plane at  $C$  and the perpendiculars  $p$  and  $q$ . Call

$$DE = c,$$

and let  $v_1$  and  $v_2$  be the velocities in the first and second media respectively.

$$AC = p \sec \theta,$$

$$CB = q \sec \theta,$$

$$BC = q \sec \theta_1,$$

$$DC = q \tan \theta_1,$$

$$p \tan \theta + q \tan \theta_1 = c.$$

$$\frac{AC}{v_1} = \frac{p \sec \theta}{v_1}$$

is the time required to pass from *A* to *C*;

$$\frac{BC}{v_2} = \frac{q \sec \theta_1}{v_2}$$

is the time required to pass from *C* to *B*;

$$t = \frac{p \sec \theta}{v_1} + \frac{q \sec \theta_1}{v_2}$$

is the function we wish to make a minimum.  $\theta$  and  $\theta_1$  are the only variables in  $t$ , and they are connected by the relation

$$p \tan \theta + q \tan \theta_1 = c.$$

$$D_\theta t = \frac{p}{v_1} \sec \theta \tan \theta + \frac{q}{v_2} \sec \theta_1 \tan \theta_1 D_\theta \theta_1.$$

Differentiate

$$p \tan \theta + q \tan \theta_1 = c.$$

$$p \sec^2 \theta + q \sec^2 \theta_1 D_\theta \theta_1 = 0,$$

$$D_\theta \theta_1 = -\frac{p \sec^2 \theta}{q \sec^2 \theta_1},$$

$$D_\theta t = \frac{p}{v_1} \sec \theta \tan \theta - \frac{q}{v_2} \sec \theta_1 \tan \theta_1 \frac{p \sec^2 \theta}{q \sec^2 \theta_1}.$$

$D_\theta t$  must equal zero in order that  $t$  may be a minimum. Express everything in terms of sine and cosine.

$$\frac{p \sin \theta}{v_1 \cos^2 \theta} - \frac{q \sin \theta_1}{v_2 \cos^2 \theta_1} \frac{p \cos^2 \theta_1}{q \cos^2 \theta} = 0,$$

$$\frac{\sin \theta}{v_1} = \frac{\sin \theta_1}{v_2},$$

$$\frac{\sin \theta}{\sin \theta_1} = \frac{v_1}{v_2}.$$

By taking  $D_\theta^2 t$  and substituting

$$\frac{\sin \theta}{\sin \theta_1} = \frac{v_1}{v_2},$$

we should obtain a positive result; so that this relation between the angles gives the path of quickest passage required. This result is the well-known law of the refraction of light, and our solution establishes the fact that a ray of light, in passing from a point in one medium to a point in another, takes the course that enables it to accomplish its journey in the least possible time.

(2) What value of  $x$  will make  $\sin^3 x \cos x$  a maximum?

$$\text{Ans. } x = \frac{\pi}{3}.$$

(3) What value of  $x$  will make  $\sin x(1 + \cos x)$  a maximum?

$$\text{Ans. } x = \frac{\pi}{3}.$$

(4) Show that  $x^x$  is a maximum when  $x = e$ .

(5) A statue  $a$  feet high stands on a column  $b$  feet high; how far from the foot of the column must an observer stand that the statue may subtend the greatest possible visual angle?

$$\text{Ans. } \sqrt{b(a+b)} \text{ feet.}$$

(6) Required the shortest distance from the point  $(x_0, y_0)$  to

the line

$$Ax + By + C = 0.$$

$$\text{Ans. } \frac{Ax_0 + By_0 + C}{\sqrt{A^2 + B^2}}.$$

## CHAPTER X.

## INFINITESIMALS.

146. An *infinitesimal* or *infinitely small* quantity is a variable which is supposed to decrease indefinitely; in other words, it is a variable which approaches the limit zero.

What we have called the *increment* of a variable has, in every case considered, been such a quantity; and what we have called a *derivative* has been the limit of the ratio of infinitesimal increments of function and variable.

147. When we have occasion to consider several infinitesimals connected by some law, we choose arbitrarily some one as the *principal infinitesimal*.

Any infinitesimal such that the limit of its ratio to the principal infinitesimal is finite, is called an *infinitesimal of the first order*.

An infinitesimal such that the limit of its ratio to the square of the principal infinitesimal is finite, is called an *infinitesimal of the second order*.

An infinitesimal such that the limit of its ratio to the  $n$ th power of the principal infinitesimal is finite, is called an *infinitesimal of the  $n$ th order*.

Let  $a$  represent the principal infinitesimal, and  $a_1$  any infinitesimal of the first order,  $a_2$  of the second order,  $a_n$  of the  $n$ th order. Then, by our definition,

$$\text{limit } \frac{a_1}{a} = K,$$

$K$  being a finite quantity.

$$\frac{a_1}{a} = K + \epsilon,$$

where  $\epsilon$  is an infinitesimal (Art. 7),

$$a_1 = a(K + \epsilon).$$

$$\text{limit } \frac{a_2}{a^2} = K';$$

$$\frac{a_2}{a^2} = K' + \epsilon',$$

$$a_2 = a^2(K' + \epsilon');$$

$$a_n = a^n(K^{(n)} + \epsilon^{(n)}).$$

#### EXAMPLES.

Show, by the aid of these expressions, that the limit of the ratio of any infinitesimal to one of the same order is finite; to one of a lower order is zero; to one of a higher order is infinite. That the order of the product of infinitesimals is the sum of the orders of the factors, and that the order of the quotient of infinitesimals may be obtained by subtracting the order of the denominator from the order of the numerator.

Show that, if the limit of the ratio of two infinitesimals is unity, they differ by an infinitesimal of an order higher than their own.

148. The sine of an infinitesimal angle is infinitesimal; for, as the angle approaches zero, the sine approaches zero as its limit.

If we take the angle as our principal infinitesimal, the sine is an infinitesimal of the first order; for we have seen that

$$\text{limit } \left[ \frac{\sin a}{a} \right] = 1, \quad (\text{Art. 68}).$$

The vers  $a$  is infinitesimal if  $a$  is infinitesimal, for

$$\text{vers } a = 1 - \cos a;$$



and as  $a \doteq 0$ ,  $\cos a \doteq 1$  ;

hence  $\text{vers } a \doteq 0$ .

It is an infinitesimal of a higher order than the first, for we have

seen that  $\lim_{a \doteq 0} \left[ \frac{1 - \cos a}{a} \right] = 0$ , (Art. 68).

Let us see if it is of the second order ; that is, let us see if  $\lim_{a \doteq 0} \left[ \frac{1 - \cos a}{a^2} \right]$  is finite.  $\frac{1 - \cos a}{a^2}$  assumes the form  $\frac{0}{0}$  when  $a = 0$ , and we can find our required limit by the method of Art. 139, which gives us  $\frac{1}{2}$  as the value sought. Therefore, when  $a$  is infinitesimal,  $\text{vers } a$  is infinitesimal of the second order.

#### EXAMPLES.

Taking  $a$  as the principal infinitesimal, show that

- (1)  $\tan a$  is an infinitesimal of the first order.
- (2)  $a - \sin a$  is an infinitesimal of the third order.
- (3)  $\tan a - a$  is of the third order.

149. Let  $y$  be any function whatever of  $x$ , if we give  $x$  an infinitesimal increment  $\Delta x$ , the corresponding increment  $\Delta y$  of  $y$  will be an infinitesimal of the same order as  $\Delta x$ , unless for particular single values of  $x$ .

To establish this proposition, we must show that  $\lim_{\Delta x \doteq 0} \left[ \frac{\Delta y}{\Delta x} \right]$  is finite.  $\lim_{\Delta x \doteq 0} \left[ \frac{\Delta y}{\Delta x} \right]$  cannot be zero, except for single values of  $x$  ; for, suppose it could become and continue zero ;  $\lim_{\Delta x \doteq 0} \left[ \frac{\Delta y}{\Delta x} \right]$  is  $D_x y$ , and we have seen (Art. 38) that  $D_x y$  shows the rate at which  $y$  is changing as  $x$  changes. If  $D_x y$  becomes and remains zero,  $y$  does not change at all as  $x$  changes ; and, therefore, is not a function of  $x$ , but a constant.

limit  $\frac{\Delta y}{\Delta x}$  cannot become and continue infinite; for, in that case, limit  $\frac{\Delta x}{\Delta y}$  would be zero,  $D_x x$  would be zero, and  $x$ , regarded as a function of  $y$ , would be constant.

Since limit  $\frac{\Delta y}{\Delta x}$  can be neither zero nor infinite, it must be finite, and  $\Delta y$  and  $\Delta x$  are of the same order.

150. *If the coördinates of the points of a curve are expressed as functions of a third variable  $a$ , the distance between two infinitely near points of the curve is an infinitesimal of the same order as the difference between the values of  $a$  to which the points correspond.*

The ordinary equations of the cycloid,

$$\left. \begin{aligned} x &= a\theta - a \sin \theta \\ y &= a - a \cos \theta \end{aligned} \right\}$$

are a familiar example of the way in which the coördinates of points of a curve may be expressed as functions of a third variable. In the case of any curve, it is obvious that this may be done in a great variety of ways. *Any two equations containing  $x$ ,  $y$ , and  $a$  that will reduce on the elimination of  $a$  to the ordinary equation of a given curve, can be used as equations of that curve.*

For example :

$$\left. \begin{aligned} x &= 2a \\ y &= a + 2 \end{aligned} \right\} \text{are equivalent to } x - 2y + 4 = 0;$$

$$\left. \begin{aligned} x &= a \cos a \\ y &= a \sin a \end{aligned} \right\} \text{are equivalent to } x^2 + y^2 = a^2;$$

$$\left. \begin{aligned} x &= a \cos a \\ y &= b \sin a \end{aligned} \right\} \text{are equivalent to } \frac{x^2}{a^2} + \frac{y^2}{b^2} = 1;$$

$$\left. \begin{array}{l} x = a \sec a \\ y = b \tan a \end{array} \right\} \text{are equivalent to } \frac{x^2}{a^2} - \frac{y^2}{b^2} = 1.$$

The proof of our proposition is as follows: Let  $a$  and  $a + \Delta a$  be the two values of  $a$  in question, and  $(x, y)$  and  $(x + \Delta x, y + \Delta y)$  be the two corresponding points. The distance  $D$  between these points will be, if we use rectangular coördinates,  $\sqrt{(\Delta x)^2 + (\Delta y)^2}$ .

We wish to prove that  $\lim_{\Delta a \rightarrow 0} \left[ \frac{D}{\Delta a} \right]$  is finite.

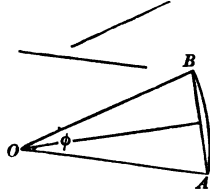
$$\frac{D}{\Delta a} = \frac{\sqrt{(\Delta x)^2 + (\Delta y)^2}}{\Delta a} = \sqrt{\left( \frac{\Delta x}{\Delta a} \right)^2 + \left( \frac{\Delta y}{\Delta a} \right)^2},$$

and, by Art. 149,  $\lim_{\Delta a \rightarrow 0} \left[ \frac{\Delta x}{\Delta a} \right]$  and  $\lim_{\Delta a \rightarrow 0} \left[ \frac{\Delta y}{\Delta a} \right]$  are both finite; hence  $\lim_{\Delta a \rightarrow 0} \left[ \frac{D}{\Delta a} \right]$  is finite, and  $D$  is an infinitesimal of the same order as  $\Delta a$ .

151. *If two curves are so connected that the points of one correspond to the points of the other, so that when a point of the first curve is given, the corresponding point on the second is determined, the distance between two infinitely near points on the first curve is an infinitesimal of the same order as the distance between the corresponding points of the second curve.* For, if we suppose the coördinates of the points of the first curve expressed as functions of some variable  $a$ , the coördinates of the points of the second curve can also be regarded as functions of  $a$ ; and, by Art. 150, each of the distances in question will be an infinitesimal of the same order as  $\Delta a$ , and each will therefore be of the same order as the other.

152. *If a straight line moves in a plane according to some law, so that each of its positions corresponds to some value of a variable  $a$ , the angle between two infinitely near positions of the line is an infinitesimal of the same order as the difference between the corresponding values of  $a$ .*

Suppose lines drawn through a fixed point  $O$  parallel to the moving line in its different positions. From  $O$ , with the radius unity, describe an arc. Consider any two positions of the moving line, and the corresponding lines at  $O$ , we wish to



prove that the angle  $\varphi$  between the latter is of the same order as the difference between the values of  $a$  to which the positions of the moving line correspond. As all the lines at  $O$  correspond to values of  $a$ , the points where they cut the circle correspond to values of  $a$ , and, by Art. 150, the distance  $AB$  between two of the points supposed to be infinitely near is of the same order as  $\Delta a$ .  $\frac{1}{2}AB$  is equal to  $\sin \frac{\varphi}{2}$ ; therefore  $\sin \frac{\varphi}{2}$ , and consequently  $\frac{\varphi}{2}$  itself is an infinitesimal of the same order as  $\Delta a$ , and if

limit  $\left[ \frac{\frac{\varphi}{2}}{\Delta a} \right]$  is finite, limit  $\left[ \frac{\varphi}{\Delta a} \right]$  is finite.

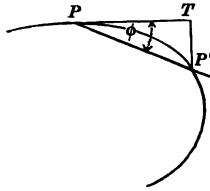
153. A simple geometrical example of an *infinitesimal of the second order* is the *perpendicular let fall upon the tangent at any point of a curve from a second point of the curve infinitely near the first.*

If, in our figure, the distance  $PP'$  is taken as the principal infinitesimal,  $P'T$  is readily seen to be of a higher order than the first, for

$$\frac{P'T}{PP'} = \sin \varphi;$$

and, since  $\varphi \doteq 0$  as  $P' \doteq P$ , its sine  $\doteq 0$ ; hence

$$\lim_{PP' \doteq 0} \left[ \frac{P'T}{PP'} \right] = 0,$$

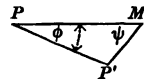


and  $P'T$  is an infinitesimal of an order higher than that of  $PP'$ , by Art. 147, Ex.

To show that  $P'T$  is of the second order, let us consider different secant lines drawn through  $P$ ,  $PT$  being itself one of these lines. Obviously, each one of these lines is determined in position when the abscissa of its second point of intersection with the curve is given; and therefore the angle between any two infinitely near secant lines, as  $PP'$  and  $PT$  is an infinitesimal of the same order as the difference between the corresponding abscissas, by Art. 152; but the distance  $PP'$  is of the same order, by Art. 150; therefore,  $\phi$  and  $PP'$  are of the same order, that is, of the first order;  $\sin \phi$  is also of the first order, by Art. 148; hence  $P'T$ , which is equal to  $PP' \sin \phi$ , is of the second order (Art. 147, Ex.).

154. To determine the tangent at any given point of a curve, we draw a secant line through the point in question and any second point on the curve, and seek the limiting position approached by this line as the second point approaches the first; or, in other words, we seek the limiting position of the line joining the given point with an infinitely near point of the curve. It can be shown that this is also the limiting position of any line passing through the given point and a point whose distance from the second point of the curve is an infinitesimal of a higher order than the distance between the two points on the curve.

Let  $P$  and  $P'$  be two infinitely near points on the curve, and let  $PM$  be an infinitesimal of a higher order than  $PP'$ , then the limiting position of  $PP'$  as  $P' \doteq P$  will be the same as the limiting position of  $PM$ ; for, in the triangle  $PMP'$ ,



$$\frac{P'M}{PP'} = \frac{\sin \varphi}{\sin \psi};$$

hence 
$$\sin \varphi = \frac{P'M}{PP'} \sin \psi;$$

and as by hypothesis, 
$$\lim_{PP' \rightarrow 0} \left[ \frac{P'M}{PP'} \right] = 0,$$

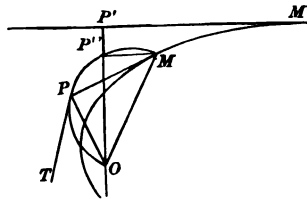
$\lim_{PP' \rightarrow 0} [\sin \varphi]$  must be zero. Therefore

$$\lim_{PP' \rightarrow 0} [\varphi] = 0,$$

and the two lines,  $PP'$  and  $PM$ , approach the same limiting position.

155. This principle is frequently of service in problems concerning the position of tangent lines. For example: *Suppose perpendiculars let fall from a fixed point to the tangents of a given curve, to draw the tangent at any given point of the locus on which the feet of these perpendiculars lie.*

Let  $M$  and  $M'$  be two infinitely near points of the given curve, and  $O$  be the given point from which the perpendiculars are let fall; then  $P$  and  $P'$  are two infinitely near points of the locus in question, and the required tangent at  $P$  is the limiting position of the line joining  $P$  and  $P'$ . Draw through  $M$  the line  $MP''$

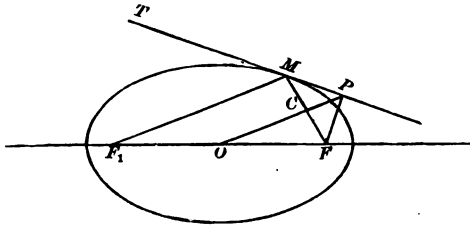


parallel to the tangent  $M'P'$ . If we take  $MM'$  as our principal infinitesimal,  $P'P'$  is an infinitesimal of the second order, by Art. 153, and  $PP'$  is of the first order, by Art. 151; conse-

quently (Art. 154) it will answer our purpose to find the limiting position of the line joining  $PP'$ ; but, since  $MP'O$  and  $MPO$  are both right angles,  $P'$  lies on the circumference of a circle described on  $OM$  as diameter, and the required limiting position of  $PP'$  is that of a tangent to this circle at  $P$ , which is therefore the required tangent. Hence to obtain a tangent to the locus in question at any given point, we have only to join the corresponding point with  $O$ , to erect a circle on this joining line as diameter, and to draw a tangent to the circle at the given point. Of course, the normal to this locus at the given point bisects the joining line  $OM$ .

156. Let us consider the locus of the feet of perpendiculars let fall from the focus of an ellipse upon the tangents to the curve.

Since the tangent to the required locus at  $P$  is tangent to the circle on  $FM$  as diameter, the normal at  $P$  passes through the



centre  $C$  of the circle. Draw the focal radius  $F_1M$ . Since the tangent to an ellipse makes equal angles with the focal radii drawn to the point of contact,

$$TMF_1 = PMC;$$

$$PMC = MPC,$$

because  $MC$  and  $CP$  are equal;

$$\therefore MPC = TMF_1,$$

and  $PO$  is parallel to  $MF_1$ ; it must then divide  $MF$  and  $F_1F$  proportionally; and as it bisects  $MF$ , it also bisects  $F_1F$ , and

consequently passes through the centre of the ellipse. Since every normal to the required locus passes through the centre of the ellipse, the locus is a circle concentric with the ellipse. It is easily seen that it must pass through the vertices of the ellipse. It is then a circle on the major axis of the ellipse as diameter.

**EXAMPLE.**

Show that the locus of the foot of a perpendicular let fall from the focus upon any tangent is a circle on the transverse axis as diameter in the hyperbola; is the tangent at the vertex in the parabola.

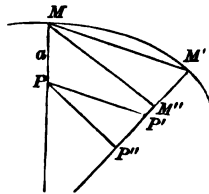
**PROBLEM.**

157. Upon each normal to a plane curve a point is taken at a constant distance from the intersection of the normal with the curve; to find the tangent at any point of the locus thus formed.

Let  $M$  and  $M'$  be two infinitely near points on the given curve,  $P$  and  $P'$  the corresponding points of the locus; let

$$MP = M'P' = a;$$

call the angle between the normals,  $\varphi$ . Draw  $MM''$  and  $PP''$  perpendicular to the second normal. The required tangent is the



limiting position of  $PP'$ , and the tangent at  $M$  is the limiting position of  $MM'$ . If  $MM'$  is taken as the principal infinitesimal,  $PP'$  and  $\varphi$  are of the first order and  $M'M''$  of the second (Arts. 151-153).  $P'P''$  is of an order higher than the first, for



$$P'P'' = M'M'' + M''P'' - a,$$

$$M''P'' = a \cos \varphi;$$

hence

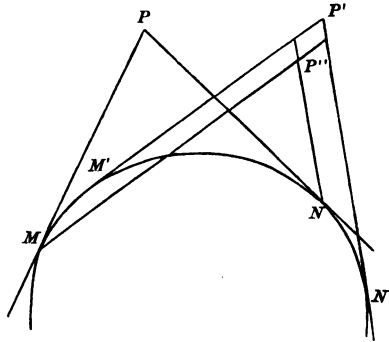
$$P'P'' = M'M'' - a(1 - \cos \varphi).$$

$\varphi$  being of the first order,  $1 - \cos \varphi$  is of the second order by Art. 148; and as  $M'M''$  is of the second order,  $P'P''$  is of at least as high an order as the second. By Art. 154, our required tangent will be the limiting position of  $PP''$ , and the tangent at  $M$  will be the limiting position of  $MM''$ ; but  $PP''$  and  $MM''$  are parallel always; therefore their limiting positions are parallel, and our required tangent is parallel to the tangent to the given curve at the corresponding point, and the curves are what are called parallel curves.

PROBLEM.

✓ 158. *An angle of constant magnitude is circumscribed about a given curve; to draw a tangent to the locus of its vertex.*

The required tangent is the limiting position of the secant line  $PP'$ . Draw through  $M$  and  $N$  lines  $MP'$ ,  $NP'$ , parallel to the tangents at  $M'$  and  $N'$ . It can be shown that the sides, and therefore the diagonal, of the parallelogram  $P'P''$  are infinitesimals of a higher order than  $PP'$ , and therefore that the re-



quired tangent can be found as the limiting position of  $PP''$ . Since the angles at  $P$  and  $P''$  are equal, the point  $P''$  lies on a circle circumscribed about  $MPN$ ; the limiting position of  $PP''$  is there-

fore the tangent to this circle at  $P$ . Our solution is, then, draw a circle through the vertex of the circumscribing angle and the points of contact of its sides, and the tangent to this circle at the vertex of the angle is the tangent required.

#### EXAMPLE.

Show that the locus of the vertex of a right angle circumscribed about an ellipse or an hyperbola is a concentric circle; about a parabola is the directrix.

159. In the preceding examples, the advantage we have gained in the use of infinitesimals has arisen from the fact that we have been able to replace one infinitesimal by another related to it and more simply connected with the other values considered in the problem. The possibility of such substitutions, and the limitations under which they can be made, form the subject of the following two theorems, which are of prime importance, and lie at the foundation of the *Infinitesimal Calculus*.

#### THEOREM.

160. *In any problem concerning the limit of the ratio of two infinitesimals, either may be replaced by any infinitesimal so related to it that the limit of the ratio of the second to the first is unity.*

#### PROOF.

Let  $a$ ,  $\beta$ ,  $a'$ , and  $\beta'$  be infinitesimals so related that

$$\lim \frac{a'}{a} = 1 \text{ and } \lim \frac{\beta'}{\beta} = 1.$$

Then will  $\lim \frac{a}{\beta} = \lim \frac{a'}{\beta'}$ .

$$\frac{a}{\beta} = \frac{a'}{\beta'} \cdot \frac{a}{a'} \cdot \frac{\beta'}{\beta} \quad \text{identically ;}$$

hence 
$$\lim \frac{a}{\beta} = \lim \frac{a}{\beta'} \times \lim \frac{a'}{a'} \times \lim \frac{\beta'}{\beta},$$

$$\lim \frac{a}{\beta} = \lim \frac{a'}{\beta'} \times 1 \times 1 = \lim \frac{a'}{\beta'}. \quad \text{Q.E.D.}$$

**THEOREM.**

161. *In any problem concerning the limit of a sum of infinitesimals, provided that this limit is finite, any infinitesimal may be replaced by another so related to it that the limit of the ratio of the second to the first is unity.*

**PROOF.**

Let 
$$a_1 + a_2 + a_3 + \dots + a_n$$

be a sum of infinitesimals of such a nature that the number of the terms increases as each term decreases in absolute value, so that the limit of the sum is some finite quantity.

Let  $\beta_1, \beta_2, \beta_3, \dots, \beta_n$  be a set of infinitesimals so related to the first

set that 
$$\lim \frac{\beta_1}{a_1} = 1, \lim \frac{\beta_2}{a_2} = 1, \text{ \&c.}, \lim \frac{\beta_n}{a_n} = 1,$$

then 
$$\frac{\beta_1}{a_1} = 1 + \epsilon_1, \frac{\beta_2}{a_2} = 1 + \epsilon_2, \text{ \&c.}, \frac{\beta_n}{a_n} = 1 + \epsilon_n,$$

$\epsilon_1, \epsilon_2, \dots, \epsilon_n$  being necessarily infinitesimal (Art. 7).

$$\beta_1 = a_1 + a_1 \epsilon_1,$$

$$\beta_2 = a_2 + a_2 \epsilon_2,$$

$$\beta_n = a_n + a_n \epsilon_n,$$

$$\beta_1 + \beta_2 + \beta_3 + \dots + \beta_n = a_1 + a_2 + a_3 + \dots + a_n$$

$$+ a_1 \epsilon_1 + a_2 \epsilon_2 + a_3 \epsilon_3 + \dots + a_n \epsilon_n.$$

Let  $\eta$  be such a variable that at any instant it shall be equal to the greatest in absolute value of the quantities  $\epsilon_1, \epsilon_2, \dots, \epsilon_n$ . Of course, since each of these approaches zero as its limit,  $\eta$  must also approach zero as its limit; i.e.,  $\eta$  is infinitesimal.

$$a_1 \epsilon_1 + a_2 \epsilon_2 + a_3 \epsilon_3 + \dots + a_n \epsilon_n < \eta (a_1 + a_2 + a_3 + \dots + a_n),$$

hence  $\beta_1 + \beta_2 + \beta_3 + \dots + \beta_n - (a_1 + a_2 + a_3 + \dots + a_n)$

$$< \eta (a_1 + a_2 + a_3 + \dots + a_n).$$

By hypothesis,  $\lim (a_1 + a_2 + \dots + a_n)$  is finite;

therefore, limit of  $\eta (a_1 + a_2 + a_3 + \dots + a_n)$  is zero.

Consequently

$$\lim (\beta_1 + \beta_2 + \beta_3 + \dots + \beta_n) = \lim (a_1 + a_2 + a_3 + \dots + a_n).$$

Q.E.D.

162. *If two infinitesimals differ from each other by an infinitesimal of a higher order, the limit of their ratio is unity.*

For, let  $a' - a = \epsilon,$

where  $\epsilon$  is of a higher order than  $a$ ;

$$a' = a + \epsilon,$$

$$\frac{a'}{a} = 1 + \frac{\epsilon}{a},$$

$$\lim \frac{a'}{a} = 1 + \lim \frac{\epsilon}{a};$$

but, by hypothesis,  $\lim \frac{\epsilon}{a} = 0,$  (Art. 147, Ex.);

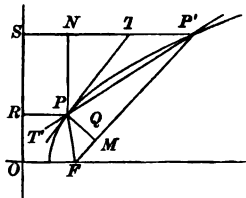
therefore  $\lim \frac{a'}{a} = 1.$

It follows that the theorems of Art. 160 and Art. 161 can be stated as follows:—

*In finding the limit of a ratio, or the limit of a sum of infinitesimals, any infinitesimal may be replaced by one that differs from it by an infinitesimal of a higher order. Or, in finding the limit of a ratio or of a sum of infinitesimals, any infinitesimal term may be neglected without in the least affecting the result, provided that it is of a higher order than the terms retained.*

163. Let us take the problem of *finding the direction of the tangent to a parabola.*

The tangent  $T'T$  at  $P$  is the limiting position of the secant through  $P$  and  $P'$ . Draw the focal radii  $FP$  and  $FP'$ , and the perpendiculars  $PR$  and  $P'S$  to the directrix. Draw  $PM$  and



$PN$  perpendicular to  $FP'$  and  $P'S$  respectively, and with  $F$  as a centre, and with the radius  $FP$ , describe the arc  $PQ$ .

Take  $PP'$  as the principal infinitesimal, then  $P'M$  and  $P'N$  are of the first order, since the limit of the ratio of each of them to  $PP'$  is finite.

$PQ$  is of the first order, by Art. 151, and  $MQ$  is of the second order, by Art. 153.

$$P'S = P'F,$$

from the definition of a parabola ;

$$PR = PF = QF;$$

$$\therefore P'N = P'Q.$$

$$\cos PP'F = \frac{P'M}{PP'},$$

$$\cos PP'S = \frac{P'N}{PP'}$$

$$\begin{aligned} \frac{\cos T'PF}{\cos T'PR} &= \lim_{P' \doteq P} \left[ \frac{\cos PP'F}{\cos PP'S} \right] = \lim_{P' \doteq P} \left[ \frac{P'M}{P'N} \right] \\ &= \lim_{P' \doteq P} \left[ \frac{P'Q}{P'N} \right] = 1, \quad \text{by Art. 162;} \end{aligned}$$

$$\therefore T'PR = T'PF,$$

and the tangent at any point of a parabola bisects the angle between the focal radius and the diameter through the given point.

164. *To find the area of the sector of a parabola included between two focal radii.* Take points of the parabola between the extremities of the bounding radii, and join them with the focus, thus dividing the area in question into smaller sectors, of which the sector  $FPP'$  in the figure of the last article may be taken as a type. Draw perpendiculars from the extremities of the bounding radii to the directrix, and consider the external area bounded by them, the directrix and the curve; draw perpendiculars from the intermediate points already described to the directrix, and the external area will be divided into smaller curvilinear quadrilaterals, of which  $PP'RS$  is one. No matter how close together the intermediate points are taken, the external area is the actual sum of these small curvilinear quadrilaterals; it is then the limit of their sum as the number is indefinitely increased. If the distance between any two of the points, as  $PP'$ , is taken as the principal infinitesimal,  $PN$ ,  $P'N$ ,  $PM$ ,  $P'M$ , are all infinitesimals of the first order, since the limit of the ratio of each of them to  $PP'$  is the sine or the cosine of a finite angle. The area of  $PP'RS$  lies between  $P'S \times PN$  and  $NS \times PN$ , and is therefore an infinitesimal of the first order. Hence we have to consider the limit of a sum of infinitesimals where the limit is finite, and we can replace any one by one differing from it by an infinitesimal of a higher order than the first. The rectangle  $PRSN$  differs from

$PP'RS$  by less than a rectangle on  $PN$  and  $P'N$ ; that is, by less than  $PN \times P'N$ , an infinitesimal of the second order. Therefore the required external area, which is the limit of the sum of infinitesimal areas of which  $PP'RS$  is a type, and which we shall indicate by limit  $\Sigma PP'RS$  ( $\Sigma$  serving as a symbol for the word *sum*), is equal to limit  $\Sigma PRNS$ .

The given sector is equal to the sum of the smaller sectors of which  $FPP'$  is a type = limit  $\Sigma FPP'$ , each term here being an infinitesimal of the first order. Draw the straight line  $PQ$ . The triangle  $FPQ$  differs from the sector  $FPP'$  by less than a rectangle on  $PM$  and  $MP'$ , which would be of the second order, and may therefore replace  $FPP'$  in the expression for our required area.

$$\text{limit } \frac{PN}{PM} = 1, \quad \text{by Art. 163 ;}$$

consequently  $PM$  and  $PN$  differ by an infinitesimal of higher order than the first, and the triangle  $FPQ$  differs from one-half the rectangle  $PRNS$  by an infinitesimal of higher order than the first, and may be replaced by  $\frac{1}{2}PRNS$ .

We have then, external area = limit  $\Sigma PRNS$ ,

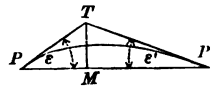
$$\text{given sector} = \text{limit } \Sigma \frac{1}{2} PRNS ;$$

and the given focal sector is equal to one-half the area bounded by the curve, the directrix and perpendiculars let fall from the extremities of the arc of the given sector to the directrix.

*Infinitesimal Arc and Chord.*

165. Let us consider the relation between the lengths of an infinitesimal chord and its arc.

Take the chord  $PP'$  as the principal infinitesimal, and draw the tangents  $PT$  and  $P'T$ . The arc  $PP'$  is less than  $PT + P'T$  and greater than the chord  $PP'$ . The angles  $\epsilon$  and  $\epsilon'$  are infinitesimal.



$$\cos \varepsilon = \frac{PM}{PT},$$

$$\cos \varepsilon' = \frac{P'M}{P'T},$$

$$\text{limit } \cos \varepsilon = 1,$$

$$\text{and } \text{limit } \cos \varepsilon' = 1;$$

$$\text{therefore } \text{limit } \frac{PM}{PT} = 1$$

$$\text{and } \text{limit } \frac{P'M}{P'T} = 1.$$

$$\text{Thus } PM = PT + \eta$$

$$\text{and } P'M = P'T + \eta',$$

where  $\eta$  and  $\eta'$  are infinitesimals of a higher order than the first, by Art. 147, Ex.

$$PM + P'M = PT + P'T + \eta + \eta',$$

or the difference between the sum of the tangents and the chord is of a higher order than the first. The difference between the arc and the chord is less than this, therefore *the limit of the ratio of an infinitesimal arc to its chord is unity.*

166. *It is customary to say roughly that lines which make with each other an infinitesimal angle, that is, lines which approach the same limiting position, coincide, and that finite values which differ by an infinitesimal or infinitesimal values which differ by an infinitesimal of a higher order, that is, values such that the limit of their ratio is unity, are equal; and this way of speaking is very convenient, especially for preliminary investigations. It is important, however, to be able to put a proof given in this form into the more exact language of limits.*

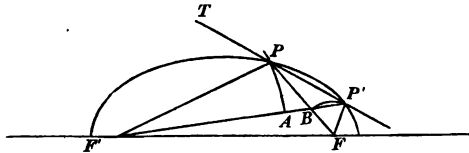
It is easily seen from what has just been said, that *the line*



*joining two infinitely near points of any curve, can, speaking roughly, be regarded at pleasure as chord, arc, or tangent, so that an infinitesimal arc can be treated as a straight line.*

167. As an example of this loose form of proof, let us show that a tangent to an ellipse makes equal angles with the focal radii drawn to the point of contact.

Let  $P$  and  $P'$  be two infinitely near points of the ellipse, then  $PP'$  is the tangent in question. From  $F$  and  $F'$  as centres, draw



the arcs  $PA$  and  $P'B$ ;  $PA$  and  $P'B$  being infinitesimal arcs, are straight lines, and  $PAT'$  and  $P'BP$  are right angles, since the tangent to a circle is perpendicular to the radius drawn to the point of contact.

$$F'P + PF = F'P' + P'F,$$

by the definition of an ellipse. Take away from the first sum  $F'P + BF$ , and we have left  $PB$ ; take away from the second sum the equal amount  $F'A + P'F$ , and we have left  $P'A$ ;

$$\therefore PB = P'A;$$

and the right triangles  $PAP'$  and  $PBP'$  have the hypotenuse and a side of the one equal to the hypotenuse and a side of the other, and are equal; and the angle

$$FPP' = F'P'P;$$

but the lines  $F'P'$  and  $F'P$  coincide, so that the angle  $F'P'P$  is the same as the angle  $F'PT$ ; and

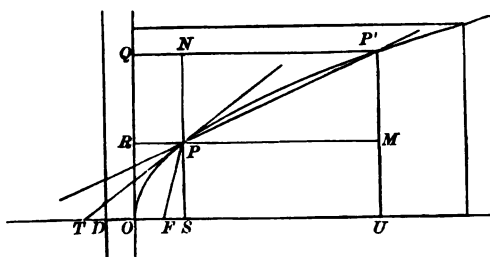
$$\therefore F'PT = FPP',$$

and the tangent makes equal angles with the focal radii. Q.E.D.

## EXAMPLE.

Prove that a tangent to an hyperbola bisects the angle between the focal radii drawn to the point of contact.

168. To find the area of a segment of a parabola cut off by a line perpendicular to the axis. Compare the required area with the area of the circumscribing rectangle. We can regard the



first as made up of the infinitesimal rectangles of which  $PMUS$  is a type, and the second of the corresponding rectangles of which  $QNPR$  is one. Draw the directrix.

$$PF = SD \text{ and } DO = OF,$$

by the definition of the parabola ; but

$$PF = FT \quad \text{by Art. 163 ;}$$

$$\therefore TO = OS.$$

The triangles  $P'MP$  and  $PST$  are similar, and

$$\frac{P'M}{PS} = \frac{PM}{ST} = \frac{PM}{2OS} ;$$

hence  $PM \times PS = 2OS \times P'M = 2PRQN,$

or rectangle  $PU = 2PQ ;$

$$\therefore \Sigma PU = 2\Sigma PQ,$$

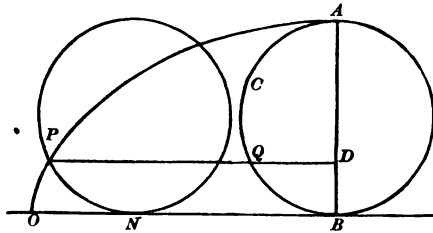
and the segment in question is twice the external portion of the circumscribing rectangle, and, therefore, is two-thirds of the whole rectangle.

**EXAMPLE.**

Prove the theorems of Arts. 167, 168, strictly, by the method of limits.

169. The properties of the cycloid can be very simply and neatly obtained by the aid of infinitesimals ; though, for this purpose, it is better to look at the curve from a new point of view.

Let a fixed circle equal to the generating circle be drawn tangent to the base of the cycloid at its middle point ; through the



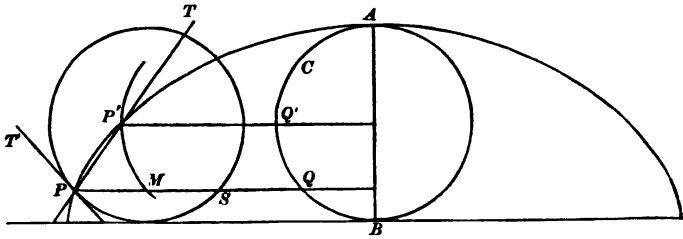
generating point  $P$ , draw  $PQD$  parallel to the base. From the nature of the cycloid, the arc

$$PN = ON \text{ and } OB = ACB,$$

$$PQ = NB = OB - ON = ACB - QB = ACQ.$$

Hence *points of the cycloid can be obtained by erecting perpendiculars to a diameter of a fixed circle, and extending each until its external portion is equal to the distance along the arc of the circle from the perpendicular in question to a given end of the diameter.*

170. *The tangent to the cycloid passes through the highest point of the generating circle.*



*Rough Proof.* — Let  $P$  and  $P'$  be infinitely near, then  $PP'$  is the required tangent; through  $P'$  draw an arc parallel and similar to  $QQ'$ . This arc may be regarded as a straight line. The triangle  $PP'M$  is isosceles, since

$$QP = ACQ \text{ and } MQ = P'Q' = ACQ',$$

hence

$$PM = QQ' = MP';$$

$$\therefore \text{the angle } PP'M = P'PM.$$

$P'M$  is parallel to the tangent at  $P$  to the generating circle, hence

$$PP'M = TPT',$$

and  $PT$  bisects the angle  $MPT'$ , bisects the arc  $PTS$ , and consequently passes through the highest point of the generating circle. Q.E.D.

*Strict Proof.* — Draw the chord  $P'M$ , and regard  $PP'$  as a secant line; in the triangle  $PP'M$  we have

$$\frac{\sin PP'M}{\sin TPM} = \frac{PM}{P'M},$$

$$\therefore \text{limit } \frac{\sin PP'M}{\sin TPM} = \text{limit } \frac{PM}{P'M}.$$

The

$$\text{arc } P'M = PM,$$

and the chord  $P'M$  differs from the arc by an infinitesimal of a higher order than that of the chord.

$$\therefore \text{limit } \frac{PM}{\text{chord } P'M} = \text{limit } \frac{PM}{\text{arc } P'M} = 1,$$

hence  $\text{limit } PP'M = \text{limit } TPM.$

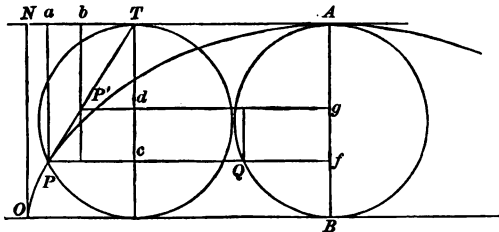
The limiting position of  $P'M$  is the tangent  $PT'$ ;

$$\therefore \text{limit } TPQ = \text{limit } TPT',$$

and the tangent passes through the highest point of the generating circle.

*The Area of the Cycloid.*

171. *Rough Investigation.* — Circumscribe a rectangle about the cycloid, and its area is evidently equal to the circumference of the generating circle multiplied by its diameter; that is, to four times the area of the circle. The area of the cycloid is



this area minus the area of the external portion of the rectangle. The external area  $ANO$  may be divided into trapezoids, of which  $abPP'$  is any one. The tangent  $PP'$  passes through the highest point of the generating circle, and is a diagonal of the rectangle  $TaPc$ ,  $Tc$  being a diameter. From geometry,

$$abP'P = cdP'P,$$

which is equal to  $Qg$ ; therefore the sum of the trapezoids  $abP'P$  is equal to the sum of the corresponding rectangles  $Qg$ , or the external area  $ANO$  is equal to the semi-circle  $ACB$ : but  $ANO$

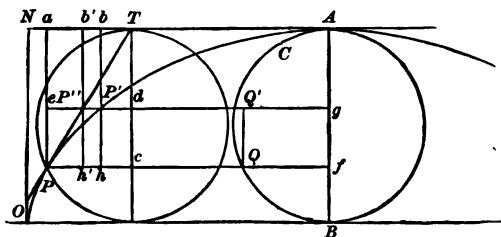
is half of the external portion of the circumscribing rectangle; consequently, the area of the cycloid is three times the area of the generating circle.

*Strict Proof.*—The external area is the sum of the curvilinear quadrilaterals of which  $abP'P$  is one; that is,

$$\text{area} = \Sigma abP'P = \text{limit } \Sigma abP'P = \text{limit } \Sigma abhP,$$

for 
$$abhP - abP'P < eP'hP,$$

which is of the second order.  $P'P''$  is of the second order, since



it is proportional to the distance from  $P'$  to the tangent at  $P'$  (Art. 153); therefore  $bhh'b'$  is of the second order, and

$$\text{limit } \Sigma abhP = \text{limit } \Sigma ab'h'P.$$

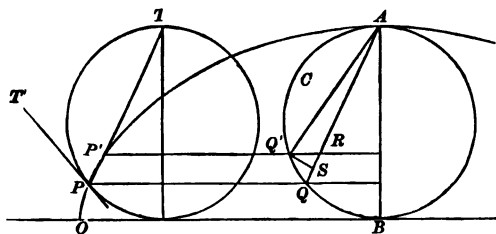
$$ab'h'P = edcP = Qg,$$

hence the external area =  $\text{limit } \Sigma Qg = \text{area of } ACB.$

*Length of an Arc of the Cycloid.*

172. *Rough Proof.*—The arc  $AP$  is equal to the sum of the infinitesimal chords of which  $PP'$  is one. The chord  $AQ$  is the sum of the differences between each chord and the one drawn to a point of the fixed circle above the point in question and infinitely near it;  $QS$  is such a difference, hence

$$\text{arc } AP = \Sigma PP' \text{ and chord } AQ = \Sigma QS.$$



$PP'$  and  $QR$  are equal,  $Q'QR = Q'RQ$ , by Art. 170,

and  $QQ'R$  is isosceles.  $Q'S$ , an infinitesimal arc described from  $A$  as a centre, may be regarded as a straight line perpendicular to  $QR$ , and therefore bisects  $QR$ , and

$$PP' = 2QS,$$

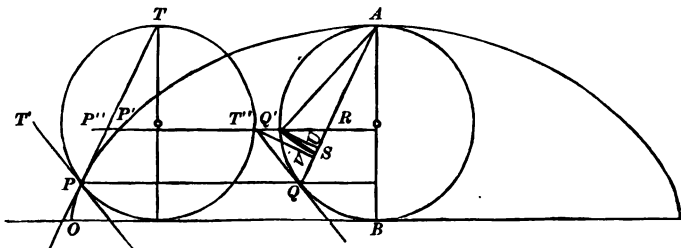
$$\Sigma PP' = 2\Sigma QS.$$

$$\text{Arc } AP = 2 \text{ chord } AQ.$$

The arc  $AO = 2AB$ ,

and the whole arc of the cycloid is eight times the radius of the generating circle.

*Strict Proof.* —  $P'P''$ ,  $Q'T'''$ , and  $US$  are infinitesimals of the second order, each being proportional to the distance from a point



of a curve to the tangent at a point infinitely near.  $Vv$  is also of second order, as it is the projection of  $Q'T'''$  on  $AQ$ .

The arc  $AP = \text{limit } \Sigma PP' = \text{limit } \Sigma PP''$ ,  
 since, in triangle  $PP'P''$ ,

$$PP' - PP'' < P'P''.$$

The chord  $AQ = \Sigma QS$ ;  
 $= \text{limit } \Sigma QS = \text{limit } \Sigma QU = \text{limit } \Sigma QV.$

But the triangle  $QT''R$  is isosceles, hence

$$QV = \frac{1}{2} QR = \frac{1}{2} PP'';$$

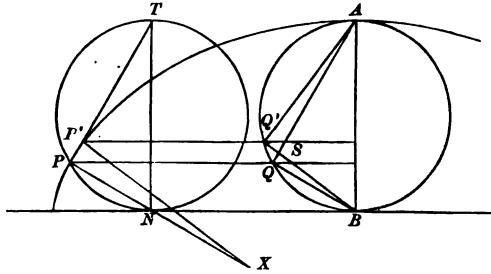
and, as arc  $AP = \text{limit } \Sigma PP''$ ,

$$\text{arc } AP = 2 \text{ chord } AQ. \qquad \text{Q.E.D.}$$

*Radius of Curvature of the Cycloid.*

173. *Rough Investigation.* — The centre of curvature for  $P$  is the intersection of the normal at  $P$  with the normal at  $P'$ .

$PX$ ,  $P'X$ , and  $PP'$  are parallel to  $QB$ ,  $Q'B$ , and  $QS$  respectively, hence the triangles  $PP'X$  and  $QSB$  are similar. The angle



$Q$  is a right angle, the angle  $B$  is infinitesimal; the angle  $QSB$  differs from a right angle by an infinitesimal, and may be regarded as a right angle. Therefore, by Art. 172,

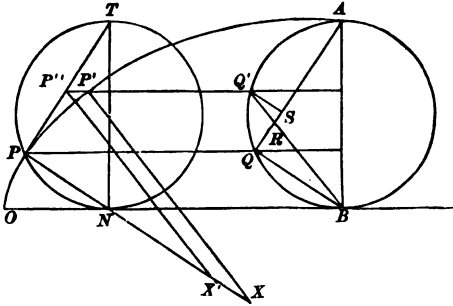
$$QS = \frac{1}{2} PP',$$



and consequently,  $QB = \frac{1}{2}PX$ ;

and the radius of curvature is twice  $PN$ , the portion of the normal within the generating circle.

*Strict Proof.*—The centre of curvature is the limiting position of  $X$ .



$PP'X'$  is similar to  $QRB$ , hence

$$\frac{PX'}{QB} = \frac{PP''}{QR} \text{ and } \lim \frac{PX'}{QB} = \lim \frac{PP''}{QR}. \quad (1)$$

Let  $PP'$  be the principal infinitesimal, then  $P'P''$  is of the second order; therefore, in (1),  $PX$  can be substituted for  $PX'$ .  $RQ'S$

is similar to  $BQR$ , hence  $\frac{RS}{QR} = \frac{Q'S}{QB}$ .

$QR$  and  $QS$  are infinitesimal,  $QB$  is finite,  $RS$  is of the second order, and  $QS$  can be substituted for  $QR$  in (1), and

$$\lim \frac{PX}{QB} = \lim \frac{PP''}{QS} :$$

but, by Art. 172,  $\lim \frac{PP''}{QS} = 2$ ;

$$\therefore \lim PX = 2QB = 2PN.$$

Q.E.D.

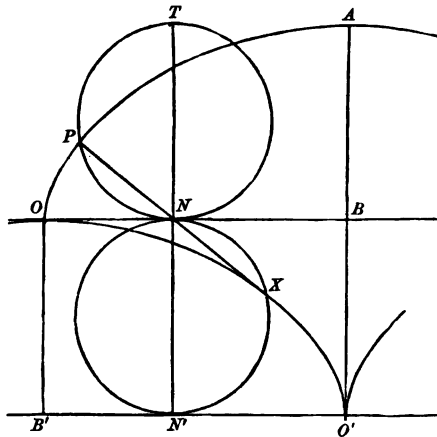
*Evolute of the Cycloid.*

174. Extend the diameter  $TN$  to  $N'$ , making

$$NN' = TN$$

and draw a circle on  $NN'$  as diameter. The centre of curvature  $X$ , corresponding to  $P$ , will lie on this circle, since

$$PX = 2PN.$$



Draw a tangent to the second circle at  $N'$ , drop a perpendicular from  $O$  to this tangent, and lay off  $B'O'$  equal to one-half the circumference of the generating circle.

The  $\text{arc } PN = ON = B'N'$ ;

$\therefore$  the  $\text{arc } N'X = N'O'$ ,

and  $X$  lies on a cycloid equal to the given cycloid, having its origin at  $O'$  and its highest point at  $O$ , and this must be the evolute required.

## EXAMPLES.

175. (1) From a point  $O$  situated in the plane of a plane curve, radii vectores are drawn to different points of the curve, and on each one a distance is laid off from  $O$  inversely proportional to the length of the radius vector; to determine the tangent at any point of the locus of the points thus obtained.

(2) Take any two curves in the same plane, and consider as corresponding points those at which the tangents are parallel; draw through a fixed point lines equal and parallel to those uniting corresponding points of the two curves. Prove that a tangent to the locus of the points thus obtained is parallel to the tangents at the corresponding points of the given curves, and that any arc of this curve is the sum or difference of those which correspond to it upon the given curves.

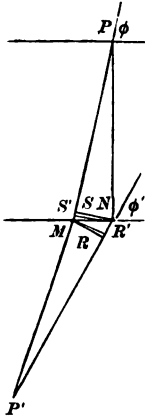
(3) From a point  $O$  radii vectores are drawn to a given curve, and each is extended beyond the curve by a constant length. Prove that the normal to the curve on which the extremities of the radii vectores lie, the normal at the corresponding point of the given curve, and the perpendicular through  $O$  to the radius vector of the point, have common intersection.

176. To show the power of this method of infinitesimals, we shall give an investigation into the nature of what is called the *Brachistochrone*, or *Curve of Quickest Descent*. The problem is a famous one, and the solution below is in effect the one given by James Bernouilli, and is very much simpler and more elementary than the usual analytical solution which requires the use of the *Calculus of Variations*.

The problem is, *given two points not in the same horizontal plane, nor in the same vertical line; to find the curve down which a particle moving without friction can slide in the least time from the upper point to the lower, the accelerating force being terrestrial gravitation.*

Let us first consider a simpler question: To find the path of quickest descent on the hypothesis that it is to consist of two

straight lines intersecting on a given horizontal plane, assuming that the particle moves down each line with a uniform velocity equal to the mean velocity with which it would actually descend the line in question. It is easily seen that both lines must lie in the vertical plane containing the two given points.



Let  $PNP'$  and  $PMP'$  be two paths of equal time from  $P$  to  $P'$ . Then the required path must lie between them. If we suppose them to approach, continuing still paths of equal time, the required path of quickest descent will be the limiting position of either of them. Let  $v$  be the mean velocity of a particle sliding from  $P$  to  $M$ ; then, by Art. 115,  $v$  will also be the mean velocity of a particle sliding from  $P$  to  $N$ .

Let  $v_1$  be the mean velocity of a particle sliding from  $M$  to  $P'$ , supposing that the particle started from  $M$  with the velocity actually acquired by sliding down  $PM$ ; then  $v_1$  is also the mean velocity of descent from  $N$  to  $P'$ , by Art. 115. As we are going to make the paths  $PMP'$  and  $PNP'$  approach indefinitely,  $MN$  is an infinitesimal. Draw the arcs  $NS'$  and  $MR'$  from  $P$  and  $P'$  as centres, and the perpendiculars  $NS$  and  $MR$ . On our hypothesis, the time of descent from  $P$  to  $S'$  equals time of descent from  $P$  to  $N$ , and time of descent from  $M$  to  $P'$  equals time of descent from  $R'$  to  $P'$ ; hence, as time  $PMP'$  equals time  $PNP'$ , the time of descent from  $S'$  to  $M$  equals time from  $N$  to  $R'$ ,

or 
$$\frac{S'M}{v} = \frac{NR'}{v_1},$$

whence 
$$\frac{S'M}{NR'} = \frac{v}{v_1},$$

and 
$$\text{limit } \frac{S'M}{NR'} = \text{limit } \frac{v}{v_1};$$

$$\text{limit } \frac{S'M}{NR'} = \text{limit } \frac{SM}{NR'}$$

$$\frac{SM}{NR} = \frac{\cos PMN}{\cos P'MN} = \frac{\cos \varphi}{\cos \varphi_1};$$

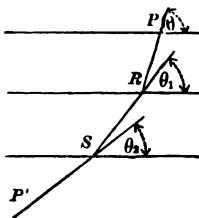
hence 
$$\lim_{\varphi \rightarrow 0} \frac{\cos \varphi}{\cos \varphi_1} = \lim_{\varphi \rightarrow 0} \frac{v}{v_1}.$$

Let the angles made with the horizontal by the two portions of the required path be  $\theta$  and  $\theta_1$ , and the mean velocities down the two portions of the required path be  $v$  and  $v_1$ . Then

$$\frac{\cos \theta}{\cos \theta_1} = \frac{v}{v_1} \quad \text{or} \quad \frac{\cos \theta}{v} = \frac{\cos \theta_1}{v_1}.$$

Let us now consider a path of quickest descent, consisting of *three rectilinear portions intersecting on given horizontal planes*, all the other conditions remaining as before. Let  $PRSP'$  be the required path. It is easily seen that  $PRS$  must be the path of quickest descent under the given conditions from  $P$  to  $S$ ; so that

$$\frac{\cos \theta}{v} = \frac{\cos \theta_1}{v_1}.$$



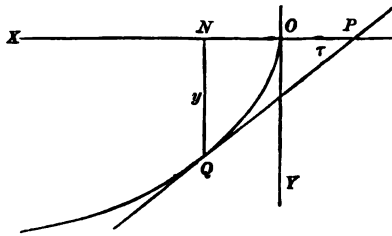
$RSP'$  must be the path of quickest descent from  $R$  to  $P'$  under the given conditions, so that

$$\frac{\cos \theta_1}{v_1} = \frac{\cos \theta_2}{v_2},$$

$v, v_1, v_2$  being mean velocities down  $PR, RS$ , and  $SP'$ , respectively.

Suppose now that the number of rectilinear portions of the broken line of descent is indefinitely increased, each portion will decrease indefinitely in length, and the path will approach a curve as its limiting form. The mean velocity down each portion of the polygonal path will approach as its limit the actual velocity at the corresponding point of the limiting curve; the angle made by each portion with the horizontal will approach the angle made by the curve with the horizontal: hence our limit-

ing curve, which is obviously the *required brachistochrone*, must be of such a nature that *the cosine of the angle it makes at each point with the horizontal shall be proportional to the velocity the particle will possess on reaching that point*. Let us take the

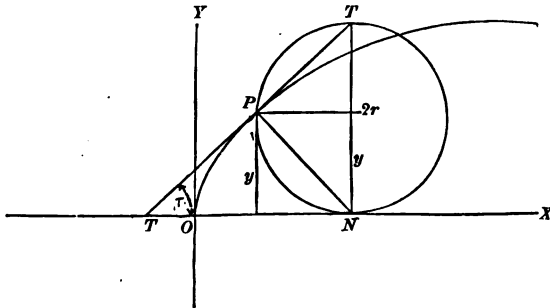


horizontal and vertical lines through the highest given point as our axes, and take the positive directions of  $X$  and  $Y$  as the usual negative directions. The velocity acquired by a particle sliding from  $O$  to  $Q$  is, by Art. 118, the velocity it would acquire falling from  $N$  to  $Q$ , that is,  $\sqrt{(2gy)}$ . We shall have then, as the defining property of the required curve,

$$\frac{\cos \tau}{\sqrt{(2gy)}} = K,$$

where  $K$  is a constant; or  $\cos \tau = Cy^{\frac{1}{2}}$ ,

$C$  being some constant. *The cycloid is a curve possessing this property, as is easily seen.*



We have  $\cos \tau = \sin PT' N = \frac{PN}{2r}$ ;

but, by geometry,  $PN = \sqrt{(2ry)}$ ;

hence  $\cos \tau = \frac{\sqrt{(2ry)}}{2r} = \sqrt{\left(\frac{y}{2r}\right)} = \frac{1}{\sqrt{(2r)}} y^{\frac{1}{2}}$ . Q. E. D.

*The converse, that every curve possessing the property*

$$\cos \tau = Cy^{\frac{1}{2}}$$

*is a cycloid, can be proved analytically by finding its equation, as follows:—*

Let the required equation be

$$y = fx.$$

We know that  $\tan \tau = D_x y$ ,

$$\cos \tau = \frac{1}{\sqrt{1 + (D_x y)^2}} = Cy^{\frac{1}{2}};$$

$$1 = C^2 y [1 + (D_x y)^2],$$

$$(D_x y)^2 = \frac{1 - C^2 y}{C^2 y}.$$

Call  $C = \frac{1}{\sqrt{(2a)}}$

and assume  $y = a - a \cos \theta$ .

$$D_x y = \frac{D_\theta y}{D_\theta x},$$

and we have

$$\frac{a^2 \sin^2 \theta}{(D_\theta x)^2} = \frac{1 - \frac{1 - \cos \theta}{2}}{\frac{1 - \cos \theta}{2}} = \frac{1 + \cos \theta}{1 - \cos \theta}.$$

$$(D_{\theta}x)^2 = \frac{a^2 \sin^2 \theta (1 - \cos \theta)}{1 + \cos \theta} = \frac{a^2 (1 - \cos^2 \theta) (1 - \cos \theta)}{1 + \cos \theta}$$

$$= a^2 (1 - \cos \theta)^2,$$

$$D_{\theta}x = a(1 - \cos \theta),$$

$$x = a \int_{\theta} (1 - \cos \theta) = a\theta - a \sin \theta + C,$$

when  $x = 0$ ,  $y = 0$ , and  $\theta = 0$ ;

hence  $C = 0$ ,

and our equations are 
$$\left. \begin{aligned} x &= a\theta - a \sin \theta \\ y &= a - a \cos \theta \end{aligned} \right\}$$

the familiar equations of a cycloid; and the *brachistochrone* is an *inverted cycloid with its cusp at the higher of the given points*.



CHAPTER XI.

DIFFERENTIALS.

177. A DERIVATIVE has, in effect, been defined as *the limit of the ratio of infinitesimal increments of function and variable*. Consequently, in getting a derivative, we can replace the increment of the function by any quantity differing from it by an infinitesimal of a higher order.

For example : in getting  $D_x x^2$ , we find

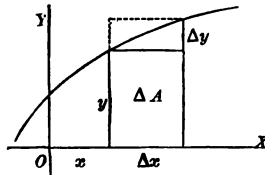
$$\Delta(x)^2 = x^2 + 2x\Delta x + (\Delta x)^2 - x^2 = 2x\Delta x + (\Delta x)^2.$$

$2x\Delta x$  differs from  $\Delta(x)^2$  by  $(\Delta x)^2$ , which is of the second order if we take  $\Delta x$  as the principal infinitesimal, and  $2x\Delta x$  may be substituted for  $\Delta(x)^2$  in getting  $D_x x^2$ , which then equals

$$\lim_{\Delta x \doteq 0} \left[ \frac{2x\Delta x}{\Delta x} \right] = \lim_{\Delta x \doteq 0} [2x] = 2x.$$

In our old problem of getting *the derivative of an area* we can use this same principle.

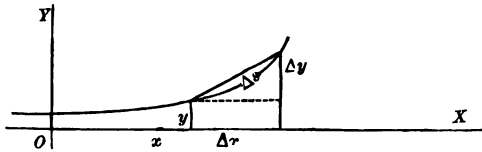
Take  $\Delta x$  as the principal infinitesimal, then  $\Delta A$  and  $\Delta y$  are of the first order, by Art. 149.  $\Delta A$  differs from the rectangle  $y\Delta x$



by less than the rectangle  $\Delta x\Delta y$ , which is of the second order, by Art. 147, Ex. ; and we have

$$D_x A = \lim_{\Delta x \doteq 0} \left[ \frac{\Delta A}{\Delta x} \right] = \lim_{\Delta x \doteq 0} \left[ \frac{y \Delta x}{\Delta x} \right] = y.$$

Take the problem of *the derivative of an arc*.



Let  $\Delta x$  be the principal infinitesimal; then  $\Delta s$  is of the first order.  $\Delta s$  differs from its chord  $\sqrt{(\Delta x)^2 + (\Delta y)^2}$  by an infinitesimal of a higher order, by Art. 165. Hence we have

$$D_x s = \lim_{\Delta x \doteq 0} \left[ \frac{\Delta s}{\Delta x} \right] = \lim_{\Delta x \doteq 0} \left[ \frac{\sqrt{(\Delta x)^2 + (\Delta y)^2}}{\Delta x} \right] = \lim_{\Delta x \doteq 0} \left[ \sqrt{1 + \left( \frac{\Delta y}{\Delta x} \right)^2} \right],$$

$$D_x s = \sqrt{1 + (D_x y)^2}.$$

178. In general,

$$D_x f x = \lim_{\Delta x \doteq 0} \left[ \frac{f(x + \Delta x) - f x}{\Delta x} \right];$$

therefore 
$$\frac{f(x + \Delta x) - f x}{\Delta x} = D_x f x + \epsilon,$$

where  $\epsilon$  is an infinitesimal, by Art. 7.

$$f(x + \Delta x) - f x = D_x f x \cdot \Delta x + \epsilon \Delta x.$$

But  $f(x + \Delta x) - f x$  is the actual increment of  $f x$ , caused by the increment  $\Delta x$  of  $x$ .  $\epsilon \Delta x$  is of as high an order as the second, if we take  $\Delta x$  as our principal infinitesimal; and we get the important result that  $D_x f x \cdot \Delta x$  differs from the actual increment of  $f x$  by an infinitesimal of a higher order, and may consequently be used in place of  $\Delta f x$  in any case where we have to deal with *the limit of the ratio or of the sum of such increments*. This quan-

tity,  $D_x f x \cdot \Delta x$  is called the *differential* of  $f x$ , and is denoted by  $df x$ ,  $d$  being a symbol for the word differential.

By the definition of differential,

$$dx = D_x x \Delta x = \Delta x.$$

This definition may now be restated as follows: *The differential of the independent variable is the actual increment of that variable. The differential of a function is the derivative of the function multiplied by the differential of the independent variable;*

or formulating,

$$dx = \Delta x,$$

$$dy = D_x y \cdot dx,$$

$y$  being a function of  $x$ .

It is to be noted that a *differential* is an *infinitesimal*, and that it differs from an *infinitesimal increment* by an *infinitesimal of a higher order*.

179. Since

$$dy = D_x y \cdot dx,$$

$$\frac{dy}{dx} = D_x y.$$

As, by Art. 73,

$$D_y x = \frac{1}{D_x y},$$

$$D_y x = \frac{dx}{dy}.$$

Consequently, if two quantities are so connected that either is a function of the other, the *derivative* of either with respect to the other is the *actual ratio of the differential of the first to the differential of the second*.

180. The differential notation has the advantage over the derivative notation, that it is apparently simpler, and that the formulas in which it is used are more symmetrical than those in which the other notation is employed; and although the differential is defined by the aid of the derivative, and the formulas

for the differentials of functions are obtained from the formulas for the derivatives of the same functions, *there is a practical advantage*, after the formulas have once been obtained, *in regarding the differential as the main thing, and looking at the derivative as the quotient of two differentials.*

181. By multiplying each of our *derivative* formulas by  $dx$ , we get the following set of formulas for the *differentials* of functions.

$$da = 0;$$

$$d(ax) = adx;$$

$$d(x^n) = nx^{n-1}dx;$$

$$d(\log x) = \frac{dx}{x};$$

$$da^x = a^x \log a \cdot dx;$$

$$de^x = e^x dx;$$

$$d \sin x = \cos x \cdot dx;$$

$$d \cos x = -\sin x \cdot dx;$$

$$d \tan x = \sec^2 x \cdot dx;$$

$$d \cot x = -\csc^2 x \cdot dx;$$

$$d \sec x = \sec x \tan x \cdot dx;$$

$$d \csc x = -\csc x \cot x \cdot dx;$$

$$d \operatorname{vers} x = \sin x \cdot dx;$$

$$d \sin^{-1} x = \frac{dx}{\sqrt{1-x^2}};$$

$$d \cos^{-1} x = -\frac{dx}{\sqrt{1-x^2}};$$

$$d \tan^{-1} x = \frac{dx}{1+x^2};$$

$$d \cot^{-1} x = -\frac{dx}{1+x^2};$$

$$d \sec^{-1} x = \frac{dx}{x\sqrt{x^2-1}};$$

$$d \csc^{-1} x = -\frac{dx}{x\sqrt{x^2-1}};$$

$$d \operatorname{vers}^{-1} x = \frac{dx}{\sqrt{(2x-x^2)}};$$

$$d(u+v+w+\dots) = du + dv + dw + \dots;$$

$$d(uv) = u dv + v du;$$

$$d\frac{u}{v} = \frac{v du - u dv}{v^2};$$

$$dA = y dx;$$

$$ds = \sqrt{(dx)^2 + (dy)^2}.$$

The formula  $D_x f y = D_y f y \cdot D_x y$

is no longer necessary, as it gives us

$$dfy = D_y f y \cdot dy = \frac{dfy}{dy} dy = dfy, \quad \text{an identity.}$$

#### EXAMPLES.

Work the examples in Chap. IV. by the differential formulas just given, remembering that

$$D_x y = \frac{dy}{dx}.$$

182. The differential notation is especially convenient in dealing with problems in *integration*, and leads to an entirely new way of looking at an integral.

Let  $y = x^2$ ,

and suppose that  $x$  changes from the value 1 to the value 5; to find the whole change produced in  $y$ . Let  $x$  change by successive increments, each of which may be called  $\Delta x$ ; then the whole change in  $y$  is the sum of the corresponding increments of  $y$ ,

which we will indicate by  $\sum_{x=1}^{x=5} \Delta y$ . The whole change in  $y$  is the actual sum of these infinitesimal increments; it is then the limit of their sum as  $\Delta x$  is indefinitely decreased, and each  $\Delta y$  decreases

correspondingly; that is, it is limit  $\sum_{x=1}^{x=5} \Delta y$ . But as we are dealing with the limit of a sum of infinitesimals where the limit is, from the nature of the case, finite, each term may be replaced by any infinitesimal differing from it by an infinitesimal of a higher order (Art. 162). Each  $\Delta y$  may then be replaced by the corresponding  $dy$ , and we get as the whole change produced in

the value of  $y$ ,  $\lim_{x=1}^{x=5} \sum d(x^2) = \lim_{x=1}^{x=5} \sum 2x dx$ .

As  $y = x^2$ ,

this change must be

$$[x^2]_{x=5} - [x^2]_{x=1} = 25 - 1 = 24,$$

and we get the limit of the sum of a set of differentials appearing as the difference between two values of the corresponding function.

183. Suppose that in any  $fx$  we change  $x$  from  $x_0$  to  $x_1$  by giving to  $x$  successive increments. The whole change,  $fx_1 - fx_0$ , must be the sum of the partial changes produced by the increments given to  $x$ ; or

$$fx_1 - fx_0 = \sum_{x=x_0}^{x=x_1} \Delta fx.$$

If the increments given to  $x$  be indefinitely decreased in magnitude while sufficiently increased in number to still fill the gap between  $x_0$  and  $x_1$ ,

$$fx_1 - fx_0 = \lim_{\Delta x \rightarrow 0} \sum_{x=x_0}^{x=x_1} \Delta fx = \lim_{x=x_0}^{x=x_1} \sum dfx,$$

by Arts. 162 and 178,

$$= \lim_{x=x_0}^{x=x_1} \sum D_x fx \cdot dx.$$

Call  $D_x fx = Fx,$

then  $fx = \int_x Fx$

and  $\lim_{x=x_0}^{x=x_1} \sum Fx \cdot dx = [\int_x Fx]_{x=x_1} - [\int_x Fx]_{x=x_0},$

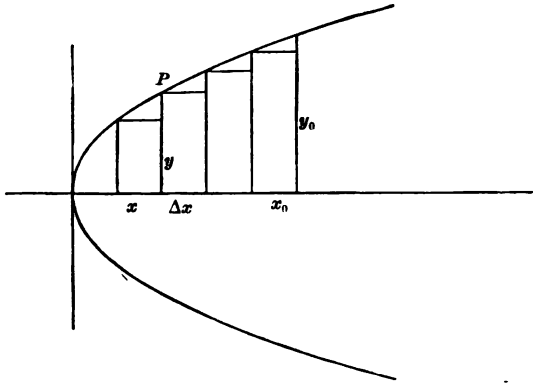
and the limit of the sum of a set of differentials is the difference between two values of an integral. Such a limit is called a *definite integral*, and is indicated by  $\int_{x_0}^{x_1}$ ,  $x_0$  and  $x_1$  being the values between which the sum is taken. As a *definite integral* is the difference between two values of an ordinary integral, it contains no arbitrary constant.

184. Regarding an integral as the limit of a sum gives a new meaning to some of our old formulas. Take, for example, the case of finding an area. Required the area bounded by the parabola  $y^2 = 4x$ , the axis of  $X$  and any ordinate  $y_0$ .

The area in question is the limit of the sum of rectangles of which  $y\Delta x$  may be taken as any one, and the sum is to be taken between the values 0 and  $x_0$  of  $x$ . We have then

$$A = \lim_{x=0}^{x=x_0} \sum y\Delta x = \lim_{x=0}^{x=x_0} \sum y dx;$$

hence  $A = \int_0^{x_0} y dx,$



$$y = 2x^{\frac{1}{2}}.$$

$$A = 2 \int_0^{x_0} x^{\frac{1}{2}} dx = \left[ \frac{2x^{\frac{3}{2}}}{\frac{3}{2}} \right]_{x=x_0} - \left[ \frac{2x^{\frac{3}{2}}}{\frac{3}{2}} \right]_{x=0} = \frac{4}{3} x_0^{\frac{3}{2}}.$$

185. We can now take up some new problems that could not be conveniently approached while the integral was treated merely as an inverse function, and we shall consider very briefly one connected with the subject of *centre of gravity*.

The centre of gravity of a body is a point so situated that the body will remain motionless in any position in which it may be placed, provided this point is supported.

Suppose a heavy plane curve, of which equal areas have equal weights, placed in a horizontal position. The tendency of any particle to produce rotation about a given axis is the weight of the particle multiplied by its distance from the axis. If the axis passes through the centre of gravity, the sum of all these tendencies must be zero, or the body would rotate.

Let us consider the centre of gravity of a segment of the parabola

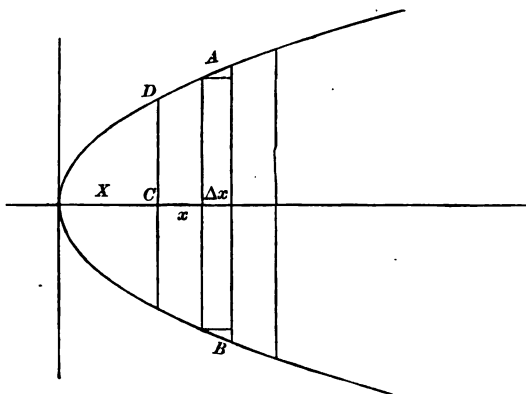
$$y^2 = 2mx,$$

cut off by any double ordinate.

Suppose the parabola horizontal, and let  $X$  and  $Y$  be the coördinates of the required centre of gravity. Inscribe in the parabola



small rectangles having their sides parallel to the axis of  $Y$ . The tendency of any one of these rectangles, as  $AB$ , to produce rotation about the ordinate through the centre of gravity, is its



weight, which may be represented by its area,  $2y\Delta x$ , multiplied by its distance from the ordinate in question. If the rectangle were so narrow that we could regard its weight as concentrated along its nearest side, this distance would be  $(x - X)$ ; and if we decrease  $\Delta x$  indefinitely, the required distance will approach this as its limit.

The tendency of this rectangle to produce rotation is then, roughly,  $2y(x - X)\Delta x$ ; and the smaller the value of  $\Delta x$ , the nearer this comes to being an *exact* expression. The tendency

of all the rectangles is  $\sum_{x=0}^{x=x_1} 2y(x - X)\Delta x$ . The smaller the rectangles,

the nearer their sum comes to the whole area of the curve, and we shall have as the tendency of the whole curve to rotate

about  $CD$  limit  $\sum_{x=0}^{x=x_1} 2y(x - X)\Delta x$  or  $\int_0^{x_1} 2y(x - X)dx$ ; but as  $CD$

passes through the centre of gravity, this must equal zero.

$$\int_0^{x_1} 2y(x - X)dx = 0.$$

$$y = \sqrt{(2mx)};$$

hence

$$2 \int_0^{x_1} \sqrt{2mx} (x - X) dx = 0,$$

$$\int_0^{x_1} x^{\frac{3}{2}} dx = X \int_0^{x_1} x^{\frac{1}{2}} dx,$$

$$\frac{2}{5} x_1^{\frac{5}{2}} = \frac{2}{3} X x_1^{\frac{3}{2}},$$

$$X = \frac{3}{5} x_1.$$

By similar reasoning, we find, as the tendency to rotate about a line through the centre of gravity and parallel to the axis of  $X$ ,  $\int_{-y_1}^{y_1} (x_1 - x)(y - Y) dy$ . This must equal zero.

$$\int_{-y_1}^{y_1} \left( x_1 - \frac{y^2}{2m} \right) (y - Y) dy = 0;$$

$$\int_{-y_1}^{y_1} \left( x_1 y - x_1 Y - \frac{y^3}{2m} + \frac{y^2 Y}{2m} \right) dy = 0;$$

$$\left[ x_1 \frac{y^2}{2} - x_1 Y y - \frac{y^4}{8m} + \frac{y^3}{6m} Y \right]_{y=-y_1}^{y=y_1} = 0;$$

$$\frac{x_1 y_1^2}{2} - x_1 Y y_1 - \frac{y_1^4}{8m} + \frac{y_1^3 Y}{6m} - \frac{x_1 y_1^2}{2} - x_1 Y y_1 + \frac{y_1^4}{8m} + \frac{y_1^3 Y}{6m} = 0;$$

$$\left( \frac{y_1^3}{3m} - 2x_1 y_1 \right) Y = 0;$$

$$Y = 0;$$

and  $(\frac{3}{5} x_1, 0)$  is the required centre of gravity.

### Differentials of Different Orders.

186. As the differential of a function is by definition a new function of the independent variable, we may deal with its differential.

$d(dy)$  is called the *second differential* of  $y$ , and is denoted by  $d^2 y$ ;  $d(d^2 y)$  is called the *third differential* of  $y$ , and is denoted

by  $d^3 y$ ; and so on.  $d(d^{n-1} y) = d^n y$ .

In dealing with differentials of a higher order than the first, it is customary to make the assumption that the *differential*, that is, the increment (Art. 178), of the *independent variable is constant*, since this assumption greatly simplifies the results, and is always allowable when the variable in question is really independent, as we can then suppose it to change by equal increments.

187. Making the assumption that the *differential of the independent variable is constant*, we have very simple relations between differentials and derivatives of different orders.

$$\text{By Art. 178,} \quad dy = D_x y \cdot dx,$$

$$\text{then } d^2y = d(dy) = D_x dy \cdot dx = D_x(D_x y \cdot dx)dx = D_x^2 y \cdot dx^2,$$

as  $dx$  is a constant. It can be shown in the same way that

$$d^3y = D_x^3 y \cdot dx^3,$$

$$\text{and that} \quad d^n y = D_x^n y \cdot dx^n.$$

It will be noticed that when  $dx$  is the principal infinitesimal,  $d^n y$  is an *infinitesimal of the  $n$ th order*.

From the results just obtained, we get,

$$D_x^2 y = \frac{d^2 y}{dx^2},$$

$$D_x^3 y = \frac{d^3 y}{dx^3},$$

$$D_x^n y = \frac{d^n y}{dx^n},$$

and the differential notation is generally used in place of the derivative, even in the case of derivatives of higher order than the first; but in using  $\frac{d^n y}{dx^n}$  for  $D_x^n y$ , it must be kept in mind that *the two expressions are equivalent only when  $x$  is the inde-*

*pendent variable.* If, for example,  $x$  were a function of a third variable, and were compelled to change in some particular way, we could no longer assume that  $dx$  was constant, and the differential expressions for the derivatives would be much more complicated.

188. Let us work out the second derivative of  $y$  *without any assumption* as to the value of  $dx$ .

$$D_x^2 y = \frac{dD_x y}{dx} = \frac{d \frac{dy}{dx}}{dx} = \frac{dx d^2 y - dy d^2 x}{dx^2},$$

since  $\frac{dy}{dx}$  is an ordinary fraction, and its differential can be found

by the formula 
$$d \frac{u}{v} = \frac{v du - u dv}{v^2}.$$

#### EXAMPLES.

(1) Show that

$$D_x^3 y = \frac{d^3 y dx^2 - dx dy d^2 x - 3 dx d^2 y dx + 3 dy d^2 x^2}{dx^5}.$$

(2) If  $y = \log z,$

find  $d^2 y,$   $d^3 y,$  and  $d^4 y,$  assuming that  $z$  is the independent variable, and again making no assumption concerning  $z$ . Compare your last results with those obtained by letting  $z = \sin x,$  and taking  $x$  as the independent variable.

189. In using differentials of higher order than the first, if the assumption is made that the differential of the independent variable is constant, it is better to indicate this by preserving the derivative form, even when using the differential notation. Take, for example, the formula for the radius of curvature of a

plane curve, 
$$\rho = - \frac{[1 + (D_x y)^2]^{\frac{3}{2}}}{D_x^2 y}.$$

We should write it 
$$\rho = - \frac{\left[ 1 + \left( \frac{dy}{dx} \right)^2 \right]^{\frac{3}{2}}}{\frac{d^2y}{dx^2}},$$

and not 
$$\rho = - \frac{(dx^2 + dy^2)^{\frac{3}{2}}}{dx \cdot d^2y},$$

if we wished to indicate that  $x$  was the independent variable. If we make no such assumption, we must substitute for  $D_x^2 y$  the value given in Art. 188, and we can then reduce the formula to

$$\rho = - \frac{[dx^2 + dy^2]^{\frac{3}{2}}}{dx d^2y - dy d^2x}.$$

190. The subject of *differentials of different orders* is closely connected with that of *finite differences or increments of different orders*.

If  $y$  is a function of  $x$ , and any fixed increment  $\Delta x$  is given to  $x$ , there will be produced a corresponding increment  $\Delta y$  in the value of  $y$ ;  $\Delta y$ , however, is not a fixed value, but varies with the value of  $x$  considered. For example, if

$$y = x^3,$$

$$\Delta y = 3x^2 \Delta x + 3x (\Delta x)^2 + (\Delta x)^3,$$

and is obviously a function of  $x$ , and therefore will be changed by changing  $x$ . The change produced in  $\Delta y$  by giving  $x$  another increment,  $\Delta x$ , is called the second increment of  $y$ , and is indicated by  $\Delta^2 y$ , and is a new function of  $x$ . The increment of the second increment is the third increment  $\Delta^3 y$ , and so on; and in

general 
$$\Delta (\Delta^{n-1} y) = \Delta^n y.$$

If 
$$y = x^3,$$

$$\Delta^2 y = 6x (\Delta x)^2 + 6 (\Delta x)^3.$$

The whole change produced in a function by giving several equal

increments to the variable can be neatly expressed in terms of successive increments.

$$y = fx,$$

$$f(x + \Delta x) = y + \Delta y.$$

Add  $\Delta x$  again,  $y$  becomes  $y + \Delta y$ ,  $\Delta y$  becomes  $\Delta y + \Delta^2 y$ , and we

have 
$$f(x + 2\Delta x) = y + 2\Delta y + \Delta^2 y.$$

Repeat the operation,  $y$  becomes  $y + \Delta y$ ,  $2\Delta y$  becomes  $2(\Delta y + \Delta^2 y)$ ,  $\Delta^2 y$  becomes  $\Delta^2 y + \Delta^3 y$ , and we have

$$f(x + 3\Delta x) = y + 3\Delta y + 3\Delta^2 y + \Delta^3 y.$$

In like manner,

$$f(x + 4\Delta x) = y + 4\Delta y + 6\Delta^2 y + 4\Delta^3 y + \Delta^4 y.$$

#### EXAMPLE.

Show that, if

$$\begin{aligned} f[x + (n-1)\Delta x] &= y + (n-1)\Delta y + \frac{(n-1)(n-2)}{2!} \Delta^2 y \\ &+ \frac{(n-1)(n-2)(n-3)}{3!} \Delta^3 y + \dots, \end{aligned}$$

$$f(x + n\Delta x) = y + n\Delta y + \frac{n(n-1)}{2!} \Delta^2 y + \frac{n(n-1)(n-2)}{3!} \Delta^3 y + \dots;$$

and that, consequently, the second formula always holds.



191. If  $\Delta x$  is infinitesimal, we have seen that  $\Delta y$  differs from  $dy$  by an infinitesimal of a higher order, and therefore may be used instead of  $\Delta y$  in all cases where we are dealing with the limit of a ratio or of a sum of such increments. The same relation holds between  $\Delta^2 y$  and  $d^2 y$ , and in general between  $\Delta^n y$  and  $d^n y$ , as we can prove by the aid of the following lemma.

## LEMMA.

192. *If a function of  $x$  contains besides  $x$  a letter  $a$ , which is independent of  $x$ , and becomes zero when  $a$  is zero, no matter what the value of  $x$ , its derivative with respect to  $x$  will be zero when  $a$  is zero.*

For, since  $a$ , being independent of  $x$ , is treated as a constant during the operation of differentiation, it can make no difference in the result whether we give it any particular value before or after that operation. But if we give  $a$  the value zero before we differentiate, our function by hypothesis is equal to zero, and is therefore constant, and its derivative is zero. Hence the lemma.

*It follows that, if the function is infinitesimal when  $a$  is infinitesimal, whatever the value of  $x$ , its derivative with respect to  $x$  will also be infinitesimal when  $a$  is infinitesimal.*

As an example, consider the function  $\log(1 + ax)$ , which equals zero when

$$a = 0.$$

$$\frac{d\log(1 + ax)}{dx} = \frac{a}{1 + ax} = 0 \text{ when } a = 0.$$

193. Let  $\Delta x$  be infinitesimal. Then, by Art. 178,

$$\frac{\Delta y}{\Delta x} = D_x y + \epsilon,$$

where  $\epsilon$  approaches zero as  $\Delta x \doteq 0$ . Increase  $x$  by  $\Delta x$ , and the increments of the two members of the equation will be equal.

$$\frac{\Delta^2 y}{\Delta x} = \Delta(D_x y) + \Delta \epsilon.$$

Divide by  $\Delta x$ :

$$\frac{\Delta^2 y}{(\Delta x)^2} = \frac{\Delta(D_x y)}{\Delta x} + \frac{\Delta \epsilon}{\Delta x},$$

$$\text{limit}_{\Delta x \doteq 0} \left[ \frac{\Delta^2 y}{(\Delta x)^2} \right] = D_x^2 y + \text{limit}_{\Delta x \doteq 0} \left[ \frac{\Delta \epsilon}{\Delta x} \right];$$

but, by Art. 192,  $\lim_{\Delta x \doteq 0} \left[ \frac{\Delta \varepsilon}{\Delta x} \right] = 0.$

Hence,  $\lim_{\Delta x \doteq 0} \left[ \frac{\Delta^2 y}{(\Delta x)^2} \right] = D_x^2 y = \frac{d^2 y}{dx^2},$  by Art. 187.

$$\frac{\Delta^2 y}{(\Delta x)^2} = \frac{d^2 y}{dx^2} + a,$$

where  $a$  is infinitesimal, by Art. 7.

But  $\Delta x = dx$  (Art. 178);

hence  $\frac{\Delta^2 y}{dx^2} = \frac{d^2 y}{dx^2} + a,$

$$\Delta^2 y = d^2 y + a dx^2.$$

$d^2 y$  is an infinitesimal of the second order, by Art. 187.  $a dx^2$  is of the third order; consequently,  $d^2 y$  may be used in place of  $\Delta^2 y$  in problems concerning the limit of a ratio or of a sum.

By similar reasoning, it can be shown that

$$\Delta^3 y = d^3 y + a dx^3;$$

and, in general, that  $\Delta^n y = d^n y + a dx^n,$

when  $\Delta x$  is infinitesimal.



## CHAPTER XII.

## FUNCTIONS OF MORE THAN ONE VARIABLE.

*Partial Derivatives.*

194. Up to this time we have considered only functions of a single variable, but a complete treatment of our subject requires us to study functions of two or more *independent* variables.

*Plane Analytic Geometry* has furnished us with numerous examples of functions of the former kind; *Analytic Geometry of Three Dimensions* introduces us to functions of the latter sort.

The equation of a surface contains three variables,  $x$ ,  $y$ , and  $z$ , and any one may be expressed as a function of the other two; and when this is done, the one so expressed may be changed by changing either of the others, or by changing them both, as they are entirely independent.

195. The derivative of a function of several variables obtained on the hypothesis that only one of them changes, is called a *partial derivative*; and, as all the variables except one are, for the time being, treated as constants, a *partial derivative* can be obtained by the rules for differentiating a function of one variable.

For example:  $D_x x^2 y = 2xy,$  if  $x$  alone changes;

$D_y x^2 y = x^2,$  if  $y$  alone changes.

$2xy$  is the partial derivative of  $x^2 y$  with respect to  $x$ , and  $x^2$  is the partial derivative of  $x^2 y$  with respect to  $y$ .

We shall represent partial derivatives by our old derivative notation, indicating ordinary or complete derivatives, when it is necessary to make any distinction between the two, by the ratio of two differentials.

196. If a function contains two variables, its partial derivative with respect to either will generally contain both variables, and may be differentiated again with respect to either of them.

Take  $x^2y^2$ .

$$D_x x^2 y^2 = 2xy^2;$$

$$D_x^2 x^2 y^2 = 2y^2;$$

$$D_y D_x x^2 y^2 = 4xy;$$

$$D_y x^2 y^2 = 2x^2 y;$$

$$D_x D_y x^2 y^2 = 4xy;$$

$$D_y^2 x^2 y^2 = 2x^2.$$

Take  $u = x \log y$ .

$$D_x u = \log y;$$

$$D_x^2 u = 0;$$

$$D_y D_x u = \frac{1}{y};$$

$$D_y^2 D_x u = -\frac{1}{y^2};$$

$$D_y u = \frac{x}{y};$$

$$D_x D_y u = \frac{1}{y};$$

$$D_y^2 u = -\frac{x}{y^2};$$

$$D_x D_y^2 u = -\frac{1}{y^2}.$$

197. In both these examples we see that  $D_x D_y u$  is the same as  $D_y D_x u$ , and in the second

$$D_y^2 D_x u = D_x D_y^2 u.$$

Let us see whether it is true in general that the order in which the differentiations are performed is immaterial.

Let  $u = f(x, y).$

To see if  $D_y D_x u = D_x D_y u.$

$$D_y u = \lim_{\Delta y \doteq 0} \left[ \frac{f(x, y + \Delta y) - f(x, y)}{\Delta y} \right] = \frac{f(x, y + \Delta y) - f(x, y)}{\Delta y} + \epsilon,$$

by Art. 7, where  $\epsilon$  is an infinitesimal and a function of  $x, y,$  and  $\Delta y.$

Similarly,  $D_x u = \frac{f(x + \Delta x, y) - f(x, y)}{\Delta x} + \epsilon',$

where  $\epsilon'$  is an infinitesimal and a function of  $x, y,$  and  $\Delta x.$

$D_x D_y u$  is equal to

$$\lim_{\Delta x \doteq 0} \left[ \frac{f(x + \Delta x, y + \Delta y) - f(x + \Delta x, y) - f(x, y + \Delta y) + f(x, y)}{\Delta x \Delta y} \right] + D_x \epsilon; \tag{1}$$

$D_y D_x u$  is equal to

$$\lim_{\Delta y \doteq 0} \left[ \frac{f(x + \Delta x, y + \Delta y) - f(x, y + \Delta y) - f(x + \Delta x, y) + f(x, y)}{\Delta x \Delta y} \right] + D_y \epsilon'. \tag{2}$$

The second expression for  $D_y u$  is absolutely true, whatever the value of  $\Delta y,$  and so is the expression for  $D_x D_y u.$  We may then suppose  $\Delta y$  to approach indefinitely near zero, and  $D_x D_y u$  will be equal to the limiting value approached by the second member of [1]. The limit of  $\epsilon$  as  $\Delta y$  approaches 0 is 0; therefore, by

Art. 192,  $\lim_{\Delta y \doteq 0} [D_x \epsilon] = 0,$

and  $D_x D_y u$  is equal to

$$\lim_{\Delta x \doteq 0} \left[ \frac{f(x + \Delta x, y + \Delta y) - f(x + \Delta x, y) - f(x, y + \Delta y) + f(x, y)}{\Delta x \Delta y} \right],$$

as both  $\Delta y$  and  $\Delta x$  approach 0.

By similar reasoning, it may be shown that  $D_y D_x u$  is this same limit, and hence that  $D_x D_y u = D_y D_x u$ .

By applying this theorem at each step, we may prove that, *in obtaining any successive partial derivatives, the order in which the differentiations occur is of no consequence.*

For example, let us show that

$$\begin{aligned} D_x^2 D_y u &= D_y D_x^2 u; \\ D_x^2 D_y u &= D_x(D_x D_y u) = D_x(D_y D_x u) = D_x D_y D_x u \\ &= D_y D_x D_x u = D_y D_x^2 u. \end{aligned}$$

✓

198. In a previous chapter, we saw that, while the *increment* of a function due to any increment of the variable is generally a very complex expression, the *differential* of the function, which differs from the true increment only by an infinitesimal of a higher order than the increment of function or variable when the latter is infinitesimal, is usually very much simpler, and yet can be used instead of the true increment in many important problems.

It is worth while to see if we cannot get a simple expression capable of replacing the infinitesimal increment of a function of two or more variables in similar problems.

A function of two independent variables may be changed by changing either of the variables alone, or by changing both.

Suppose we give to each variable an infinitesimal increment of the same order. Let  $u = f(x, y)$ .

Increase  $x$  by  $\Delta x$  and  $y$  by  $\Delta y$ ,

$$\Delta u = f(x + \Delta x, y + \Delta y) - f(x, y).$$

Add and subtract  $f(x, y + \Delta y)$ , and we get

$$\Delta u = f(x + \Delta x, y + \Delta y) - f(x, y + \Delta y) + f(x, y + \Delta y) - f(x, y).$$

$f(x, y + \Delta y) - f(x, y)$  is the increment of  $f(x, y)$  produced by changing  $y$  alone, and differs from  $D_y f(x, y) \Delta y$  by an infinitesimal of a higher order than  $\Delta y$ , by Art. 178. In like manner, we see that  $f(x + \Delta x, y + \Delta y) - f(x, y + \Delta y)$  differs from  $D_x f(x, y + \Delta y) \Delta x$  by an infinitesimal of a higher order than  $\Delta x$ .

$D_x f(x, y + \Delta y)$  is a new function of  $x$  and  $y$ , and any infinitesimal change in  $y$  will produce in it a change of the same order, by Art. 149.  $D_x f(x, y + \Delta y)$ , then, differs from  $D_x f(x, y)$  by an infinitesimal of the same order as  $\Delta y$ , and  $D_x f(x, y + \Delta y) \Delta x$  differs from  $D_x f(x, y) \Delta x$  by an infinitesimal of the second order.

$D_x f(x, y) \Delta x + D_y f(x, y) \Delta y$ , or, using the differential notation and remembering that  $x$  and  $y$  are both independent,  $D_x f(x, y) dx + D_y f(x, y) dy$  differs from the true increment of  $u$  by an infinitesimal of a higher order than  $dx$  and  $dy$ , and therefore may be used in place of  $\Delta u$  whenever the limit of a ratio or the limit of a sum is sought. This is called the complete differential of  $u$ , and is indicated by  $du$ ; hence, when

$$u = f(x, y),$$

$$du = D_x u dx + D_y u dy.$$

#### EXAMPLE.

Prove that, if  $u = f(x, y, z)$ ,

$$du = D_x u dx + D_y u dy + D_z u dz.$$

199. Partial derivatives may very often be used with profit in obtaining ordinary or complete derivatives. Suppose that

$$y = Fx \text{ and } z = F_1 x \text{ and } u = f(y, z);$$

$u$  is indirectly a function of  $x$ , and we can therefore speak of the complete derivative of  $u$  with respect to  $x$ , which we shall indicate by  $\frac{du}{dx}$ .

We wish to find the limit of the ratio  $\frac{dz}{dx}$ . In so doing, we can replace  $dx$  by  $dx$ , which equals  $D_x u \cdot dy + D_z u \cdot dz$ , since, as  $y$  and  $z$  are not independent variables,  $dy$  and  $dz$  differ from  $dy$  and  $dz$ :

$$\text{hence} \quad \frac{dz}{dx} = \lim_{dx \rightarrow 0} \left[ D_x u \frac{dy}{dx} + D_z u \frac{dz}{dx} \right].$$

$$\text{or} \quad \frac{dz}{dx} = D_x u \frac{dy}{dx} + D_z u \frac{dz}{dx}.$$

### EXAMPLE.

To find  $\frac{d \sin(y^2 - z)}{dx}$ , knowing that  $\begin{cases} y = \log x. \\ z = x^2. \end{cases}$

$$\text{Solution:} \quad D_x \sin(y^2 - z) = 2y \cos(y^2 - z).$$

$$D_z \sin(y^2 - z) = -\cos(y^2 - z).$$

$$\frac{dy}{dx} = \frac{1}{x},$$

$$\frac{dz}{dx} = 2x,$$

$$\begin{aligned} \frac{d \sin(y^2 - z)}{dx} &= \frac{2y \cos(y^2 - z)}{x} - 2x \cos(y^2 - z) \\ &= \frac{2(y - x^2) \cos(y^2 - z)}{x}. \end{aligned}$$

Confirm this result by expressing  $y$  and  $z$  in terms of  $x$  before differentiating.

200. If  $u = f(x, y)$  and  $y = Fx$ ,

the formula of the last article becomes

$$\frac{du}{dx} = D_x u + D_y u \frac{dy}{dx}.$$

EXAMPLES.

- (1)  $u = z^2 + y^2 + zy$   
 $z = \sin x$   
 $y = e^x$  } Find  $\frac{du}{dx}$ .  
*Ans.*  $\frac{du}{dx} = (3y^2 + z)e^x + (2z + y)\cos x$ .
- (2)  $u = \log \frac{x}{y}$   
 $y = \sin x$  } Find  $\frac{du}{dx}$ .  
*Ans.*  $\frac{du}{dx} = \frac{1}{x} - \cot x$ .
- (3)  $u = \tan^{-1}(xy)$   
 $y = e^x$  } Find  $\frac{du}{dx}$ .  
*Ans.*  $\frac{du}{dx} = \frac{e^x x + y}{1 + x^2 y^2}$ .
- (4)  $u = \sin^{-1}\left(\frac{z}{y}\right)$  when  $z$  and  $y$  are functions of  $x$ . Find  $\frac{du}{dx}$ .
- (5)  $u = \sqrt{\left(\frac{z^2 - y^2}{z^2 + y^2}\right)}$  when  $z$  and  $y$  are functions of  $x$ . Find  $\frac{du}{dx}$ .

201. Higher derivatives of a function of functions of  $x$  can be obtained by an easy application of the method suggested by the formulas above.

For example :  $u = f(y, z),$

$$y = Fx,$$

$$z = F_1 x,$$

required  $\frac{d^2 u}{dx^2}$ .

$$\begin{aligned} \frac{d^2 u}{dx^2} &= \frac{d\left(\frac{du}{dx}\right)}{dx} = \left[ D_y^2 u \frac{dy}{dx} + D_y D_z u \frac{dz}{dx} \right] \frac{dy}{dx} \\ &+ \left[ D_y D_z u \frac{dy}{dx} + D_z^2 u \frac{dz}{dx} \right] \frac{dz}{dx} + \left[ D_y u \frac{d^2 y}{dx^2} + D_z u \frac{d^2 z}{dx^2} \right] \\ &= D_y^2 u \left(\frac{dy}{dx}\right)^2 + 2D_y D_z u \frac{dy}{dx} \cdot \frac{dz}{dx} + D_z^2 u \left(\frac{dz}{dx}\right)^2 + D_y u \frac{d^2 y}{dx^2} + D_z u \frac{d^2 z}{dx^2} \end{aligned}$$

In obtaining this formula, since  $y$  and  $z$  are given functions of  $x$ ,  $\frac{dy}{dx}$  and  $\frac{dz}{dx}$  are also explicit functions of  $x$ , and are therefore treated as constants in obtaining the partial derivatives with respect to  $y$  and  $z$ ; but now  $\frac{du}{dx}$  is a function of  $(x, y$  and  $z)$ , hence we must take also its partial derivative with respect to  $x$ .

## EXAMPLE.

Given  $u = f(x, y)$ ,

$$y = Fx,$$

obtain  $\frac{d^2 u}{dx^2}$  and  $\frac{d^3 u}{dx^3}$ .

*Implicit Functions.*

202. If, instead of having  $y$  given in terms of  $x$ , we have an equation connecting  $x$  and  $y$ ,  $y$  is called an implicit function of  $x$ , and  $\frac{dy}{dx}$  can be readily found by the aid of Partial Derivatives.

Suppose  $f(x, y) = 0$ ,

to find  $\frac{dy}{dx}$ . Call  $f(x, y)$   $u$ .

Then  $u = 0$ ;

hence  $\frac{du}{dx}$  must also equal zero,

$$\frac{du}{dx} = D_x u + D_y u \frac{dy}{dx} = 0,$$

$$\frac{dy}{dx} = -\frac{D_x u}{D_y u}.$$

## EXAMPLES.

(1)  $ax^m - ye^{ny} = 0$ . Find  $\frac{dy}{dx}$ .



*Solution:*

$$D_x u = max^{m-1},$$

$$D_y u = -e^{ny} - ny e^{ny},$$

$$\frac{dy}{dx} = \frac{-D_x u}{D_y u} = \frac{max^{m-1}}{(1+ny)e^{ny}};$$

or, as

$$ax^m = ye^{ny},$$

$$max^{m-1} = \frac{mye^{ny}}{x}$$

and

$$\frac{dy}{dx} = \frac{my}{(1+ny)x}.$$

(2)  $\frac{x^2}{a^2} + \frac{y^2}{b^2} - 1 = 0$ . Find  $\frac{dy}{dx}$ . *Ans.*  $\frac{dy}{dx} = -\frac{b^2 x}{a^2 y}$

(3)  $x^y - y^x = 0$ . Find  $\frac{dy}{dx}$ . *Ans.*  $\frac{dy}{dx} = \frac{y^2 - xy \log y}{x^2 - xy \log x}$

(4)  $\sin(xy) - mx = 0$ . Find  $\frac{dy}{dx}$ .

(5) 
$$\left. \begin{aligned} u^2 + x^2 + y^2 + z^2 &= c^2 \\ \log(xy) + \frac{y}{x} &= a^2 \\ \log\left(\frac{z}{x}\right) + zx &= b^2 \end{aligned} \right\} \text{Find } \frac{du}{dx}.$$

*Ans.*  $\frac{du}{dx} = \frac{1}{u} \left( \frac{y^2(x-y)}{x(x+y)} + \frac{z^2(xz-1)}{x(xz+1)} - x \right).$

203. We can get  $\frac{d^2 y}{dx^2}$  by the aid of the formula of Art. 201,

remembering that  $\frac{d^2 u}{dx^2} = 0$ .

$$\frac{d^2 u}{dx^2} = D_x^2 u + 2D_x D_y u \frac{dy}{dx} + D_y^2 u \left( \frac{dy}{dx} \right)^2 + D_y u \frac{d^2 y}{dx^2} = 0,$$

$$\frac{dy}{dx} = -\frac{D_x u}{D_y u},$$

$$D_x^2 u - 2\left(D_x D_y u \frac{D_x u}{D_y u}\right) + D_y^2 u \left(\frac{D_x u}{D_y u}\right)^2 + D_y u \frac{d^2 y}{dx^2} = 0,$$

$$\frac{d^2 y}{dx^2} = -\frac{D_x^2 u (D_y u)^2 - 2D_x D_y u D_x u D_y u + D_y^2 u (D_x u)^2}{(D_y u)^3}.$$

#### EXAMPLES.

(1)  $y^2 + x^2 - 3axy = 0$ . Find  $\frac{d^2 y}{dx^2}$ .    Ans.  $\frac{d^2 y}{dx^2} = -\frac{2a^2 xy}{(y^2 - ax)^3}$ .

(2)  $x^4 + 2ax^2 y - ay^2 = 0$ . Find  $\frac{dy}{dx}$  and  $\frac{d^2 y}{dx^2}$ .

## CHAPTER XIII.

## CHANGE OF VARIABLE.

204. If we use the differential notation, we have seen that there is no need of distinguishing carefully between function and independent variable, a single formula always giving a relation between the two differentials by which either can be expressed in terms of the other. This, however, is the case only when we are dealing with differentials of the first order. A differential of the second order or of a higher order has been defined by the aid of a derivative, which always implies the distinction between function and variable, and on the hypothesis of an important difference in the natures of the increments of function and variable; namely, that the increment of the independent variable is a constant magnitude, and that, consequently, its derivative and differential are zero.

If, in any function involving differentials of a higher order than the first, we have occasion to change the independent variable, we can no longer assume that the differential of the old independent variable is constant, but must go back and replace all the differentials of higher order than the first by values obtained on the supposition that all the differentials are variable, before we attempt the introduction of the new variable, *vide* Arts. 187 and 188.

205. In any particular example in which it is necessary to change the variable, the method just described can be easily applied.

Take the differential equation,

$$x^2 \frac{d^2 u}{dx^2} + x \frac{du}{dx} + u = 0,$$

where  $x$  is the independent variable, and introduce  $y$  in place of

$x$ . Given  $y = \log x$ .

Our  $d^2u$  here is the second differential of  $u$  taken on the assumption that  $x$  is the independent variable, and this can be indicated by writing it  $d_x^2u$ , and we have

$$d_x^2u = D_x^2udx^2 = \frac{dx d^2u - du d^2x}{dx}, \quad \text{by Art. 188.}$$

$$dy = \frac{dx}{x},$$

$$dx = xdy,$$

$$d^2x = d(xdy) = xd^2y + dx dy;$$

but  $d^2y = 0$ ,

as  $y$  is to be the independent variable,

hence  $d^2x = dx dy$ ,

and  $d_x^2u = \frac{xdy d^2u - x dudy^2}{xdy} = d^2u - dudy;$

$$x^2 \frac{d^2u}{dx^2} = \frac{d^2u}{dy^2} - \frac{du}{dy},$$

$$x \frac{du}{dx} = \frac{du}{dy};$$

hence we have  $\frac{d^2u}{dy^2} + u = 0$ .

EXAMPLES.

(1) Change the variable from  $x$  to  $t$  in

$$\frac{d^2y}{dx^2} - \frac{x}{1-x^2} \frac{dy}{dx} + \frac{y}{1-x^2} = 0.$$

Given

$$x = \cos t.$$

$$\text{Ans. } \frac{d^2y}{dt^2} + y = 0.$$

(2) Change the variable from  $x$  to  $\theta$  in the equation,

$$\frac{d^2y}{dx^2} + \frac{2x}{1+x^2} \frac{dy}{dx} + \frac{y}{(1+x^2)^2} = 0.$$

Given

$$\theta = \tan^{-1} x.$$

$$\text{Ans. } \frac{d^2y}{d\theta^2} + y = 0.$$

(3) Change from  $x$  to  $t$  in

$$(1-x^2) \frac{d^2y}{dx^2} - x \frac{dy}{dx} = 0.$$

Given

$$x = \cos t.$$

$$\text{Ans. } \frac{d^2y}{dt^2} = 0.$$

206. It is often desirable to change both variables simultaneously, and the principles already explained and illustrated apply perfectly to this case. As an example, let us see what our old expression for the radius of curvature of a plane curve becomes when we change from rectangular to polar coördinates.

Here we have

$$\left. \begin{aligned} x &= r \cos \varphi \\ y &= r \sin \varphi \end{aligned} \right\}$$

and we shall regard  $\varphi$  as the new independent variable. We know that, if  $\rho$  is the radius of curvature,

$$\rho = -\frac{[1 + (D_x y)^2]^{\frac{3}{2}}}{D_x^2 y}.$$

We have seen, in Art. 189, that this may be written

$$\rho = -\frac{(dx^2 + dy^2)^{\frac{3}{2}}}{dx d_x^2 y};$$

or, better still, 
$$\rho = -\frac{(dx^2 + dy^2)^{\frac{3}{2}}}{dx d^2 y - dy d^2 x}.$$

$$dx = -r \sin \varphi d\varphi + \cos \varphi dr,$$

$$dy = r \cos \varphi d\varphi + \sin \varphi dr.$$

Since  $d\varphi$  is constant,

$$d^2 x = -r \cos \varphi d\varphi^2 - 2 \sin \varphi dr d\varphi + \cos \varphi d^2 r,$$

$$d^2 y = -r \sin \varphi d\varphi^2 + 2 \cos \varphi dr d\varphi + \sin \varphi d^2 r,$$

$$(dx^2 + dy^2)^{\frac{3}{2}} = (r^2 d\varphi^2 + dr^2)^{\frac{3}{2}},$$

$$dx d^2 y - dy d^2 x = r^2 d\varphi^3 - r d\varphi d^2 r + 2 dr^2 d\varphi.$$

$$\rho = -\frac{(r^2 d\varphi^2 + dr^2)^{\frac{3}{2}}}{r^2 d\varphi^3 - r d\varphi d^2 r + 2 dr^2 d\varphi};$$

divide numerator and denominator by  $d\varphi^3$ ,

$$\rho = \frac{-\left[r^2 + \left(\frac{dr}{d\varphi}\right)^2\right]^{\frac{3}{2}}}{r^2 - r \frac{d^2 r}{d\varphi^2} + 2 \left(\frac{dr}{d\varphi}\right)^2}.$$

#### EXAMPLE.

Find the radius of curvature of the circle  $r = \cos \varphi$ .

Ans.  $\rho = \frac{1}{2}$ .

✓

207. A very simple example of change of variable is the following. Obtain the value of  $\tan \tau$  when polar coördinates are used.

$$\tan \tau = \frac{dy}{dx}$$

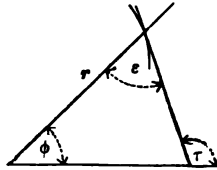
$$x = r \cos \varphi,$$

$$y = r \sin \varphi,$$

$$\frac{dy}{dx} = \frac{r \cos \varphi d\varphi + \sin \varphi dr}{-r \sin \varphi d\varphi + \cos \varphi dr}.$$

A much simpler expression can be obtained for the angle made by the tangent with the radius vector, which we shall call  $\epsilon$ .

$$\epsilon = \tau - \varphi.$$



$$\tan \epsilon = \tan(\tau - \varphi) = \frac{\tan \tau - \tan \varphi}{1 + \tan \tau \tan \varphi},$$

$$\tan \tau - \tan \varphi = \frac{r \sec \varphi d\varphi}{-r \sin \varphi d\varphi + \cos \varphi dr},$$

$$1 + \tan \tau \tan \varphi = \frac{\sec \varphi dr}{-r \sin \varphi d\varphi + \cos \varphi dr}.$$

$$\tan \epsilon = \frac{rd\varphi}{dr}.$$

EXAMPLES.

(1) Obtain this value for  $\tan \epsilon$  from a figure by the aid of infinitesimals.

(2) If

$$\left. \begin{aligned} x &= r \cos \varphi \\ y &= r \sin \varphi \end{aligned} \right\}$$

show that

$$\frac{x + y \frac{dy}{dx}}{x \frac{dy}{dx} - y} = \frac{dr}{r d\varphi},$$

and that

$$ds^2 = dx^2 + dy^2$$

becomes

$$ds^2 = dr^2 + r^2 d\varphi^2.$$

Prove this last result from a figure.

(3) If

$$\left. \begin{aligned} x &= a(1 - \cos t) \\ y &= a(nt + \sin t) \end{aligned} \right\}$$

express  $\frac{d^2y}{dx^2}$  in terms of  $t$ .

$$\text{Ans. } \frac{d^2y}{dx^2} = -\frac{n \cos t + 1}{a \sin^3 t}.$$

(4) Given

$$\left. \begin{aligned} x &= a \cos \varphi \\ y &= b \sin \varphi \end{aligned} \right\}$$

express  $\frac{[1 + (\frac{dy}{dx})^2]^{\frac{3}{2}}}{\frac{d^2y}{dx^2}}$  in terms of  $\varphi$ .

$$\text{Ans. } \frac{(a^2 \sin^2 \varphi + b^2 \cos^2 \varphi)^{\frac{3}{2}}}{ab}.$$

208. The subject of change of variable can be easily treated, by the aid of the principles established in Art. 88, without introducing the idea of differentials.

$$D_x y = \frac{D_x y}{D_x x},$$

$$D_x^2 y = D_x D_x y = \frac{D_x D_x y}{D_x x} = \frac{D_x \left( \frac{D_x y}{D_x x} \right)}{D_x x}.$$



$$D_x \left( \frac{D_x y}{D_x x} \right) = \frac{D_x x D_x^2 y - D_x y D_x^2 x}{(D_x x)^2},$$

$$D_x^2 y = \frac{D_x x D_x^2 y - D_x y D_x^2 x}{(D_x x)^3}.$$

If  $x$  and  $y$  are given in terms of  $z$ , we can calculate the values of  $D_x x$ ,  $D_x y$ ,  $D_x^2 x$ , and  $D_x^2 y$ , and substitute them in these formulas. Take Example (3), Art. 205.

$$x = \cos t,$$

$$(1 - x^2) D_x^2 y - x D_x y = 0,$$

$$D_x y = \frac{D_t y}{D_t x},$$

$$D_x^2 y = \frac{D_t x D_t^2 y - D_t y D_t^2 x}{(D_t x)^3},$$

$$D_t x = -\sin t,$$

$$D_t^2 x = -\cos t,$$

$$D_x y = -\frac{D_t y}{\sin t},$$

$$D_x^2 y = \frac{-\sin t D_t^2 y + \cos t D_t y}{-\sin^3 t},$$

$$1 - x^2 = \sin^2 t,$$

$$\sin^2 t \frac{-\sin t D_t^2 y + \cos t D_t y}{-\sin^3 t} + \frac{\cos t D_t y}{\sin t} = 0,$$

$$D_t^2 y = 0.$$

209. Suppose we have a function of two independent variables, and its partial derivatives with respect to them, and wish

to introduce, in place of our old variables, two others connected with them by given relations.

For example: let  $z$  be a function of  $x$  and  $y$ , and let it be required to introduce, instead of  $x$  and  $y$ ,  $u$  and  $v$ , which are connected with  $x$  and  $y$  by given equations. If the equations can be readily solved so as to express  $u$  in terms of  $x$  and  $y$ , and  $v$  in terms of  $x$  and  $y$ , we may proceed as follows:—

After the substitution,  $z$  is to be an explicit function of  $u$  and  $v$ . Suppose the substitution performed. As  $u$  and  $v$  are functions of  $x$ ,  $z$  is indirectly a function of  $x$ . To get  $D_x u$ , we suppose  $y$  constant, so that  $x$  is for the time being the only independent variable, and we can get  $D_x z$ , by Art. 199, which gives us

$$D_x z = D_u z D_x u + D_v z D_x v$$

where all the derivatives are partial derivatives. In the same

$$\text{way,} \quad D_y z = D_u z D_y u + D_v z D_y v.$$

$D_x u$ ,  $D_x v$ ,  $D_y u$ , and  $D_y v$  are found from the values of  $u$  and  $v$  mentioned above, and are generally functions of  $x$  and  $y$ , and  $D_x z$  and  $D_y z$  are at first obtained in terms of  $u$ ,  $v$ ,  $x$ , and  $y$ .  $x$  and  $y$  must be replaced by  $u$  and  $v$  by the aid of the given equations, and  $D_x z$  and  $D_y z$  are then in terms of  $u$  and  $v$  alone. By extending the process, we can get  $D_x^2 z$ ,  $D_x D_y z$ ,  $D_y^2 z$ , &c., in terms of  $u$  and  $v$ .

For example: introduce  $u$  and  $v$  in place of  $x$  and  $y$  in the equation

$$D_x^2 z = D_y^2 z.$$

Given

$$\left. \begin{aligned} u &= x + y \\ v &= x - y \end{aligned} \right\}$$

$$D_x u = 1,$$

$$D_x v = 1,$$

$$D_y u = 1,$$

$$D_y v = -1,$$

$$D_x z = D_u z + D_v z,$$

$$D_y z = D_u z - D_v z,$$

$$D_x^2 z = D_u^2 z + 2D_u D_v z + D_v^2 z,$$

$$D_y^2 z = D_u^2 z - 2D_u D_v z + D_v^2 z,$$

$$D_x^2 z + 2D_u D_v z + D_y^2 z = D_u^2 z - 2D_u D_v z + D_v^2 z,$$

$$4D_u D_v z = 0.$$

$$D_u D_v z = 0, \quad \text{the required equation.}$$

210. If it is more convenient to express  $x$  and  $y$  in terms of  $u$  and  $v$  at the start, we can proceed thus:  $z$  is explicitly a function of  $x$  and  $y$ , and if we regard  $v$  as constant for the time being,  $z$  is indirectly a function of the single variable  $u$ . Hence,

$$D_u z = D_x z D_u x + D_y z D_u y;$$

In like manner,  $D_v z = D_x z D_v x + D_y z D_v y$ .

$D_u x$ ,  $D_u y$ ,  $D_v x$ , and  $D_v y$  are found in terms of  $u$  and  $v$ , and then by elimination between the equations, we get  $D_x z$  and  $D_y z$  in terms of  $u$  and  $v$ .

#### EXAMPLES.

$$(1) \text{ Given } \left. \begin{aligned} x &= r \cos \varphi \\ y &= r \sin \varphi \end{aligned} \right\}$$

$$z = f(x, y),$$

find  $D_x z$  and  $D_y z$  in terms of  $r$  and  $\varphi$ .

$$\text{Solution: } D_r x = \cos \varphi,$$

$$D_\varphi x = -r \sin \varphi,$$

$$D_r y = \sin \varphi,$$

$$D_\phi y = r \cos \phi,$$

$$D_r z = D_x z \cos \phi + D_y z \sin \phi,$$

$$D_\phi z = -D_x z r \sin \phi + D_y z r \cos \phi.$$

Eliminate ;

$$r \cos \phi D_r z = r \cos^2 \phi D_x z + r \sin \phi \cos \phi D_y z,$$

$$\sin \phi D_\phi z = -r \sin^2 \phi D_x z + r \sin \phi \cos \phi D_y z ;$$

$$D_x z = \frac{1}{r} (r \cos \phi D_r z - \sin \phi D_\phi z)$$

$$D_y z = \frac{1}{r} (r \sin \phi D_r z + \cos \phi D_\phi z).$$

(2) Solve this same example by the method of Art. 209, using

the relations

$$\left. \begin{aligned} r^2 &= x^2 + y^2 \\ \tan \phi &= \frac{y}{x} \end{aligned} \right\}$$

211. If it is not convenient to solve the given equations between  $x$ ,  $y$ ,  $u$ , and  $v$ , we can use the general method of either of the preceding articles, obtaining our  $D_x u$ ,  $D_x v$ ,  $D_y u$ , and  $D_y v$ , or our  $D_u x$ ,  $D_u y$ ,  $D_v x$ ,  $D_v y$ , as follows : We have given

$$F_1(x, y, u, v) = 0 \text{ and } F_2(x, y, u, v) = 0.$$

Suppose  $y$  constant, then  $u$  and  $v$  will be functions of  $x$  ; and,

$$\left. \begin{aligned} \text{by Art. 200, } D_x F_1 + D_u F_1 D_x u + D_v F_1 D_x v &= 0 \\ D_x F_2 + D_u F_2 D_x u + D_v F_2 D_x v &= 0 \end{aligned} \right\}$$

From these equations we can obtain  $D_x u$  and  $D_x v$ , and from two equations formed in the same way we can get  $D_y u$  and  $D_y v$  ; and a like process would give us  $D_u x$ ,  $D_u y$ ,  $D_v x$ ,  $D_v y$ .

EXAMPLES.

(1) If  $V$  is a function of  $v$ , and

$$v^2 = x^2 + y^2,$$

show that  $D_x^2 V + D_y^2 V = \frac{d^2 V}{dv^2} + \frac{1}{v} \frac{dV}{dv}$ .

(2) If  $V$  is a function of  $v$ , and

$$v^2 = x^2 + y^2 + z^2,$$

show that  $D_x^2 V + D_y^2 V + D_z^2 V = \frac{d^2 V}{dv^2} + \frac{2dV}{v dv}$ .

(3) If  $x = ae^\theta \cos \varphi$  and  $y = ae^\theta \sin \varphi$ ,

show that  $y^2 D_x^2 u - 2xy D_x D_y u + x^2 D_y^2 u = D_\theta^2 u + D_\theta u$ .

(4) Given  $e^x + e^y = s$ ,

$$e^{-x} + e^{-y} = t,$$

express  $D_x^2 u + 2D_x D_y u + D_y^2 u$  in terms of  $s$  and  $t$ .

*Ans.*  $s^2 D_s^2 u - 2st D_s D_t u + t^2 D_t^2 u + s D_s u + t D_t u$ .

## CHAPTER XIV.

## TANGENT LINES AND PLANES.

✓ 212. It is shown in Analytic Geometry of Three Dimensions, that any equation  $F(x,y,z) = 0$  represents a surface, and that two such equations,

$$F_1(x,y,z) = 0,$$

$$F_2(x,y,z) = 0,$$

regarded as simultaneous equations, represent a curve in space, the intersection of the surfaces which the equations separately represent.

By eliminating  $z$  between these two equations, we can express  $y$  as an explicit function of  $x$ ; and by eliminating  $y$ , we can express  $z$  in terms of  $x$ : consequently, the equations of any curve in space may be written in the form,

$$\left. \begin{aligned} y &= fx \\ z &= Fx \end{aligned} \right\}$$

213. Let it be required to find the direction of the tangent line drawn at any given point  $(x_0, y_0, z_0)$  of the curve

$$\left. \begin{aligned} y &= fx \\ z &= Fx \end{aligned} \right\}$$

Let  $(x_0 + \Delta x, y_0 + \Delta y, z_0 + \Delta z)$  be any second point on the given curve. The equations of the line joining the two points are

$$\frac{x - x_0}{\Delta x} = \frac{y - y_0}{\Delta y} = \frac{z - z_0}{\Delta z},$$

by Analytic Geometry ; or

$$\left. \begin{aligned} \frac{y - y_0}{x - x_0} &= \frac{\Delta y}{\Delta x} \\ \frac{z - z_0}{x - x_0} &= \frac{\Delta z}{\Delta x} \end{aligned} \right\}$$

Let  $\Delta x$  approach zero, and the secant line approaches the required tangent as its limit, and this will have for its equations,

$$\left. \begin{aligned} \frac{y - y_0}{x - x_0} &= \left( \frac{dy}{dx} \right)_{x=x_0} \\ \frac{z - z_0}{x - x_0} &= \left( \frac{dz}{dx} \right)_{x=x_0} \end{aligned} \right\}$$

or, writing them in a more symmetrical form,

$$\frac{x - x_0}{1} = \frac{y - y_0}{\frac{dy_0}{dx_0}} = \frac{z - z_0}{\frac{dz_0}{dx_0}},$$

where, by  $\frac{dy_0}{dx_0}$ , we mean the value  $\frac{dy}{dx}$  has when  $x = x_0$ .

A plane through the given point perpendicular to the tangent line is called the *normal* plane at the point in question. Prove that its equation is

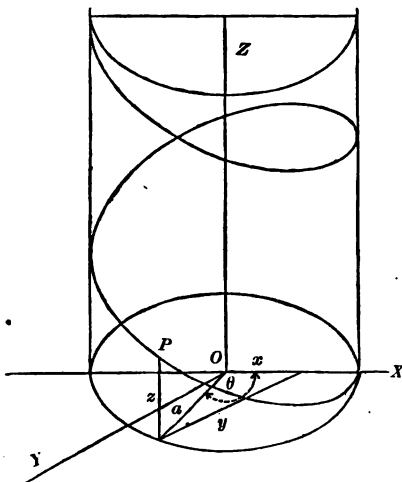
$$x - x_0 + (y - y_0) \frac{dy_0}{dx_0} + (z - z_0) \frac{dz_0}{dx_0} = 0.$$

EXAMPLE.

214. The helix is a curve traced on the surface of a cylinder of revolution by a point revolving about the axis of the cylinder

at a uniform rate, and at the same time advancing with a uniform velocity in the direction of the axis.

We can easily express its equations by the aid of an auxiliary



angle, the angle through which the point has rotated. Calling this angle  $\theta$  and the radius of the circle  $a$ , we readily see that

$$x = a \cos \theta,$$

$$y = a \sin \theta.$$

From the nature of the helix,  $z$  must be proportional to the angle  $\theta$ ; hence

$$\frac{z}{\theta} = k, \quad \text{a constant,}$$

and

$$z = k\theta.$$

The required equations are then

$$\left. \begin{aligned} x &= a \cos \theta \\ y &= a \sin \theta \\ z &= k\theta \end{aligned} \right\}$$



To find the tangent line and normal plane at  $(x_0, y_0, z_0)$ ,

$$dy = a \cos \theta d\theta,$$

$$dx = -a \sin \theta d\theta,$$

$$\frac{dy}{dx} = -\cot \theta = -\frac{x}{y},$$

$$dz = kd\theta,$$

$$\frac{dz}{dx} = -\frac{k}{a \sin \theta} = -\frac{k}{y}.$$

The equations of the tangent are

$$\frac{x - x_0}{1} = \frac{y - y_0}{-\frac{x_0}{y_0}} = \frac{z - z_0}{-\frac{k}{y_0}}$$

or 
$$\frac{x - x_0}{-y_0} = \frac{y - y_0}{x_0} = \frac{z - z_0}{k}. \quad [1]$$

The normal plane is

$$y_0(x - x_0) - x_0(y - y_0) - k(z - z_0) = 0. \quad [2]$$

The direction cosines of line [1] are, by Analytic Geometry,

$$\cos \alpha = \frac{-y_0}{\sqrt{(x_0^2 + y_0^2 + k^2)}}$$

or 
$$\cos \alpha = \frac{-y_0}{\sqrt{(a^2 + k^2)}},$$

$$\cos \beta = \frac{x_0}{\sqrt{(a^2 + k^2)}},$$

$$\cos \gamma = \frac{k}{\sqrt{(a^2 + k^2)}},$$

$\cos \gamma$  is, then, not dependent on the position of the point  $P$ ; therefore the helix has everywhere the same inclination to the axis of the cylinder; or, in other words, it crosses all the elements of the cylindrical surface at the same angle. If, then, this surface is unrolled into a plane surface, the helix will develop into a straight line.

215. The equations of the tangent line to the curve

$$f(x, y, z) = 0,$$

$$F(x, y, z) = 0,$$

can be obtained in a very convenient form if we use partial derivatives. We have, by Art. 199,

$$\left. \begin{aligned} \frac{df}{dx} &= D_x f + D_y f \frac{dy}{dx} + D_z f \frac{dz}{dx} = 0 \\ \frac{dF}{dx} &= D_x F + D_y F \frac{dy}{dx} + D_z F \frac{dz}{dx} = 0 \end{aligned} \right\} \quad (1)$$

From these equations we can obtain the values of  $\frac{dy}{dx}$  and  $\frac{dz}{dx}$ . Substituting these in the equations of Art. 213, and reducing, we get

$$\left. \begin{aligned} (x - x_0)D_{x_0} f + (y - y_0)D_{y_0} f + (z - z_0)D_{z_0} f &= 0 \\ (x - x_0)D_{x_0} F + (y - y_0)D_{y_0} F + (z - z_0)D_{z_0} F &= 0 \end{aligned} \right\}$$

as the equations of the required tangent. The same result may be obtained much more easily by substituting in (1) the values of  $\frac{dy}{dx}$  and  $\frac{dz}{dx}$  given by the equations in Art. 213.

EXAMPLES.

Given 
$$\left. \begin{aligned} x^2 + y^2 - ax &= 0 \\ ax + z^2 - a^2 &= 0 \end{aligned} \right\}$$

equations of a curve, find the tangent at  $(x_0, y_0, z_0)$ .

*Ans.* 
$$\left. \begin{aligned} x_0x + y_0y + z_0z &= a^2 \\ a(x - x_0) + 2(z - z_0)z_0 &= 0 \end{aligned} \right\}$$

) Given the circle

$$\left. \begin{aligned} x^2 + y^2 + z^2 &= a^2 \\ x + z &= a \end{aligned} \right\}$$

the tangent at  $(x_0, y_0, z_0)$ .

*Ans.* 
$$\left. \begin{aligned} x_0x + y_0y + z_0z &= a^2 \\ x + z &= a \end{aligned} \right\}$$

3. The osculating plane at a given point of a curve in space limiting position approached by a plane through the point and two other points of the curve as the latter approach indefinitely near the given point.

$(x_0, y_0, z_0)$  is the given point, and we regard  $x$  as our independent variable, we can represent two other points of the curve (190) by

$$(x_0 + \Delta x, y_0 + \Delta y, z_0 + \Delta z)$$

and 
$$(x_0 + 2\Delta x, y_0 + 2\Delta y + \Delta^2 y, z_0 + 2\Delta z + \Delta^2 z).$$

Forming the equation of the plane through these three points, dividing by  $\Delta x^2$ , and taking the limiting values as  $\Delta x$  approaches zero, we shall get as the osculating plane,

$$(x - x_0) \left( \frac{dy}{dx} \frac{d^2z}{dx^2} - \frac{dz}{dx} \frac{d^2y}{dx^2} \right) - (y - y_0) \left( \frac{d^2z}{dx^2} \right) + (z - z_0) \frac{d^2y}{dx^2} = 0.$$

EXAMPLE.

Obtain the osculating plane of the helix at  $(x_0, y_0, z_0)$ .

217. The tangent plane at a given point of any surface

$$f(x, y, z) = 0$$

can be found by the aid of the equations of Art. 215.

Let 
$$F(x, y, z) = 0$$

be any second surface whatever passing through  $(x_0, y_0, z_0)$ .

The tangent line to the curve of intersection of the two surfaces at the point  $(x_0, y_0, z_0)$ , that is, to any curve through  $(x_0, y_0, z_0)$  traced on the given surface, has for its equations

$$\left. \begin{aligned} (x - x_0)D_{x_0}f + (y - y_0)D_{y_0}f + (z - z_0)D_{z_0}f &= 0 \\ (x - x_0)D_{x_0}F + (y - y_0)D_{y_0}F + (z - z_0)D_{z_0}F &= 0 \end{aligned} \right\}$$

It therefore lies in the plane represented by the first of these equations, which must then be the required tangent plane,

$$(x - x_0)D_{x_0}f + (y - y_0)D_{y_0}f + (z - z_0)D_{z_0}f = 0.$$

#### EXAMPLES.

(1) Find the tangent plane to a sphere.

$$x^2 + y^2 + z^2 = a^2.$$

$$\text{Ans. } x_0x + y_0y + z_0z = a^2.$$

(2) Find the tangent plane to an ellipsoid.

$$\frac{x^2}{a^2} + \frac{y^2}{b^2} + \frac{z^2}{c^2} = 1.$$

$$\text{Ans. } \frac{x_0x}{a^2} + \frac{y_0y}{b^2} + \frac{z_0z}{c^2} = 1.$$

The normal line at  $(x_0, y_0, z_0)$  is easily seen to be

$$\frac{x - x_0}{D_{x_0}f} = \frac{y - y_0}{D_{y_0}f} = \frac{z - z_0}{D_{z_0}f}.$$

CHAPTER XV.

DEVELOPMENT OF A FUNCTION OF SEVERAL VARIABLES.

218. To develop  $f(x + h, y + k)$  into a series arranged according to the powers of  $h$  and  $k$ , where  $h$  and  $k$  are any arbitrary increments that may be given. Let  $a$  be any variable, and call

$$\frac{h}{a} = h_1, \quad \frac{k}{a} = k_1,$$

so that  $h = ah_1$  and  $k = ak_1$ .

If now  $x$  and  $y$  are regarded as given values,  $f(x + h, y + k)$  is a function of  $h$  and  $k$ , which depend on  $a$ ; and hence  $f(x + h, y + k)$  can be considered a function of  $a$ . Call it  $Fa$ , and it may be developed by Maclaurin's Theorem, which gives

$$Fa = F0 + aF'0 + \frac{a^2}{2!} F''0 + \frac{a^3}{3!} F'''0 + \dots$$

$$+ \frac{a^n}{n!} F^{(n)}0 + \frac{a^{n+1}}{(n+1)!} F^{(n+1)}\theta a.$$

When  $a = 0$ ,

$$Fa \text{ or } F(x + h, y + k) = f(x, y).$$

Call  $x + ah_1 = x'$  and  $y + ak_1 = y'$ ,

then  $Fa = f(x', y')$ ,

$$F'a = \frac{df(x', y')}{da} = D_x f(x', y') \frac{dx'}{da} + D_y f(x', y') \frac{dy'}{da},$$

by Art. 199 ;

$$\frac{dx'}{da} = h_1,$$

$$\frac{dy'}{da} = k_1,$$

$$F' a = h_1 D_x f(x', y') + k_1 D_y f(x', y'),$$

$$F' 0 = h_1 D_x f(x, y) + k_1 D_y f(x, y),$$

which we shall write  $h_1 D_x f + k_1 D_y f$ .

$$\begin{aligned} F'' a &= \frac{dF' a}{da} = h_1 D_x F' a + k_1 D_y F' a \\ &= h_1^2 D_x^2 f(x', y') + 2h_1 k_1 D_x D_y f(x', y') + k_1^2 D_y^2 f(x', y'), \\ F''' a &= h_1^3 D_x^3 f(x', y') + 3h_1^2 k_1 D_x^2 D_y f(x', y') \\ &\quad + 3h_1 k_1^2 D_x D_y^2 f(x', y') + k_1^3 D_y^3 f(x', y'). \end{aligned}$$

In  $F'' a$  and  $F''' a$  the terms have a striking resemblance to the terms of the second and third powers of a binomial. Let us see whether this will hold for higher derivatives. Assume that it holds for the  $F^{(n)} a$ , and see if it holds for the  $F^{(n+1)} a$ .

$$\begin{aligned} \text{If } F^{(n)} a &= h_1^n D_x^n f(x', y') + n h_1^{n-1} k_1 D_x^{n-1} D_y f(x', y') \\ &\quad + \frac{n(n-1)}{2!} h_1^{n-2} k_1^2 D_x^{n-2} D_y^2 f(x', y') \\ &\quad + \frac{n(n-1)(n-2)}{3!} h_1^{n-3} k_1^3 D_x^{n-3} D_y^3 f(x', y') + \dots \\ F^{(n+1)} a &= h_1 D_x F^{(n)} a + k_1 D_y F^{(n)} a \\ &= h_1^{n+1} D_x^{n+1} f(x', y') + (n+1) h_1^n k_1 D_x^n D_y f(x', y') \\ &\quad + \frac{(n+1)n}{2!} h_1^{n-1} k_1^2 D_x^{n-1} D_y^2 f(x', y') + \dots \end{aligned}$$

If, then, the observed analogy holds for any derivative, it holds for the next higher. It does hold for the third; it holds then for the fourth, and for all succeeding ones.

$$\begin{aligned}
 F''0 &= h_1^2 D_x^2 f + 2h_1 k_1 D_x D_y f + k_1^2 D_y^2 f, \\
 F^{(n)}0 &= h_1^n D_x^n f + n h_1^{n-1} k_1 D_x^{n-1} D_y f \\
 &\quad + \frac{n(n-1)}{2!} h_1^{n-2} k_1^2 D_x^{n-2} D_y^2 f + \dots \\
 F^{(n+1)}\theta a &= h_1^{n+1} D_x^{n+1} f(x + \theta h, y + \theta k) \\
 &\quad + (n+1) h_1^n k_1 D_x^n D_y f(x + \theta h, y + \theta k) + \dots
 \end{aligned}$$

By this notation we mean that  $x + \theta h, y + \theta k$ , are to be substituted for  $x$  and  $y$  after the differentiations are performed.

We have then, remembering that

$$ah_1 = h \text{ and } ak_1 = k,$$

$$\begin{aligned}
 f(x + h, y + k) &= f(x, y) + (hD_x f + kD_y f) \\
 &\quad + \frac{1}{2!} (h^2 D_x^2 f + 2hk D_x D_y f + k^2 D_y^2 f) \\
 &\quad + \frac{1}{3!} (h^3 D_x^3 f + 3h^2 k D_x^2 D_y f + 3hk^2 D_x D_y^2 f + k^3 D_y^3 f) + \dots \\
 &\quad + \frac{1}{n!} \left( h^n D_x^n f + n h^{n-1} k D_x^{n-1} D_y f + \frac{n(n-1)}{2!} h^{n-2} k^2 D_x^{n-2} D_y^2 f + \dots \right) \\
 &\quad + \frac{1}{(n+1)!} \left( h^{n+1} D_x^{n+1} f(x + \theta h, y + \theta k) \right. \\
 &\quad \quad \left. + (n+1) h^n k D_x^n D_y f(x + \theta h, y + \theta k) \right. \\
 &\quad \quad \left. + \frac{(n+1)n}{2} h^{n-1} k^2 D_x^{n-1} D_y^2 f(x + \theta h, y + \theta k) + \dots \right).
 \end{aligned}$$

If we use  $(hD_x + kD_y)^n f$  as an abbreviation for  $(h^n D_x^n f + n h^{n-1} k D_x^{n-1} D_y f + \dots)$ ; that is, understanding that  $(hD_x + kD_y)^n$

is to be expanded just as though it were a binomial, and then to have each term written before  $f$ , we can simplify the above expression.

$$\begin{aligned} f(x+h, y+k) &= f(x, y) + (hD_x + kD_y)f(x, y) \\ &+ \frac{1}{2!} (hD_x + kD_y)^2 f(x, y) + \frac{1}{3!} (hD_x + kD_y)^3 f(x, y) + \dots \\ &+ \frac{1}{n!} (hD_x + kD_y)^n f(x, y) \\ &+ \frac{1}{(n+1)!} (hD_x + kD_y)^{n+1} f(x + \theta h, y + \theta k), \end{aligned}$$

which is Taylor's Theorem for two independent variables.

If we let  $x = 0$  and  $y = 0$ ,

we get 
$$f(h, k) = f(0, 0) + (hD_x + kD_y)f(0, 0) + \frac{1}{2!} (hD_x + kD_y)^2 f(0, 0) + \dots;$$

or, changing  $h$  and  $k$  to  $x$  and  $y$ ,

$$\begin{aligned} f(x, y) &= f(0, 0) + (xD_x + yD_y)f(0, 0) \\ &+ \frac{1}{2!} (xD_x + yD_y)^2 f(0, 0) + \frac{1}{3!} (xD_x + yD_y)^3 f(0, 0) + \dots \\ &+ \frac{1}{n!} (xD_x + yD_y)^n f(0, 0) + \frac{1}{(n+1)!} (xD_x + yD_y)^{n+1} f(\theta x, \theta y), \end{aligned}$$

which is Maclaurin's Theorem for two variables.

#### EXAMPLE.

Transform  $Ax^2 + Bxy + Cy^2 + Dx + Ey + F = 0$

to  $(x_0, y_0)$  as a new origin, the formulas for transformation being

$$x = x_0 + x', \quad y = y_0 + y'.$$



Call our given equation  $f(x, y)$ ; we wish to develop

$$f(x_0 + x', y_0 + y').$$

$$f(x_0 + x', y_0 + y') = f(x_0, y_0) + (x'D_{x_0} + y'D_{y_0})f(x_0, y_0)$$

$$+ \frac{1}{2!} (x'D_{x_0} + y'D_{y_0})^2 f(x_0, y_0) + \dots$$

$$D_x f(x, y) = 2Ax + By + D,$$

$$D_y f(x, y) = Bx + 2Cy + E,$$

$$D_x^2 f(x, y) = 2A,$$

$$D_x D_y f(x, y) = B,$$

$$D_y^2 f(x, y) = 2C;$$

all higher derivatives are 0.

$$f(x_0 + x', y_0 + y') = Ax_0^2 + Bx_0 y_0 + Cy_0^2 + Dx_0 + Ey_0 + F$$

$$+ (2Ax_0 + By_0 + D)x' + (Bx_0 + 2Cy_0 + E)y'$$

$$+ Ax'^2 + Bx'y' + Cy'^2, \quad \text{a familiar result.}$$

219. By like reasoning, Taylor's Theorem can be extended to functions of more than two variables. For three variables it becomes

$$f(x + h, y + k, z + l) = f(x, y, z) + (hD_x + kD_y + lD_z) f(x, y, z)$$

$$+ \frac{1}{2!} (hD_x + kD_y + lD_z)^2 f(x, y, z)$$

$$+ \frac{1}{3!} (hD_x + kD_y + lD_z)^3 f(x, y, z) + \dots$$

$$+ \frac{1}{(n+1)!} (hD_x + kD_y + lD_z)^{n+1} f(x + \theta h, y + \theta k, z + \theta l).$$

## EXAMPLE.

Transform  $x^2 + y^2 + z^2 - 4x + 6y - 2z - 11 = 0$

to the new origin  $(2, -3, 1)$ .

Ans.  $x^2 + y^2 + z^2 = 25$ .

*Euler's Theorem for Homogeneous Functions.*

220. A homogeneous function of several variables is one of such a nature that, if each variable be multiplied by some constant, the function is multiplied by a power of that constant. The order of the function is the power of the constant by which it is multiplied.

For example:  $x^2 + xy - y^2$  is homogeneous of the second order; for, if we change  $x$  into  $kx$  and  $y$  into  $ky$ , our function becomes  $k^2(x^2 + xy - y^2)$ , and is multiplied by the second power of  $k$ . Sin  $\frac{x-y}{2x}$  is homogeneous of the zero order; for, if we multiply  $x$  and  $y$  by  $k$ , the function is unchanged; that is, it is multiplied by  $k^0$ .

Let  $f(x, y)$  be a homogeneous function of  $x$  and  $y$ ; then, no matter what the value of  $q$ ,

$$\begin{aligned} f(x + qx, y + qy) &= f(x, y) + q(xD_x + yD_y)f(x, y) \\ &\quad + \frac{q^2}{2!} (xD_x + yD_y)^2 f(x, y) + \dots \\ &\quad + \frac{q^{m+1}}{(m+1)!} (xD_x + yD_y)^{m+1} f(x + q\theta x, y + q\theta y); \end{aligned}$$

but  $f(x + qx, y + qy) = f[(1+q)x, (1+q)y] = (1+q)^n f(x, y)$

by the definition of a homogeneous function.

Call  $f(x, y) = u$ , and we have

$$\begin{aligned} (1+q)^n u &= u + q(xD_x + yD_y)u + \frac{q^2}{2!} (xD_x + yD_y)^2 u \\ &\quad + \frac{q^3}{3!} (xD_x + yD_y)^3 u + \dots \end{aligned}$$

As this equation must hold, no matter what the value of  $q$ , the coefficients of like powers of  $q$  in the two members of the equation must be the same. Equating them, we have

$$u = u,$$

$$(xD_x + yD_y)u = nu,$$

$$(xD_x + yD_y)^2 u = n(n-1)u,$$

$$(xD_x + yD_y)^3 u = n(n-1)(n-2)u,$$

$$(xD_x + yD_y)^m u = n(n-1)(n-2)\dots(n-m+1)u;$$

and these equations are Euler's Theorem.

#### EXAMPLES.

Verify Euler's Theorem for second and third derivatives when

$$u = x^3 + y^3 \text{ and when } u = \sin^{-1} \frac{y}{x}.$$

## CHAPTER XVI.

## MAXIMA AND MINIMA OF FUNCTIONS OF TWO OR MORE VARIABLES.

221. If we have a function of two variables  $u = f(x, y)$ , and  $f(x_0 + h, y_0 + k) - f(x_0, y_0) < 0$  for small values of  $h$  and  $k$ , no matter what the signs and relative magnitudes of these values,  $u$  is a *maximum* for the values  $x_0, y_0$  of  $x$  and  $y$ . If  $f(x_0 + h, y_0 + k) - f(x_0, y_0) > 0$  under these same circumstances,  $u$  is a *minimum*. By Taylor's Theorem,

$$f(x_0 + h, y_0 + k) - f(x_0, y_0) = (hD_x + kD_y) f(x_0, y_0) + \frac{1}{2!} (hD_x + kD_y)^2 f(x_0 + \theta h, y_0 + \theta k).$$

If we take the values of  $h$  and  $k$  sufficiently small, we can always make  $\frac{1}{2} (hD_x + kD_y)^2 f(x_0 + \theta h, y_0 + \theta k) < (hD_x + kD_y) f(x_0, y_0)$ , and then the sign of the second member will be the sign of  $(hD_x + kD_y) f(x_0, y_0)$ ; that is, of  $hD_{x_0} u_0 + kD_{y_0} u_0$ , which evidently depends upon the signs of  $h$  and  $k$ . In order, then, that the sign of  $f(x_0 + h, y_0 + k) - f(x_0, y_0)$  should be constant, — that is, in order that for  $x_0, y_0$   $u$  should be either a maximum or a minimum, — the terms  $hD_x u + kD_y u$  must disappear, no matter what the values of  $h$  and  $k$ ; or, in other words,  $D_{x_0} u_0$  and  $D_{y_0} u_0$  must both equal 0. We get, then, as essential to the existence of either a maximum or a minimum, the conditions

$$D_x u = 0,$$

$$D_y u = 0,$$

for the values of  $x$  and  $y$  in question.

222. Carrying the development a step farther, and assuming that  $D_x u_0$  and  $D_y u_0$  are zero,

$$f(x_0 + h, y_0 + k) - f(x_0, y_0) = \frac{1}{2!} (hD_x + kD_y)^2 f(x_0, y_0) + \frac{1}{3!} (hD_x + kD_y)^3 f(x_0 + \theta h, y_0 + \theta k).$$

As before, it is evident that for small values of  $h$  and  $k$ , the sign of the whole second member will be that of the terms  $\frac{1}{2} (h^2 D_x^2 u_0 + 2hk D_x D_y u_0 + k^2 D_y^2 u_0)$ . Let us investigate this carefully.

Let

$$A = D_x^2 u_0,$$

$$B = D_x D_y u_0,$$

$$C = D_y^2 u_0,$$

our parenthesis becomes  $Ah^2 + 2Bhk + Ck^2$ ; and for a maximum or minimum the sign of this must be independent of the signs and values of  $h$  and  $k$ .

$$\begin{aligned} Ah^2 + 2Bhk + Ck^2 &= \frac{1}{A} (A^2 h^2 + 2ABhk + ACk^2), \\ &= \frac{1}{A} (A^2 h^2 + 2ABhk + B^2 k^2 - B^2 k^2 + ACk^2), \\ &= \frac{1}{A} [(Ah + Bk)^2 + (AC - B^2)k^2]. \end{aligned}$$

$(Ah + Bk)^2$  and  $k^2$  are necessarily positive. If  $AC - B^2$  is also positive, the sign of the whole expression will be independent of  $h$  and  $k$ , and will be positive if  $A$  is positive, and negative if

$A$  is negative. If  $AC - B^2 = 0$ , the result is the same;

but if  $AC - B^2$  is negative, the sign of the parenthesis will depend upon the sign and relative values of  $h$  and  $k$ , and we shall have neither a maximum nor a minimum.

223. To sum up :—

$$\text{If } \left. \begin{array}{l} D_{x_0} u_0 = 0 \\ D_{y_0} u_0 = 0 \\ D_{x_0}^2 u_0 D_{y_0}^2 u_0 - (D_{x_0} D_{y_0} u_0)^2 = \text{or } > 0 \\ D_{x_0}^2 u_0 < 0 \end{array} \right\} u_0 \text{ is a maximum.}$$

$$\text{If } \left. \begin{array}{l} D_{x_0} u_0 = 0 \\ D_{y_0} u_0 = 0 \\ D_{x_0}^2 u_0 D_{y_0}^2 u_0 - (D_{x_0} D_{y_0} u_0)^2 = \text{or } > 0 \\ D_{x_0}^2 u_0 > 0 \end{array} \right\} u_0 \text{ is a minimum.}$$

#### EXAMPLES.

224. (1) To find a point so situated that the sum of the squares of its distances from the three vertices of a given triangle shall be a minimum. Let  $(x_1, y_1)$ ,  $(x_2, y_2)$ ,  $(x_3, y_3)$  be the given vertices, and  $(x, y)$  the required point.

$$u = (x - x_1)^2 + (y - y_1)^2 + (x - x_2)^2 + (y - y_2)^2 \\ + (x - x_3)^2 + (y - y_3)^2$$

is the function which we must make a minimum.

$$D_x u = 2(x - x_1) + 2(x - x_2) + 2(x - x_3),$$

$$D_y u = 2(y - y_1) + 2(y - y_2) + 2(y - y_3),$$

$$D_x^2 u = 2 + 2 + 2 = 6 = A,$$

$$D_x D_y u = 0 = B,$$

$$D_y^2 u = 2 + 2 + 2 = 6 = C.$$

We must make  $D_x u$  and  $D_y u$  both equal to zero.

$$2(x - x_1) + 2(x - x_2) + 2(x - x_3) = 0,$$

$$x = \frac{x_1 + x_2 + x_3}{3},$$

$$2(y - y_1) + 2(y - y_2) + 2(y - y_3) = 0,$$

$$y = \frac{y_1 + y_2 + y_3}{3},$$

$$AC - B^2 = 36 - 0 > 0,$$

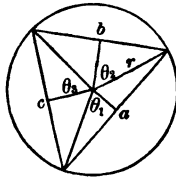
$$A = 6 > 0.$$

Hence  $u$  is a minimum when

$$x = \frac{x_1 + x_2 + x_3}{3} \text{ and } y = \frac{y_1 + y_2 + y_3}{3}.$$

The required point is the centre of gravity of the triangle.

(2) To inscribe in a circle a triangle of maximum perimeter. Join the centre with each vertex and with the middle point of



each side. The angles between the three radii are bisected by the lines drawn to the middle points of the sides. Call these half-angles  $\theta_1, \theta_2, \theta_3$ .

$$\frac{a}{2} + r = \sin \theta_1,$$

$$a = 2r \sin \theta_1,$$

$$b = 2r \sin \theta_2,$$

$$c = 2r \sin \theta_3,$$

$$2\theta_1 + 2\theta_2 + 2\theta_3 = 2\pi,$$

$$\theta_1 + \theta_2 + \theta_3 = \pi, \quad (1)$$

$$p = a + b + c = 2r(\sin \theta_1 + \sin \theta_2 + \sin \theta_3)$$

is the function we are to make a maximum, and is a function of two independent variables, say  $\theta_1$  and  $\theta_2$ ; for we can regard  $\theta_3$  as depending on  $\theta_1$  and  $\theta_2$  through equation (1). As  $r$  is a constant, it will be enough to make

$$u = \sin \theta_1 + \sin \theta_2 + \sin \theta_3 \quad \text{a maximum.}$$

$$D_{\theta_1} u = \cos \theta_1 + \cos \theta_3 D_{\theta_1} \theta_3;$$

for, since

$$\theta_1 + \theta_2 + \theta_3 = \pi,$$

changing  $\theta_1$  without changing  $\theta_2$  will change  $\theta_3$ .

$$D_{\theta_1} \theta_3 = -1;$$

hence

$$D_{\theta_1} u = \cos \theta_1 - \cos \theta_3.$$

•

$$D_{\theta_2} u = \cos \theta_2 - \cos \theta_3,$$

for

$$D_{\theta_2} \theta_3 = -1,$$

$$D_{\theta_1}^2 u = -\sin \theta_1 - \sin \theta_3,$$

$$D_{\theta_1} D_{\theta_2} u = -\sin \theta_3,$$

$$D_{\theta_2}^2 u = -\sin \theta_2 - \sin \theta_3.$$

Make

$$D_{\theta_1} u = 0 \text{ and } D_{\theta_2} u = 0.$$

$$\left. \begin{aligned} \cos \theta_1 - \cos \theta_3 &= 0 \\ \cos \theta_2 - \cos \theta_3 &= 0 \end{aligned} \right\}$$

$$\theta_1 = \theta_2 = \theta_3.$$



Substitute these values in  $D_{\theta_1^2}u$ , &c., and

$$D_{\theta_1^2}u = -2 \sin \theta_1 = A,$$

$$D_{\theta_1}D_{\theta_2}u = -\sin \theta_1 = B,$$

$$D_{\theta_2^2}u = -2 \sin \theta_1 = C,$$

$$AC - B^2 = 4 \sin^2 \theta_1 - \sin^2 \theta_1 = 3 \sin^2 \theta_1 > 0,$$

$$A = -2 \sin \theta_1 < 0, \text{ and } u \text{ is a maximum.}$$

Since

$$\theta_1 = \theta_2 = \theta_3,$$

$$a = b = c;$$

and the required triangle is equilateral.

(3) To inscribe in a circle a triangle of maximum area.

*Ans.* The triangle is equilateral.

225. Very often it is unnecessary to examine the second derivatives, as the nature of the problem enables one to determine whether the value of the variables obtained by writing the first derivatives equal to zero corresponds to maximum or minimum values of the function.

**EXAMPLES.**

(1) Required the form of a parallelopiped of given volume and minimum surface. *Ans.* A cube.

(2) Required the form of a parallelopiped of given surface and maximum volume. *Ans.* A cube.

(3) An open cistern in the form of a parallelopiped is to be built, capable of containing a given volume of water, what must be its form that the expense of lining its interior surface may be a minimum?

*Ans.* Length and breadth each double the depth.

## CHAPTER XVII.

## THEORY OF PLANE CURVES.

*Concavity and Convexity.*

226. The words concavity and convexity are used in mathematics in their ordinary sense. A curve is concave toward the axis of  $X$  when it bends toward the axis; convex, when it bends from the axis: that is, when in passing along the curve its inclination to the axis of  $X$  decreases, the curve is concave; when it increases, the curve is convex, supposing that the portion of the curve considered lies above the axis; if it lies below the axis, the rule just given must be reversed. We have seen that the tangent of this inclination, which we have called  $\tau$ , is equal to  $\frac{dy}{dx}$ . If the curve is concave and above the axis,  $\tau$  decreases as we increase  $x$ ,  $\tan \tau$  or  $\frac{dy}{dx}$  decreases, and  $\frac{d^2y}{dx^2} < 0$ , by Art. 37. If the curve is convex,  $\frac{d^2y}{dx^2} > 0$ .

227. A point at which the curve is changing from convexity to concavity, or from concavity to convexity, is called a *point of inflection*. At such a point,  $\frac{d^2y}{dx^2}$  is changing from a negative to a positive value, or from a positive to a negative value, and consequently must be passing through the value zero. To sum

up: if

$$y = fx$$

is the equation of a plane curve, at any point corresponding to

a value of  $x$  that makes  $\frac{d^2y}{dx^2} < 0$ , the curve is concave towards the axis of  $x$ , if above the axis; convex, if below. At any point corresponding to a value of  $x$  that makes  $\frac{d^2y}{dx^2} > 0$ , the curve is convex towards the axis of  $x$ , if above the axis; concave, if below. Any point corresponding to a value of  $x$  that

makes 
$$\frac{d^2y}{dx^2} = 0$$

is in general a point of inflection.

We have seen that the curvature,

$$k = \frac{-\frac{d^2y}{dx^2}}{\left[1 + \left(\frac{dy}{dx}\right)^2\right]^{\frac{3}{2}}}$$

It is easily seen that at a point of inflection this value changes sign.

228. These same tests for concavity, convexity, and inflection can be very simply obtained by the aid of Taylor's Theorem.

Let 
$$y = fx$$

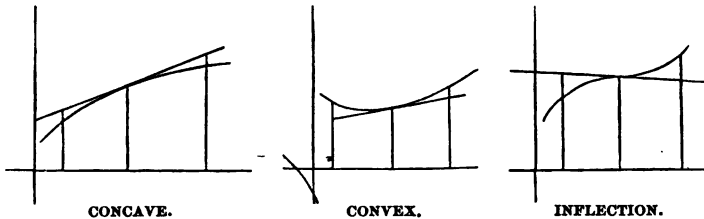
be the equation of a curve, and let it be required to discover whether the curve is concave or convex toward the axis of  $X$  at the point corresponding to the value

$$x = a.$$

Draw a tangent at the point in question, and erect ordinates to the curve and to the tangent near the point of contact.

It is evident that the ordinate of a point in the curve minus the ordinate of the corresponding point of the tangent must be negative on both sides of the point of contact, if the curve is *concave*, and positive on both sides of the point of contact, if the

curve is *convex*. If the point is a *point of inflection*, this difference will have opposite signs on different sides of the point.



The equation of the tangent at the point corresponding to

$$x = a$$

is  $y - fa = f'a(x - a)$ , by Art. 28, [1].

Let  $x = a + h$

in the equations of curve and tangent, and call the corresponding values of  $y$ ,  $y_1$  and  $y_2$ ; then

$$y_2 = fa + hf'a.$$

$$y_1 = fa + hf'a + \frac{h^2}{2!} f''a + \frac{h^3}{3!} f'''(a + \theta h),$$

by Taylor's Theorem.

$$y_1 - y_2 = \frac{h^2}{2!} f''a + \frac{h^3}{3!} f'''(a + \theta h).$$

If  $f''a$  does not equal zero,  $h$  may be taken so small that the sign of  $y_1 - y_2$  will be the sign of  $\frac{h^2}{2!} f''a$ .

If  $f''a$  is positive this sign is positive whether  $h$  is positive or negative, and the curve is convex. If  $f''a$  is negative,  $y_1 - y_2$  is negative both before and after  $x = a$ , and the curve is concave.

If  $f''a = 0$  and  $f'''a$  does not vanish, the sign of  $y_1 - y_2$  will change as the sign of  $h$  changes, and we shall have a point of inflection.

229. For example, let us see whether the curve

$$x^2 + y^2 = 25$$

is convex or concave towards the axis of  $X$  at the point  $(3,4)$ .

$$2xdx + 2ydy = 0. \tag{1}$$

$$2dx^2 + 2dy^2 + 2yd^2y = 0. \tag{2}$$

From (1) 
$$dy = -\frac{xdx}{y}.$$

Substitute in (2), 
$$2dx^2 + \frac{2x^2 dx^2}{y^2} + 2yd^2y = 0,$$

$$(x^2 + y^2)dx^2 + y^2 d^2y = 0,$$

$$25dx^2 + y^2 d^2y = 0.$$

$$\frac{d^2y}{dx^2} = -\frac{25}{y^2} = -\frac{25}{64} < 0$$

at the point  $(3,4)$ ; and the curve is concave.

Again, let us see whether the curve

$$y = x(x - a)^4 \text{ has points of inflection.}$$

$$\frac{dy}{dx} = (x - a)^4 + 4x(x - a)^3,$$

$$\frac{d^2y}{dx^2} = 8(x - a)^3 + 12x(x - a)^2,$$

$$\frac{d^3y}{dx^3} = 36(x - a)^2 + 24x(x - a),$$

$$\frac{d^4y}{dx^4} = 96(x - a) + 24x$$

Write

$$\frac{d^2y}{dx^2} = 0.$$

and we get  $8(x-a)^3 + 12x(x-a)^2 = 0$

or  $2(x-a)^3 + 3x(x-a)^2 = 0.$

One root is  $x = a;$

divide by  $(x-a)^2$ , and

$$2x - 2a + 3x = 0.$$

$x = \frac{2a}{5}$  is the remaining root.

If  $x = \frac{2a}{5},$

$\frac{d^2y}{dx^2}$  does not equal zero, and we get a point of inflection.

If  $x = a,$

$$\frac{d^3y}{dx^3} = 0,$$

$\frac{d^4y}{dx^4}$  does not equal zero, and the point is not a point of inflection.

#### EXAMPLES.

(1) If  $y = \frac{x^3}{a^2 + x^2},$

there is a point of inflection at the origin, and also when  $x = \pm a\sqrt{3}.$

(2) If  $\frac{y}{a} = \sqrt{\left(\frac{a-x}{x}\right)},$

there is a point of inflection when  $x = \frac{3a}{4}.$

(3) If  $x^{\frac{1}{2}} = \log y,$

there is a point of inflection when  $x = 8.$

(4) If  $xy = a^2 \log \frac{x}{a}$ ,


there is a point of inflection when  $x = ae^3$ .

*Singular Points.*

230. Singular points of a curve are points possessing some peculiarity independent of the position of the axes. Such points are, —

1. Points of inflection (Art. 228);
2. Multiple points;
3. Cusps;
4. Conjugate points;
5. Points d'arrêt;
6. Points saillant.

231. (2) A *multiple point* is one through which two or more branches of the curve pass. If only two branches pass through



DOUBLE POINT.



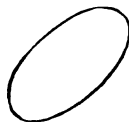
OSCULATING POINT.



CUSP.



CUSP.



CONJUGATE POINT.



POINT D'ARRÊT.



POINT SAILLANT.

the point, it is a *double point*. A double point at which the branches of the curve are tangent is an *osculating point*.

(3) An osculating point where both branches of the curve stop is a *cusp*.

(4) An isolated point of a curve is a *conjugate point*.

(5) A point at which a single branch of a curve suddenly stops is a *point d'arrêt*.

(6) A double point at which the two branches of the curve stop without being tangent to each other is a *point saillant*.

*Multiple Points.*

232. At a multiple point, the curve will in general have more than one tangent, and therefore  $\frac{dy}{dx}$  will have more than one value.

Let  $\varphi = 0$

be the equation of the curve in rational algebraic form.

$$\frac{dy}{dx} = \frac{-D_x \varphi}{D_y \varphi},$$

by Art. 202. For any given values of  $x$  and  $y$ ,  $D_x \varphi$  and  $D_y \varphi$  will have each a definite value, as they are rational polynomials; and  $\frac{dy}{dx}$  will have but one value, unless  $D_x \varphi$  and  $D_y \varphi$  are both zero,

in which case  $\frac{dy}{dx} = \frac{0}{0}$ , and is indeterminate;

hence, our fundamental condition for the existence of a multiple point is  $D_x \varphi = 0$  and  $D_y \varphi = 0$ .

To determine  $\frac{dy}{dx}$  in that case, we differentiate numerator and

denominator, 
$$\frac{dy}{dx} = -\frac{D_x^2 \varphi + D_x D_y \varphi \frac{dy}{dx}}{D_x D_y \varphi + D_y^2 \varphi \frac{dy}{dx}}. \quad (1)$$

Clearing of fractions gives us

$$D_y^2 \varphi \left(\frac{dy}{dx}\right)^2 + 2D_x D_y \varphi \frac{dy}{dx} + D_x^2 \varphi = 0, \quad (2)$$



a quadratic to determine  $\frac{dy}{dx}$ . Unless (1) is still indeterminate, that is, unless  $D_x^2 \varphi$ ,  $D_x D_y \varphi$ , and  $D_y^2 \varphi$  are all zero, we get two values of  $\frac{dy}{dx}$ , and the point is a *double point*.

If  $\frac{dy}{dx}$  is still indeterminate, we differentiate (1) again, and get

$$D_y^3 \varphi \left( \frac{dy}{dx} \right)^3 + 3D_x D_y^2 \varphi \left( \frac{dy}{dx} \right)^2 + 3D_x^2 D_y \varphi \frac{dy}{dx} + D_x^3 \varphi = 0,$$

to determine  $\frac{dy}{dx}$ . We have then three tangents at the point, which is a *triple point*.

233. If the values of  $\frac{dy}{dx}$  obtained from Art. 232 (2) are equal, the two tangents at the double point coincide, and the point is an *osculating point* or a *cusp*; and we cannot tell which except by actually tracing the curve in the neighborhood of the point.

If the two values of  $\frac{dy}{dx}$  are imaginary, no tangent can be drawn at the point, which is then a *conjugate point*.

A *point d'arrêt* or a *point saillant* can be discovered only by inspection when attempting to trace the curve; they occur only in transcendental curves.

EXAMPLE.

234. To investigate the existence of multiple points in the curve

$$x^4 - a^2 x^2 + a^2 y^2 = 0.$$

$$D_x \varphi = 4x^3 - 2a^2 x,$$

$$D_y \varphi = 2a^2 y,$$

$$D_x^2 \varphi = 12x^2 - 2a^2.$$

$$D_x D_y \varphi = 0,$$

$$D_y^2 \varphi = 2a^2,$$

$D_x \varphi$  and  $D_y \varphi$  must equal zero.

$$4x^2 - 2a^2 x = 0$$

if  $x = 0$  or if  $x = \pm \frac{a}{\sqrt{2}}$ .

$$2a^2 y = 0 \text{ if } y = 0;$$

hence  $x$  must equal zero, and  $y$  equal 0,

or  $x = \pm \frac{a}{\sqrt{2}}$  and  $y = 0$ ;

but  $\left(\pm \frac{a}{\sqrt{2}}, 0\right)$  is not a point of the curve; therefore we need consider only  $(0, 0)$ . In this case,

$$D_x^2 \varphi = -2a^2,$$

$$D_y^2 \varphi = 2a^2,$$

$$2a^2 \left(\frac{dy}{dx}\right)^2 - 2a^2 = 0,$$

$$\left(\frac{dy}{dx}\right)^2 = 1,$$

$$\frac{dy}{dx} = \pm 1,$$

and the origin is a double point of the curve, the two branches making with the axis of  $X$  angles of  $45^\circ$  and  $135^\circ$  respectively.

EXAMPLE.

235. Consider  $x^3 - y^2 = 0$ .

$$D_x \varphi = 3x^2,$$

$$D_y \varphi = -2y,$$

$$D_x^2 \varphi = 6x,$$

$$D_x D_y \varphi = 0,$$

$$D_y^2 \varphi = -2.$$

Make  $3x^2 = 0$  and  $-2y = 0$ .

We get  $\left. \begin{array}{l} x = 0 \\ y = 0 \end{array} \right\}$  as the only point we need consider here.

In this case,  $D_x^2 \varphi = 0,$

$$D_x D_y \varphi = 0,$$

$$D_y^2 \varphi = -2.$$

$$-2 \left( \frac{dy}{dx} \right)^2 = 0,$$

$$\frac{dy}{dx} = \pm 0.$$

The values of  $\frac{dy}{dx}$  are equal, and the origin is an *osculating point*, both branches being there tangent to the axis of X.

Since  $y^2 = x^3,$

it is easily seen that the curve lies to the right, and not to the left, of the origin, which is therefore a *cuspid*.

## EXAMPLE.

236.

$$bx^3 - x^3 + ay^2 = 0.$$

$$D_x \varphi = 2bx - 3x^2,$$

$$D_y \varphi = 2ay,$$

$$D_x^2 \varphi = 2b - 6x,$$

$$D_x D_y \varphi = 0,$$

$$D_y^2 \varphi = 2a,$$

$$\left. \begin{aligned} 2bx - 3x^2 = 0 \\ 2ay = 0 \end{aligned} \right\}$$

$$\left. \begin{aligned} x = 0 \\ y = 0 \end{aligned} \right\} \text{ is to be considered.}$$

At this point,

$$D_x^2 \varphi = 2b,$$

$$D_x D_y \varphi = 0,$$

$$D_y^2 \varphi = 2a,$$

$$2a \left( \frac{dy}{dx} \right)^2 + 2b = 0,$$

$$\left( \frac{dy}{dx} \right)^2 = -\frac{b}{a}.$$

If  $b$  and  $a$  have the same sign,  $\frac{dy}{dx}$  is imaginary, and the origin is a *conjugate point*; a result that can be easily verified by examining the equation.

## EXAMPLES.

(1) Show that the curve  $y = x \log x$  has a point d'arrêt at the origin.

✓

(2) Show that the curve  $y = \frac{x}{1 + e^x}$  has a point saillant at the origin, and find the directions of the tangents at that point.

(3) Show that  $(y - x)^2 = x^3$  and  $(y - x^2)^2 = x^5$  have cusps at the origin.

(4) Show that  $(xy + 1)^2 + (x - 1)^3(x - 2) = 0$  has a cusp at the point  $x = 1$ .

(5) Show that  $x^4 - ax^3y - axy^2 + a^2y^2 = 0$  has a conjugate point at the origin.

(6) Find the singular points in the following curves: —

$$(y + x + 1)^2 = (1 - x)^5;$$

$$y^4 - axy^2 + x^4 = 0;$$

$$y^3 = x^3 - x^4;$$

$$y^4 + xy^3 + x^2(ax - by) = 0.$$

*Contact of Curves.*

237. Let  $y = fx$  and  $y = Fx$

be the equations of two curves. If

$$fa = Fa,$$

the curves intersect at the point whose abscissa is  $a$ . If, in addition,

$$F'a = f'a,$$

the tangents at this point of intersection coincide, and the curves are said to have contact at the point in question. If

$$fa = Fa, \quad F'a = f'a, \quad \text{and} \quad F''a = f''a,$$

the curves have contact of the second order at the point. If

$$Fa = fa, F'a = f'a, F''a = f''a, \text{ etc., } F^{(n)}a = f^{(n)}a,$$

the curves are said to have contact of the  $n$ th order at the point whose abscissa is  $a$ .

Contact of a higher order than the first is called *osculation*.

238. The difference between the ordinates of points of the two curves having the same abscissa and infinitely near the point of contact, is an infinitesimal of an order one higher than the order of contact of the curves.

Let

$$x = a + \Delta x,$$

$$y_1 = f(a + \Delta x),$$

and

$$y_2 = F(a + \Delta x),$$

$$y_1 = fa + \Delta x f'a + \frac{(\Delta x)^2}{2!} f''a + \dots + \frac{(\Delta x)^n}{n!} f^{(n)}a$$

$$+ \frac{(\Delta x)^{n+1}}{(n+1)!} f^{(n+1)}(a + \theta \Delta x),$$

$$y_2 = Fa + \Delta x F'a + \frac{(\Delta x)^2}{2!} F''a + \dots + \frac{(\Delta x)^n}{n!} F^{(n)}a$$

$$+ \frac{(\Delta x)^{n+1}}{(n+1)!} F^{(n+1)}(a + \theta' \Delta x).$$

If the curves have contact of the  $n$ th order,

$$Fa = fa,$$

$$F'a = f'a, \text{ etc., } F^{(n)}a = f^{(n)}a.$$

$$y_1 - y_2 = \frac{(\Delta x)^{n+1}}{(n+1)!} [f^{(n+1)}(a + \theta \Delta x) - F^{(n+1)}(a + \theta' \Delta x)],$$

which is infinitesimal of the  $(n + 1)$ st order, if  $\Delta x$  is an infinitesimal. It follows, then, that the order of contact indicates the closeness of the contact; that is, the higher the order of contact of two curves, the less rapidly they recede from each other as they depart from the point of contact.

239. Let it be required to find the equation of the circle having contact of the second order with the curve

$$y = fx \quad \text{at the point } (x_1, y_1).$$

Let  $a$  and  $b$  be the coördinates of the centre, and  $r$  the radius of the required circle. Call  $(X, Y)$  any point of the required circle, then its equation is

$$(X - a)^2 + (Y - b)^2 = r^2.$$

By our conditions, 
$$\left(\frac{dY}{dX}\right)_{X=x_1} = \left(\frac{dy}{dx}\right)_{x=x_1},$$

$$\left(\frac{d^2Y}{dX^2}\right)_{X=x_1} = \left(\frac{d^2y}{dx^2}\right)_{x=x_1};$$

but

$$\frac{dY}{dX} = -\frac{X - a}{Y - b},$$

$$\left(\frac{dY}{dX}\right)_{X=x_1, Y=y_1} = -\frac{x_1 - a}{y_1 - b}.$$

$$\frac{d^2Y}{dX^2} = \frac{-r^2}{(Y - b)^3},$$

$$\left(\frac{d^2Y}{dX^2}\right)_{X=x_1, Y=y_1} = \frac{-r^2}{(y_1 - b)^3},$$

hence

$$\left. \begin{aligned} \left(\frac{dy}{dx}\right)_{x=x_1} &= -\frac{x_1 - a}{y_1 - b} \\ \left(\frac{d^2y}{dx^2}\right)_{x=x_1} &= \frac{-r^2}{(y_1 - b)^3} \end{aligned} \right\}$$

From these equations, and

$$(x_1 - a)^2 + (y_1 - b)^2 = r^2,$$

we can get the required values of  $a$ ,  $b$ , and  $r$ .

Dropping accents, for the sake of simplicity,

$$y - b = -\left(\frac{r^2}{\frac{d^2y}{dx^2}}\right)^{\frac{1}{2}},$$

$$x - a = \left(\frac{r^2}{\frac{d^2y}{dx^2}}\right)^{\frac{1}{2}} \frac{dy}{dx};$$

substituting in  $(x - a)^2 + (y - b)^2 = r^2$ ,

$$\left(\frac{r^2}{\frac{d^2y}{dx^2}}\right)^{\frac{1}{2}} + \left(\frac{r^2}{\frac{d^2y}{dx^2}}\right)^{\frac{1}{2}} \left(\frac{dy}{dx}\right)^2 = r^2,$$

$$r^{\frac{1}{2}} \left(\frac{d^2y}{dx^2}\right)^{\frac{1}{2}} = 1 + \left(\frac{dy}{dx}\right)^2,$$

$$r \frac{d^2y}{dx^2} = \pm \left[1 + \left(\frac{dy}{dx}\right)^2\right]^{\frac{1}{2}},$$

$$r = \pm \frac{\left[1 + \left(\frac{dy}{dx}\right)^2\right]^{\frac{1}{2}}}{\frac{d^2y}{dx^2}},$$

which is the familiar value of the radius of curvature of

$$y = fx$$

at the point  $(x, y)$ . Hence, our osculating circle is that circle having contact of the second order with the given curve at the point in question.

✓



EXAMPLES.

(1) In the curve  $y = x^4 - 4x^3 - 18x^2$ ,

show that the radius of curvature at the origin is  $\frac{1}{36}$ .

(2) Find the parabola whose axis is parallel to the axis of  $Y$ , which has the closest possible contact with the curve  $y = \frac{x^3}{a^2}$  at the point where  $x = a$ .

*Result.*  $\left(x - \frac{a}{2}\right)^2 = \frac{a}{3} \left(y - \frac{a}{4}\right)$ .

(3) Prove that, if the order of contact of two curves is even, they cross each other at the point of contact; if odd, they do not cross.

*Envelops.*

240. If the equation of a curve contain an undetermined constant, to different values of this constant will correspond different curves of a series. Such an equation is said to contain a *variable parameter*, the name being applied to a quantity which is constant for any one curve of a series, but varies in changing from one curve to another. For example: in the equation

$$(x - a)^2 + y^2 = r^2,$$

let  $a$  be a variable parameter; then the equation represents a series of circles, all having the radius  $r$ , and all having their centres on the axis of  $X$ .

A curve tangent to each of such a series of curves is called an *envelop*.

241. Two curves of such a series corresponding to two different values of the parameter will in general intersect. If they are made to approach each other indefinitely, by bringing the two values of the parameter nearer together, their point of intersection will evidently approach the enveloping curve, which then may be regarded as the *locus of the limiting position of a point*

of intersection of any two curves of the series as the curves are made to indefinitely approach. From this point of view the equation of an envelop is easily obtained.

$$\text{Let} \quad f(x, y, a) = 0 \quad (1)$$

be the given equation of the series of curves,  $a$  being a variable parameter.

$$f(x, y, a + \Delta a) = 0 \quad (2)$$

will be any second curve of the series. The equation

$$f(x, y, a + \Delta a) - f(x, y, a) = 0 \quad (3)$$

represents some curve passing through all the points of intersection of (1) and (2) by the principle in Analytic Geometry: "If  $u = 0$  and  $v = 0$  are the equations of two curves,  $u + kv = 0$  represents a curve containing all their points of intersection, and having no other point in common with them."

$$\frac{f(x, y, a + \Delta a) - f(x, y, a)}{\Delta a} = 0$$

is equivalent to (3). If, now,  $\Delta a$  be decreased indefinitely,

$$\lim_{\Delta a \rightarrow 0} \left[ \frac{f(x, y, a + \Delta a) - f(x, y, a)}{\Delta a} \right] = 0,$$

$$\text{or} \quad D_a f(x, y, a) = 0, \quad (4)$$

contains the limiting position of the point of intersection of (1) and (2). Let  $(x', y')$  be this point, and therefore any point of the required locus. Since  $(x', y')$  is on (4), and also on (1),

$$D_a f(x', y', a) = 0 \quad \text{and} \quad f(x', y', a) = 0;$$

we can eliminate  $a$  between these equations, and we shall have a single equation between  $x'$  and  $y'$ , which will be the equation of the required envelop.

242. For example: let us find the envelop of

$$(x - a)^2 + y^2 - r^2 = 0, \quad (1)$$

$a$  being a variable parameter.

$$\begin{aligned} D_a f &= -2(x - a) = 0. \\ x - a &= 0. \end{aligned} \quad (2)$$

Eliminating  $a$  between (1) and (2), we get

$$y^2 - r^2 = 0,$$

the equation of a pair of straight lines parallel to the axis of  $X$ , as the required envelop.

243. When dealing with the properties of evolutes, we proved that every normal to the original curve must be tangent to the evolute. We ought, then, to be able to find the evolute of any curve by treating it as the envelop of the normals of the curve.

Let  $y = fx$

be the equation of the original curve

$$y - y_0 = - \left( \frac{dx}{dy} \right)_{x=x_0} (x - x_0)$$

is the equation of the normal, or

$$\left( \frac{dy_0}{dx_0} \right) (y - y_0) + x - x_0 = 0. \quad (1)$$

$x_0$  is the variable parameter,

$$D_{x_0} f = \frac{d^2 y_0}{dx_0^2} (y - y_0) - \left( \frac{dy_0}{dx_0} \right)^2 - 1 = 0, \quad (2)$$

$$y = y_0 + \frac{1 + \left( \frac{dy_0}{dx_0} \right)^2}{\frac{d^2 y_0}{dx_0^2}},$$

$$x = x_0 - \frac{\frac{dy_0}{dx_0} \left[ 1 + \left( \frac{dy_0}{dx_0} \right)^2 \right]}{\frac{d^2y_0}{dx_0^2}};$$

but

$$y_0 = fx_0,$$

and we must eliminate  $x_0$  and  $y_0$ , by the aid of these three equations, to obtain the equation of the evolute. These equations are the ones obtained by a different method in Art. 93.

#### EXAMPLES.

(1) Find the envelop of all ellipses having constant area, the axes being coincident.

*Result.* A pair of equilateral hyperbolas.

(2) A straight line of given length moves with its extremities on the two axes, required its envelop. *Result.*  $x^2 + y^2 = a^2$ .

(3) Find the envelop of straight lines drawn perpendicular to the normals to a parabola  $y^2 = 4ax$  at the points where they cut the axis. *Result.*  $y^2 = 4a(2a - x)$ .

(4) Circles are described on the double ordinates of a parabola as diameters. Show that their envelop is an equal parabola.

(5) Find the envelop of all ellipses having the same centre, and in which the straight line joining the ends of the axes is of constant length. *Result.*  $x \pm y = \pm c$ .

(6) Show that the envelop of a circle on the focal radius of an ellipse as diameter is the circle on the major axis.

**ADVERTISEMENTS.**

Handwritten notes for General

Ex 11

$$\frac{1}{x^2} = x^{-2}$$

$$= -2x^{-3} = -\frac{2}{x^3}$$

Ex 12

Ex 13

Ex 14

Ex 15

### *The Method of Least Squares.*

With Numerical Examples of its Application. By GEORGE C. COMSTOCK, Professor of Astronomy in the University of Wisconsin, and Director of the Washburn Observatory. 8vo. Cloth. viii + 68 pages. Mailing Price, \$1.05; Introduction Price, \$1.00.

THIS work contains a presentation of the methods of treating observed numerical data which are in use among astronomers, physicists, and engineers. It has been written for the student, and presupposes only such mathematical attainments as are usually possessed by those who have completed the first two years of the curriculum of any of our better schools of science or engineering. Especial care has been taken to apply all of the leading principles of the method to numerical data selected from published observations, and to give the computations in full, so that they may serve the inexperienced computer as models.

It has been, throughout, the author's purpose to so present the subject that a working knowledge of the method, based upon an appreciation of its principles, may be acquired with a moderate expenditure of time and labor.

### *Peirce's Elements of Logarithms.*

With an explanation of the Author's Three and Four Place Tables. By Professor JAMES MILLS PEIRCE, of Harvard University. 12mo. Cloth. 80 pages. Mailing Price, 55 cents; Introduction, 50 cents.

THE design of the author has been to give to students a more complete and accurate knowledge of the nature and use of Logarithms than they can acquire from the cursory study commonly bestowed on this subject.

### *Mathematical Tables Chiefly to Four Figures.*

With full explanations. By Professor JAMES MILLS PEIRCE, of Harvard University. 12mo. Cloth. Mailing Price, 45 cents; Introduction, 40 cents.

### *Elements of the Differential Calculus.*

With numerous Examples and Applications. Designed for Use as a College Text-Book. By W. E. BYERLY, Professor of Mathematics, Harvard University. 8vo. 273 pages. Mailing Price, \$2.15; Introduction, \$2.00.

THE peculiarities of this treatise are the rigorous use of the Doctrine of Limits, as a foundation of the subject, and as preliminary to the adoption of the more direct and practically con-

venient infinitesimal notation and nomenclature; the early introduction of a few simple formulas and methods for integrating; a rather elaborate treatment of the use of infinitesimals in pure geometry; and the attempt to excite and keep up the interest of the student by bringing in throughout the whole book, and not merely at the end, numerous applications to practical problems in geometry and mechanics.

### Elements of the Integral Calculus.

Second Edition, revised and enlarged. By W. E. BYERLY, Professor of Mathematics in Harvard University. 8vo. xvi + 383 pages. Mailing Price, \$2.15; for introduction, \$2.00.

THIS work contains, in addition to the subjects usually treated in a text-book on the Integral Calculus, an introduction to Elliptic Integrals and Elliptic Functions; the Elements of the Theory of Functions; a Key to the Solution of Differential Equations; and a Table of Integrals.

The subject of Definite Integrals is much more fully treated than in the earlier edition, and in addition to the new matter, mentioned above, a chapter has been inserted on Line, Surface, and Space Integrals. The Key has been enlarged and improved, and the Table of Integrals, formerly published separately, has been much enlarged, and is now bound with the Calculus.

**John E. Clark**, *Prof. of Mathematics, Sheffield Scientific School of Yale University*: I thought very highly of the first edition of the work, and have frequently recommended it to my pupils. The additions to the present edition seem to me most judicious and to greatly enhance its value for the purposes of university instruction, for which in several important respects it seems to me better adapted than any other American text-book on the subject.

**A. S. Hardy**, *Prof. of Mathematics, Dartmouth College*: As a text-book, it is the most valuable work I have. Its form and general arrangement, especially in regard to the grouping

of results, make it useful above all other works of its class.

**W. C. Esty**, *Prof. of Mathematics, Amherst College, Amherst, Mass.*: Its value is greatly increased by the additions. It is a fine introduction to the topics on which it treats. It may well take its place beside the treatises of Todhunter and Williamson, as one of the best of hand-books for students and teachers of the higher mathematics.

**Wm. J. Vaughn**, *Prof. of Mathematics, Vanderbilt University*: It is pleasing to see the author avoiding, and in some cases leaving out of sight, the old ruts long since worn smooth by our teaching fathers.



## A Short Table of Integrals.

Revised and Enlarged Edition. To accompany *Byerly's Integral Calculus*. By B. O. PEIRCE, Jr., Instructor in Mathematics, Harvard University. 32 pages. Mailing Price, 15 cents. Bound also with the Calculus.

## Byerly's Syllabi.

By W. E. BYERLY, Professor of Mathematics in Harvard University. Each, 8 or 12 pages, 10 cents. The series includes, —

*Syllabus of a Course in Plane Trigonometry.*

*Syllabus of a Course in Plane Analytical Geometry.*

*Syllabus of a Course in Plane Analytic Geometry. (Advanced Course.)*

*Syllabus of a Course in Analytical Geometry of Three Dimensions.*

*Syllabus of a Course on Modern Methods in Analytic Geometry.*

*Syllabus of a Course in the Theory of Equations.*

## Elements of the Differential and Integral Calculus.

With Examples and Applications. By J. M. TAYLOR, Professor of Mathematics in Madison University. 8vo. Cloth. 249 pages. Mailing Price, \$1.95; Introduction Price, \$1.80.

THE aim of this treatise is to present simply and concisely the fundamental problems of the Calculus, their solution, and more common applications.

Many theorems are proved both by the method of rates and that of limits, and thus each is made to throw light upon the other. The chapter on differentiation is followed by one on direct integration and its more important applications. Throughout the work there are numerous practical problems in Geometry and Mechanics, which serve to exhibit the power and use of the science, and to excite and keep alive the interest of the student.

**The Nation, New York:** It has two marked characteristics. In the first place, it is evidently a most carefully written book. . . . We are acquainted with no text-book of the calculus which compresses so much matter into so few pages, and at the same time leaves the impression that

all that is necessary has been said. In the second place, the number of carefully selected examples, both of those worked out in full in illustration of the text, and of those left for the student to work out for himself, is extraordinary.

### Elementary Co-ordinate Geometry.

By W. B. SMITH, Professor of Physics, Missouri State University. 12mo. Cloth. 312 pages. Mailing Price, \$2.15; for introduction, \$2.00.

WHILE in the study of Analytic Geometry either gain of knowledge or culture of mind may be sought, the latter object alone can justify placing it in a college curriculum. Yet the subject may be so pursued as to be of no great educational value. Mere calculation, or the solution of problems by algebraic processes, is a very inferior discipline of reason. Even geometry is not the best discipline. In all thinking, the real difficulty lies in forming clear notions of things. In doing this all the higher faculties are brought into play. It is this formation of concepts, therefore, that is the essential part of mental training. And it is in line with this idea that the present treatise has been composed. Professors of mathematics speak of it as the most exhaustive work on the subject yet issued in America; and in colleges where an easier text-book is required for the regular course, this will be found of great value for post-graduate study.

Wm. G. Peck, *Prof. of Mathematics and Astronomy, Columbia College*: I have read Dr. Smith's *Co-ordinate Geometry* from beginning to end with unflagging interest. Its well compacted pages contain an immense amount of matter, most admirably arranged. It is an excellent book, and the author is entitled to the thanks of every lover of mathematical science for this valuable contribution to its literature. I shall recommend its adoption as a text-book in our graduate course.

### Elements of the Theory of the Newtonian Potential Function.

By B. O. PEIRCE, Assistant Professor of Mathematics and Physics, Harvard University. 12mo. Cloth. 154 pages. Mailing Price, \$1.60; for introduction, \$1.50.

THIS book was written for the use of Electrical Engineers and students of Mathematical Physics because there was in English no mathematical treatment of the Theory of the Newtonian Potential Function in sufficiently simple form. It gives as briefly as is consistent with clearness so much of that theory as is needed before the study of standard works on Physics can be taken up with advantage. In the second edition a brief treatment of Electrokinematics and a large number of problems have been added.

Academic Trigonometry : Plane and Spherical.

By T. M. BLAKSLEE, Ph.D. (Yale), Professor of Mathematics in the University of Des Moines. 12mo. Paper. 33 pages. Mailing Price, 20 cents; for introduction, 15 cents.

THE Plane and Spherical portions are arranged on opposite pages. The memory is aided by analogies, and it is believed that the entire subject can be mastered in less time than is usually given to Plane Trigonometry alone, as the work contains but 29 pages of text. The Plane portion is compact, and complete in itself.

Examples of Differential Equations.

By GEORGE A. OSBORNE, Professor of Mathematics in the Massachusetts Institute of Technology, Boston. 12mo. Cloth. vii + 50 pages. Mailing Price, 60 cents; for introduction, 50 cents.

A SERIES of nearly three hundred examples with answers, systematically arranged and grouped under the different cases, and accompanied by concise rules for the solution of each case.

Selden J. Coffin, lately Prof. of Mathematics, Lafayette College : Its appearance is most timely, and it supplies a manifest want.

Determinants.

The Theory of Determinants: an Elementary Treatise. By PAUL H. HANUS, B.S., recently Professor of Mathematics in the University of Colorado, now Principal of West High School, Denver, Col. 8vo. Cloth. viii + 217 pages. Mailing Price, \$1.90; for introduction, \$1.80.

THIS book is written especially for those who have had no previous knowledge of the subject, and is therefore adapted to self-instruction as well as to the needs of the class-room. The subject is at first presented in a very simple manner. As the reader advances, less and less attention is given to details. Throughout the entire work it is the constant aim to arouse and enliven the reader's interest, by first showing how the various concepts have arisen naturally, and by giving such applications as can be presented without exceeding the limits of the treatise.

William G. Peck, Prof. of Mathematics, Columbia College, N.Y. : A hasty glance convinces me that it is an improvement on Muir. (Aug. 30, 1886.)

T. W. Wright, Prof. of Mathematics, Union Univ., Schenectady, N.Y. : It fills admirably a vacancy in our mathematical literature, and is a very welcome addition indeed.

## Analytic Geometry.

By A. S. HARDY, Ph.D., Professor of Mathematics in Dartmouth College, and author of *Elements of Quaternions*. 8vo. Cloth. xiv + 239 pages. Mailing Price, \$1.60; for introduction, \$1.50.

THIS work is designed for the student, not for the teacher. Particular attention has been given to those fundamental conceptions and processes which, in the author's experience, have been found to be sources of difficulty to the student in acquiring a grasp of the subject as a *method of research*. The limits of the work are fixed by the time usually devoted to Analytic Geometry in our college courses by those who are not to make a special study in mathematics. It is hoped that it will prove to be a *text-book* which the teacher will wish to use in his class-room, rather than a *book of reference* to be placed on his study shelf.

**Oren Root**, *Professor of Mathematics, Hamilton College*: It meets quite fully my notion of a text for our classes. I have hesitated somewhat about introducing a generalized discussion of the conic in required work. I have, however, read Mr. Hardy's discussion carefully twice; and it seems to me that a student who can get the subject at all can get that. It is my present purpose to use the work next year.

**John E. Clark**, *Professor of Mathematics, Sheffield Scientific School of Yale College*: I need not hesitate to say, after even a cursory examination, that it seems to me a very attractive book, as I anticipated it

would be. It has evidently been prepared with real insight alike into the nature of the subject and the difficulties of beginners, and a very thoughtful regard to both; and I think its aims and characteristic features will meet with high approval. While leading the student to the usual useful results, the author happily takes especial pains to acquaint him with the character and spirit of analytical methods, and, so far as practicable, to help him acquire skill in using them.

**John R. French**, *Dean of College of Liberal Arts, Syracuse University*: It is a very excellent work, and well adapted to use in the recitation room.

## Elements of Quaternions.

By A. S. HARDY, Ph.D., Professor of Mathematics, Dartmouth College. *Second edition, revised*. Crown 8vo. Cloth. viii + 234 pages. Mailing Price, \$2.15; Introduction, \$2.00.

THE chief aim has been to meet the wants of beginners in the class-room, and it is believed that this work will be found superior in fitness for beginners in practical compass, in explanations and applications, and in adaptation to the methods of instruction common in this country.

### Elements of Plane Analytic Geometry.

By JOHN D. RUNKLE, Walker Professor of Mathematics in the Massachusetts Institute of Technology, Boston. 8vo. Cloth. ii + 344 pages. Mailing Price, \$2.25; for introduction, \$2.00.

IN this work, the author has had particularly in mind the needs of those students who can devote but a limited time to the subject, and yet must become quite familiar with at least its more elementary and fundamental part. For this reason, the earlier chapters are treated with somewhat more fulness than is usual. For some propositions, more than a single proof is given, and particular care has been taken to illustrate and enforce all parts of the subject by a large number of numerical applications. In the matter of problems, only the simpler ones have been selected, and the number has in every case been proportioned to the time that the students will have to devote to them. In general, propositions have been proved first with reference to rectangular axes. The determinant notation has not been used.

### Descriptive Geometry.

By LINUS FAUNCE, Assistant Professor of Descriptive Geometry and Drawing in the Massachusetts Institute of Technology. 8vo. Cloth. 54 pages, with 16 lithographic plates, including 88 diagrams. Mailing Price, \$1.35; for introduction, \$1.25.

IN addition to the ordinary problems of Descriptive Geometry, this work includes a number of practical problems, such as might be met with by the draughtsman at any time, showing the application of the principles of Descriptive Geometry, a feature hitherto omitted in text-books on this subject. All of the problems have been treated clearly and concisely. The author's sole aim has been to present a work of practical value, not only as a text-book for schools and colleges, but also for every draughtsman.

The contents are: Chap. I., Elementary Principles; Notation. Chap. II., Problems relating to the Point, Line, and Plane. Chap. III., Principles and Problems relating to the Cylinder, Cone, and Double Curved Surfaces of Revolution. Chap. IV., Intersection of Planes and Solids, and the Development of Solids; Cylinders; Cones; Double Curved Surfaces of Revolution; Solids bounded by Plane Surfaces. Chap. V., Intersection of Solids. Chap. VI. Miscellaneous Problems.

### Handbook of Arithmetic.

By G. C. SHUTTS, formerly Professor of Mathematics at the Potsdam State Normal School, N.Y., now of the Whitewater Normal School, Wis. 12mo. Paper. vi + 69 pages. Mailing Price, 30 cents; for Introd., 25 cts.

THIS is designed as a text-book for the method and teachers' classes of normal schools and academies, and also as a help to regular teachers in their preparation for class work. An outline for a course of nine years, of forty weeks each, is presented. The author's aim is to unify the work of teaching arithmetic.

### Arithmetical Reviews.

By J. L. PATTERSON, D.Sc., Mathematical Master in the Lawrenceville School. 12mo. Paper. 26 pages. Mailing Price, 12 cents; Introduction and Teachers' Price, 10 cents.

THE object of this pamphlet is to present the essentials of arithmetic in a form convenient for review.

### Primary Number Cards.

Prepared by Miss ISABEL SHOVE, of the George Putnam School, Boston. Printed on card-board, and boxed in sets of 60. Introduction Price, 25 cts.

THESE cards are arranged to cover the work of the second year in the primary school. Each card has one example in addition, subtraction, multiplication, and division, the simplest work being on the first numbers. Most of the words have been taken from the Primer and Second Readers.

### Fractions.

A Teachers' Manual of Objective and Oral Work. By HELEN F. PAGE, State Normal and Training School, New Britain, Conn. 8vo. Boards. iv + 47 pages. Mailing Price, 35 cents; Introduction Price, 30 cents.

THIS handbook has been prepared to help teachers who are trying to present the subject of Common Fractions in a natural, interesting, and, at the same time, *systematic* manner. Sample lessons are given for objective work in all the operations, the material suggested being card-board discs and the measures yards, bushels, gallons, etc. Problems abound, and a system of illustration of fractional facts with color-diagrams is introduced. By means of this system, a child may teach himself a great deal in a short time.

*Pupils' Edition:* Containing over three hundred examples, illustrated with color-diagrams. 8vo. Boards. 52 pages. Mailing Price, 35 cents; Introduction Price, 30 cents.

# Latin Text-Books.

	INTROD. PRICE.
<b>ALLEN &amp; GREENOUGH: Latin Grammar</b> . . . . .	\$1.20
Cæsar (7 books, with vocabulary; illustrated) . . . . .	1.25
Cicero (13 orations, with vocabulary; illustrated) . . . . .	1.25
Sallust's Catiline . . . . .	.60
Cicero de Senectute . . . . .	.50
Ovid (with vocabulary) . . . . .	1.40
Preparatory Course of Latin Prose . . . . .	1.40
Latin Composition . . . . .	1.12
<b>ALLEN . . . . .</b>	
New Latin Method . . . . .	.90
Introduction to Latin Composition . . . . .	.90
Latin Primer . . . . .	.90
Latin Lexicon . . . . .	.90
Remnants of Early Latin . . . . .	.75
Germania and Agricola of Tacitus . . . . .	1.00
<b>BLACKBURN . . . . .</b>	
Essentials of Latin Grammar . . . . .	.70
Latin Exercises . . . . .	.60
Latin Grammar and Exercises (in one volume) . . . . .	1.00
<b>COLLAR &amp; DANIELL: Beginner's Latin Book</b> . . . . .	1.00
Latine Reddenda (paper) . . . . .	.75
Latine Reddenda and Voc. (cloth) . . . . .	.30
<b>COLLEGE SERIES OF LATIN AUTHORS.</b>	
Greenough's Satires and Epistles of Horace (text edition) \$0.20; (text and notes) . . . . .	1.25
<b>CROWELL . . . . .</b>	
Selections from the Latin Poets . . . . .	1.40
<b>CROWELL &amp; RICHARDSON: Brief History of Roman Lit. (BENDER)</b> 1.00	
<b>GREENOUGH . . . . .</b>	
Virgil:—	
Bucolics and 6 Books of Æneid (with vocab.) . . . . .	1.60
Bucolics and 6 Books of Æneid (without vocab.) . . . . .	1.12
Last 6 Books of Æneid, and Georgics (with notes) . . . . .	1.12
Bucolics, Æneid, and Georgics (complete, with notes) . . . . .	1.60
Text of Virgil (complete) . . . . .	.75
Vocabulary to the whole of Virgil . . . . .	1.00
<b>GINN &amp; Co. . . . .</b>	
Classical Atlas and Geography (cloth) . . . . .	2.00
<b>HALSEY . . . . .</b>	
Etymology of Latin and Greek . . . . .	1.12
<b>KEEP . . . . .</b>	
Essential Uses of the Moods in Greek and Latin . . . . .	.25
<b>KING . . . . .</b>	
Latin Pronunciation . . . . .	.25
<b>LEIGHTON . . . . .</b>	
Latin Lessons . . . . .	1.12
First Steps in Latin . . . . .	1.12
<b>MADVIG . . . . .</b>	
Latin Grammar (by THACHER) . . . . .	2.25
<b>PARKER &amp; PREBLE: Handbook of Latin Writing</b> . . . . .	.50
<b>PREBLE . . . . .</b>	
Terence's Adelphoe . . . . .	.25
<b>SHUMWAY . . . . .</b>	
Latin Synonymes . . . . .	.30
<b>STICKNEY . . . . .</b>	
Cicero de Natura Deorum . . . . .	1.40
<b>TETLOW . . . . .</b>	
Inductive Latin Lessons . . . . .	1.12
<b>TOMLINSON . . . . .</b>	
Manual for the Study of Latin Grammar . . . . .	.20
Latin for Sight Reading . . . . .	1.00
<b>WHITE (J. W.) . . . . .</b>	
Schmidt's Rhythmic and Metric . . . . .	2.50
<b>WHITE (J. T.) . . . . .</b>	
Junior Students' Latin-English Lexicon (mor.) . . . . .	1.75
English-Latin Lexicon (sheep) . . . . .	1.50
Latin-English and English-Latin Lexicon (sheep) . . . . .	3.00
<b>WHITON . . . . .</b>	
Auxilia Vergiliana; or, First Steps in Latin Prosody . . . . .	.15
Six Weeks' Preparation for Reading Cæsar . . . . .	.40

*Copies sent to Teachers for Examination, with a view to Introduction, on receipt of Introduction Price.*

**GINN & COMPANY, Publishers,**

BOSTON, NEW YORK, AND CHICAGO.

# GREEK TEXT-BOOKS.

		INTROD. PRICE.
Allen:	Medea of Euripides . . . . .	\$1.00
Flagg:	Hellenic Orations of Demosthenes . . . . .	1.00
	Seven against Thebes . . . . .	1.00
	Anacreontics . . . . .	.35
Goodwin:	Greek Grammar . . . . .	1.50
	Greek Reader . . . . .	1.50
	Greek Moods and Tenses . . . . .	1.50
	Selections from Xenophon and Herodotus . . . . .	1.50
Goodwin & White:	Anabasis, with vocabulary . . . . .	1.50
Harding:	Greek Inflection . . . . .	.50
Hogue:	Irregular Verbs of Attic Prose . . . . .	1.50
Jebb:	Introduction to Homer . . . . .	1.12
Kendrick:	Greek at Sight . . . . .	.15
Leighton:	New Greek Lessons . . . . .	1.20
Liddell & Scott:	Abridged Greek-English Lexicon . . . . .	1.90
	Unabridged Greek-English Lexicon . . . . .	9.40
Parsons:	Cebes' Tablet . . . . .	.75
Seymour:	Selected Odes of Pindar . . . . .	1.40
	Introduction to Language and Verse of Homer . . . . .	.75
	Homeric Vocabulary . . . . .	.75
	School Iliad, Books I.-III. \$1.25; Books I.-VI. . . . .	1.60
Sidgwick:	Greek Prose Composition . . . . .	1.50
Tarbell:	Philippics of Demosthenes . . . . .	1.00
Tyler:	Selections from Greek Lyric Poets . . . . .	1.00
White:	First Lessons in Greek . . . . .	1.20
	Schmidt's Rhythmic and Metric . . . . .	2.50
	Passages for Translation at Sight. Part IV.—Greek. . . . .	.80
	Œdipus Tyrannus of Sophocles . . . . .	1.12
	Stein's Dialect of Herodotus . . . . .	.10
Whiton:	Orations of Lysias . . . . .	1.00
College Series.	Beckwith:	Euripides' Bacchantes. Text and Notes, Paper, .95; Cloth, \$1.25; Text only, .20.
	D'Ooge:	Sophocles' Antigone. Text and Notes, Paper, \$1.10; Cloth, \$1.40; Text only, .20.
	Dyer:	Plato's Apology and Crito. Text and Notes, Paper, \$1.10; Cloth, \$1.40; Text only, .20.
	Flagg:	Euripides' Iphigenia among the Taurians. Text and Notes, Paper, \$1.10; Cloth, \$1.40; Text only, .20.
	Fowler:	Thucydides, Book V. Text and Notes, Paper, \$1.10; Cloth, \$1.40; Text only, .20.
	Humphreys:	Aristophanes' Clouds. Text and Notes, Paper, \$1.10; Cloth, \$1.40; Text only, .20.
	Manatt:	Xenophon's Hellenica, Books I.-IV. Text and Notes, Paper, \$1.35; Cloth, \$1.65; Text only, .20.
	Morris:	Thucydides, Book I. Text and Notes, Paper, \$1.35; Cloth, \$1.65; Text only, .20.
	Perrin:	Homer's Odyssey, Books I.-IV. Text and Notes, Paper, \$1.10; Cloth, \$1.40; Text only, .20.
	Richardson:	Æschines against Ctesiphon. Text and Notes, Paper, \$1.10; Cloth, \$1.40; Text only, .20.
	Seymour:	Homer's Iliad, Books I.-III. Text and Notes, Paper, \$1.10; Cloth, \$1.40; Text only, .20.
	Smith:	Thucydides, Book VII. Text and Notes, Paper, \$1.10; Cloth, \$1.40; Text only, .20.
	Towle:	Plato's Protagoras. Text and Notes, Paper, .95; Cloth, \$1.25; Text only, .20.

**GINN & COMPANY, Publishers, Boston, New York, and Chicago.**



# BOOKS IN HIGHER ENGLISH.

	<i>Intro. Price</i>
<b>Alexander:</b>	Introduction to the Study of Browning . . . \$1.00
<b>Allen:</b>	Reader's Guide to English History . . . . . .25
<b>Arnold:</b>	English Literature . . . . . .1.50
<b>Bancroft:</b>	A Method of English Composition . . . . . .50
<b>Browne:</b>	Shakspeare's Versification . . . . . .25
<b>Cook:</b>	Sidney's Defense of Poesy . . . . . .
	Shelley's Defense of Poesy . . . . . .
<b>Fulton &amp; Trueblood:</b>	Choice Readings . . . . . .1.50
	Chart Illustrating Principles of Vocal Expression . . . . . 2.00
<b>Garnett:</b>	English Prose from Elizabeth to Victoria . . . . .
<b>Genung:</b>	Handbook of Rhetorical Analysis . . . . . 1.12
	Practical Elements of Rhetoric . . . . . 1.25
<b>Gilmore:</b>	Outlines of the Art of Expression . . . . . .60
<b>Ginn:</b>	Scott's Lady of the Lake . . . . Bds., .35; Cloth, .50
	Scott's Tales of a Grandfather . . . . Bds., .40; Cloth, .50
	Selections from Ruskin . . . . Bds., .30; Cloth, .40
<b>Goldsmith:</b>	Vicar of Wakefield . . . . Bds., .30; Cloth, .50
<b>Grote &amp; Segur:</b>	The Two Great Retreats of History, Bds., .40; Cloth, .50
<b>Gummere:</b>	Handbook of Poetics . . . . . 1.00
<b>Hudson:</b>	Harvard Shakespeare:—20 Vol. Edition. Cloth, retail, 25.00
	10 Vol. Edition. Cloth, retail, 20.00
	New School Shakespeare. Each Play, Pa. .30; cloth, .45
	Essays on Education, English Studies, etc. . . . . .25
	Text-Book of Poetry and of Prose. Each . . . . . 1.25
	Pamphlet Selections, Prose and Poetry. Each . . . . .15
	Classical English Reader . . . . . 1.00
<b>Johnson:</b>	Rasselas . . . . . Bds., .30; Cloth, .40
<b>Lamb:</b>	Adventures of Ulysses . . . . Bds., .25; Cloth, .35
	Tales from Shakespeare . . . . Bds., .40; Cloth, .50
<b>Lockwood:</b>	Lessons in English . . . . . 1.12
	Bryant's Thanatopsis and Other Favorite Poems . . . . .10
<b>Minto:</b>	Characteristics of English Poets . . . . . 1.50
	Manual of English Prose Literature . . . . . 1.50
<b>Montgomery:</b>	Bunyan's Pilgrim's Progress . . . . .
	Heroic Ballads . . . . . Bds., .40; Cloth, .50
<b>Rolfe:</b>	Craik's English of Shakespeare . . . . . .90
<b>Scott:</b>	Guy Mannering, Ivanhoe, and Rob Roy.
	Each . . . . . Bds., .60; Cloth, .75
	Lay of the Last Minstrel . . . . Bds., .30; Cloth, .40
	Quentin Durward . . . . . Bds., .40; Cloth, .50
	Talisman . . . . . Bds., .50; Cloth, .60
<b>Sprague:</b>	Milton's Paradise Lost, and Lycidas . . . . . .45
	Irving's Sketch-Book (Selections). . . . . Bds., .25; Cloth, .35
<b>Thayer:</b>	The Best Elizabethan Plays . . . . . 1.25
<b>Thom:</b>	Shakespeare and Chaucer Examinations . . . . . 1.00

AND OTHER VALUABLE WORKS.

**GINN & COMPANY, Publishers,**  
BOSTON, NEW YORK, AND CHICAGO.

# SCIENCE AND HISTORY.

## NATURAL SCIENCE.

		INTROD. PRICE
<b>Everett:</b>	Vibratory Motion and Sound . . . . .	\$ 2.00
<b>Gage:</b>	Elements of Physics . . . . .	1.12
	Introduction to Physical Science . . . . .	1.00
<b>Hale:</b>	Little Flower-People . . . . .	.40
<b>Hill:</b>	Questions on Stewart's Physics . . . . .	.35
<b>Journal of Morphology</b>	. . . . .	(per vol.) 6.00
<b>Knight:</b>	Primer of Botany . . . . .	.30
<b>Williams:</b>	Introduction to Chemical Science . . . . .	.80

## PHILOSOPHICAL SCIENCE.

<b>Davidson:</b>	Rosmini's Philosophical System . . . . .	2.50
<b>Hickok:</b>	Philosophical Works . . . . .	.00
<b>Ladd:</b>	Lotze's Outlines of Metaphysic . . . . .	.80
	Lotze's Outlines of Philosophy of Religion . . . . .	.80
	Lotze's Outlines of Practical Philosophy . . . . .	.80
	Lotze's Outlines of Psychology . . . . .	.80
	Lotze's Outlines of Æsthetics . . . . .	.80
	Lotze's Outlines of Logic . . . . .	.80
<b>Seelye:</b>	Hickok's Mental Science (Empirical Psychology) . . . . .	1.12
	Hickok's Moral Science . . . . .	1.12

## POLITICAL SCIENCE.

<b>Clark:</b>	Philosophy of Wealth . . . . .	1.00
<b>Clark &amp; Giddings:</b>	The Modern Distributive Process . . . . . (retail)	.75
<b>Macy:</b>	Our Government . . . . .	.70
<b>Political Science Quarterly</b>	. . . . .	(per vol.) 3.00
<b>Seligman:</b>	Railway Tariffs and the Interstate Law . . . . . (retail)	.75

## HISTORY.

<b>Allen:</b>	Readers' Guide to English History . . . . .	.25
<b>Andrade:</b>	Historia do Brazil . . . . .	.75
<b>Fiske-Irving:</b>	Washington and His Country . . . . .	1.00
<b>Halsey:</b>	Genealogical and Chronological Chart . . . . .	.25
<b>Journal of Archæology</b>	. . . . .	(per vol.) 5.00
<b>Judson:</b>	Cæsar's Army . . . . .	1.00
<b>Montgomery:</b>	Leading Facts of English History . . . . .	1.12
	English History Reader . . . . .	.60
<b>Moore:</b>	Pilgrims and Puritans . . . . .	.60
<b>Myers:</b>	Mediæval and Modern History . . . . .	1.50
	Ancient History . . . . .	1.50

*Copies sent to Teachers for Examination, with a view to Introduction, on receipt of Introduction Price.*

**GINN & COMPANY, Publishers.**

BOSTON.

NEW YORK.

CHICAGO.

To find the equation of a plane  $xyz$  tangent to a given surface at a given point

Let  $f(x, y, z)$  be the given surface

Equation of plane through  $xyz$  is

$$A(x-x_1) + B(y-y_1) + C(z-z_1) = 0 \quad (1)$$

Draw through the pt  $xyz$  planes parallel to  $yz$  and  $xz$ . These will cut from the surface the lines

$$y - y_1 = t(x - x_1) \quad (2)$$

$$z - z_1 = s(x - x_1)$$

$$y - y_1 = \frac{dy_1}{dx_1} (x - x_1) \quad (2)$$

$$z - z_1 = \frac{dz_1}{dx_1} (x - x_1)$$

(1) will contain (2) the traces of (1) on the lines

$$- \frac{A}{B} t + B = - \frac{A}{t} \Rightarrow B = - \frac{A}{t}$$

$$A(x - x_1) - \frac{A}{t}(y - y_1) - \frac{A}{s}(z - z_1) = 0$$

$$(x - x_1) - \frac{1}{t}(y - y_1) - \frac{1}{s}(z - z_1) = 0$$

$$x - x_1 = \frac{1}{\frac{dy_1}{dx_1}} (y - y_1) - \frac{1}{\frac{dz_1}{dx_1}} (z - z_1) = 0$$

$$u = f(x, y, z) = 0$$

$$x - x_1 + \frac{du}{dy_1} (y - y_1) + \frac{du}{dz_1} (z - z_1) = 0$$

$$\left[ \frac{du}{dx} \right] = \frac{du}{dx} = \frac{du}{dy} \frac{dy}{dx} = 0$$

$$\frac{du}{dx} = \frac{du}{dy} (x - x_1) \frac{dy}{dx} + (y - y_1) \frac{du}{dy} - (z - z_1) \frac{du}{dz} = 0$$

$$\frac{dz}{dx} = - \frac{du}{du}$$

$y_1 = y_1, z_1 = z_1, \dots$

$$\begin{aligned}
 y_1 - y_1 &= \frac{dy_1}{dx_1} (x_1 - x_1) \\
 z_1 - z_1 &= \frac{dz_1}{dx_1} (x_1 - x_1)
 \end{aligned} \quad (1)$$

$$A(y_1 - y_1) + B(z_1 - z_1) = 0 \quad (2) \text{ Normal to } (1)$$

$$(2) \text{ is } \perp \text{ to } (1) \quad \therefore \text{ Direction of } (2) = \text{ direction of } (1)$$

$$\therefore k = -\frac{B}{A} + s = \frac{C}{A} \quad \therefore B = Ak \quad C = As$$

$$\text{Case (2) Pressure } x - y_1 + z_1(y_1 - y_1) + s'(z_1 - z_1) = 0$$

$$\text{or } x - y_1 + (y_1 - y_1) \frac{dy_1}{dx_1} + (z_1 - z_1) \frac{dz_1}{dx_1} = 0$$

20  
12  
13  
22  
16

$$u = f(x, y, z)$$

$$u_x = f_x(x, y, z)$$

$$u_{xx} = f_{xx}(x, y, z) = u_{xx} + \frac{du_x}{dx} f_x + \frac{du_x}{dy} f_y + \frac{du_x}{dz} f_z$$

$$\text{Proof } u_x = u + \frac{du_x}{dx} f_x + \frac{du_x}{dy} f_y + \frac{du_x}{dz} f_z + \dots$$

$$u_{xx} = \frac{d^2 u}{dx^2} + \frac{d^2 u}{dx dy} f_y + \frac{d^2 u}{dx dy^2} f_y^2 + \frac{d^2 u}{dx dy dz} f_z + \dots$$

$$\frac{d^2 u}{dx^2} = \frac{d^2 u}{dx^2} + \frac{d^2 u}{dx dy} f_y + \frac{d^2 u}{dx dy^2} f_y^2 + \dots$$

$$\frac{d^2 u}{dy^2} = \frac{d^2 u}{dy^2} + \frac{d^2 u}{dx dy} f_x + \dots$$

$$u^2 = u + \frac{du}{dx} f_x + \frac{d^2 u}{dx^2} f_x^2 + \frac{d^2 u}{dx dy} f_x f_y + \frac{d^2 u}{dx dy^2} f_y^2 + \dots$$

